

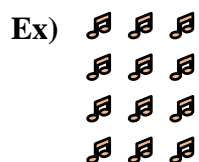




Write each array as an addition problem and solve.



Answers

Ex. $3+3+3+3=12$

1. _____

2. _____

3. _____

4. _____

5. _____

6. _____

7. _____

8. _____

9. _____


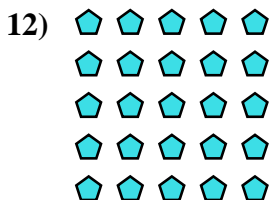
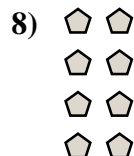
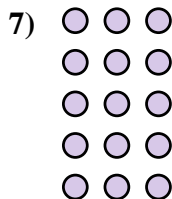
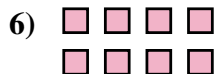
10. _____

11. _____

12. _____



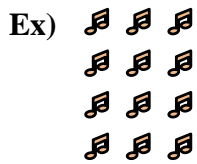
13. _____

14. _____





Write each array as an addition problem and solve.



Answers

Ex. 3+3+3+3=12

1. 5+5+5+5=20

2. 4+4+4+4+4=20

3. 5+5+5=15

4. 4+4+4+4=16

5. 2+2=4

6. 4+4=8

7. 3+3+3+3+3=15

8. 2+2+2+2=8

9. 2+2+2+2+2=10

10. 4+4+4=12

11. 3+3=6

12. 5+5+5+5+5=25

13. 2+2+2=6

14. 5+5=10

