
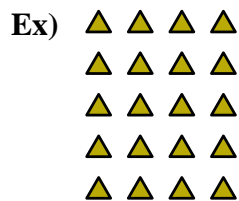




Write each array as an addition problem and solve.



Answers

Ex.  $4+4+4+4+4=20$

1. \_\_\_\_\_

2. \_\_\_\_\_

3. \_\_\_\_\_

4. \_\_\_\_\_

5. \_\_\_\_\_

6. \_\_\_\_\_

7. \_\_\_\_\_

8. \_\_\_\_\_

9. \_\_\_\_\_

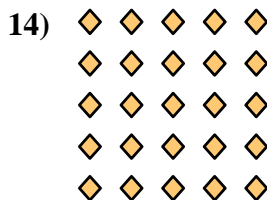



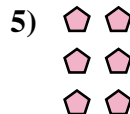
10. \_\_\_\_\_

11. \_\_\_\_\_

12. \_\_\_\_\_


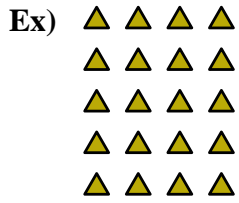
13. \_\_\_\_\_

14. \_\_\_\_\_





Write each array as an addition problem and solve.



Answers

Ex. 4+4+4+4+4=20

1. 2+2+2+2=8

2. 2+2=4

3. 3+3+3+3+3=15

4. 4+4+4+4=16

5. 2+2+2=6

6. 3+3+3+3=12

7. 2+2+2+2+2=10

8. 3+3+3=9

9. 3+3=6

10. 4+4+4=12

11. 5+5=10

12. 4+4=8

13. 5+5+5=15

14. 5+5+5+5+5=25

