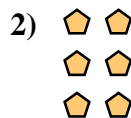
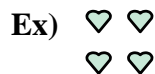






Write each array as an addition problem and solve.



Answers

Ex. $2+2=4$



1. _____

2. _____


3. _____

4. _____

5. _____

6. _____

7. _____

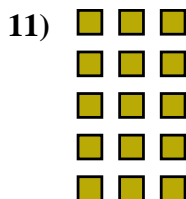



8. _____

9. _____

10. _____



11. _____



12. _____

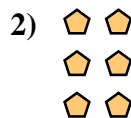
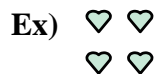
13. _____

14. _____







Write each array as an addition problem and solve.



Answers

Ex. 2+2=4





1. 3+3+3=9

2. 2+2+2=6

3. 3+3+3+3=12

4. 4+4+4=12

5. 2+2+2+2=8

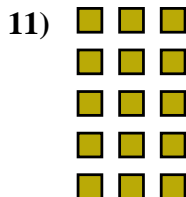


6. 4+4+4+4=16

7. 5+5+5=15

8. 5+5+5+5=20

9. 4+4=8





10. 3+3=6

11. 3+3+3+3+3=15

12. 2+2+2+2+2=10

13. 5+5=10



14. 4+4+4+4+4=20