



Find the change for each receipt.

Answers

1)

<u>Restaurant Supplies</u>	
Napkins	\$1.62
Forks	\$2.91
Plates	\$4.69
Cups	\$2.33
Spoons	\$3.72

If you paid with a 20 dollar bill, how much change would you receive?

2)

<u>Organic Fruits</u>	
Pears	\$4.54
Peaches	\$2.64
Oranges	\$4.05

If you paid with a 20 dollar bill, how much change would you receive?

1. _____

2. _____

3. _____

4. _____

5. _____

6. _____

3)

<u>Candy Shop</u>	
Chocolate	\$2.59
Hard Candy	\$4.97
Gummies	\$1.73
Lollipops	\$1.11
Caramel	\$4.57

If you paid with a 20 dollar bill, how much change would you receive?

4)

<u>Olivia's Office Supplies</u>	
Paper	\$1.61
Box of pens	\$4.20
Pack of pencils	\$2.25

If you paid with a 20 dollar bill, how much change would you receive?

5)

<u>John's Groceries</u>	
Cheese	\$3.11
Meat	\$2.99
Bread	\$2.06
Eggs	\$1.59
Milk	\$4.11

If you paid with a 20 dollar bill, how much change would you receive?

6)

<u>Clothing Store</u>	
Shirt	\$1.54
Pants	\$2.09
Hat	\$4.74
Socks	\$4.44
Shoes	\$2.76

If you paid with a 20 dollar bill, how much change would you receive?



Find the change for each receipt.

1)

<u>Restaurant Supplies</u>	
Napkins	\$1.62
Forks	\$2.91
Plates	\$4.69
Cups	\$2.33
Spoons	\$3.72
Total: \$15.27	

If you paid with a 20 dollar bill, how much change would you receive?

2)

<u>Organic Fruits</u>	
Pears	\$4.54
Peaches	\$2.64
Oranges	\$4.05
Total: \$11.23	

If you paid with a 20 dollar bill, how much change would you receive?

3)

<u>Candy Shop</u>	
Chocolate	\$2.59
Hard Candy	\$4.97
Gummies	\$1.73
Lollipops	\$1.11
Caramel	\$4.57
Total: \$14.97	

If you paid with a 20 dollar bill, how much change would you receive?

4)

<u>Olivia's Office Supplies</u>	
Paper	\$1.61
Box of pens	\$4.20
Pack of pencils	\$2.25
Total: \$8.06	

If you paid with a 20 dollar bill, how much change would you receive?

5)

<u>John's Groceries</u>	
Cheese	\$3.11
Meat	\$2.99
Bread	\$2.06
Eggs	\$1.59
Milk	\$4.11
Total: \$13.86	

If you paid with a 20 dollar bill, how much change would you receive?

6)

<u>Clothing Store</u>	
Shirt	\$1.54
Pants	\$2.09
Hat	\$4.74
Socks	\$4.44
Shoes	\$2.76
Total: \$15.57	

If you paid with a 20 dollar bill, how much change would you receive?

Answers

1. \$4.73

2. \$8.77

3. \$5.03

4. \$11.94

5. \$6.14

6. \$4.43



Find the change for each receipt.

Answers

\$4.43

\$4.73

\$6.14

\$5.03

\$8.77

\$11.94

1)

Restaurant Supplies

Napkins	\$1.62
Forks	\$2.91
Plates	\$4.69
Cups	\$2.33
Spoons	\$3.72

2)

Organic Fruits

Pears	\$4.54
Peaches	\$2.64
Oranges	\$4.05

If you paid with a 20 dollar bill, how much change would you receive?

If you paid with a 20 dollar bill, how much change would you receive?

1. _____

2. _____

3. _____

4. _____

5. _____

6. _____

3)

Candy Shop

Chocolate	\$2.59
Hard Candy	\$4.97
Gummies	\$1.73
Lollipops	\$1.11
Caramel	\$4.57

4)

Olivia's Office Supplies

Paper	\$1.61
Box of pens	\$4.20
Pack of pencils	\$2.25

If you paid with a 20 dollar bill, how much change would you receive?

If you paid with a 20 dollar bill, how much change would you receive?

5)

John's Groceries

Cheese	\$3.11
Meat	\$2.99
Bread	\$2.06
Eggs	\$1.59
Milk	\$4.11

6)

Clothing Store

Shirt	\$1.54
Pants	\$2.09
Hat	\$4.74
Socks	\$4.44
Shoes	\$2.76

If you paid with a 20 dollar bill, how much change would you receive?

If you paid with a 20 dollar bill, how much change would you receive?



Find the change for each receipt.

Answers

1)

<u>Organic Fruits</u>	
Pears	\$2.46
Oranges	\$4.99
Peaches	\$2.28

2)

<u>Clothing Store</u>	
Hat	\$4.53
Shoes	\$1.99
Socks	\$1.31

If you paid with a 20 dollar bill, how much change would you receive?

If you paid with a 20 dollar bill, how much change would you receive?

1. _____

2. _____

3. _____

4. _____

5. _____

6. _____

3)

<u>Movie Theater</u>	
Pickle	\$3.38
Nachos	\$2.85
Popcorn	\$3.73

4)

<u>Lumber Store</u>	
Screws	\$2.68
Ear Plugs	\$3.02
Board	\$3.44
Nails	\$3.93

If you paid with a 20 dollar bill, how much change would you receive?

If you paid with a 20 dollar bill, how much change would you receive?

5)

<u>Restaurant Supplies</u>	
Spoons	\$4.55
Napkins	\$1.81
Forks	\$2.50

6)

<u>Olivia's Office Supplies</u>	
Pack of pencils	\$4.17
Box of pens	\$4.98
Folders	\$4.25
Paper	\$1.15
Fasteners	\$4.27

If you paid with a 20 dollar bill, how much change would you receive?

If you paid with a 20 dollar bill, how much change would you receive?



Find the change for each receipt.

1)

<u>Organic Fruits</u>	
Pears	\$2.46
Oranges	\$4.99
Peaches	\$2.28
Total: \$9.73	

If you paid with a 20 dollar bill, how much change would you receive?

2)

<u>Clothing Store</u>	
Hat	\$4.53
Shoes	\$1.99
Socks	\$1.31
Total: \$7.83	

If you paid with a 20 dollar bill, how much change would you receive?

3)

<u>Movie Theater</u>	
Pickle	\$3.38
Nachos	\$2.85
Popcorn	\$3.73
Total: \$9.96	

If you paid with a 20 dollar bill, how much change would you receive?

4)

<u>Lumber Store</u>	
Screws	\$2.68
Ear Plugs	\$3.02
Board	\$3.44
Nails	\$3.93
Total: \$13.07	

If you paid with a 20 dollar bill, how much change would you receive?

5)

<u>Restaurant Supplies</u>	
Spoons	\$4.55
Napkins	\$1.81
Forks	\$2.50
Total: \$8.86	

If you paid with a 20 dollar bill, how much change would you receive?

6)

<u>Olivia's Office Supplies</u>	
Pack of pencils	\$4.17
Box of pens	\$4.98
Folders	\$4.25
Paper	\$1.15
Fasteners	\$4.27
Total: \$18.82	

If you paid with a 20 dollar bill, how much change would you receive?

Answers

1. \$10.27

2. \$12.17

3. \$10.04

4. \$6.93

5. \$11.14

6. \$1.18



Find the change for each receipt.

Answers

\$10.27

\$1.18

\$12.17

\$6.93

\$11.14

\$10.04

1. _____

1)

Organic Fruits

Pears	\$2.46
Oranges	\$4.99
Peaches	\$2.28

2)

Clothing Store

Hat	\$4.53
Shoes	\$1.99
Socks	\$1.31

2. _____

3. _____

4. _____

5. _____

6. _____

If you paid with a 20 dollar bill, how much change would you receive?

If you paid with a 20 dollar bill, how much change would you receive?

3)

Movie Theater

Pickle	\$3.38
Nachos	\$2.85
Popcorn	\$3.73

4)

Lumber Store

Screws	\$2.68
Ear Plugs	\$3.02
Board	\$3.44
Nails	\$3.93

If you paid with a 20 dollar bill, how much change would you receive?

If you paid with a 20 dollar bill, how much change would you receive?

5)

Restaurant Supplies

Spoons	\$4.55
Napkins	\$1.81
Forks	\$2.50

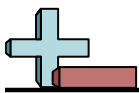
6)

Olivia's Office Supplies

Pack of pencils	\$4.17
Box of pens	\$4.98
Folders	\$4.25
Paper	\$1.15
Fasteners	\$4.27

If you paid with a 20 dollar bill, how much change would you receive?

If you paid with a 20 dollar bill, how much change would you receive?



Find the change for each receipt.

Answers

1)

<u>Sports Store</u>	
Baseball Cap	\$2.28
Baseball	\$2.68
Gloves	\$2.55
Glasses	\$1.16
Knee Pad	\$4.31

If you paid with a 20 dollar bill, how much change would you receive?

2)

<u>John's Groceries</u>	
Meat	\$4.24
Cheese	\$2.53
Eggs	\$2.71
Milk	\$3.49

If you paid with a 20 dollar bill, how much change would you receive?

1. _____

2. _____

3. _____

4. _____

5. _____

6. _____

3)

<u>Movie Theater</u>	
Soda	\$2.59
Nachos	\$4.14
Pickle	\$1.51
Popcorn	\$1.75

If you paid with a 20 dollar bill, how much change would you receive?

4)

<u>Lumber Store</u>	
Ear Plugs	\$1.38
Nails	\$3.07
Pencils	\$3.08

If you paid with a 20 dollar bill, how much change would you receive?

5)

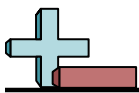
<u>Malt Shop</u>	
Burger	\$1.71
Soda	\$3.28
Shake	\$4.51
Malt	\$2.34

If you paid with a 20 dollar bill, how much change would you receive?

6)

<u>Organic Fruits</u>	
Apples	\$1.21
Cherries	\$1.00
Pears	\$2.83

If you paid with a 20 dollar bill, how much change would you receive?



Find the change for each receipt.

1)

<u>Sports Store</u>	
Baseball Cap	\$2.28
Baseball	\$2.68
Gloves	\$2.55
Glasses	\$1.16
Knee Pad	\$4.31
Total: \$12.98	

If you paid with a 20 dollar bill, how much change would you receive?

2)

<u>John's Groceries</u>	
Meat	\$4.24
Cheese	\$2.53
Eggs	\$2.71
Milk	\$3.49
Total: \$12.97	

If you paid with a 20 dollar bill, how much change would you receive?

3)

<u>Movie Theater</u>	
Soda	\$2.59
Nachos	\$4.14
Pickle	\$1.51
Popcorn	\$1.75
Total: \$9.99	

If you paid with a 20 dollar bill, how much change would you receive?

4)

<u>Lumber Store</u>	
Ear Plugs	\$1.38
Nails	\$3.07
Pencils	\$3.08
Total: \$7.53	

If you paid with a 20 dollar bill, how much change would you receive?

5)

<u>Malt Shop</u>	
Burger	\$1.71
Soda	\$3.28
Shake	\$4.51
Malt	\$2.34
Total: \$11.84	

If you paid with a 20 dollar bill, how much change would you receive?

6)

<u>Organic Fruits</u>	
Apples	\$1.21
Cherries	\$1.00
Pears	\$2.83
Total: \$5.04	

If you paid with a 20 dollar bill, how much change would you receive?

Answers

1. \$7.02

2. \$7.03

3. \$10.01

4. \$12.47

5. \$8.16

6. \$14.96



Find the change for each receipt.

Answers

\$8.16

\$10.01

\$12.47

\$7.02

\$14.96

\$7.03

1. _____

1)

Sports Store

Baseball Cap	\$2.28
Baseball	\$2.68
Gloves	\$2.55
Glasses	\$1.16
Knee Pad	\$4.31

2)

John's Groceries

Meat	\$4.24
Cheese	\$2.53
Eggs	\$2.71
Milk	\$3.49

2. _____

3. _____

4. _____

5. _____

6. _____

If you paid with a 20 dollar bill, how much change would you receive?

If you paid with a 20 dollar bill, how much change would you receive?

3)

Movie Theater

Soda	\$2.59
Nachos	\$4.14
Pickle	\$1.51
Popcorn	\$1.75

4)

Lumber Store

Ear Plugs	\$1.38
Nails	\$3.07
Pencils	\$3.08

If you paid with a 20 dollar bill, how much change would you receive?

If you paid with a 20 dollar bill, how much change would you receive?

5)

Malt Shop

Burger	\$1.71
Soda	\$3.28
Shake	\$4.51
Malt	\$2.34

6)

Organic Fruits

Apples	\$1.21
Cherries	\$1.00
Pears	\$2.83

If you paid with a 20 dollar bill, how much change would you receive?

If you paid with a 20 dollar bill, how much change would you receive?



Find the change for each receipt.

Answers

1)

Olivia's Office Supplies

Pack of pencils	\$3.88
Fasteners	\$2.35
Box of pens	\$2.74

If you paid with a 20 dollar bill, how much change would you receive?

2)

Restaurant Supplies

Forks	\$3.10
Napkins	\$3.09
Spoons	\$4.17

If you paid with a 20 dollar bill, how much change would you receive?

1. _____

2. _____

3. _____

4. _____

5. _____

6. _____

3)

Malt Shop

Soda	\$1.93
Shake	\$4.21
Malt	\$2.04

If you paid with a 20 dollar bill, how much change would you receive?

4)

Organic Fruits

Oranges	\$4.22
Apples	\$3.81
Pears	\$4.79

If you paid with a 20 dollar bill, how much change would you receive?

5)

Movie Theater

Pickle	\$4.69
Popcorn	\$2.19
Nachos	\$2.80
Candy	\$2.45

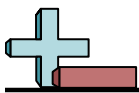
If you paid with a 20 dollar bill, how much change would you receive?

6)

Lumber Store

Ear Plugs	\$1.39
Pencils	\$1.72
Board	\$4.62

If you paid with a 20 dollar bill, how much change would you receive?



Find the change for each receipt.

1)

<u>Olivia's Office Supplies</u>	
Pack of pencils	\$3.88
Fasteners	\$2.35
Box of pens	\$2.74
Total: \$8.97	

If you paid with a 20 dollar bill, how much change would you receive?

2)

<u>Restaurant Supplies</u>	
Forks	\$3.10
Napkins	\$3.09
Spoons	\$4.17
Total: \$10.36	

If you paid with a 20 dollar bill, how much change would you receive?

3)

<u>Malt Shop</u>	
Soda	\$1.93
Shake	\$4.21
Malt	\$2.04
Total: \$8.18	

If you paid with a 20 dollar bill, how much change would you receive?

4)

<u>Organic Fruits</u>	
Oranges	\$4.22
Apples	\$3.81
Pears	\$4.79
Total: \$12.82	

If you paid with a 20 dollar bill, how much change would you receive?

5)

<u>Movie Theater</u>	
Pickle	\$4.69
Popcorn	\$2.19
Nachos	\$2.80
Candy	\$2.45
Total: \$12.13	

If you paid with a 20 dollar bill, how much change would you receive?

6)

<u>Lumber Store</u>	
Ear Plugs	\$1.39
Pencils	\$1.72
Board	\$4.62
Total: \$7.73	

If you paid with a 20 dollar bill, how much change would you receive?

Answers

1. \$11.03

2. \$9.64

3. \$11.82

4. \$7.18

5. \$7.87

6. \$12.27



Find the change for each receipt.

Answers

\$11.82

\$7.18

\$12.27

\$11.03

\$9.64

\$7.87

1. _____

1)

Olivia's Office Supplies

Pack of pencils	\$3.88
Fasteners	\$2.35
Box of pens	\$2.74

2)

Restaurant Supplies

Forks	\$3.10
Napkins	\$3.09
Spoons	\$4.17

2. _____

3. _____

4. _____

5. _____

6. _____

If you paid with a 20 dollar bill, how much change would you receive?

If you paid with a 20 dollar bill, how much change would you receive?

3)

Malt Shop

Soda	\$1.93
Shake	\$4.21
Malt	\$2.04

4)

Organic Fruits

Oranges	\$4.22
Apples	\$3.81
Pears	\$4.79

If you paid with a 20 dollar bill, how much change would you receive?

If you paid with a 20 dollar bill, how much change would you receive?

5)

Movie Theater

Pickle	\$4.69
Popcorn	\$2.19
Nachos	\$2.80
Candy	\$2.45

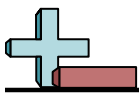
6)

Lumber Store

Ear Plugs	\$1.39
Pencils	\$1.72
Board	\$4.62

If you paid with a 20 dollar bill, how much change would you receive?

If you paid with a 20 dollar bill, how much change would you receive?



Find the change for each receipt.

Answers

1)

Olivia's Office Supplies

Fasteners	\$2.52
Folders	\$2.29
Paper	\$2.30
Pack of pencils	\$4.56

If you paid with a 20 dollar bill, how much change would you receive?

2)

Movie Theater

Soda	\$2.24
Candy	\$1.65
Pickle	\$3.21
Nachos	\$4.14
Popcorn	\$4.94

If you paid with a 20 dollar bill, how much change would you receive?

1. _____

2. _____

3. _____

4. _____

5. _____

6. _____

3)

Restaurant Supplies

Plates	\$2.79
Forks	\$2.86
Cups	\$1.87
Spoons	\$1.85

If you paid with a 20 dollar bill, how much change would you receive?

4)

John's Groceries

Cheese	\$4.06
Meat	\$1.73
Bread	\$2.09

If you paid with a 20 dollar bill, how much change would you receive?

5)

Organic Fruits

Peaches	\$4.53
Cherries	\$2.91
Oranges	\$3.05
Apples	\$3.78

If you paid with a 20 dollar bill, how much change would you receive?

6)

Lumber Store

Screws	\$3.18
Board	\$4.64
Nails	\$1.31
Pencils	\$2.54

If you paid with a 20 dollar bill, how much change would you receive?



Find the change for each receipt.

1)

<u>Olivia's Office Supplies</u>	
Fasteners	\$2.52
Folders	\$2.29
Paper	\$2.30
Pack of pencils	\$4.56
Total: \$11.67	

If you paid with a 20 dollar bill, how much change would you receive?

2)

<u>Movie Theater</u>	
Soda	\$2.24
Candy	\$1.65
Pickle	\$3.21
Nachos	\$4.14
Popcorn	\$4.94
Total: \$16.18	

If you paid with a 20 dollar bill, how much change would you receive?

3)

<u>Restaurant Supplies</u>	
Plates	\$2.79
Forks	\$2.86
Cups	\$1.87
Spoons	\$1.85
Total: \$9.37	

If you paid with a 20 dollar bill, how much change would you receive?

4)

<u>John's Groceries</u>	
Cheese	\$4.06
Meat	\$1.73
Bread	\$2.09
Total: \$7.88	

If you paid with a 20 dollar bill, how much change would you receive?

5)

<u>Organic Fruits</u>	
Peaches	\$4.53
Cherries	\$2.91
Oranges	\$3.05
Apples	\$3.78
Total: \$14.27	

If you paid with a 20 dollar bill, how much change would you receive?

6)

<u>Lumber Store</u>	
Screws	\$3.18
Board	\$4.64
Nails	\$1.31
Pencils	\$2.54
Total: \$11.67	

If you paid with a 20 dollar bill, how much change would you receive?

Answers

1. \$8.33

2. \$3.82

3. \$10.63

4. \$12.12

5. \$5.73

6. \$8.33



Find the change for each receipt.

Answers

\$8.33	\$10.63	\$12.12	\$5.73
\$3.82	\$8.33		

1) Olivia's Office Supplies

Fasteners	\$2.52
Folders	\$2.29
Paper	\$2.30
Pack of pencils	\$4.56

2) Movie Theater

Soda	\$2.24
Candy	\$1.65
Pickle	\$3.21
Nachos	\$4.14
Popcorn	\$4.94

If you paid with a 20 dollar bill, how much change would you receive?

If you paid with a 20 dollar bill, how much change would you receive?

3) Restaurant Supplies

Plates	\$2.79
Forks	\$2.86
Cups	\$1.87
Spoons	\$1.85

4) John's Groceries

Cheese	\$4.06
Meat	\$1.73
Bread	\$2.09

If you paid with a 20 dollar bill, how much change would you receive?

If you paid with a 20 dollar bill, how much change would you receive?

5) Organic Fruits

Peaches	\$4.53
Cherries	\$2.91
Oranges	\$3.05
Apples	\$3.78

6) Lumber Store

Screws	\$3.18
Board	\$4.64
Nails	\$1.31
Pencils	\$2.54

If you paid with a 20 dollar bill, how much change would you receive?

If you paid with a 20 dollar bill, how much change would you receive?

1. _____
2. _____
3. _____
4. _____
5. _____
6. _____



Find the change for each receipt.

1)

<u>Malt Shop</u>	
Shake	\$3.55
Burger	\$3.09
Hot Dog	\$2.89

If you paid with a 20 dollar bill, how much change would you receive?

2)

<u>John's Groceries</u>	
Milk	\$3.85
Bread	\$1.88
Meat	\$4.02
Cheese	\$2.59
Eggs	\$4.45

If you paid with a 20 dollar bill, how much change would you receive?

3)

<u>Lumber Store</u>	
Screws	\$4.62
Nails	\$4.85
Ear Plugs	\$1.99

If you paid with a 20 dollar bill, how much change would you receive?

4)

<u>Clothing Store</u>	
Hat	\$4.40
Pants	\$3.80
Shoes	\$1.88

If you paid with a 20 dollar bill, how much change would you receive?

5)

<u>Candy Shop</u>	
Gummies	\$4.41
Hard Candy	\$3.79
Lollipops	\$4.84

If you paid with a 20 dollar bill, how much change would you receive?

6)

<u>Sports Store</u>	
Baseball	\$3.36
Glasses	\$2.32
Gloves	\$1.53

If you paid with a 20 dollar bill, how much change would you receive?

Answers

1. _____

2. _____

3. _____

4. _____

5. _____

6. _____



Find the change for each receipt.

1)

<u>Malt Shop</u>	
Shake	\$3.55
Burger	\$3.09
Hot Dog	\$2.89
Total: \$9.53	

If you paid with a 20 dollar bill, how much change would you receive?

2)

<u>John's Groceries</u>	
Milk	\$3.85
Bread	\$1.88
Meat	\$4.02
Cheese	\$2.59
Eggs	\$4.45
Total: \$16.79	

If you paid with a 20 dollar bill, how much change would you receive?

3)

<u>Lumber Store</u>	
Screws	\$4.62
Nails	\$4.85
Ear Plugs	\$1.99
Total: \$11.46	

If you paid with a 20 dollar bill, how much change would you receive?

4)

<u>Clothing Store</u>	
Hat	\$4.40
Pants	\$3.80
Shoes	\$1.88
Total: \$10.08	

If you paid with a 20 dollar bill, how much change would you receive?

5)

<u>Candy Shop</u>	
Gummies	\$4.41
Hard Candy	\$3.79
Lollipops	\$4.84
Total: \$13.04	

If you paid with a 20 dollar bill, how much change would you receive?

6)

<u>Sports Store</u>	
Baseball	\$3.36
Glasses	\$2.32
Gloves	\$1.53
Total: \$7.21	

If you paid with a 20 dollar bill, how much change would you receive?

Answers

1. \$10.47

2. \$3.21

3. \$8.54

4. \$9.92

5. \$6.96

6. \$12.79



Find the change for each receipt.

Answers

\$9.92

\$6.96

\$3.21

\$10.47

\$8.54

\$12.79

1. _____

1)

Malt Shop

Shake	\$3.55
Burger	\$3.09
Hot Dog	\$2.89

2)

John's Groceries

Milk	\$3.85
Bread	\$1.88
Meat	\$4.02
Cheese	\$2.59
Eggs	\$4.45

2. _____

3. _____

4. _____

5. _____

6. _____

If you paid with a 20 dollar bill, how much change would you receive?

If you paid with a 20 dollar bill, how much change would you receive?

3)

Lumber Store

Screws	\$4.62
Nails	\$4.85
Ear Plugs	\$1.99

4)

Clothing Store

Hat	\$4.40
Pants	\$3.80
Shoes	\$1.88

If you paid with a 20 dollar bill, how much change would you receive?

If you paid with a 20 dollar bill, how much change would you receive?

5)

Candy Shop

Gummies	\$4.41
Hard Candy	\$3.79
Lollipops	\$4.84

6)

Sports Store

Baseball	\$3.36
Glasses	\$2.32
Gloves	\$1.53

If you paid with a 20 dollar bill, how much change would you receive?

If you paid with a 20 dollar bill, how much change would you receive?



Find the change for each receipt.

Answers

1)

<u>Clothing Store</u>	
Shoes	\$4.14
Socks	\$4.47
Shirt	\$3.19
Pants	\$1.92
Hat	\$1.22

If you paid with a 20 dollar bill, how much change would you receive?

2)

<u>Malt Shop</u>	
Soda	\$1.14
Shake	\$3.19
Burger	\$4.94

If you paid with a 20 dollar bill, how much change would you receive?

1. _____

2. _____

3. _____

4. _____

5. _____

6. _____

3)

<u>Sports Store</u>	
Baseball Cap	\$4.12
Glasses	\$4.58
Gloves	\$4.41

If you paid with a 20 dollar bill, how much change would you receive?

4)

<u>John's Groceries</u>	
Milk	\$4.78
Cheese	\$3.43
Meat	\$2.31
Eggs	\$3.81
Bread	\$1.70

If you paid with a 20 dollar bill, how much change would you receive?

5)

<u>Restaurant Supplies</u>	
Spoons	\$2.44
Plates	\$4.82
Forks	\$3.96

If you paid with a 20 dollar bill, how much change would you receive?

6)

<u>Candy Shop</u>	
Chocolate	\$1.05
Gummies	\$1.08
Lollipops	\$4.26
Hard Candy	\$3.36
Caramel	\$2.38

If you paid with a 20 dollar bill, how much change would you receive?



Find the change for each receipt.

1)

<u>Clothing Store</u>	
Shoes	\$4.14
Socks	\$4.47
Shirt	\$3.19
Pants	\$1.92
Hat	\$1.22
Total: \$14.94	

If you paid with a 20 dollar bill, how much change would you receive?

2)

<u>Malt Shop</u>	
Soda	\$1.14
Shake	\$3.19
Burger	\$4.94
Total: \$9.27	

If you paid with a 20 dollar bill, how much change would you receive?

3)

<u>Sports Store</u>	
Baseball Cap	\$4.12
Glasses	\$4.58
Gloves	\$4.41
Total: \$13.11	

If you paid with a 20 dollar bill, how much change would you receive?

4)

<u>John's Groceries</u>	
Milk	\$4.78
Cheese	\$3.43
Meat	\$2.31
Eggs	\$3.81
Bread	\$1.70
Total: \$16.03	

If you paid with a 20 dollar bill, how much change would you receive?

5)

<u>Restaurant Supplies</u>	
Spoons	\$2.44
Plates	\$4.82
Forks	\$3.96
Total: \$11.22	

If you paid with a 20 dollar bill, how much change would you receive?

6)

<u>Candy Shop</u>	
Chocolate	\$1.05
Gummies	\$1.08
Lollipops	\$4.26
Hard Candy	\$3.36
Caramel	\$2.38
Total: \$12.13	

If you paid with a 20 dollar bill, how much change would you receive?

Answers

1. \$5.06

2. \$10.73

3. \$6.89

4. \$3.97

5. \$8.78

6. \$7.87



Find the change for each receipt.

Answers

\$7.87

\$8.78

\$3.97

\$6.89

\$10.73

\$5.06

1. _____

1)

Clothing Store

Shoes	\$4.14
Socks	\$4.47
Shirt	\$3.19
Pants	\$1.92
Hat	\$1.22

2)

Malt Shop

Soda	\$1.14
Shake	\$3.19
Burger	\$4.94

2. _____

3. _____

4. _____

5. _____

6. _____

If you paid with a 20 dollar bill, how much change would you receive?

If you paid with a 20 dollar bill, how much change would you receive?

3)

Sports Store

Baseball Cap	\$4.12
Glasses	\$4.58
Gloves	\$4.41

4)

John's Groceries

Milk	\$4.78
Cheese	\$3.43
Meat	\$2.31
Eggs	\$3.81
Bread	\$1.70

If you paid with a 20 dollar bill, how much change would you receive?

If you paid with a 20 dollar bill, how much change would you receive?

5)

Restaurant Supplies

Spoons	\$2.44
Plates	\$4.82
Forks	\$3.96

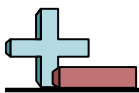
6)

Candy Shop

Chocolate	\$1.05
Gummies	\$1.08
Lollipops	\$4.26
Hard Candy	\$3.36
Caramel	\$2.38

If you paid with a 20 dollar bill, how much change would you receive?

If you paid with a 20 dollar bill, how much change would you receive?



Find the change for each receipt.

Answers

1)

<u>Malt Shop</u>	
Burger	\$3.01
Malt	\$3.62
Soda	\$3.56
Hot Dog	\$1.99

If you paid with a 20 dollar bill, how much change would you receive?

2)

<u>Olivia's Office Supplies</u>	
Folders	\$2.42
Box of pens	\$3.44
Fasteners	\$1.86
Paper	\$1.04
Pack of pencils	\$4.93

If you paid with a 20 dollar bill, how much change would you receive?

1. _____

2. _____

3. _____

4. _____

5. _____

6. _____

3)

<u>Restaurant Supplies</u>	
Napkins	\$2.16
Cups	\$2.63
Forks	\$3.24
Spoons	\$2.24
Plates	\$3.39

If you paid with a 20 dollar bill, how much change would you receive?

4)

<u>Movie Theater</u>	
Nachos	\$1.92
Popcorn	\$4.17
Soda	\$2.53
Candy	\$2.06
Pickle	\$3.34

If you paid with a 20 dollar bill, how much change would you receive?

5)

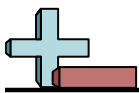
<u>Candy Shop</u>	
Hard Candy	\$3.45
Lollipops	\$1.34
Chocolate	\$4.91
Gummies	\$1.90
Caramel	\$1.09

If you paid with a 20 dollar bill, how much change would you receive?

6)

<u>John's Groceries</u>	
Meat	\$3.46
Milk	\$3.85
Cheese	\$4.67
Eggs	\$4.96

If you paid with a 20 dollar bill, how much change would you receive?



Find the change for each receipt.

1)

<u>Malt Shop</u>	
Burger	\$3.01
Malt	\$3.62
Soda	\$3.56
Hot Dog	\$1.99
Total: \$12.18	

If you paid with a 20 dollar bill, how much change would you receive?

2)

<u>Olivia's Office Supplies</u>	
Folders	\$2.42
Box of pens	\$3.44
Fasteners	\$1.86
Paper	\$1.04
Pack of pencils	\$4.93
Total: \$13.69	

If you paid with a 20 dollar bill, how much change would you receive?

3)

<u>Restaurant Supplies</u>	
Napkins	\$2.16
Cups	\$2.63
Forks	\$3.24
Spoons	\$2.24
Plates	\$3.39
Total: \$13.66	

If you paid with a 20 dollar bill, how much change would you receive?

4)

<u>Movie Theater</u>	
Nachos	\$1.92
Popcorn	\$4.17
Soda	\$2.53
Candy	\$2.06
Pickle	\$3.34
Total: \$14.02	

If you paid with a 20 dollar bill, how much change would you receive?

5)

<u>Candy Shop</u>	
Hard Candy	\$3.45
Lollipops	\$1.34
Chocolate	\$4.91
Gummies	\$1.90
Caramel	\$1.09
Total: \$12.69	

If you paid with a 20 dollar bill, how much change would you receive?

6)

<u>John's Groceries</u>	
Meat	\$3.46
Milk	\$3.85
Cheese	\$4.67
Eggs	\$4.96
Total: \$16.94	

If you paid with a 20 dollar bill, how much change would you receive?

Answers

1. \$7.82

2. \$6.31

3. \$6.34

4. \$5.98

5. \$7.31

6. \$3.06



Find the change for each receipt.

Answers

\$7.31	\$3.06	\$6.31	\$7.82
\$6.34	\$5.98		

1. _____
2. _____
3. _____
4. _____
5. _____
6. _____

1) Malt Shop

Burger	\$3.01
Malt	\$3.62
Soda	\$3.56
Hot Dog	\$1.99

2) Olivia's Office Supplies

Folders	\$2.42
Box of pens	\$3.44
Fasteners	\$1.86
Paper	\$1.04
Pack of pencils	\$4.93

If you paid with a 20 dollar bill, how much change would you receive?

If you paid with a 20 dollar bill, how much change would you receive?

3) Restaurant Supplies

Napkins	\$2.16
Cups	\$2.63
Forks	\$3.24
Spoons	\$2.24
Plates	\$3.39

4) Movie Theater

Nachos	\$1.92
Popcorn	\$4.17
Soda	\$2.53
Candy	\$2.06
Pickle	\$3.34

If you paid with a 20 dollar bill, how much change would you receive?

If you paid with a 20 dollar bill, how much change would you receive?

5) Candy Shop

Hard Candy	\$3.45
Lollipops	\$1.34
Chocolate	\$4.91
Gummies	\$1.90
Caramel	\$1.09

6) John's Groceries

Meat	\$3.46
Milk	\$3.85
Cheese	\$4.67
Eggs	\$4.96

If you paid with a 20 dollar bill, how much change would you receive?

If you paid with a 20 dollar bill, how much change would you receive?



Find the change for each receipt.

Answers

1)

<u>Restaurant Supplies</u>	
Napkins	\$2.28
Cups	\$4.19
Spoons	\$3.42

If you paid with a 20 dollar bill, how much change would you receive?

2)

<u>Sports Store</u>	
Baseball	\$4.04
Knee Pad	\$4.10
Gloves	\$3.81
Baseball Cap	\$2.46

If you paid with a 20 dollar bill, how much change would you receive?

1. _____

2. _____

3. _____

4. _____

5. _____

6. _____

3)

<u>Olivia's Office Supplies</u>	
Fasteners	\$4.93
Paper	\$1.81
Pack of pencils	\$1.83
Box of pens	\$2.47
Folders	\$1.51

If you paid with a 20 dollar bill, how much change would you receive?

4)

<u>Lumber Store</u>	
Screws	\$1.47
Board	\$2.43
Nails	\$3.65
Pencils	\$1.74

If you paid with a 20 dollar bill, how much change would you receive?

5)

<u>Candy Shop</u>	
Gummies	\$4.90
Chocolate	\$3.12
Caramel	\$2.96
Hard Candy	\$3.77
Lollipops	\$4.02

If you paid with a 20 dollar bill, how much change would you receive?

6)

<u>Movie Theater</u>	
Popcorn	\$3.42
Soda	\$1.78
Pickle	\$4.00
Nachos	\$1.50
Candy	\$2.69

If you paid with a 20 dollar bill, how much change would you receive?



Find the change for each receipt.

1)

<u>Restaurant Supplies</u>	
Napkins	\$2.28
Cups	\$4.19
Spoons	\$3.42
Total: \$9.89	

If you paid with a 20 dollar bill, how much change would you receive?

2)

<u>Sports Store</u>	
Baseball	\$4.04
Knee Pad	\$4.10
Gloves	\$3.81
Baseball Cap	\$2.46
Total: \$14.41	

If you paid with a 20 dollar bill, how much change would you receive?

3)

<u>Olivia's Office Supplies</u>	
Fasteners	\$4.93
Paper	\$1.81
Pack of pencils	\$1.83
Box of pens	\$2.47
Folders	\$1.51
Total: \$12.55	

If you paid with a 20 dollar bill, how much change would you receive?

4)

<u>Lumber Store</u>	
Screws	\$1.47
Board	\$2.43
Nails	\$3.65
Pencils	\$1.74
Total: \$9.29	

If you paid with a 20 dollar bill, how much change would you receive?

5)

<u>Candy Shop</u>	
Gummies	\$4.90
Chocolate	\$3.12
Caramel	\$2.96
Hard Candy	\$3.77
Lollipops	\$4.02
Total: \$18.77	

If you paid with a 20 dollar bill, how much change would you receive?

6)

<u>Movie Theater</u>	
Popcorn	\$3.42
Soda	\$1.78
Pickle	\$4.00
Nachos	\$1.50
Candy	\$2.69
Total: \$13.39	

If you paid with a 20 dollar bill, how much change would you receive?

Answers

1. \$10.11

2. \$5.59

3. \$7.45

4. \$10.71

5. \$1.23

6. \$6.61



Find the change for each receipt.

Answers

\$1.23	\$7.45	\$10.11	\$10.71
\$6.61	\$5.59		

1. _____
2. _____
3. _____
4. _____
5. _____
6. _____

1) Restaurant Supplies

Napkins	\$2.28
Cups	\$4.19
Spoons	\$3.42

2) Sports Store

Baseball	\$4.04
Knee Pad	\$4.10
Gloves	\$3.81
Baseball Cap	\$2.46

If you paid with a 20 dollar bill, how much change would you receive?

If you paid with a 20 dollar bill, how much change would you receive?

3) Olivia's Office Supplies

Fasteners	\$4.93
Paper	\$1.81
Pack of pencils	\$1.83
Box of pens	\$2.47
Folders	\$1.51

4) Lumber Store

Screws	\$1.47
Board	\$2.43
Nails	\$3.65
Pencils	\$1.74

If you paid with a 20 dollar bill, how much change would you receive?

If you paid with a 20 dollar bill, how much change would you receive?

5) Candy Shop

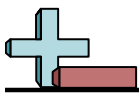
Gummies	\$4.90
Chocolate	\$3.12
Caramel	\$2.96
Hard Candy	\$3.77
Lollipops	\$4.02

6) Movie Theater

Popcorn	\$3.42
Soda	\$1.78
Pickle	\$4.00
Nachos	\$1.50
Candy	\$2.69

If you paid with a 20 dollar bill, how much change would you receive?

If you paid with a 20 dollar bill, how much change would you receive?



Find the change for each receipt.

Answers

1)

<u>John's Groceries</u>	
Cheese	\$3.57
Meat	\$3.72
Milk	\$2.75
Eggs	\$4.85

If you paid with a 20 dollar bill, how much change would you receive?

2)

<u>Restaurant Supplies</u>	
Forks	\$3.59
Plates	\$1.44
Spoons	\$1.46

If you paid with a 20 dollar bill, how much change would you receive?

1. _____

2. _____

3. _____

4. _____

5. _____

6. _____

3)

<u>Sports Store</u>	
Knee Pad	\$2.76
Gloves	\$1.04
Baseball Cap	\$3.39
Baseball	\$2.52
Glasses	\$2.47

If you paid with a 20 dollar bill, how much change would you receive?

4)

<u>Movie Theater</u>	
Nachos	\$2.04
Candy	\$4.13
Pickle	\$1.57
Soda	\$2.84
Popcorn	\$3.85

If you paid with a 20 dollar bill, how much change would you receive?

5)

<u>Organic Fruits</u>	
Apples	\$1.17
Oranges	\$2.80
Peaches	\$4.42
Pears	\$3.42
Cherries	\$3.22

If you paid with a 20 dollar bill, how much change would you receive?

6)

<u>Olivia's Office Supplies</u>	
Pack of pencils	\$4.13
Folders	\$4.66
Box of pens	\$4.53

If you paid with a 20 dollar bill, how much change would you receive?



Find the change for each receipt.

1)

<u>John's Groceries</u>	
Cheese	\$3.57
Meat	\$3.72
Milk	\$2.75
Eggs	\$4.85
Total: \$14.89	

If you paid with a 20 dollar bill, how much change would you receive?

2)

<u>Restaurant Supplies</u>	
Forks	\$3.59
Plates	\$1.44
Spoons	\$1.46
Total: \$6.49	

If you paid with a 20 dollar bill, how much change would you receive?

3)

<u>Sports Store</u>	
Knee Pad	\$2.76
Gloves	\$1.04
Baseball Cap	\$3.39
Baseball	\$2.52
Glasses	\$2.47
Total: \$12.18	

If you paid with a 20 dollar bill, how much change would you receive?

4)

<u>Movie Theater</u>	
Nachos	\$2.04
Candy	\$4.13
Pickle	\$1.57
Soda	\$2.84
Popcorn	\$3.85
Total: \$14.43	

If you paid with a 20 dollar bill, how much change would you receive?

5)

<u>Organic Fruits</u>	
Apples	\$1.17
Oranges	\$2.80
Peaches	\$4.42
Pears	\$3.42
Cherries	\$3.22
Total: \$15.03	

If you paid with a 20 dollar bill, how much change would you receive?

6)

<u>Olivia's Office Supplies</u>	
Pack of pencils	\$4.13
Folders	\$4.66
Box of pens	\$4.53
Total: \$13.32	

If you paid with a 20 dollar bill, how much change would you receive?

Answers

1. \$5.11

2. \$13.51

3. \$7.82

4. \$5.57

5. \$4.97

6. \$6.68



Find the change for each receipt.

Answers

\$4.97

\$7.82

\$6.68

\$5.57

\$13.51

\$5.11

1. _____

1)

John's Groceries

Cheese	\$3.57
Meat	\$3.72
Milk	\$2.75
Eggs	\$4.85

2)

Restaurant Supplies

Forks	\$3.59
Plates	\$1.44
Spoons	\$1.46

2. _____

3. _____

4. _____

5. _____

If you paid with a 20 dollar bill, how much change would you receive?

If you paid with a 20 dollar bill, how much change would you receive?

6. _____

3)

Sports Store

Knee Pad	\$2.76
Gloves	\$1.04
Baseball Cap	\$3.39
Baseball	\$2.52
Glasses	\$2.47

4)

Movie Theater

Nachos	\$2.04
Candy	\$4.13
Pickle	\$1.57
Soda	\$2.84
Popcorn	\$3.85

If you paid with a 20 dollar bill, how much change would you receive?

If you paid with a 20 dollar bill, how much change would you receive?

5)

Organic Fruits

Apples	\$1.17
Oranges	\$2.80
Peaches	\$4.42
Pears	\$3.42
Cherries	\$3.22

6)

Olivia's Office Supplies

Pack of pencils	\$4.13
Folders	\$4.66
Box of pens	\$4.53

If you paid with a 20 dollar bill, how much change would you receive?

If you paid with a 20 dollar bill, how much change would you receive?