



Solve each problem.


Answers

1) Emily bought a new board game for \$15.01. She gave the cashier a twenty dollar bill. How much change should she get back?



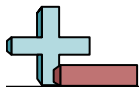
- 1. _____
- 2. _____
- 3. _____

2) Jerry spent \$7.86 on candy at the mall. He gave the cashier a ten dollar bill. How much change should he get back?



3) Kaleb spent \$16.27 buying some new toys. He bought them using a twenty dollar bill. How much change should he get back?






Solve each problem.

1) Emily bought a new board game for \$15.01. She gave the cashier a twenty dollar bill. How much change should she get back?



2) Jerry spent \$7.86 on candy at the mall. He gave the cashier a ten dollar bill. How much change should he get back?



3) Kaleb spent \$16.27 buying some new toys. He bought them using a twenty dollar bill. How much change should he get back?



Answers

1. **A**

2. **A**

3. **B**