



Determine the amount of money shown.

Answers

1)



1. _____


2. _____

3. _____

4. _____

5. _____

2)



3)

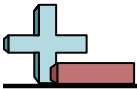


4)



5)






Determine the amount of money shown.

Answers



1. **\$97.62**



2. **\$15.69**



3. **\$83.32**



4. **\$98.13**



5. **\$52.33**