




Determine the amount of money shown.

Answers



1. _____



2. _____



3. _____



4. _____



5. _____



6. _____




7. _____



8. _____




9. _____



10. _____



Determine the amount of money shown.



Answers

1. \$0.95

2. \$0.80

3. \$0.96

4. \$0.90

5. \$0.69

6. \$0.95

7. \$0.98

8. \$0.78

9. \$0.98

10. \$0.96



Determine the amount of money shown.

Answers



1. _____



2. _____



3. _____



4. _____




5. _____



6. _____



7. _____



8. _____





9. _____



10. _____



Determine the amount of money shown.



Answers

1. \$0.52

2. \$0.95

3. \$0.99

4. \$0.70

5. \$0.69

6. \$0.95

7. \$0.95

8. \$0.97

9. \$0.59

10. \$0.66



Determine the amount of money shown.


Answers



1. _____



2. _____



3. _____

4. _____



5. _____

6. _____



7. _____

8. _____





9. _____

10. _____





Determine the amount of money shown.



Answers

1. \$0.43

2. \$0.85

3. \$0.71

4. \$0.69

5. \$0.96

6. \$0.96

7. \$0.81

8. \$0.93

9. \$0.96

10. \$0.99



Determine the amount of money shown.



Answers

- 1. _____
- 2. _____
- 3. _____
- 4. _____
- 5. _____
- 6. _____
- 7. _____
- 8. _____
- 9. _____
- 10. _____



Determine the amount of money shown.



Answers

1. \$0.95

2. \$0.71

3. \$0.63

4. \$0.50

5. \$0.97

6. \$0.90

7. \$0.97

8. \$0.85

9. \$0.97

10. \$0.96



Determine the amount of money shown.



Answers

1. _____

2. _____

3. _____

4. _____

5. _____

6. _____

7. _____

8. _____

9. _____

10. _____



Determine the amount of money shown.



Answers

1. \$0.96

2. \$0.95

3. \$0.88

4. \$0.97

5. \$0.99

6. \$0.76

7. \$0.91

8. \$0.99


9. \$0.97

10. \$0.85



Determine the amount of money shown.


Answers



1. _____



2. _____



3. _____

4. _____



5. _____

6. _____



7. _____

8. _____




9. _____

10. _____





Determine the amount of money shown.



Answers

1. \$0.81

2. \$0.95

3. \$0.98

4. \$0.99

5. \$0.96

6. \$0.92

7. \$0.98

8. \$0.99


9. \$0.98

10. \$0.68



Determine the amount of money shown.

Answers




1. _____




2. _____



3. _____



4. _____



5. _____




6. _____



7. _____



8. _____






9. _____



10. _____



Determine the amount of money shown.



Answers

1. \$0.96

2. \$0.96

3. \$0.97

4. \$0.95

5. \$0.95

6. \$0.99

7. \$0.99

8. \$0.98

9. \$0.97

10. \$0.97



Determine the amount of money shown.

Answers



1. _____



2. _____



3. _____

4. _____



5. _____

6. _____



7. _____

8. _____



9. _____

10. _____





Determine the amount of money shown.



Answers

1. \$0.96

2. \$0.91

3. \$0.71

4. \$0.88

5. \$0.95

6. \$0.85

7. \$0.88

8. \$0.90

9. \$0.97

10. \$0.99



Determine the amount of money shown.

Answers



1. _____



2. _____



3. _____



4. _____



5. _____



6. _____



7. _____



8. _____



9. _____



10. _____



Determine the amount of money shown.



Answers

1. \$0.95

2. \$0.91

3. \$0.81

4. \$0.96

5. \$0.93

6. \$0.53

7. \$0.79

8. \$0.96


9. \$0.98

10. \$0.54



Determine the amount of money shown.

Answers



1. _____



2. _____



3. _____

4. _____



5. _____

6. _____



7. _____

8. _____



9. _____

10. _____





Determine the amount of money shown.



Answers

1. \$0.90

2. \$0.73

3. \$0.99

4. \$0.68

5. \$0.98

6. \$0.96

7. \$0.98

8. \$0.89

9. \$0.88

10. \$0.95