



Determine the amount of money shown.

Answers



1. _____




2. _____



3. _____



4. _____



5. _____




6. _____



7. _____



8. _____






9. _____



10. _____



Determine the amount of money shown.



Answers

1. \$0.96

2. \$0.96

3. \$0.97

4. \$0.95

5. \$0.95

6. \$0.99

7. \$0.99

8. \$0.98

9. \$0.97

10. \$0.97