



Choose 'inches', 'feet', 'centimeters' or 'meters' to fill in the blank.

Answers

- 1) The length of a new pencil is about 7 \_\_\_\_\_
- 2) The height of a bowl is about 3 \_\_\_\_\_
- 3) The height of a vacuum cleaner is about 4 \_\_\_\_\_
- 4) The width of a piece of bread is about 4 \_\_\_\_\_
- 5) The height of a door is about 7 \_\_\_\_\_
- 6) The height of a state fair ferris wheel is about 200 \_\_\_\_\_
- 7) The height of a soup can is about 4 \_\_\_\_\_
- 8) The height of a glue stick is about 3 \_\_\_\_\_
- 9) The height of a drinking glass is about 7 \_\_\_\_\_
- 10) The height of an apple is about 3 \_\_\_\_\_
- 11) The height of a birthday candle is about 5 \_\_\_\_\_
- 12) The length of a sheet of paper is about 28 \_\_\_\_\_
- 13) The height of a clothes dresser is about 1 \_\_\_\_\_
- 14) The height of an adult horse is about 2 \_\_\_\_\_
- 15) The height of a big screen tv is about 1 \_\_\_\_\_
- 16) The length of a loaf of bread is about 30 \_\_\_\_\_
- 17) The depth of a large swimming pool is about 3 \_\_\_\_\_
- 18) The length of a school bus is about 11 \_\_\_\_\_
- 19) The height of a lollipop is about 10 \_\_\_\_\_
- 20) The height of a stove is about 1 \_\_\_\_\_

1. \_\_\_\_\_

2. \_\_\_\_\_

3. \_\_\_\_\_

4. \_\_\_\_\_

5. \_\_\_\_\_

6. \_\_\_\_\_

7. \_\_\_\_\_

8. \_\_\_\_\_

9. \_\_\_\_\_

10. \_\_\_\_\_

11. \_\_\_\_\_

12. \_\_\_\_\_

13. \_\_\_\_\_

14. \_\_\_\_\_

15. \_\_\_\_\_

16. \_\_\_\_\_

17. \_\_\_\_\_

18. \_\_\_\_\_

19. \_\_\_\_\_

20. \_\_\_\_\_



Choose 'inches', 'feet', 'centimeters' or 'meters' to fill in the blank.

- 1) The length of a new pencil is about 7 \_\_\_\_\_
- 2) The height of a bowl is about 3 \_\_\_\_\_
- 3) The height of a vacuum cleaner is about 4 \_\_\_\_\_
- 4) The width of a piece of bread is about 4 \_\_\_\_\_
- 5) The height of a door is about 7 \_\_\_\_\_
- 6) The height of a state fair ferris wheel is about 200 \_\_\_\_\_
- 7) The height of a soup can is about 4 \_\_\_\_\_
- 8) The height of a glue stick is about 3 \_\_\_\_\_
- 9) The height of a drinking glass is about 7 \_\_\_\_\_
- 10) The height of an apple is about 3 \_\_\_\_\_
- 11) The height of a birthday candle is about 5 \_\_\_\_\_
- 12) The length of a sheet of paper is about 28 \_\_\_\_\_
- 13) The height of a clothes dresser is about 1 \_\_\_\_\_
- 14) The height of an adult horse is about 2 \_\_\_\_\_
- 15) The height of a big screen tv is about 1 \_\_\_\_\_
- 16) The length of a loaf of bread is about 30 \_\_\_\_\_
- 17) The depth of a large swimming pool is about 3 \_\_\_\_\_
- 18) The length of a school bus is about 11 \_\_\_\_\_
- 19) The height of a lollipop is about 10 \_\_\_\_\_
- 20) The height of a stove is about 1 \_\_\_\_\_

Answers

1. inches
2. inches
3. feet
4. inches
5. feet
6. feet
7. inches
8. inches
9. inches
10. inches
11. centimeters
12. centimeters
13. meter
14. meters
15. meter
16. centimeters
17. meters
18. meters
19. centimeters
20. meter



Choose 'inches', 'feet', 'centimeters' or 'meters' to fill in the blank.

Answers

- 1) The height of a stove is about 3 \_\_\_\_\_
- 2) The length of a shoe is about 8 \_\_\_\_\_
- 3) The height of a car is about 5 \_\_\_\_\_
- 4) The length of a ruler is about 12 \_\_\_\_\_
- 5) The height of a vacuum cleaner is about 4 \_\_\_\_\_
- 6) The height of a large ketchup bottle is about 9 \_\_\_\_\_
- 7) The width of a sheet of paper is about 8 \_\_\_\_\_
- 8) The length of a sheet of paper is about 11 \_\_\_\_\_
- 9) The height of an outdoor flag pole is about 30 \_\_\_\_\_
- 10) The height of a birthday candle is about 2 \_\_\_\_\_
- 11) The height of an adult elephant is about 4 \_\_\_\_\_
- 12) The height of a glue stick is about 8 \_\_\_\_\_
- 13) The height of a drinking glass is about 18 \_\_\_\_\_
- 14) The height of a bunk bed is about 2 \_\_\_\_\_
- 15) The height of a gallon of milk is about 23 \_\_\_\_\_
- 16) The height of a school chalkboard is about 1 \_\_\_\_\_
- 17) The length of a Q-Tip is about 8 \_\_\_\_\_
- 18) The height of an apple is about 8 \_\_\_\_\_
- 19) The length of a house key is about 5 \_\_\_\_\_
- 20) The height of a soup can is about 10 \_\_\_\_\_

1. \_\_\_\_\_

2. \_\_\_\_\_

3. \_\_\_\_\_

4. \_\_\_\_\_

5. \_\_\_\_\_

6. \_\_\_\_\_

7. \_\_\_\_\_

8. \_\_\_\_\_

9. \_\_\_\_\_

10. \_\_\_\_\_

11. \_\_\_\_\_

12. \_\_\_\_\_

13. \_\_\_\_\_

14. \_\_\_\_\_

15. \_\_\_\_\_

16. \_\_\_\_\_

17. \_\_\_\_\_

18. \_\_\_\_\_

19. \_\_\_\_\_

20. \_\_\_\_\_

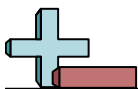


Choose 'inches', 'feet', 'centimeters' or 'meters' to fill in the blank.

- 1) The height of a stove is about 3 \_\_\_\_\_
- 2) The length of a shoe is about 8 \_\_\_\_\_
- 3) The height of a car is about 5 \_\_\_\_\_
- 4) The length of a ruler is about 12 \_\_\_\_\_
- 5) The height of a vacuum cleaner is about 4 \_\_\_\_\_
- 6) The height of a large ketchup bottle is about 9 \_\_\_\_\_
- 7) The width of a sheet of paper is about 8 \_\_\_\_\_
- 8) The length of a sheet of paper is about 11 \_\_\_\_\_
- 9) The height of an outdoor flag pole is about 30 \_\_\_\_\_
- 10) The height of a birthday candle is about 2 \_\_\_\_\_
- 11) The height of an adult elephant is about 4 \_\_\_\_\_
- 12) The height of a glue stick is about 8 \_\_\_\_\_
- 13) The height of a drinking glass is about 18 \_\_\_\_\_
- 14) The height of a bunk bed is about 2 \_\_\_\_\_
- 15) The height of a gallon of milk is about 23 \_\_\_\_\_
- 16) The height of a school chalkboard is about 1 \_\_\_\_\_
- 17) The length of a Q-Tip is about 8 \_\_\_\_\_
- 18) The height of an apple is about 8 \_\_\_\_\_
- 19) The length of a house key is about 5 \_\_\_\_\_
- 20) The height of a soup can is about 10 \_\_\_\_\_

Answers

1. feet
2. inches
3. feet
4. inches
5. feet
6. inches
7. inches
8. inches
9. feet
10. inches
11. meters
12. centimeters
13. centimeters
14. meters
15. centimeters
16. meter
17. centimeters
18. centimeters
19. centimeters
20. centimeters



Choose 'inches', 'feet', 'centimeters' or 'meters' to fill in the blank.

Answers

- 1) The length of a shoe is about 8 \_\_\_\_\_
- 2) The length of a house key is about 2 \_\_\_\_\_
- 3) The height of a dog is about 2 \_\_\_\_\_
- 4) The height of an outdoor flag pole is about 30 \_\_\_\_\_
- 5) The length of a spoon is about 6 \_\_\_\_\_
- 6) The height of an adult elephant is about 12 \_\_\_\_\_
- 7) The width of a round door knob is about 2 \_\_\_\_\_
- 8) The height of a bunk bed is about 6 \_\_\_\_\_
- 9) The length of a skateboard is about 30 \_\_\_\_\_
- 10) The length of a sailboat is about 35 \_\_\_\_\_
- 11) The height of a can of soda is about 10 \_\_\_\_\_
- 12) The height of a school chalkboard is about 1 \_\_\_\_\_
- 13) The length of a paper clip is about 2 \_\_\_\_\_
- 14) The width of a text book is about 25 \_\_\_\_\_
- 15) The length of a ruler is about 30 \_\_\_\_\_
- 16) The height of a big screen tv is about 1 \_\_\_\_\_
- 17) The height of a gallon of milk is about 23 \_\_\_\_\_
- 18) The height of refrigerator is about 2 \_\_\_\_\_
- 19) The height of a large ketchup bottle is about 22 \_\_\_\_\_
- 20) The length of a pen is about 13 \_\_\_\_\_

1. \_\_\_\_\_
2. \_\_\_\_\_
3. \_\_\_\_\_
4. \_\_\_\_\_
5. \_\_\_\_\_
6. \_\_\_\_\_
7. \_\_\_\_\_
8. \_\_\_\_\_
9. \_\_\_\_\_
10. \_\_\_\_\_
11. \_\_\_\_\_
12. \_\_\_\_\_
13. \_\_\_\_\_
14. \_\_\_\_\_
15. \_\_\_\_\_
16. \_\_\_\_\_
17. \_\_\_\_\_
18. \_\_\_\_\_
19. \_\_\_\_\_
20. \_\_\_\_\_



Choose 'inches', 'feet', 'centimeters' or 'meters' to fill in the blank.

- 1) The length of a shoe is about 8 \_\_\_\_\_
- 2) The length of a house key is about 2 \_\_\_\_\_
- 3) The height of a dog is about 2 \_\_\_\_\_
- 4) The height of an outdoor flag pole is about 30 \_\_\_\_\_
- 5) The length of a spoon is about 6 \_\_\_\_\_
- 6) The height of an adult elephant is about 12 \_\_\_\_\_
- 7) The width of a round door knob is about 2 \_\_\_\_\_
- 8) The height of a bunk bed is about 6 \_\_\_\_\_
- 9) The length of a skateboard is about 30 \_\_\_\_\_
- 10) The length of a sailboat is about 35 \_\_\_\_\_
- 11) The height of a can of soda is about 10 \_\_\_\_\_
- 12) The height of a school chalkboard is about 1 \_\_\_\_\_
- 13) The length of a paper clip is about 2 \_\_\_\_\_
- 14) The width of a text book is about 25 \_\_\_\_\_
- 15) The length of a ruler is about 30 \_\_\_\_\_
- 16) The height of a big screen tv is about 1 \_\_\_\_\_
- 17) The height of a gallon of milk is about 23 \_\_\_\_\_
- 18) The height of refrigerator is about 2 \_\_\_\_\_
- 19) The height of a large ketchup bottle is about 22 \_\_\_\_\_
- 20) The length of a pen is about 13 \_\_\_\_\_

Answers

1. inches
2. inches
3. feet
4. feet
5. inches
6. feet
7. inches
8. feet
9. inches
10. feet
11. centimeters
12. meter
13. centimeters
14. centimeters
15. centimeters
16. meter
17. centimeters
18. meters
19. centimeters
20. centimeters



Choose 'inches', 'feet', 'centimeters' or 'meters' to fill in the blank.

Answers

- 1) The length of a spoon is about 6 \_\_\_\_\_
- 2) The length of a school bus is about 35 \_\_\_\_\_
- 3) The height of a cooking pot is about 10 \_\_\_\_\_
- 4) The height of a door is about 7 \_\_\_\_\_
- 5) The height of refrigerator is about 6 \_\_\_\_\_
- 6) The height of a soup can is about 4 \_\_\_\_\_
- 7) The height of a dog is about 2 \_\_\_\_\_
- 8) The width of a piece of bread is about 4 \_\_\_\_\_
- 9) The height of an adult horse is about 6 \_\_\_\_\_
- 10) The height of the Statue of Liberty is about 305 \_\_\_\_\_
- 11) The height of a stove is about 1 \_\_\_\_\_
- 12) The width of a keyboard is about 43 \_\_\_\_\_
- 13) The height of a school chalkboard is about 1 \_\_\_\_\_
- 14) The length of a school hallway is about 23 \_\_\_\_\_
- 15) The length of a toothbrush is about 18 \_\_\_\_\_
- 16) The length of a skateboard is about 76 \_\_\_\_\_
- 17) The height of a big screen tv is about 1 \_\_\_\_\_
- 18) The length of a football field is about 109 \_\_\_\_\_
- 19) The height of a vacuum cleaner is about 1 \_\_\_\_\_
- 20) The height of a clothes dresser is about 1 \_\_\_\_\_

1. \_\_\_\_\_
2. \_\_\_\_\_
3. \_\_\_\_\_
4. \_\_\_\_\_
5. \_\_\_\_\_
6. \_\_\_\_\_
7. \_\_\_\_\_
8. \_\_\_\_\_
9. \_\_\_\_\_
10. \_\_\_\_\_
11. \_\_\_\_\_
12. \_\_\_\_\_
13. \_\_\_\_\_
14. \_\_\_\_\_
15. \_\_\_\_\_
16. \_\_\_\_\_
17. \_\_\_\_\_
18. \_\_\_\_\_
19. \_\_\_\_\_
20. \_\_\_\_\_



Choose 'inches', 'feet', 'centimeters' or 'meters' to fill in the blank.

- 1) The length of a spoon is about 6 \_\_\_\_\_
- 2) The length of a school bus is about 35 \_\_\_\_\_
- 3) The height of a cooking pot is about 10 \_\_\_\_\_
- 4) The height of a door is about 7 \_\_\_\_\_
- 5) The height of refrigerator is about 6 \_\_\_\_\_
- 6) The height of a soup can is about 4 \_\_\_\_\_
- 7) The height of a dog is about 2 \_\_\_\_\_
- 8) The width of a piece of bread is about 4 \_\_\_\_\_
- 9) The height of an adult horse is about 6 \_\_\_\_\_
- 10) The height of the Statue of Liberty is about 305 \_\_\_\_\_
- 11) The height of a stove is about 1 \_\_\_\_\_
- 12) The width of a keyboard is about 43 \_\_\_\_\_
- 13) The height of a school chalkboard is about 1 \_\_\_\_\_
- 14) The length of a school hallway is about 23 \_\_\_\_\_
- 15) The length of a toothbrush is about 18 \_\_\_\_\_
- 16) The length of a skateboard is about 76 \_\_\_\_\_
- 17) The height of a big screen tv is about 1 \_\_\_\_\_
- 18) The length of a football field is about 109 \_\_\_\_\_
- 19) The height of a vacuum cleaner is about 1 \_\_\_\_\_
- 20) The height of a clothes dresser is about 1 \_\_\_\_\_

Answers

1. **inches**
2. **feet**
3. **inches**
4. **feet**
5. **feet**
6. **inches**
7. **feet**
8. **inches**
9. **feet**
10. **feet**
11. **meter**
12. **centimeters**
13. **meter**
14. **meters**
15. **centimeters**
16. **centimeters**
17. **meter**
18. **meters**
19. **meter**
20. **meter**





Choose 'inches', 'feet', 'centimeters' or 'meters' to fill in the blank.

Answers

- 1) The length of a Q-Tip is about 3 \_\_\_\_\_
- 2) The height of refrigerator is about 6 \_\_\_\_\_
- 3) The height of a tennis ball is about 3 \_\_\_\_\_
- 4) The height of an apple is about 3 \_\_\_\_\_
- 5) The width of a sheet of paper is about 8 \_\_\_\_\_
- 6) The length of a loaf of bread is about 12 \_\_\_\_\_
- 7) The height of a stove is about 3 \_\_\_\_\_
- 8) The height of a school chalkboard is about 4 \_\_\_\_\_
- 9) The length of a skateboard is about 30 \_\_\_\_\_
- 10) The length of a school bus is about 35 \_\_\_\_\_
- 11) The height of a clothes dresser is about 1 \_\_\_\_\_
- 12) The height of a car is about 2 \_\_\_\_\_
- 13) The height of a vacuum cleaner is about 1 \_\_\_\_\_
- 14) The height of a big screen tv is about 1 \_\_\_\_\_
- 15) The height of a shovel is about 1 \_\_\_\_\_
- 16) The height of an adult elephant is about 4 \_\_\_\_\_
- 17) The height of a can of soda is about 10 \_\_\_\_\_
- 18) The height of a dog is about 1 \_\_\_\_\_
- 19) The height of a door is about 2 \_\_\_\_\_
- 20) The width of a keyboard is about 43 \_\_\_\_\_

1. \_\_\_\_\_

2. \_\_\_\_\_

3. \_\_\_\_\_

4. \_\_\_\_\_

5. \_\_\_\_\_

6. \_\_\_\_\_

7. \_\_\_\_\_

8. \_\_\_\_\_

9. \_\_\_\_\_

10. \_\_\_\_\_

11. \_\_\_\_\_

12. \_\_\_\_\_

13. \_\_\_\_\_

14. \_\_\_\_\_

15. \_\_\_\_\_

16. \_\_\_\_\_

17. \_\_\_\_\_

18. \_\_\_\_\_

19. \_\_\_\_\_

20. \_\_\_\_\_



Choose 'inches', 'feet', 'centimeters' or 'meters' to fill in the blank.

- 1) The length of a Q-Tip is about 3 \_\_\_\_\_
- 2) The height of refrigerator is about 6 \_\_\_\_\_
- 3) The height of a tennis ball is about 3 \_\_\_\_\_
- 4) The height of an apple is about 3 \_\_\_\_\_
- 5) The width of a sheet of paper is about 8 \_\_\_\_\_
- 6) The length of a loaf of bread is about 12 \_\_\_\_\_
- 7) The height of a stove is about 3 \_\_\_\_\_
- 8) The height of a school chalkboard is about 4 \_\_\_\_\_
- 9) The length of a skateboard is about 30 \_\_\_\_\_
- 10) The length of a school bus is about 35 \_\_\_\_\_
- 11) The height of a clothes dresser is about 1 \_\_\_\_\_
- 12) The height of a car is about 2 \_\_\_\_\_
- 13) The height of a vacuum cleaner is about 1 \_\_\_\_\_
- 14) The height of a big screen tv is about 1 \_\_\_\_\_
- 15) The height of a shovel is about 1 \_\_\_\_\_
- 16) The height of an adult elephant is about 4 \_\_\_\_\_
- 17) The height of a can of soda is about 10 \_\_\_\_\_
- 18) The height of a dog is about 1 \_\_\_\_\_
- 19) The height of a door is about 2 \_\_\_\_\_
- 20) The width of a keyboard is about 43 \_\_\_\_\_

Answers

1. **inches**
2. **feet**
3. **inches**
4. **inches**
5. **inches**
6. **inches**
7. **feet**
8. **feet**
9. **inches**
10. **feet**
11. **meter**
12. **meters**
13. **meter**
14. **meter**
15. **meter**
16. **meters**
17. **centimeters**
18. **meter**
19. **meters**
20. **centimeters**



Choose 'inches', 'feet', 'centimeters' or 'meters' to fill in the blank.

Answers

- 1) The height of a school chalkboard is about 4 \_\_\_\_\_
- 2) The height of a bunk bed is about 6 \_\_\_\_\_
- 3) The length of a new pencil is about 7 \_\_\_\_\_
- 4) The length of a toothbrush is about 7 \_\_\_\_\_
- 5) The height of a stove is about 3 \_\_\_\_\_
- 6) The height of a drinking glass is about 7 \_\_\_\_\_
- 7) The width of a keyboard is about 17 \_\_\_\_\_
- 8) The length of a ruler is about 12 \_\_\_\_\_
- 9) The height of a tennis ball is about 3 \_\_\_\_\_
- 10) The width of a piece of bread is about 4 \_\_\_\_\_
- 11) The height of a lollipop is about 10 \_\_\_\_\_
- 12) The height of a recliner is about 1 \_\_\_\_\_
- 13) The height of refrigerator is about 2 \_\_\_\_\_
- 14) The height of a gallon of milk is about 23 \_\_\_\_\_
- 15) The height of a state fair ferris wheel is about 60 \_\_\_\_\_
- 16) The height of a salt shaker is about 8 \_\_\_\_\_
- 17) The height of a car is about 2 \_\_\_\_\_
- 18) The height of a can of soda is about 10 \_\_\_\_\_
- 19) The height of the Statue of Liberty is about 93 \_\_\_\_\_
- 20) The length of a paper clip is about 2 \_\_\_\_\_

1. \_\_\_\_\_

2. \_\_\_\_\_

3. \_\_\_\_\_

4. \_\_\_\_\_

5. \_\_\_\_\_

6. \_\_\_\_\_

7. \_\_\_\_\_

8. \_\_\_\_\_

9. \_\_\_\_\_

10. \_\_\_\_\_

11. \_\_\_\_\_

12. \_\_\_\_\_

13. \_\_\_\_\_

14. \_\_\_\_\_

15. \_\_\_\_\_

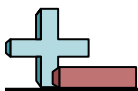
16. \_\_\_\_\_

17. \_\_\_\_\_

18. \_\_\_\_\_

19. \_\_\_\_\_

20. \_\_\_\_\_



Choose 'inches', 'feet', 'centimeters' or 'meters' to fill in the blank.

- 1) The height of a school chalkboard is about 4 \_\_\_\_\_
- 2) The height of a bunk bed is about 6 \_\_\_\_\_
- 3) The length of a new pencil is about 7 \_\_\_\_\_
- 4) The length of a toothbrush is about 7 \_\_\_\_\_
- 5) The height of a stove is about 3 \_\_\_\_\_
- 6) The height of a drinking glass is about 7 \_\_\_\_\_
- 7) The width of a keyboard is about 17 \_\_\_\_\_
- 8) The length of a ruler is about 12 \_\_\_\_\_
- 9) The height of a tennis ball is about 3 \_\_\_\_\_
- 10) The width of a piece of bread is about 4 \_\_\_\_\_
- 11) The height of a lollipop is about 10 \_\_\_\_\_
- 12) The height of a recliner is about 1 \_\_\_\_\_
- 13) The height of refrigerator is about 2 \_\_\_\_\_
- 14) The height of a gallon of milk is about 23 \_\_\_\_\_
- 15) The height of a state fair ferris wheel is about 60 \_\_\_\_\_
- 16) The height of a salt shaker is about 8 \_\_\_\_\_
- 17) The height of a car is about 2 \_\_\_\_\_
- 18) The height of a can of soda is about 10 \_\_\_\_\_
- 19) The height of the Statue of Liberty is about 93 \_\_\_\_\_
- 20) The length of a paper clip is about 2 \_\_\_\_\_

Answers

1. feet
2. feet
3. inches
4. inches
5. feet
6. inches
7. inches
8. inches
9. inches
10. inches
11. centimeters
12. meter
13. meters
14. centimeters
15. meters
16. centimeters
17. meters
18. centimeters
19. meters
20. centimeters



Choose 'inches', 'feet', 'centimeters' or 'meters' to fill in the blank.

Answers

- 1) The length of a toothbrush is about 7 \_\_\_\_\_
- 2) The length of a skateboard is about 30 \_\_\_\_\_
- 3) The height of a big screen tv is about 3 \_\_\_\_\_
- 4) The length of a school hallway is about 75 \_\_\_\_\_
- 5) The width of a piece of bread is about 4 \_\_\_\_\_
- 6) The height of a outdoor flag pole is about 30 \_\_\_\_\_
- 7) The length of a new pencil is about 7 \_\_\_\_\_
- 8) The depth of a large swimming pool is about 10 \_\_\_\_\_
- 9) The height of a bunk bed is about 6 \_\_\_\_\_
- 10) The width of a sheet of paper is about 8 \_\_\_\_\_
- 11) The height of a bicycle is about 1 \_\_\_\_\_
- 12) The height of a vacuum cleaner is about 1 \_\_\_\_\_
- 13) The height of a can of soda is about 10 \_\_\_\_\_
- 14) The height of a school chalkboard is about 1 \_\_\_\_\_
- 15) The height of a box of cereal is about 30 \_\_\_\_\_
- 16) The height of refrigerator is about 2 \_\_\_\_\_
- 17) The length of a pen is about 13 \_\_\_\_\_
- 18) The length of a sheet of paper is about 28 \_\_\_\_\_
- 19) The height of a stove is about 1 \_\_\_\_\_
- 20) The length of a sailboat is about 11 \_\_\_\_\_

1. \_\_\_\_\_
2. \_\_\_\_\_
3. \_\_\_\_\_
4. \_\_\_\_\_
5. \_\_\_\_\_
6. \_\_\_\_\_
7. \_\_\_\_\_
8. \_\_\_\_\_
9. \_\_\_\_\_
10. \_\_\_\_\_
11. \_\_\_\_\_
12. \_\_\_\_\_
13. \_\_\_\_\_
14. \_\_\_\_\_
15. \_\_\_\_\_
16. \_\_\_\_\_
17. \_\_\_\_\_
18. \_\_\_\_\_
19. \_\_\_\_\_
20. \_\_\_\_\_



Choose 'inches', 'feet', 'centimeters' or 'meters' to fill in the blank.

- 1) The length of a toothbrush is about 7 \_\_\_\_\_
- 2) The length of a skateboard is about 30 \_\_\_\_\_
- 3) The height of a big screen tv is about 3 \_\_\_\_\_
- 4) The length of a school hallway is about 75 \_\_\_\_\_
- 5) The width of a piece of bread is about 4 \_\_\_\_\_
- 6) The height of a outdoor flag pole is about 30 \_\_\_\_\_
- 7) The length of a new pencil is about 7 \_\_\_\_\_
- 8) The depth of a large swimming pool is about 10 \_\_\_\_\_
- 9) The height of a bunk bed is about 6 \_\_\_\_\_
- 10) The width of a sheet of paper is about 8 \_\_\_\_\_
- 11) The height of a bicycle is about 1 \_\_\_\_\_
- 12) The height of a vacuum cleaner is about 1 \_\_\_\_\_
- 13) The height of a can of soda is about 10 \_\_\_\_\_
- 14) The height of a school chalkboard is about 1 \_\_\_\_\_
- 15) The height of a box of cereal is about 30 \_\_\_\_\_
- 16) The height of refrigerator is about 2 \_\_\_\_\_
- 17) The length of a pen is about 13 \_\_\_\_\_
- 18) The length of a sheet of paper is about 28 \_\_\_\_\_
- 19) The height of a stove is about 1 \_\_\_\_\_
- 20) The length of a sailboat is about 11 \_\_\_\_\_

Answers

1. **inches**
2. **inches**
3. **feet**
4. **feet**
5. **inches**
6. **feet**
7. **inches**
8. **feet**
9. **feet**
10. **inches**
11. **meter**
12. **meter**
13. **centimeters**
14. **meter**
15. **centimeters**
16. **meters**
17. **centimeters**
18. **centimeters**
19. **meter**
20. **meters**



Choose 'inches', 'feet', 'centimeters' or 'meters' to fill in the blank.

Answers

- 1) The height of a can of soda is about 4 \_\_\_\_\_
- 2) The height of a bicycle is about 3 \_\_\_\_\_
- 3) The length of a skateboard is about 30 \_\_\_\_\_
- 4) The height of a vacuum cleaner is about 4 \_\_\_\_\_
- 5) The height of a shovel is about 4 \_\_\_\_\_
- 6) The length of a hammer is about 16 \_\_\_\_\_
- 7) The height of an outdoor flag pole is about 30 \_\_\_\_\_
- 8) The height of a stove is about 3 \_\_\_\_\_
- 9) The height of a bunk bed is about 6 \_\_\_\_\_
- 10) The height of a birthday candle is about 2 \_\_\_\_\_
- 11) The height of an apple is about 8 \_\_\_\_\_
- 12) The height of a box of cereal is about 30 \_\_\_\_\_
- 13) The height of a soup can is about 10 \_\_\_\_\_
- 14) The height of a gallon of milk is about 23 \_\_\_\_\_
- 15) The width of a round door knob is about 6 \_\_\_\_\_
- 16) The length of a school hallway is about 23 \_\_\_\_\_
- 17) The height of a bowl is about 8 \_\_\_\_\_
- 18) The width of a sheet of paper is about 21 \_\_\_\_\_
- 19) The length of a toothbrush is about 18 \_\_\_\_\_
- 20) The width of a DVD case is about 14 \_\_\_\_\_

1. \_\_\_\_\_
2. \_\_\_\_\_
3. \_\_\_\_\_
4. \_\_\_\_\_
5. \_\_\_\_\_
6. \_\_\_\_\_
7. \_\_\_\_\_
8. \_\_\_\_\_
9. \_\_\_\_\_
10. \_\_\_\_\_
11. \_\_\_\_\_
12. \_\_\_\_\_
13. \_\_\_\_\_
14. \_\_\_\_\_
15. \_\_\_\_\_
16. \_\_\_\_\_
17. \_\_\_\_\_
18. \_\_\_\_\_
19. \_\_\_\_\_
20. \_\_\_\_\_



Choose 'inches', 'feet', 'centimeters' or 'meters' to fill in the blank.

- 1) The height of a can of soda is about 4 \_\_\_\_\_
- 2) The height of a bicycle is about 3 \_\_\_\_\_
- 3) The length of a skateboard is about 30 \_\_\_\_\_
- 4) The height of a vacuum cleaner is about 4 \_\_\_\_\_
- 5) The height of a shovel is about 4 \_\_\_\_\_
- 6) The length of a hammer is about 16 \_\_\_\_\_
- 7) The height of an outdoor flag pole is about 30 \_\_\_\_\_
- 8) The height of a stove is about 3 \_\_\_\_\_
- 9) The height of a bunk bed is about 6 \_\_\_\_\_
- 10) The height of a birthday candle is about 2 \_\_\_\_\_
- 11) The height of an apple is about 8 \_\_\_\_\_
- 12) The height of a box of cereal is about 30 \_\_\_\_\_
- 13) The height of a soup can is about 10 \_\_\_\_\_
- 14) The height of a gallon of milk is about 23 \_\_\_\_\_
- 15) The width of a round door knob is about 6 \_\_\_\_\_
- 16) The length of a school hallway is about 23 \_\_\_\_\_
- 17) The height of a bowl is about 8 \_\_\_\_\_
- 18) The width of a sheet of paper is about 21 \_\_\_\_\_
- 19) The length of a toothbrush is about 18 \_\_\_\_\_
- 20) The width of a DVD case is about 14 \_\_\_\_\_

Answers

1. inches
2. feet
3. inches
4. feet
5. feet
6. inches
7. feet
8. feet
9. feet
10. inches
11. centimeters
12. centimeters
13. centimeters
14. centimeters
15. centimeters
16. meters
17. centimeters
18. centimeters
19. centimeters
20. centimeters





Choose 'inches', 'feet', 'centimeters' or 'meters' to fill in the blank.

Answers

- 1) The height of a clothes dresser is about 3 \_\_\_\_\_
- 2) The length of a sailboat is about 35 \_\_\_\_\_
- 3) The length of a school hallway is about 75 \_\_\_\_\_
- 4) The height of an adult elephant is about 12 \_\_\_\_\_
- 5) The height of a state fair ferris wheel is about 200 \_\_\_\_\_
- 6) The length of a paper clip is about 1 \_\_\_\_\_
- 7) The height of a bunk bed is about 6 \_\_\_\_\_
- 8) The height of a drinking glass is about 7 \_\_\_\_\_
- 9) The height of a gallon of milk is about 9 \_\_\_\_\_
- 10) The length of a house key is about 2 \_\_\_\_\_
- 11) The height of the Statue of Liberty is about 93 \_\_\_\_\_
- 12) The height of an apple is about 8 \_\_\_\_\_
- 13) The height of a big screen tv is about 1 \_\_\_\_\_
- 14) The length of a skateboard is about 76 \_\_\_\_\_
- 15) The depth of a large swimming pool is about 3 \_\_\_\_\_
- 16) The width of a sheet of paper is about 21 \_\_\_\_\_
- 17) The length of a shoe is about 20 \_\_\_\_\_
- 18) The height of a dog is about 1 \_\_\_\_\_
- 19) The width of a piece of bread is about 10 \_\_\_\_\_
- 20) The width of a keyboard is about 43 \_\_\_\_\_

1. \_\_\_\_\_
2. \_\_\_\_\_
3. \_\_\_\_\_
4. \_\_\_\_\_
5. \_\_\_\_\_
6. \_\_\_\_\_
7. \_\_\_\_\_
8. \_\_\_\_\_
9. \_\_\_\_\_
10. \_\_\_\_\_
11. \_\_\_\_\_
12. \_\_\_\_\_
13. \_\_\_\_\_
14. \_\_\_\_\_
15. \_\_\_\_\_
16. \_\_\_\_\_
17. \_\_\_\_\_
18. \_\_\_\_\_
19. \_\_\_\_\_
20. \_\_\_\_\_



Choose 'inches', 'feet', 'centimeters' or 'meters' to fill in the blank.

- 1) The height of a clothes dresser is about 3 \_\_\_\_\_
- 2) The length of a sailboat is about 35 \_\_\_\_\_
- 3) The length of a school hallway is about 75 \_\_\_\_\_
- 4) The height of an adult elephant is about 12 \_\_\_\_\_
- 5) The height of a state fair ferris wheel is about 200 \_\_\_\_\_
- 6) The length of a paper clip is about 1 \_\_\_\_\_
- 7) The height of a bunk bed is about 6 \_\_\_\_\_
- 8) The height of a drinking glass is about 7 \_\_\_\_\_
- 9) The height of a gallon of milk is about 9 \_\_\_\_\_
- 10) The length of a house key is about 2 \_\_\_\_\_
- 11) The height of the Statue of Liberty is about 93 \_\_\_\_\_
- 12) The height of an apple is about 8 \_\_\_\_\_
- 13) The height of a big screen tv is about 1 \_\_\_\_\_
- 14) The length of a skateboard is about 76 \_\_\_\_\_
- 15) The depth of a large swimming pool is about 3 \_\_\_\_\_
- 16) The width of a sheet of paper is about 21 \_\_\_\_\_
- 17) The length of a shoe is about 20 \_\_\_\_\_
- 18) The height of a dog is about 1 \_\_\_\_\_
- 19) The width of a piece of bread is about 10 \_\_\_\_\_
- 20) The width of a keyboard is about 43 \_\_\_\_\_

Answers

1. **feet**
2. **feet**
3. **feet**
4. **feet**
5. **feet**
6. **inch**
7. **feet**
8. **inches**
9. **inches**
10. **inches**
11. **meters**
12. **centimeters**
13. **meter**
14. **centimeters**
15. **meters**
16. **centimeters**
17. **centimeters**
18. **meter**
19. **centimeters**
20. **centimeters**

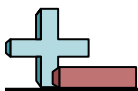


Choose 'inches', 'feet', 'centimeters' or 'meters' to fill in the blank.

Answers

- 1) The height of a stove is about 3 \_\_\_\_\_
- 2) The length of a ruler is about 12 \_\_\_\_\_
- 3) The width of a round door knob is about 2 \_\_\_\_\_
- 4) The length of a Q-Tip is about 3 \_\_\_\_\_
- 5) The height of a dog is about 2 \_\_\_\_\_
- 6) The length of a sailboat is about 35 \_\_\_\_\_
- 7) The height of a birthday candle is about 2 \_\_\_\_\_
- 8) The length of a school bus is about 35 \_\_\_\_\_
- 9) The height of a tennis ball is about 3 \_\_\_\_\_
- 10) The length of a pen is about 5 \_\_\_\_\_
- 11) The height of refrigerator is about 2 \_\_\_\_\_
- 12) The height of a big screen tv is about 1 \_\_\_\_\_
- 13) The height of the Statue of Liberty is about 93 \_\_\_\_\_
- 14) The length of a shoe is about 20 \_\_\_\_\_
- 15) The height of a bowl is about 8 \_\_\_\_\_
- 16) The length of a school hallway is about 23 \_\_\_\_\_
- 17) The height of a salt shaker is about 8 \_\_\_\_\_
- 18) The height of a school chalkboard is about 1 \_\_\_\_\_
- 19) The length of a spoon is about 15 \_\_\_\_\_
- 20) The height of a drinking glass is about 18 \_\_\_\_\_

1. \_\_\_\_\_
2. \_\_\_\_\_
3. \_\_\_\_\_
4. \_\_\_\_\_
5. \_\_\_\_\_
6. \_\_\_\_\_
7. \_\_\_\_\_
8. \_\_\_\_\_
9. \_\_\_\_\_
10. \_\_\_\_\_
11. \_\_\_\_\_
12. \_\_\_\_\_
13. \_\_\_\_\_
14. \_\_\_\_\_
15. \_\_\_\_\_
16. \_\_\_\_\_
17. \_\_\_\_\_
18. \_\_\_\_\_
19. \_\_\_\_\_
20. \_\_\_\_\_



Choose 'inches', 'feet', 'centimeters' or 'meters' to fill in the blank.

- 1) The height of a stove is about 3 \_\_\_\_\_
- 2) The length of a ruler is about 12 \_\_\_\_\_
- 3) The width of a round door knob is about 2 \_\_\_\_\_
- 4) The length of a Q-Tip is about 3 \_\_\_\_\_
- 5) The height of a dog is about 2 \_\_\_\_\_
- 6) The length of a sailboat is about 35 \_\_\_\_\_
- 7) The height of a birthday candle is about 2 \_\_\_\_\_
- 8) The length of a school bus is about 35 \_\_\_\_\_
- 9) The height of a tennis ball is about 3 \_\_\_\_\_
- 10) The length of a pen is about 5 \_\_\_\_\_
- 11) The height of refrigerator is about 2 \_\_\_\_\_
- 12) The height of a big screen tv is about 1 \_\_\_\_\_
- 13) The height of the Statue of Liberty is about 93 \_\_\_\_\_
- 14) The length of a shoe is about 20 \_\_\_\_\_
- 15) The height of a bowl is about 8 \_\_\_\_\_
- 16) The length of a school hallway is about 23 \_\_\_\_\_
- 17) The height of a salt shaker is about 8 \_\_\_\_\_
- 18) The height of a school chalkboard is about 1 \_\_\_\_\_
- 19) The length of a spoon is about 15 \_\_\_\_\_
- 20) The height of a drinking glass is about 18 \_\_\_\_\_

Answers

1. feet
2. inches
3. inches
4. inches
5. feet
6. feet
7. inches
8. feet
9. inches
10. inches
11. meters
12. meter
13. meters
14. centimeters
15. centimeters
16. meters
17. centimeters
18. meter
19. centimeters
20. centimeters