



Determine which letter best represents the length / height.

**Answers**

**Millimeter (mm)**

**Centimeter (cm)**

**Meter (m)**

**Kilometer (km)**

A millimeter is about the thickness of a credit card.

10 mm = 1 cm.  
The metal portion of a pencil is about 1 cm. A ruler is about 30 centimeters.

100 cm = 1 m  
From the floor to a door knob is about 1 meter.

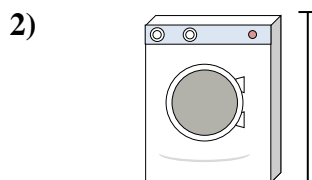
1,000 m = 1 km  
Most major roads are at least a kilometer long.




1. \_\_\_\_\_
2. \_\_\_\_\_
3. \_\_\_\_\_
4. \_\_\_\_\_
5. \_\_\_\_\_
6. \_\_\_\_\_
7. \_\_\_\_\_
8. \_\_\_\_\_
9. \_\_\_\_\_



- Can of Soda
- A. 30 centimeters
  - B. 3 centimeters
  - C. 1 meter
  - D. 10 centimeters




- Washing Machine
- A. 1 meter
  - B. 30 centimeters
  - C. 2 meters
  - D. 10 centimeters




- Lollipop
- A. 30 millimeters
  - B. 30 centimeters
  - C. 2 kilometers
  - D. 10 centimeters



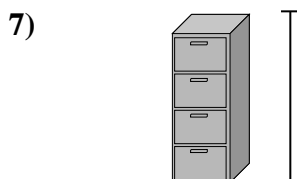
- Bicycle
- A. 25 centimeters
  - B. 10 centimeters
  - C. 1 meter
  - D. 3 meters



- Shovel
- A. 30 centimeters
  - B. 60 centimeters
  - C. 1 meter
  - D. 3 meters



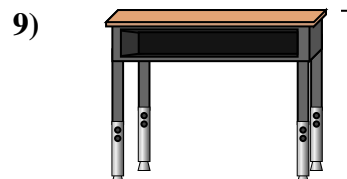
- Bowling Ball Height
- A. 25 centimeters
  - B. 305 centimeters
  - C. 1 meter
  - D. 10 centimeters



- File Cabinet
- A. 30 centimeters
  - B. 1.5 millimeters
  - C. 30 millimeters
  - D. 60 centimeters




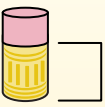
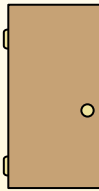

- Pencil
- A. 30 millimeters
  - B. 20 centimeters
  - C. 150 centimeters
  - D. 1 meter





- Desk
- A. 2 meters
  - B. 15 centimeters
  - C. 30 centimeters
  - D. 70 centimeters



Determine which letter best represents the length / height.

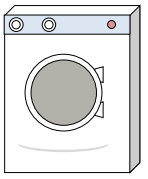

Millimeter (mm)	Centimeter (cm)	Meter (m)	Kilometer (km)
A millimeter is about the thickness of a credit card.	10 mm = 1 cm. The metal portion of a pencil is about 1 cm. A ruler is about 30 centimeters.	100 cm = 1 m From the floor to a door knob is about 1 meter.	1,000 m = 1 km Most major roads are at least a kilometer long.
			

**Answers**

1)  



Can of Soda

A. 30 centimeters  
B. 3 centimeters  
C. 1 meter  
D. 10 centimeters

2)  



Washing Machine

A. 1 meter  
B. 30 centimeters  
C. 2 meters  
D. 10 centimeters

3)  

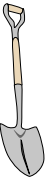

Lollipop

A. 30 millimeters  
B. 30 centimeters  
C. 2 kilometers  
D. 10 centimeters

4)  



Bicycle

A. 25 centimeters  
B. 10 centimeters  
C. 1 meter  
D. 3 meters

5)  



Shovel

A. 30 centimeters  
B. 60 centimeters  
C. 1 meter  
D. 3 meters

6)  


Bowling Ball Height

A. 25 centimeters  
B. 305 centimeters  
C. 1 meter  
D. 10 centimeters

7)  

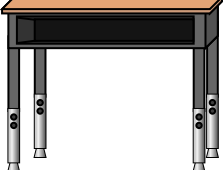

File Cabinet

A. 30 centimeters  
B. 1.5 millimeters  
C. 30 millimeters  
D. 60 centimeters

8)  

Pencil

A. 30 millimeters  
B. 20 centimeters  
C. 150 centimeters  
D. 1 meter

9)  

Desk

A. 2 meters  
B. 15 centimeters  
C. 30 centimeters  
D. 70 centimeters

1.     **D**
2.     **A**
3.     **D**
4.     **C**
5.     **C**
6.     **A**
7.     **B**
8.     **B**
9.     **D**