



Determine which letter best represents the length / height.

**Answers**

**Millimeter (mm)**

**Centimeter (cm)**

**Meter (m)**

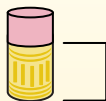
**Kilometer (km)**

A millimeter is about the thickness of a credit card.

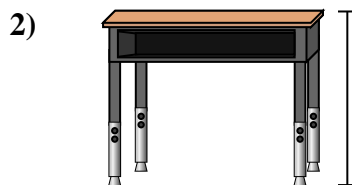
10 mm = 1 cm.  
The metal portion of a pencil is about 1 cm. A ruler is about 30 centimeters.

100 cm = 1 m  
From the floor to a door knob is about 1 meter.


1,000 m = 1 km  
Most major roads are at least a kilometer long.



- Pen  
A. 12 centimeters  
B. 30 millimeters  
C. 30 centimeters  
D. 5 meters



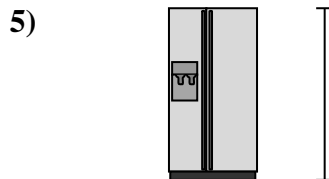
- Desk  
A. 15 centimeters  
B. 2 meters  
C. 70 centimeters  
D. 30 centimeters



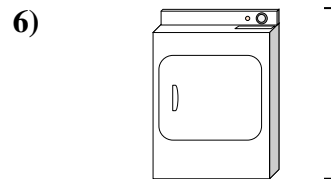
- Frog  
A. 20 centimeters  
B. 8 centimeters  
C. 4 millimeters  
D. 60 centimeters



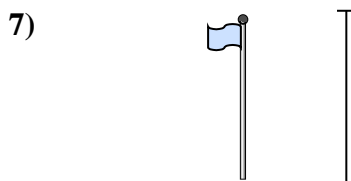
- Bicycle  
A. 10 centimeters  
B. 1 meter  
C. 3 meters  
D. 25 centimeters




- Refrigerator  
A. 180 centimeters  
B. 30 centimeters  
C. 5 kilometers  
D. 4 meters



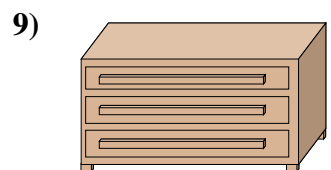
- Clothes Dryer  
A. 60 centimeters  
B. 1 meter  
C. 25 centimeters  
D. 15 centimeters



- Flag Pole  
A. 2 kilometers  
B. 9 meters  
C. 300 centimeters  
D. 2 meters



- Tennis Ball  
A. 3 millimeters  
B. 25 centimeters  
C. 8 centimeters  
D. 60 centimeters



- Dresser  
A. 45 centimeters  
B. 90 centimeters  
C. 3 meters  
D. 30 centimeters

- 1. \_\_\_\_\_
- 2. \_\_\_\_\_
- 3. \_\_\_\_\_
- 4. \_\_\_\_\_
- 5. \_\_\_\_\_
- 6. \_\_\_\_\_
- 7. \_\_\_\_\_
- 8. \_\_\_\_\_
- 9. \_\_\_\_\_



Determine which letter best represents the length / height.

**Millimeter (mm)**

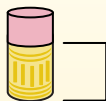
A millimeter is about the thickness of a credit card.



**Centimeter (cm)**

10 mm = 1 cm.

The metal portion of a pencil is about 1 cm. A ruler is about 30 centimeters.



**Meter (m)**

100 cm = 1 m

From the floor to a door knob is about 1 meter.



**Kilometer (km)**

1,000 m = 1 km

Most major roads are at least a kilometer long.



**Answers**

1. **A**

2. **C**

3. **B**

4. **B**

5. **A**

6. **B**

7. **B**

8. **C**

9. **B**

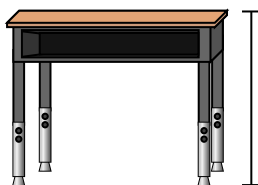
1)



Pen

- A. 12 centimeters
- B. 30 millimeters
- C. 30 centimeters
- D. 5 meters

2)



Desk

- A. 15 centimeters
- B. 2 meters
- C. 70 centimeters
- D. 30 centimeters

3)



Frog

- A. 20 centimeters
- B. 8 centimeters
- C. 4 millimeters
- D. 60 centimeters

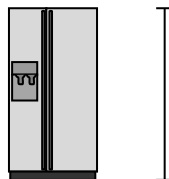
4)



Bicycle

- A. 10 centimeters
- B. 1 meter
- C. 3 meters
- D. 25 centimeters


5)



Refrigerator

- A. 180 centimeters
- B. 30 centimeters
- C. 5 kilometers
- D. 4 meters

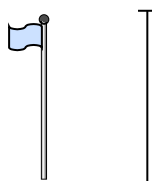
6)



Clothes Dryer

- A. 60 centimeters
- B. 1 meter
- C. 25 centimeters
- D. 15 centimeters


7)



Flag Pole

- A. 2 kilometers
- B. 9 meters
- C. 300 centimeters
- D. 2 meters

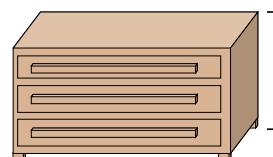
8)



Tennis Ball

- A. 3 millimeters
- B. 25 centimeters
- C. 8 centimeters
- D. 60 centimeters

9)



Dresser

- A. 45 centimeters
- B. 90 centimeters
- C. 3 meters
- D. 30 centimeters