




Measure the width of each block in inches and in centimeters.

Ex)



Answers

Ex. 1 2-3

1)



1. _____

2. _____

2)



3. _____

4. _____


3)



5. _____

6. _____

4)



7. _____

8. _____

5)



9. _____

6)



7)



8)



9)





Measure the width of each block in inches and in centimeters.

Ex)



1)




2)



3)



4)



5)



6)



7)



8)



9)



Answers

- Ex. 1 2 - 3
1. 1 1/2 3 - 4
2. 5 12 - 13
3. 5 1/2 13 - 14
4. 0 1/2 1 - 2
5. 3 7 - 8
6. 2 5 - 6
7. 4 10 - 11
8. 4 1/2 11 - 12
9. 3 1/2 8 - 9