



Measure the width and height of each block in inches and in centimeters.

Ex)



Answers

Ex. 4 1 1/2 10.2 3.8


1. _____

2. _____

3. _____

4. _____


1)




2)



3)




4)





Measure the width and height of each block in inches and in centimeters.

Ex)



Answers

Ex. 4 1 1/2 10.2 3.8


1. 2 1 1/2 5.1 3.8

2. 3 0 1/2 7.6 1.3

3. 3 1/2 1 1/2 8.9 3.8

4. 0 1/2 0 1/2 1.3 1.3

1)



2)



3)



4)

