



Measure the width and height of each block in inches and in centimeters.

Ex)



Answers

Ex. 4 0 1/2 10.2 1.3


1. _____

2. _____

3. _____

4. _____

1)




2)



3)



4)





Measure the width and height of each block in inches and in centimeters.

Ex)



Answers

Ex. 4 0 1/2 10.2 1.3


1. 0 1/2 1 1/2 1.3 3.8

2. 1 1/2 0 1/2 3.8 1.3

3. 5 1/2 0 1/2 14 1.3

4. 3 1 1/2 7.6 3.8

1)



2)



3)



4)

