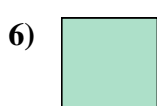




Measure the width of each block in inches and in centimeters.



**Answers**

Ex. 5 1/2 13 - 14

1. \_\_\_\_\_

2. \_\_\_\_\_

3. \_\_\_\_\_

4. \_\_\_\_\_

5. \_\_\_\_\_

6. \_\_\_\_\_


7. \_\_\_\_\_


8. \_\_\_\_\_


9. \_\_\_\_\_





Measure the width of each block in inches and in centimeters.


Ex) 


1) 


2) 


3) 


4) 

5) 

6) 

7) 

8) 

9) 

**Answers**

- Ex. 5 1/2   13 - 14
1. 3 1/2   8 - 9
2. 4   10 - 11
3. 5   12 - 13
4. 1   2 - 3
5. 3   7 - 8
6. 0 1/2   1 - 2
7. 1 1/2   3 - 4
8. 2   5 - 6
9. 4 1/2   11 - 12