



Measure the width of each block in inches and in centimeters.

Ex)



1)




2)



3)



4)



5)



6)



7)



8)



9)



**Answers**

Ex. 1 2 - 3

1. \_\_\_\_\_

2. \_\_\_\_\_

3. \_\_\_\_\_

4. \_\_\_\_\_

5. \_\_\_\_\_

6. \_\_\_\_\_

7. \_\_\_\_\_

8. \_\_\_\_\_


9. \_\_\_\_\_





Measure the width of each block in inches and in centimeters.

Ex)



1)




2)



3)



4)



5)



6)



7)



8)



9)

**Answers**Ex. 1 2 - 31. 1 1/2 3 - 42. 5 12 - 133. 5 1/2 13 - 144. 0 1/2 1 - 25. 3 7 - 86. 2 5 - 67. 4 10 - 118. 4 1/2 11 - 129. 3 1/2 8 - 9