

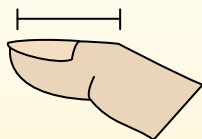


Determine which letter best represents the length / height.

Answers

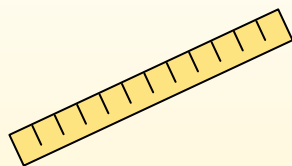
Inch (in)

An inch is about the distance of the last joint of your finger.



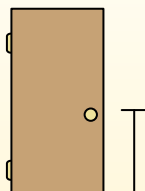
Foot (ft)

A foot is 12 inches. The length of a ruler.



Yard (yd)

1 yard is the same as 3 feet. From the floor to a door knob is about 1 yard.



Mile (mi)

A mile is 5,280 feet. Most major roads are at least a mile long.



1. _____
2. _____
3. _____
4. _____
5. _____
6. _____
7. _____
8. _____
9. _____

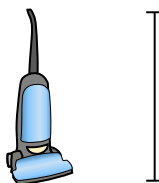
1)



Bicycle

- A. 3 inches
- B. 10 inches
- C. 1 yard
- D. 3 yards

2)



Vacuum

- A. 11 inches
- B. 4 feet
- C. 3 yards
- D. 1 foot


3)



Toothbrush

- A. 1 yard
- B. 10 feet
- C. 7 inches
- D. 4 inches


4)



Cereal Box Height

- A. 4 inches
- B. 2 feet
- C. 1 inch
- D. 1 foot

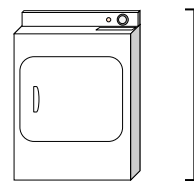
5)



Elephant

- A. 1 mile
- B. 5 feet
- C. 18 inches
- D. 4 yards

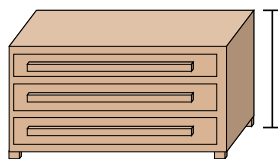
6)



Clothes Dryer

- A. 6 inches
- B. 2 feet
- C. 11 inches
- D. 1 yard

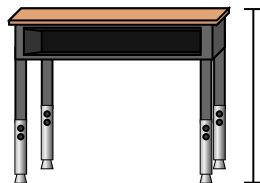
7)



Dresser

- A. 12 inches
- B. 3 yards
- C. 3 feet
- D. 18 inches

8)



Desk

- A. 6 inches
- B. 11 inches
- C. 2 feet
- D. 2 yards

9)



Bug

- A. 3 yards
- B. 3 inches
- C. 1 foot
- D. 1 inch



Determine which letter best represents the length / height.

Answers

Inch (in)

Foot (ft)

Yard (yd)

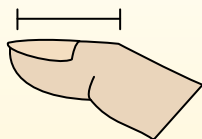
Mile (mi)

An inch is about the distance of the last joint of your finger.

A foot is 12 inches. The length of a ruler.

1 yard is the same as 3 feet. From the floor to a door knob is about 1 yard.


A mile is 5,280 feet. Most major roads are at least a mile long.



- Bicycle
- A. 3 inches
 - B. 10 inches
 - C. 1 yard
 - D. 3 yards




- Vacuum
- A. 11 inches
 - B. 4 feet
 - C. 3 yards
 - D. 1 foot



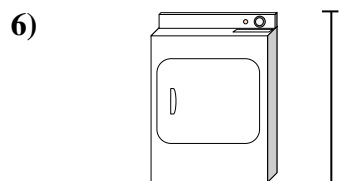
- Toothbrush
- A. 1 yard
 - B. 10 feet
 - C. 7 inches
 - D. 4 inches



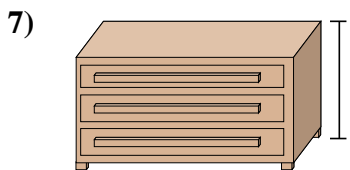
- Cereal Box Height
- A. 4 inches
 - B. 2 feet
 - C. 1 inch
 - D. 1 foot



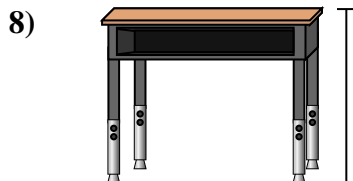
- Elephant
- A. 1 mile
 - B. 5 feet
 - C. 18 inches
 - D. 4 yards



- Clothes Dryer
- A. 6 inches
 - B. 2 feet
 - C. 11 inches
 - D. 1 yard



- Dresser
- A. 12 inches
 - B. 3 yards
 - C. 3 feet
 - D. 18 inches



- Desk
- A. 6 inches
 - B. 11 inches
 - C. 2 feet
 - D. 2 yards



- Bug
- A. 3 yards
 - B. 3 inches
 - C. 1 foot
 - D. 1 inch

- 1. **C**
- 2. **B**
- 3. **C**
- 4. **D**
- 5. **D**
- 6. **D**
- 7. **C**
- 8. **C**
- 9. **D**