



Match the description on the top with the visual image on the bottom.

Answers

- 1) Acute $\angle BDE$
- 2) \overleftrightarrow{AD} intersecting \overleftrightarrow{BC} at point E
- 3) \overleftrightarrow{AE} intersecting \overleftrightarrow{DB}
- 4) \overleftrightarrow{BC} intersecting $\angle ACD$
- 5) Acute $\angle ABC$ intersecting \overleftrightarrow{AD}
- 6) Right $\angle ADE$
- 7) \overleftrightarrow{AC} parallel to \overleftrightarrow{EB}
- 8) \overleftrightarrow{AC} intersected by \overline{BD}
- 9) \overleftrightarrow{BD} intersecting $\angle ACE$
- 10) \overleftrightarrow{AB} intersecting \overleftrightarrow{AD}
- 11) \overleftrightarrow{BD} intersecting \overline{CE}
- 12) $\angle DEC$ intersected by \overleftrightarrow{AC}

1. _____
2. _____
3. _____
4. _____
5. _____
6. _____
7. _____
8. _____
9. _____
10. _____
11. _____
12. _____

A.

B.

C.

D.

E.

F.

G.

H.

I.

J.

K.

L.



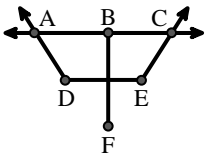
Match the description on the top with the visual image on the bottom.

Answers

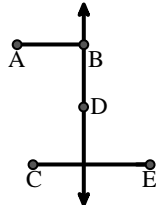
- 1) Acute $\angle BDE$
- 2) \overleftrightarrow{AD} intersecting \overleftrightarrow{BC} at point E
- 3) \overleftrightarrow{AE} intersecting \overleftrightarrow{DB}
- 4) \overleftrightarrow{BC} intersecting $\angle ACD$
- 5) Acute $\angle ABC$ intersecting \overleftrightarrow{AD}
- 6) Right $\angle ADE$
- 7) \overleftrightarrow{AC} parallel to \overleftrightarrow{EB}
- 8) \overleftrightarrow{AC} intersected by \overline{BD}
- 9) \overleftrightarrow{BD} intersecting $\angle ACE$
- 10) \overleftrightarrow{AB} intersecting \overleftrightarrow{AD}
- 11) \overleftrightarrow{BD} intersecting \overline{CE}
- 12) $\angle DEC$ intersected by \overleftrightarrow{AC}

1. **J**
2. **H**
3. **I**
4. **C**
5. **K**
6. **L**
7. **F**
8. **G**
9. **D**
10. **E**
11. **B**
12. **A**

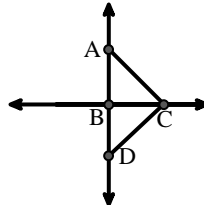
A.



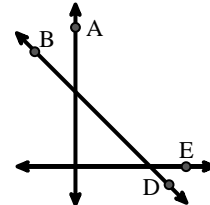
B.



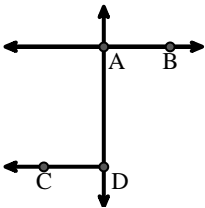
C.



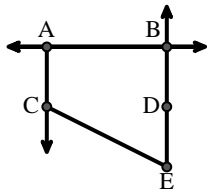
D.



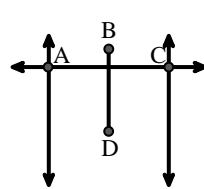
E.



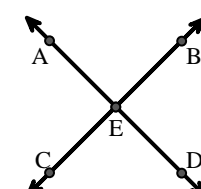
F.



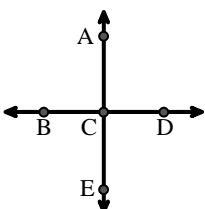
G.



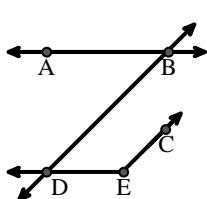
H.



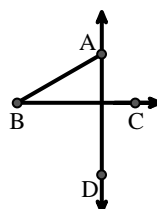
I.



J.



K.



L.

