



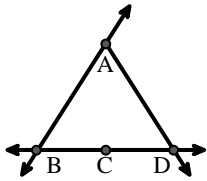
Match the description on the top with the visual image on the bottom.

**Answers**

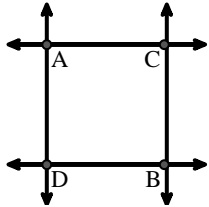
- 1) Right  $\angle ADE$
- 2) D as the midpoint of  $\overleftrightarrow{CE}$
- 3) Acute  $\angle BED$
- 4)  $\overleftrightarrow{AB}$  intersecting  $\overleftrightarrow{AD}$
- 5) Acute  $\angle BDE$
- 6)  $\overleftrightarrow{AD}$  intersecting  $\overleftrightarrow{BC}$  at point E
- 7)  $\overleftrightarrow{AB}$  parallel to  $\overleftrightarrow{CD}$
- 8)  $\overleftrightarrow{AB}$  intersecting  $\angle BCD$  at point B
- 9)  $\overleftrightarrow{AC}$  perpendicular to  $\overleftrightarrow{AD}$
- 10)  $\overleftrightarrow{AE}$  intersecting  $\overleftrightarrow{DB}$
- 11)  $\overleftrightarrow{BD}$  intersecting  $\angle ACE$
- 12)  $\overleftrightarrow{BA}$  intersecting  $\overleftrightarrow{AD}$

1. \_\_\_\_\_
2. \_\_\_\_\_
3. \_\_\_\_\_
4. \_\_\_\_\_
5. \_\_\_\_\_
6. \_\_\_\_\_
7. \_\_\_\_\_
8. \_\_\_\_\_
9. \_\_\_\_\_
10. \_\_\_\_\_
11. \_\_\_\_\_
12. \_\_\_\_\_

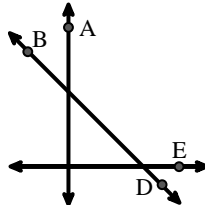
A.



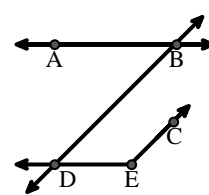
B.



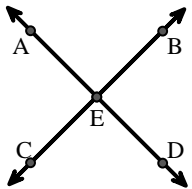
C.



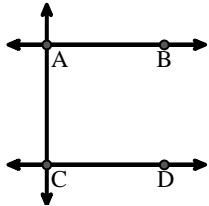
D.



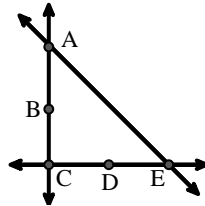
E.



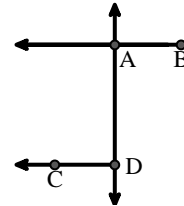
F.



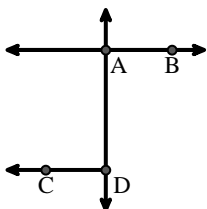
G.



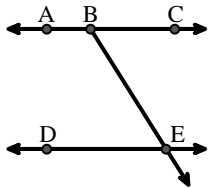
H.



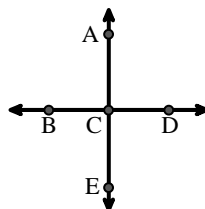
I.



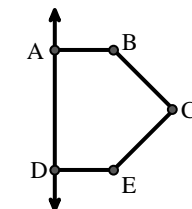
J.



K.



L.





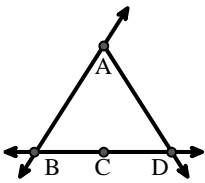
Match the description on the top with the visual image on the bottom.

**Answers**

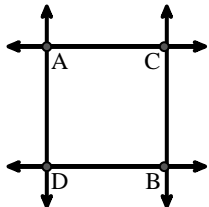
- 1) Right  $\angle ADE$
- 2) D as the midpoint of  $\overleftrightarrow{CE}$
- 3) Acute  $\angle BED$
- 4)  $\overleftrightarrow{AB}$  intersecting  $\overleftrightarrow{AD}$
- 5) Acute  $\angle BDE$
- 6)  $\overleftrightarrow{AD}$  intersecting  $\overleftrightarrow{BC}$  at point E
- 7)  $\overleftrightarrow{AB}$  parallel to  $\overleftrightarrow{CD}$
- 8)  $\overleftrightarrow{AB}$  intersecting  $\angle BCD$  at point B
- 9)  $\overleftrightarrow{AC}$  perpendicular to  $\overleftrightarrow{AD}$
- 10)  $\overleftrightarrow{AE}$  intersecting  $\overleftrightarrow{DB}$
- 11)  $\overleftrightarrow{BD}$  intersecting  $\angle ACE$
- 12)  $\overleftrightarrow{BA}$  intersecting  $\overleftrightarrow{AD}$

1.   **L**
2.   **G**
3.   **J**
4.   **I**
5.   **D**
6.   **E**
7.   **F**
8.   **A**
9.   **B**
10.   **K**
11.   **C**
12.   **H**

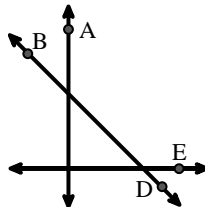
A.



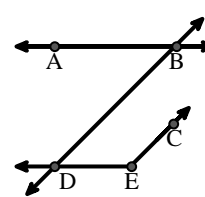
B.



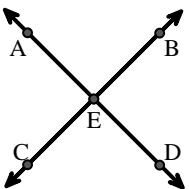
C.



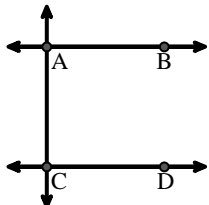
D.



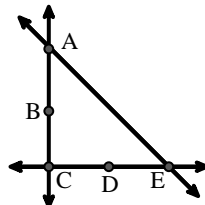
E.



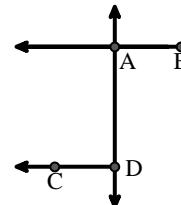
F.



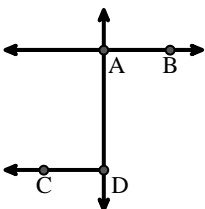
G.



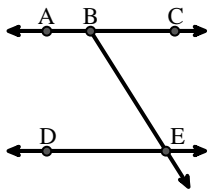
H.



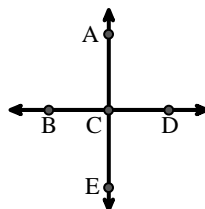
I.



J.



K.



L.

