



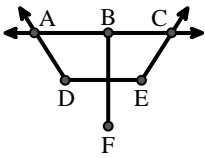
Match the description on the top with the visual image on the bottom.

**Answers**

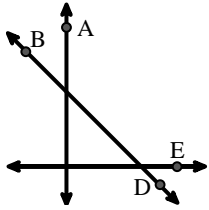
- 1)  $\overleftrightarrow{AB}$  intersecting  $\angle BCD$  at point B
- 2)  $\overleftrightarrow{AC}$  parallel to  $\overleftrightarrow{EB}$
- 3)  $\overleftrightarrow{AB}$  parallel to  $\overleftrightarrow{CD}$
- 4) Acute  $\angle BED$
- 5)  $\overleftrightarrow{AC}$  intersected by  $\overleftrightarrow{BD}$
- 6) Right  $\angle ADE$
- 7) Acute  $\angle ABC$  intersecting  $\overleftrightarrow{AD}$
- 8)  $\overleftrightarrow{BD}$  intersecting  $\angle ACE$
- 9)  $\overleftrightarrow{AC}$  perpendicular to  $\overleftrightarrow{AD}$
- 10)  $\angle DEC$  intersected by  $\overleftrightarrow{AC}$
- 11)  $\overleftrightarrow{BA}$  intersecting  $\overleftrightarrow{AD}$
- 12)  $\overleftrightarrow{AE}$  intersecting  $\overleftrightarrow{DB}$

1. \_\_\_\_\_
2. \_\_\_\_\_
3. \_\_\_\_\_
4. \_\_\_\_\_
5. \_\_\_\_\_
6. \_\_\_\_\_
7. \_\_\_\_\_
8. \_\_\_\_\_
9. \_\_\_\_\_
10. \_\_\_\_\_
11. \_\_\_\_\_
12. \_\_\_\_\_

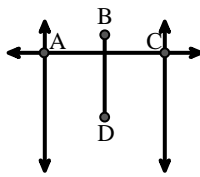
A.



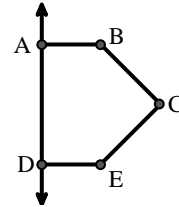
B.



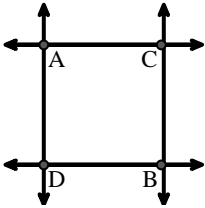
C.



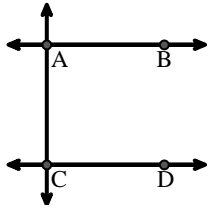
D.



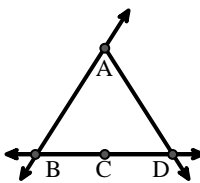
E.



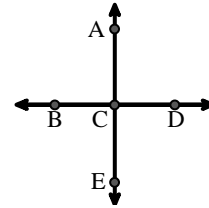
F.



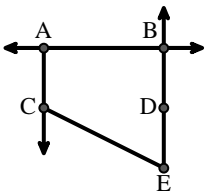
G.



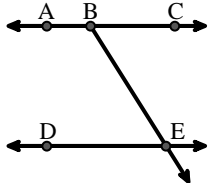
H.



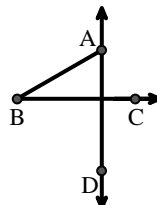
I.



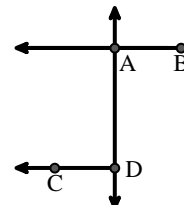
J.



K.



L.





Match the description on the top with the visual image on the bottom.

**Answers**

- 1)  $\overleftrightarrow{AB}$  intersecting  $\angle BCD$  at point B
- 2)  $\overleftrightarrow{AC}$  parallel to  $\overleftrightarrow{EB}$
- 3)  $\overleftrightarrow{AB}$  parallel to  $\overleftrightarrow{CD}$
- 4) Acute  $\angle BED$
- 5)  $\overleftrightarrow{AC}$  intersected by  $\overleftrightarrow{BD}$
- 6) Right  $\angle ADE$
- 7) Acute  $\angle ABC$  intersecting  $\overleftrightarrow{AD}$
- 8)  $\overleftrightarrow{BD}$  intersecting  $\angle ACE$
- 9)  $\overleftrightarrow{AC}$  perpendicular to  $\overleftrightarrow{AD}$
- 10)  $\angle DEC$  intersected by  $\overleftrightarrow{AC}$
- 11)  $\overleftrightarrow{BA}$  intersecting  $\overleftrightarrow{AD}$
- 12)  $\overleftrightarrow{AE}$  intersecting  $\overleftrightarrow{DB}$

1. **G**
2. **I**
3. **F**
4. **J**
5. **C**
6. **D**
7. **K**
8. **B**
9. **E**
10. **A**
11. **L**
12. **H**

A.

B.

C.

D.

E.

F.

G.

H.

I.

J.

K.

L.