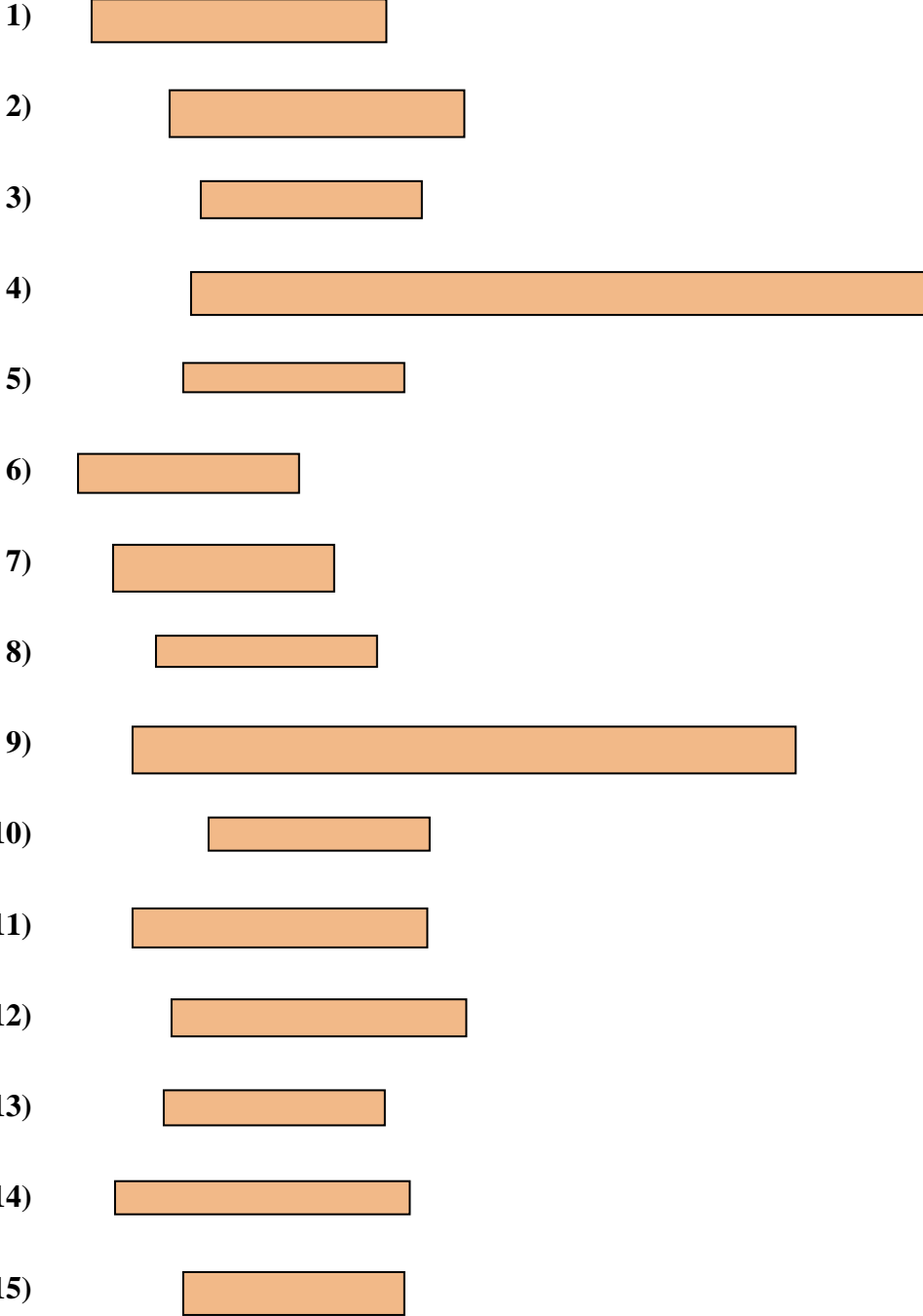




Measure each of the bars (in centimeters) and then generate a line plot based on the information.

Answers
















- 1. _____
- 2. _____
- 3. _____
- 4. _____
- 5. _____
- 6. _____
- 7. _____
- 8. _____
- 9. _____
- 10. _____
- 11. _____
- 12. _____
- 13. _____
- 14. _____
- 15. _____

Line Plot



Measure each of the bars (in centimeters) and then generate a line plot based on the information.

- 1)  4
- 2)  4
- 3)  3
- 4)  10
- 5)  3
- 6)  3
- 7)  3
- 8)  3
- 9)  9
- 10)  3
- 11)  4
- 12)  4
- 13)  3
- 14)  4
- 15)  3

Answers

- 1. 4
- 2. 4
- 3. 3
- 4. 10
- 5. 3
- 6. 3
- 7. 3
- 8. 3
- 9. 9
- 10. 3
- 11. 4
- 12. 4
- 13. 3
- 14. 4
- 15. 3

Line Plot

