





Create and label the line plot using the set of numbers provided.


- 1)  $7\frac{3}{8}$     $8\frac{3}{8}$     $9\frac{2}{8}$     $7\frac{3}{8}$    9    $9\frac{5}{8}$     $7\frac{1}{8}$     $8\frac{4}{8}$   
 $8\frac{7}{8}$     $7\frac{2}{8}$     $9\frac{4}{8}$     $7\frac{2}{8}$     $7\frac{2}{8}$     $7\frac{1}{8}$     $9\frac{1}{8}$     $8\frac{7}{8}$




- 2) 7    $7\frac{4}{8}$     $8\frac{3}{8}$     $7\frac{7}{8}$     $8\frac{2}{8}$     $8\frac{1}{8}$     $7\frac{4}{8}$     $8\frac{5}{8}$   
 $8\frac{7}{8}$     $8\frac{5}{8}$    8   8    $7\frac{3}{8}$     $8\frac{2}{8}$     $6\frac{6}{8}$     $8\frac{5}{8}$




- 3) 6    $4\frac{1}{2}$     $5\frac{1}{2}$    6   4    $6\frac{1}{2}$    6    $5\frac{1}{2}$   
 $6\frac{1}{2}$     $4\frac{1}{2}$    5    $6\frac{1}{2}$     $5\frac{1}{2}$    4   4    $4\frac{1}{2}$



- 4)  $10\frac{3}{4}$     $10\frac{3}{4}$    11    $9\frac{1}{4}$     $9\frac{2}{4}$    11    $10\frac{2}{4}$     $11\frac{2}{4}$   
 $11\frac{1}{4}$     $11\frac{1}{4}$     $9\frac{3}{4}$     $9\frac{2}{4}$     $11\frac{1}{4}$     $9\frac{3}{4}$    10    $10\frac{2}{4}$



- 5)  $8\frac{1}{4}$     $7\frac{3}{4}$     $6\frac{3}{4}$     $7\frac{2}{4}$     $6\frac{1}{4}$     $8\frac{2}{4}$     $6\frac{3}{4}$     $7\frac{3}{4}$   
 $7\frac{2}{4}$     $8\frac{2}{4}$     $7\frac{3}{4}$     $6\frac{2}{4}$     $7\frac{1}{4}$    6    $6\frac{1}{4}$     $6\frac{3}{4}$





Create and label the line plot using the set of numbers provided.

