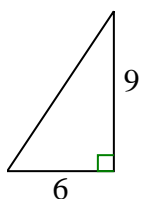




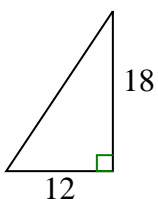
Determine which choice has the same slope as the one shown.

**Answers**

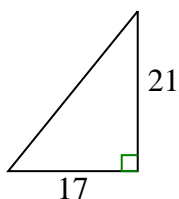
1)



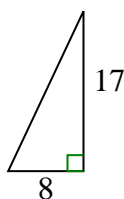
A.



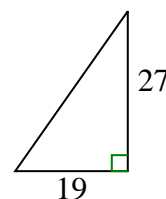
B.



C.



D.



1. \_\_\_\_\_

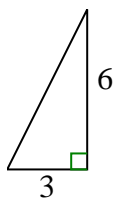
2. \_\_\_\_\_

3. \_\_\_\_\_

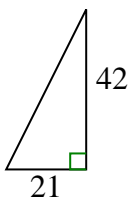
4. \_\_\_\_\_

5. \_\_\_\_\_

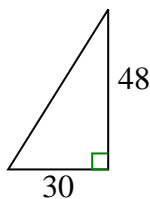
2)



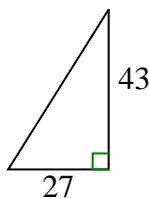
A.



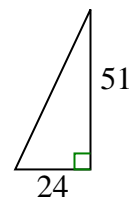
B.



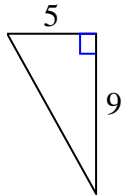
C.



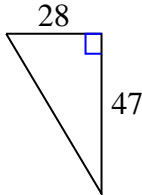
D.



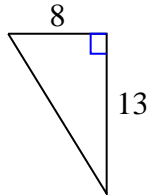
3)



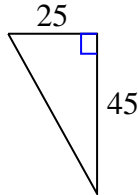
A.



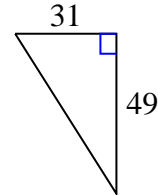
B.



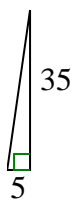
C.



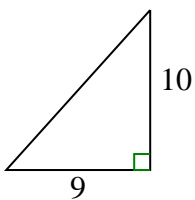
D.



4)



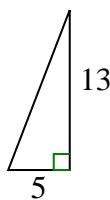
A.



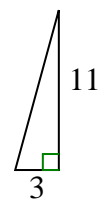
B.



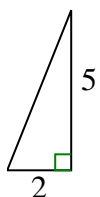
C.



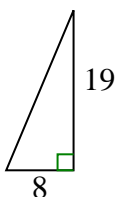
D.



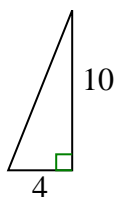
5)



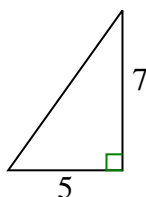
A.



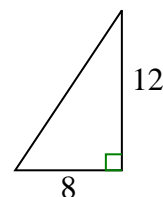
B.



C.



D.

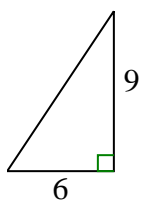




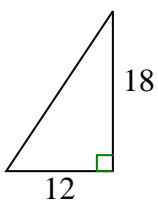
Determine which choice has the same slope as the one shown.

**Answers**

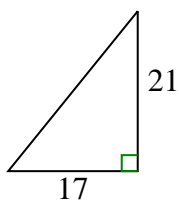
1)



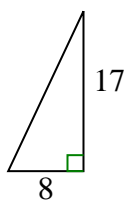
A.



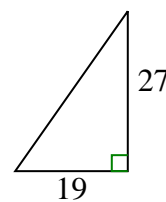
B.



C.

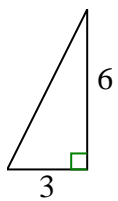


D.

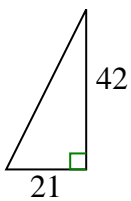


1. **A**

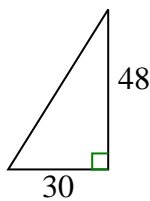
2)



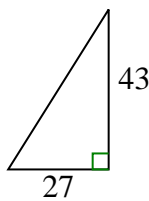
A.



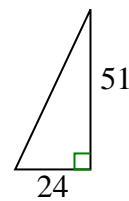
B.



C.



D.



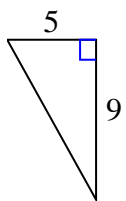
2. **A**

3. **C**

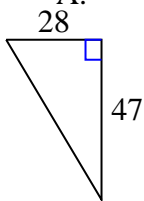
4. **B**

5. **B**

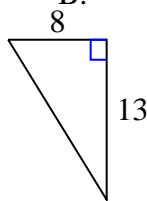
3)



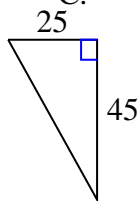
A.



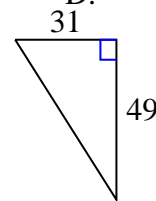
B.



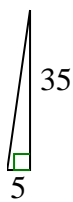
C.



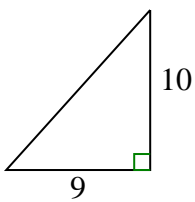
D.



4)



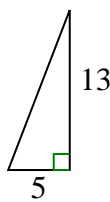
A.



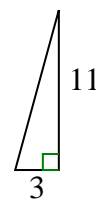
B.



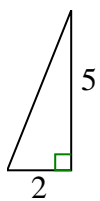
C.



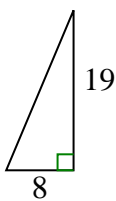
D.



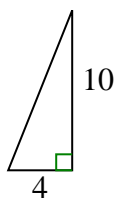
5)



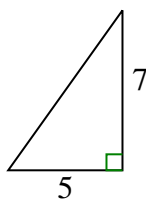
A.



B.



C.



D.

