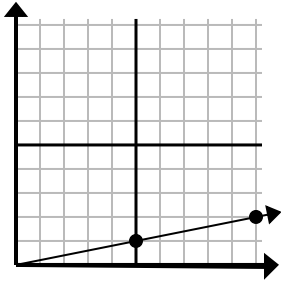




Determine which choice represents a point on the line if it were to continue.

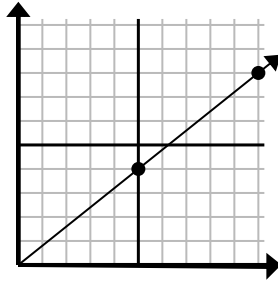
Answers

1)



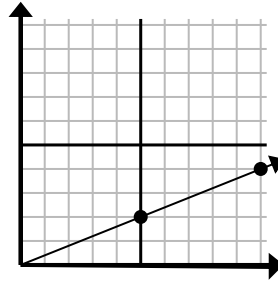
- A. (15 , 3)
- B. (35 , 7)
- C. (25 , 5)
- D. (15 , 4)

2)



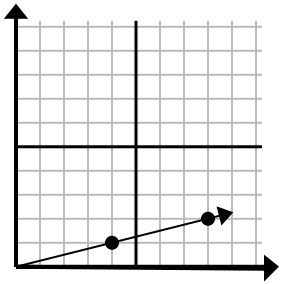
- A. (12 , 7)
- B. (15 , 9)
- C. (15 , 12)
- D. (11 , 8)

3)



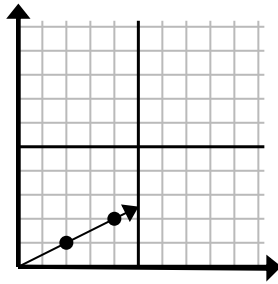
- A. (15 , 6)
- B. (11 , 3)
- C. (20 , 8)
- D. (25 , 10)

4)



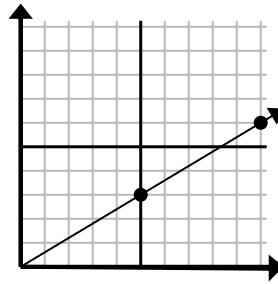
- A. (16 , 4)
- B. (12 , 3)
- C. (9 , 3)
- D. (11 , 5)

5)



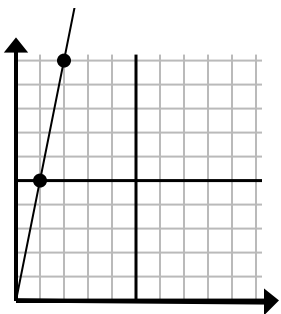
- A. (6 , 3)
- B. (9 , 4)
- C. (8 , 4)
- D. (14 , 7)

6)



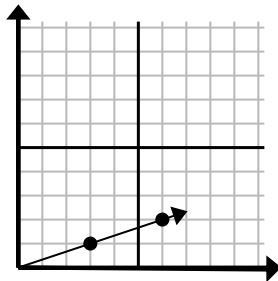
- A. (25 , 15)
- B. (15 , 9)
- C. (35 , 21)
- D. (15 , 8)

7)



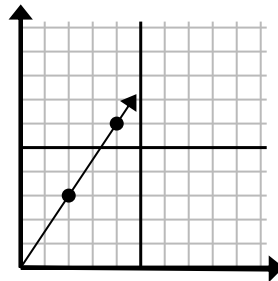
- A. (3 , 15)
- B. (3 , 9)
- C. (6 , 8)
- D. (5 , 25)

8)



- A. (18 , 6)
- B. (8 , 3)
- C. (9 , 3)
- D. (21 , 7)

9)



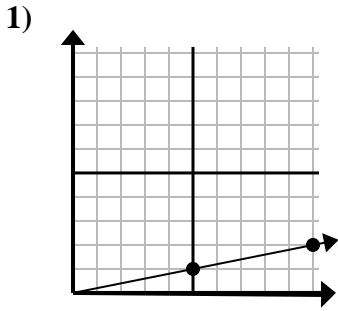
- A. (8 , 8)
- B. (12 , 18)
- C. (10 , 15)
- D. (6 , 9)

1. \_\_\_\_\_
2. \_\_\_\_\_
3. \_\_\_\_\_
4. \_\_\_\_\_
5. \_\_\_\_\_
6. \_\_\_\_\_
7. \_\_\_\_\_
8. \_\_\_\_\_
9. \_\_\_\_\_

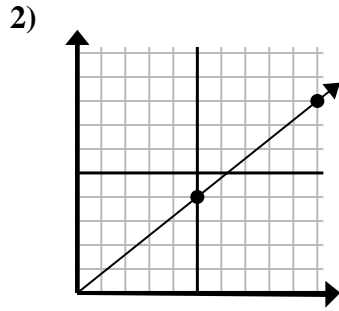


Determine which choice represents a point on the line if it were to continue.

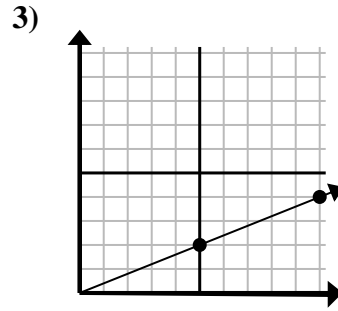
Answers



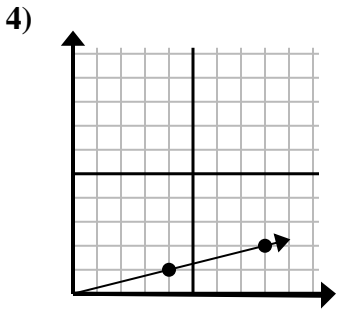
- A. (15 , 3)
- B. (35 , 7)
- C. (25 , 5)
- D. (15 , 4)



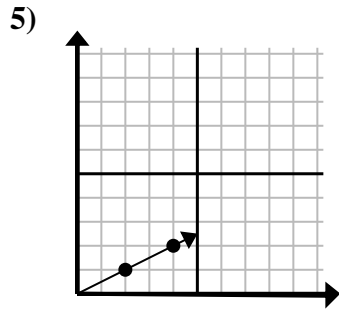
- A. (12 , 7)
- B. (15 , 9)
- C. (15 , 12)
- D. (11 , 8)



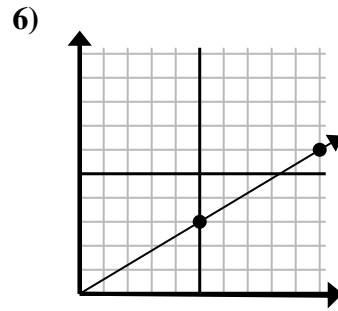
- A. (15 , 6)
- B. (11 , 3)
- C. (20 , 8)
- D. (25 , 10)



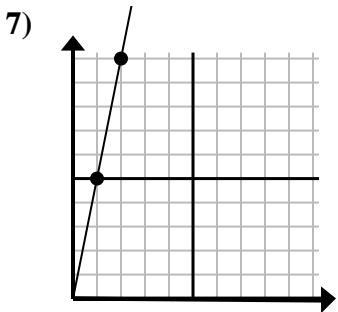
- A. (16 , 4)
- B. (12 , 3)
- C. (9 , 3)
- D. (11 , 5)



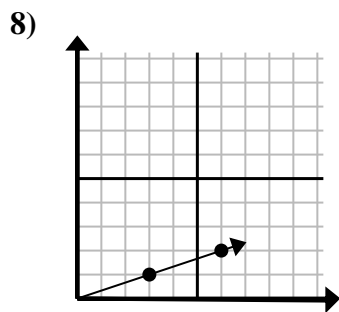
- A. (6 , 3)
- B. (9 , 4)
- C. (8 , 4)
- D. (14 , 7)



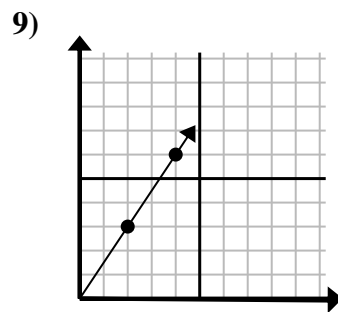
- A. (25 , 15)
- B. (15 , 9)
- C. (35 , 21)
- D. (15 , 8)



- A. (3 , 15)
- B. (3 , 9)
- C. (6 , 8)
- D. (5 , 25)



- A. (18 , 6)
- B. (8 , 3)
- C. (9 , 3)
- D. (21 , 7)



- A. (8 , 8)
- B. (12 , 18)
- C. (10 , 15)
- D. (6 , 9)

- 1.     **A**
- 2.     **C**
- 3.     **A**
- 4.     **B**
- 5.     **A**
- 6.     **B**
- 7.     **A**
- 8.     **C**
- 9.     **D**