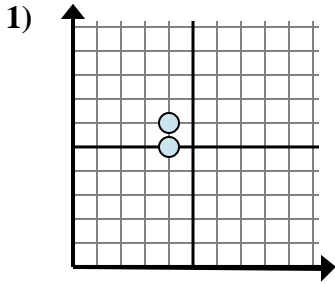


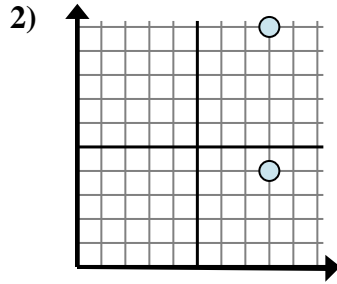


Determine which expression best shows the distance between the two points.

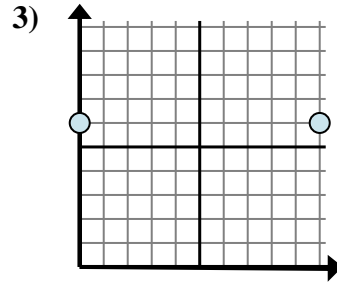
Answers



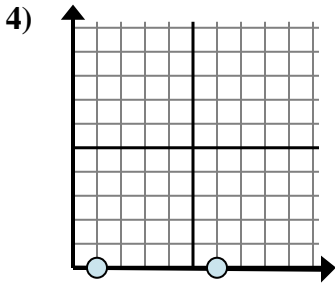
- A.  $6 - 5$
- B.  $4 - 4$
- C.  $5 - 6$
- D.  $6 - 4$



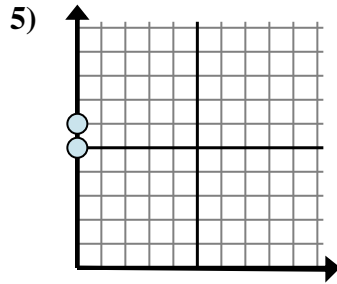
- A.  $4 - 10$
- B.  $8 - 8$
- C.  $8 - 10$
- D.  $10 - 4$



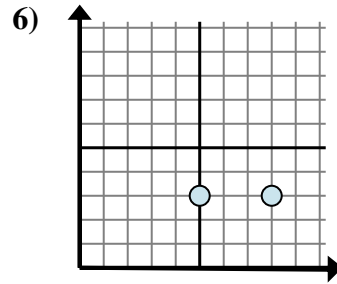
- A.  $10 - 0$
- B.  $0 - 10$
- C.  $6 - 0$
- D.  $6 - 0$



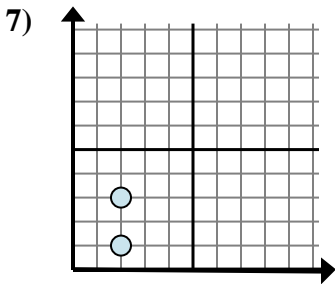
- A.  $0 - 0$
- B.  $0 - 0$
- C.  $0 - 1$
- D.  $6 - 1$



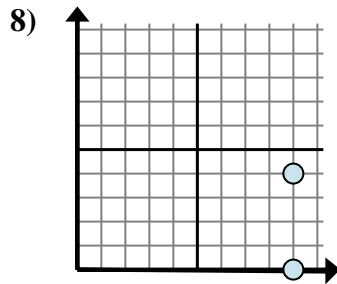
- A.  $0 - 6$
- B.  $0 - 0$
- C.  $6 - 5$
- D.  $6 - 0$



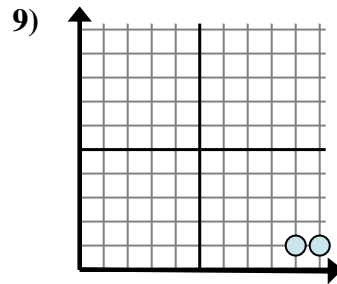
- A.  $3 - 8$
- B.  $8 - 3$
- C.  $3 - 3$
- D.  $8 - 5$



- A.  $2 - 2$
- B.  $3 - 2$
- C.  $3 - 1$
- D.  $2 - 3$



- A.  $0 - 4$
- B.  $9 - 4$
- C.  $4 - 0$
- D.  $9 - 9$

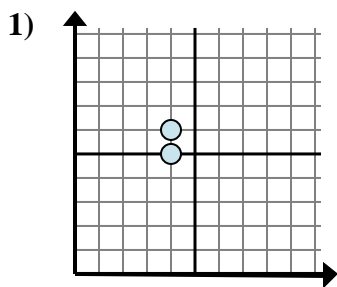


- A.  $1 - 9$
- B.  $10 - 9$
- C.  $1 - 9$
- D.  $9 - 1$

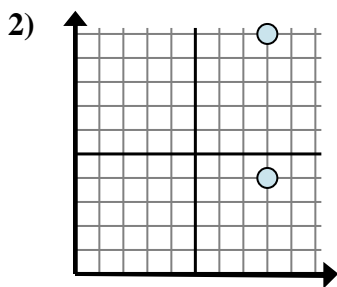
1. \_\_\_\_\_
2. \_\_\_\_\_
3. \_\_\_\_\_
4. \_\_\_\_\_
5. \_\_\_\_\_
6. \_\_\_\_\_
7. \_\_\_\_\_
8. \_\_\_\_\_
9. \_\_\_\_\_



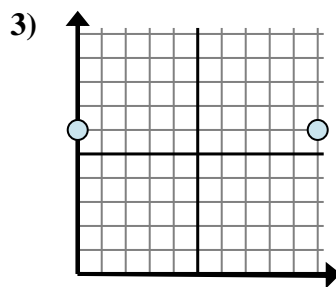
Determine which expression best shows the distance between the two points.



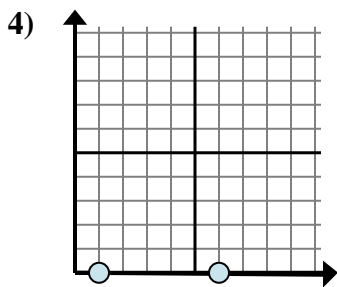
- A.  $6 - 5$
- B.  $4 - 4$
- C.  $5 - 6$
- D.  $6 - 4$



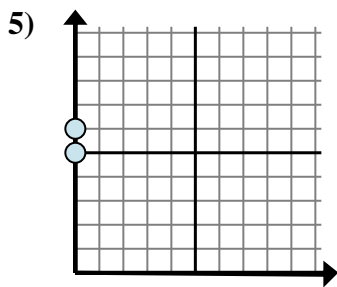
- A.  $4 - 10$
- B.  $8 - 8$
- C.  $8 - 10$
- D.  $10 - 4$



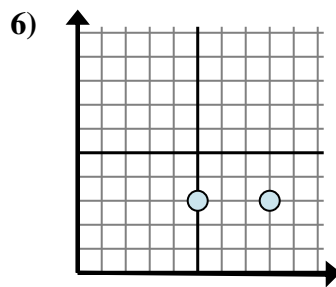
- A.  $10 - 0$
- B.  $0 - 10$
- C.  $6 - 0$
- D.  $6 - 0$



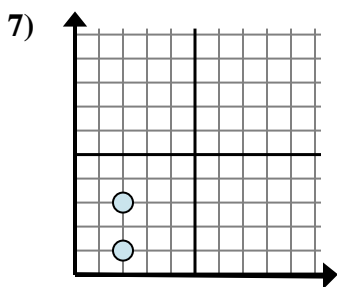
- A.  $0 - 0$
- B.  $0 - 0$
- C.  $0 - 1$
- D.  $6 - 1$



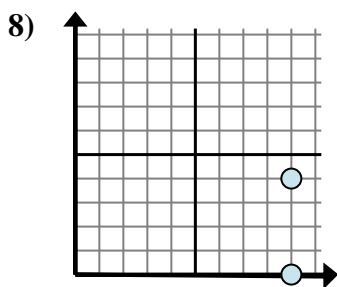
- A.  $0 - 6$
- B.  $0 - 0$
- C.  $6 - 5$
- D.  $6 - 0$



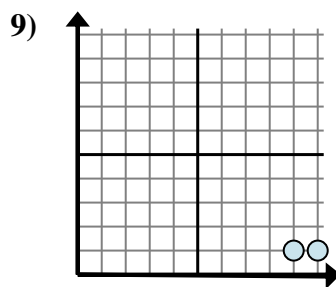
- A.  $3 - 8$
- B.  $8 - 3$
- C.  $3 - 3$
- D.  $8 - 5$



- A.  $2 - 2$
- B.  $3 - 2$
- C.  $3 - 1$
- D.  $2 - 3$



- A.  $0 - 4$
- B.  $9 - 4$
- C.  $4 - 0$
- D.  $9 - 9$



- A.  $1 - 9$
- B.  $10 - 9$
- C.  $1 - 9$
- D.  $9 - 1$

Answers

1.     **A**    

2.     **D**    

3.     **A**    

4.     **D**    

5.     **C**    

6.     **D**    

7.     **C**    

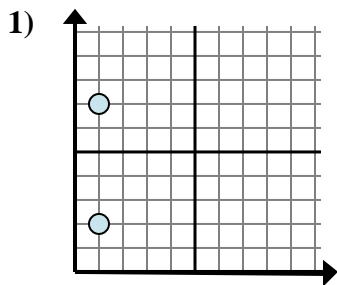
8.     **C**    

9.     **B**

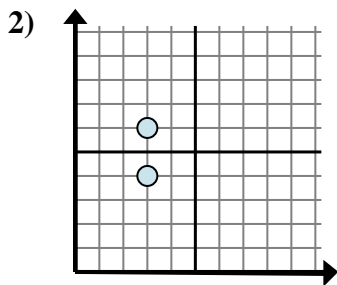


Determine which expression best shows the distance between the two points.

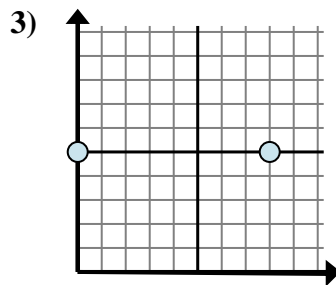
Answers



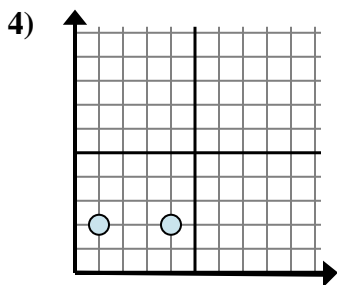
- A.  $1 - 2$
- B.  $7 - 2$
- C.  $2 - 1$
- D.  $2 - 7$



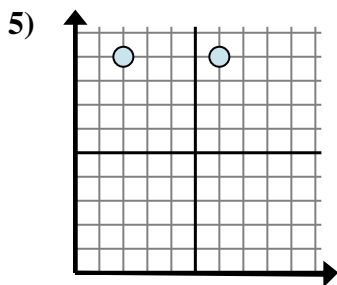
- A.  $6 - 3$
- B.  $3 - 6$
- C.  $6 - 4$
- D.  $3 - 3$



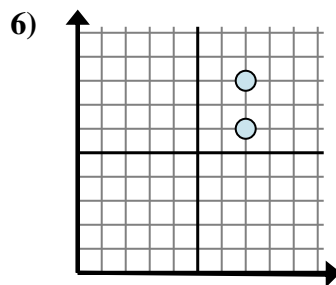
- A.  $8 - 0$
- B.  $0 - 5$
- C.  $5 - 5$
- D.  $0 - 8$



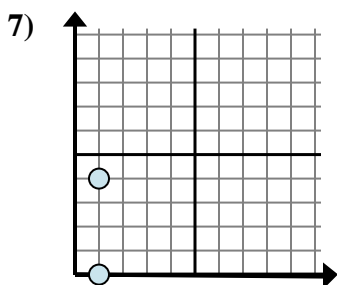
- A.  $2 - 4$
- B.  $4 - 1$
- C.  $2 - 2$
- D.  $1 - 4$



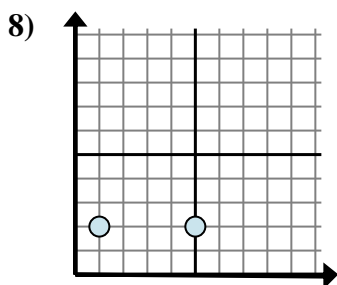
- A.  $9 - 9$
- B.  $2 - 6$
- C.  $9 - 9$
- D.  $6 - 2$



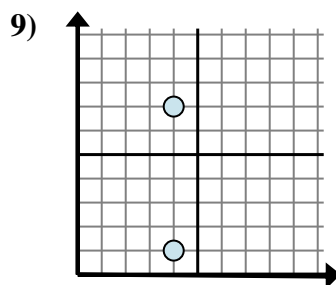
- A.  $7 - 7$
- B.  $6 - 8$
- C.  $7 - 7$
- D.  $8 - 6$



- A.  $1 - 1$
- B.  $4 - 1$
- C.  $1 - 1$
- D.  $4 - 0$



- A.  $1 - 5$
- B.  $5 - 1$
- C.  $1 - 2$
- D.  $2 - 1$



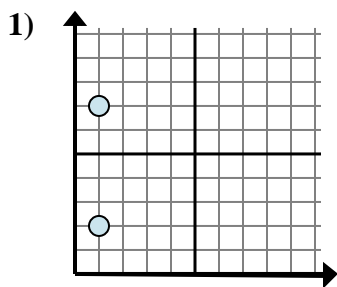
- A.  $4 - 4$
- B.  $7 - 4$
- C.  $4 - 1$
- D.  $7 - 1$

1. \_\_\_\_\_
2. \_\_\_\_\_
3. \_\_\_\_\_
4. \_\_\_\_\_
5. \_\_\_\_\_
6. \_\_\_\_\_
7. \_\_\_\_\_
8. \_\_\_\_\_
9. \_\_\_\_\_

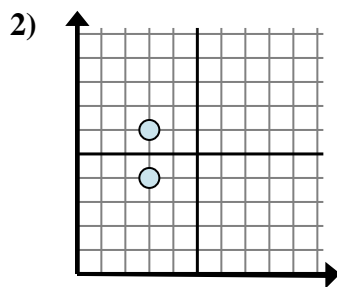


Determine which expression best shows the distance between the two points.

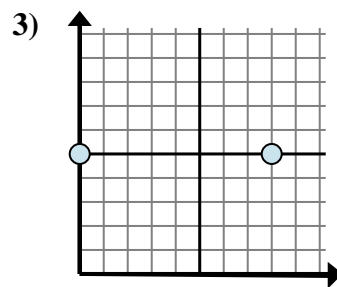
Answers



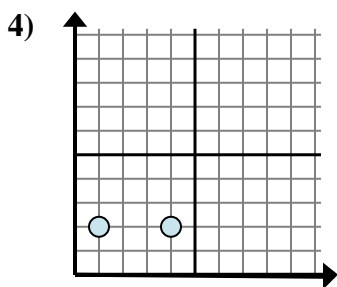
- A.  $1 - 2$
- B.  $7 - 2$
- C.  $2 - 1$
- D.  $2 - 7$



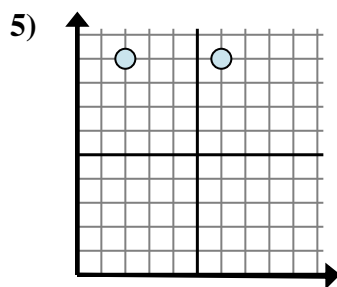
- A.  $6 - 3$
- B.  $3 - 6$
- C.  $6 - 4$
- D.  $3 - 3$



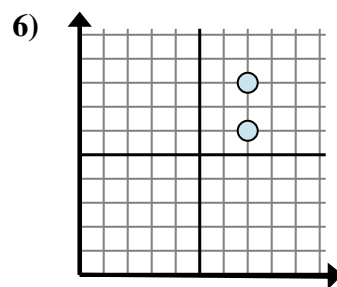
- A.  $8 - 0$
- B.  $0 - 5$
- C.  $5 - 5$
- D.  $0 - 8$



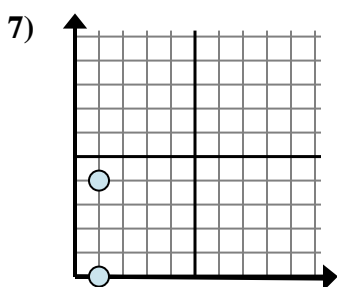
- A.  $2 - 4$
- B.  $4 - 1$
- C.  $2 - 2$
- D.  $1 - 4$



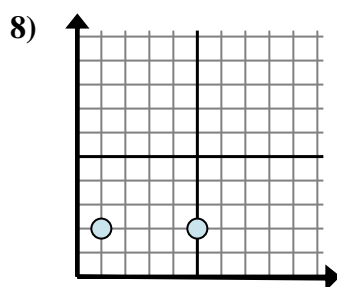
- A.  $9 - 9$
- B.  $2 - 6$
- C.  $9 - 9$
- D.  $6 - 2$



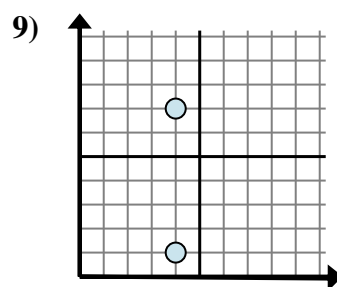
- A.  $7 - 7$
- B.  $6 - 8$
- C.  $7 - 7$
- D.  $8 - 6$



- A.  $1 - 1$
- B.  $4 - 1$
- C.  $1 - 1$
- D.  $4 - 0$



- A.  $1 - 5$
- B.  $5 - 1$
- C.  $1 - 2$
- D.  $2 - 1$



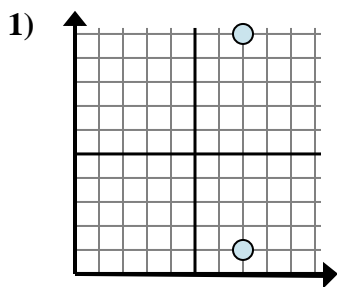
- A.  $4 - 4$
- B.  $7 - 4$
- C.  $4 - 1$
- D.  $7 - 1$

- 1.     **B**
- 2.     **C**
- 3.     **A**
- 4.     **B**
- 5.     **D**
- 6.     **D**
- 7.     **D**
- 8.     **B**
- 9.     **D**

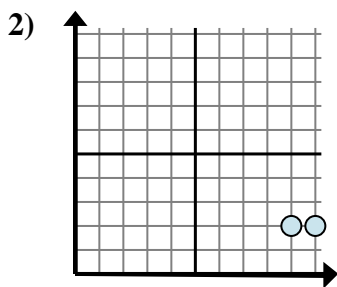


Determine which expression best shows the distance between the two points.

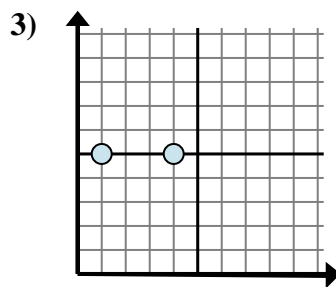
Answers



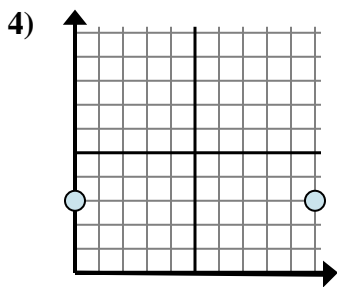
- A.  $7 - 1$
- B.  $10 - 7$
- C.  $7 - 1$
- D.  $10 - 1$



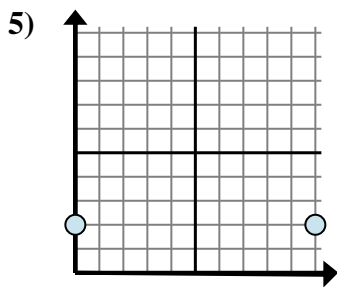
- A.  $10 - 9$
- B.  $2 - 2$
- C.  $2 - 2$
- D.  $9 - 2$



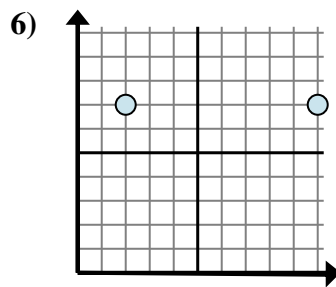
- A.  $4 - 1$
- B.  $1 - 5$
- C.  $5 - 1$
- D.  $4 - 5$



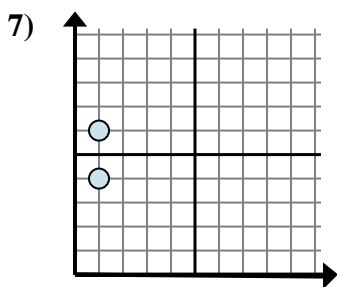
- A.  $10 - 3$
- B.  $10 - 0$
- C.  $3 - 0$
- D.  $3 - 3$



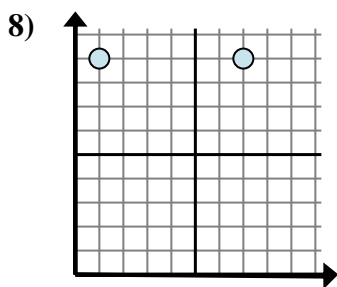
- A.  $2 - 2$
- B.  $10 - 2$
- C.  $2 - 0$
- D.  $10 - 0$



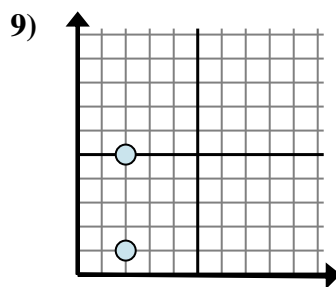
- A.  $10 - 2$
- B.  $7 - 2$
- C.  $2 - 10$
- D.  $10 - 7$



- A.  $1 - 4$
- B.  $6 - 1$
- C.  $1 - 4$
- D.  $6 - 4$



- A.  $1 - 9$
- B.  $7 - 1$
- C.  $1 - 7$
- D.  $7 - 9$

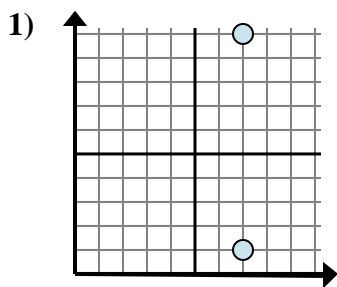


- A.  $5 - 1$
- B.  $2 - 2$
- C.  $5 - 2$
- D.  $2 - 1$

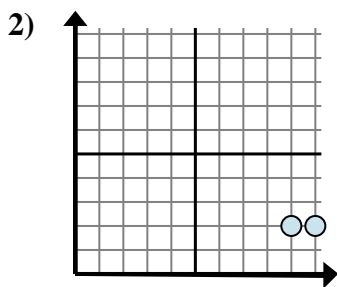
- 1. \_\_\_\_\_
- 2. \_\_\_\_\_
- 3. \_\_\_\_\_
- 4. \_\_\_\_\_
- 5. \_\_\_\_\_
- 6. \_\_\_\_\_
- 7. \_\_\_\_\_
- 8. \_\_\_\_\_
- 9. \_\_\_\_\_



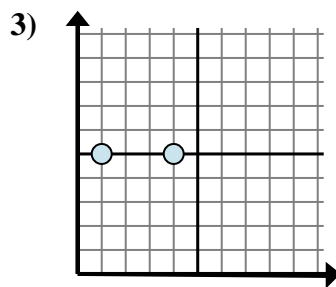
Determine which expression best shows the distance between the two points.



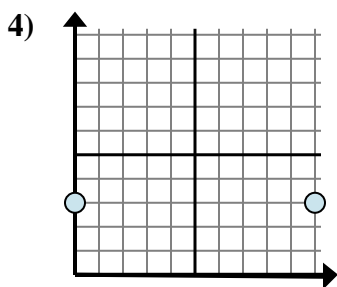
- A.  $7 - 1$
- B.  $10 - 7$
- C.  $7 - 1$
- D.  $10 - 1$



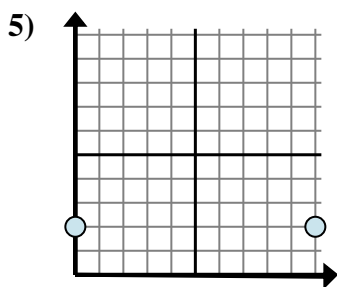
- A.  $10 - 9$
- B.  $2 - 2$
- C.  $2 - 2$
- D.  $9 - 2$



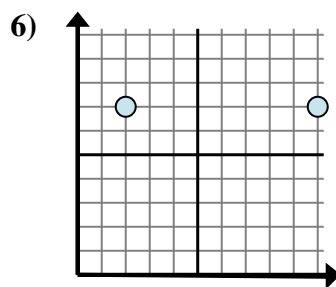
- A.  $4 - 1$
- B.  $1 - 5$
- C.  $5 - 1$
- D.  $4 - 5$



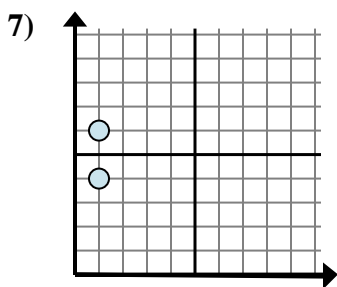
- A.  $10 - 3$
- B.  $10 - 0$
- C.  $3 - 0$
- D.  $3 - 3$



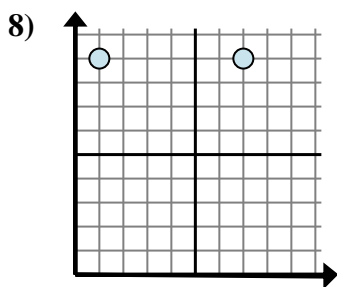
- A.  $2 - 2$
- B.  $10 - 2$
- C.  $2 - 0$
- D.  $10 - 0$



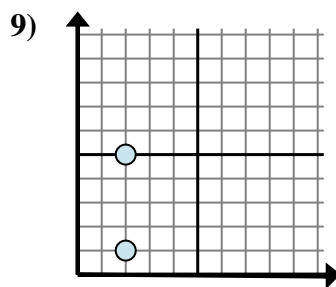
- A.  $10 - 2$
- B.  $7 - 2$
- C.  $2 - 10$
- D.  $10 - 7$



- A.  $1 - 4$
- B.  $6 - 1$
- C.  $1 - 4$
- D.  $6 - 4$



- A.  $1 - 9$
- B.  $7 - 1$
- C.  $1 - 7$
- D.  $7 - 9$



- A.  $5 - 1$
- B.  $2 - 2$
- C.  $5 - 2$
- D.  $2 - 1$

Answers

1. **D**

2. **A**

3. **A**

4. **B**

5. **D**

6. **A**

7. **D**

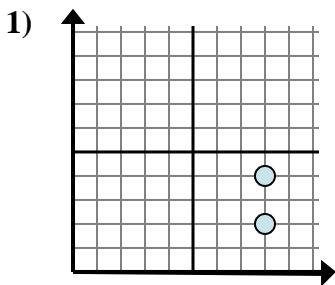
8. **B**

9. **A**

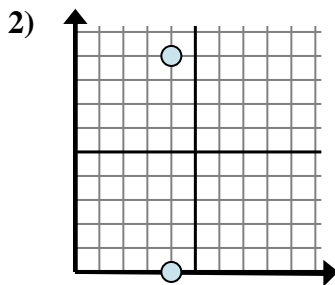


Determine which expression best shows the distance between the two points.

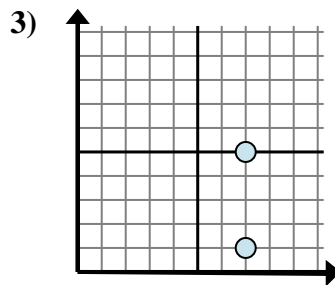
**Answers**



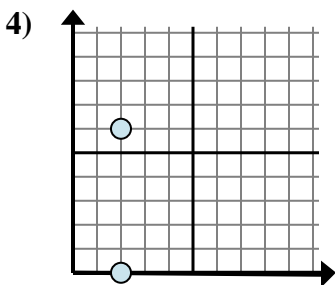
- A.  $8 - 8$
- B.  $4 - 2$
- C.  $4 - 8$
- D.  $8 - 4$



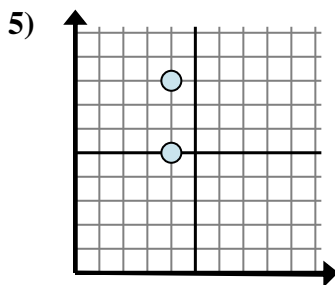
- A.  $0 - 4$
- B.  $4 - 4$
- C.  $9 - 0$
- D.  $4 - 4$



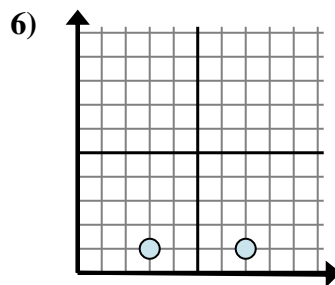
- A.  $1 - 7$
- B.  $1 - 5$
- C.  $5 - 7$
- D.  $5 - 1$



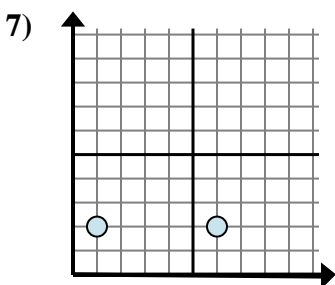
- A.  $2 - 0$
- B.  $6 - 0$
- C.  $6 - 2$
- D.  $2 - 2$



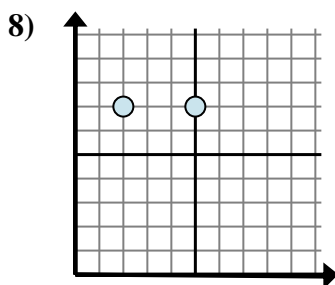
- A.  $5 - 4$
- B.  $8 - 5$
- C.  $4 - 4$
- D.  $5 - 8$



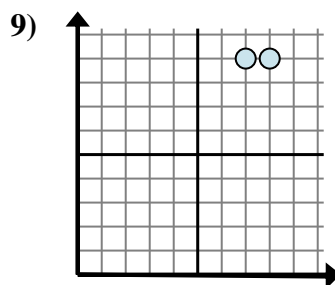
- A.  $7 - 1$
- B.  $7 - 3$
- C.  $1 - 3$
- D.  $3 - 1$



- A.  $2 - 2$
- B.  $2 - 6$
- C.  $6 - 1$
- D.  $1 - 2$



- A.  $5 - 7$
- B.  $5 - 2$
- C.  $2 - 7$
- D.  $7 - 7$

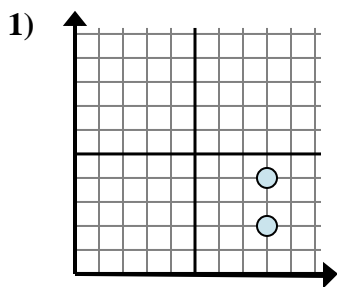


- A.  $9 - 7$
- B.  $8 - 7$
- C.  $9 - 9$
- D.  $7 - 8$

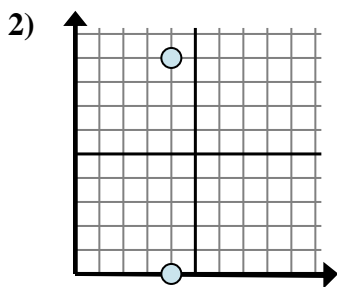
1. \_\_\_\_\_
2. \_\_\_\_\_
3. \_\_\_\_\_
4. \_\_\_\_\_
5. \_\_\_\_\_
6. \_\_\_\_\_
7. \_\_\_\_\_
8. \_\_\_\_\_
9. \_\_\_\_\_



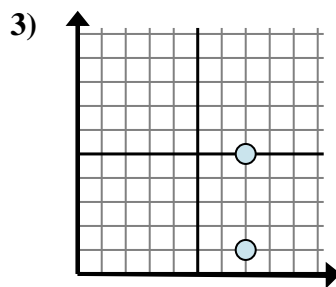
Determine which expression best shows the distance between the two points.



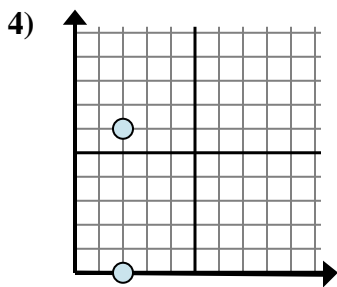
- A.  $8 - 8$
- B.  $4 - 2$
- C.  $4 - 8$
- D.  $8 - 4$



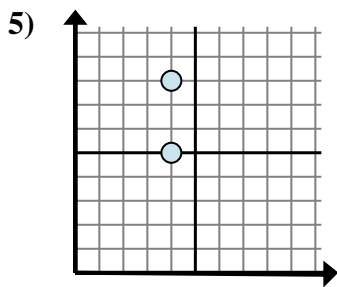
- A.  $0 - 4$
- B.  $4 - 4$
- C.  $9 - 0$
- D.  $4 - 4$



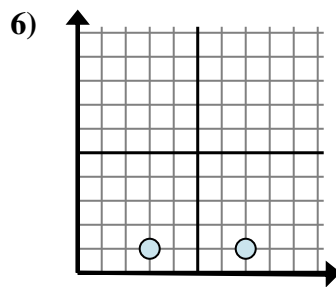
- A.  $1 - 7$
- B.  $1 - 5$
- C.  $5 - 7$
- D.  $5 - 1$



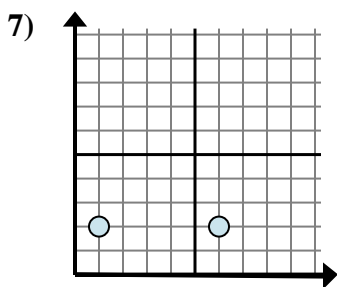
- A.  $2 - 0$
- B.  $6 - 0$
- C.  $6 - 2$
- D.  $2 - 2$



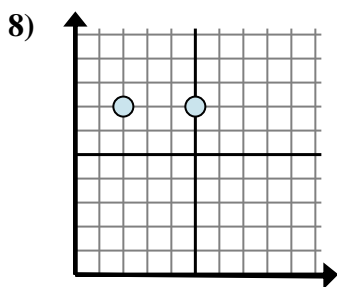
- A.  $5 - 4$
- B.  $8 - 5$
- C.  $4 - 4$
- D.  $5 - 8$



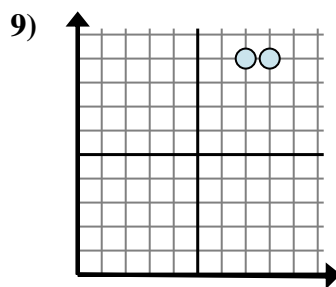
- A.  $7 - 1$
- B.  $7 - 3$
- C.  $1 - 3$
- D.  $3 - 1$



- A.  $2 - 2$
- B.  $2 - 6$
- C.  $6 - 1$
- D.  $1 - 2$



- A.  $5 - 7$
- B.  $5 - 2$
- C.  $2 - 7$
- D.  $7 - 7$



- A.  $9 - 7$
- B.  $8 - 7$
- C.  $9 - 9$
- D.  $7 - 8$

Answers

1. **B**

2. **C**

3. **D**

4. **B**

5. **B**

6. **B**

7. **C**

8. **B**

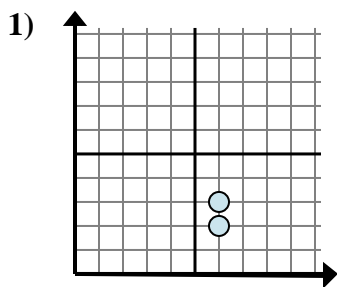
9. **B**



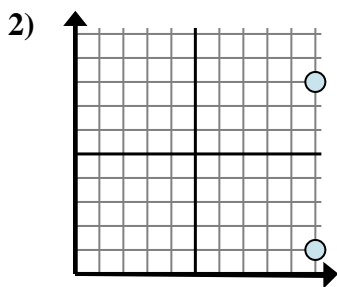


Determine which expression best shows the distance between the two points.

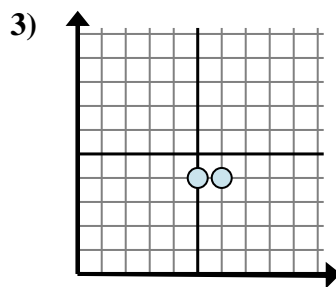
Answers



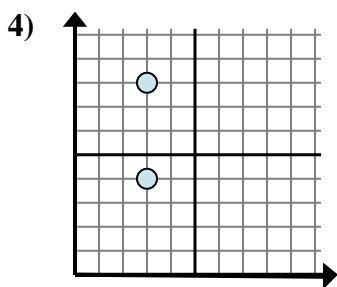
- A.  $3 - 2$
- B.  $6 - 6$
- C.  $3 - 6$
- D.  $2 - 3$



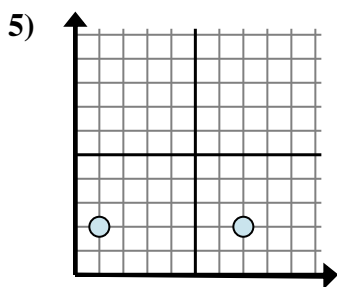
- A.  $10 - 10$
- B.  $10 - 8$
- C.  $8 - 10$
- D.  $8 - 1$



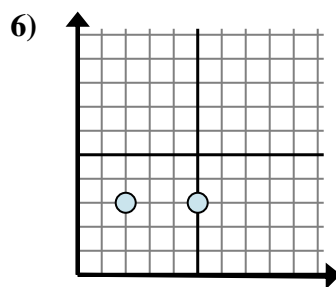
- A.  $6 - 5$
- B.  $4 - 4$
- C.  $5 - 4$
- D.  $6 - 4$



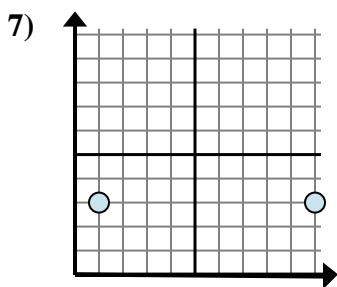
- A.  $3 - 3$
- B.  $3 - 4$
- C.  $8 - 4$
- D.  $4 - 8$



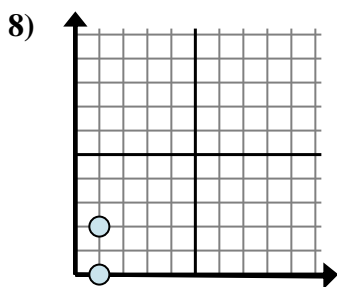
- A.  $1 - 2$
- B.  $2 - 2$
- C.  $7 - 1$
- D.  $2 - 2$



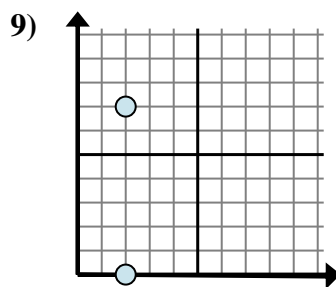
- A.  $3 - 5$
- B.  $2 - 5$
- C.  $5 - 2$
- D.  $3 - 5$



- A.  $10 - 1$
- B.  $3 - 3$
- C.  $1 - 3$
- D.  $3 - 10$



- A.  $2 - 0$
- B.  $1 - 0$
- C.  $1 - 1$
- D.  $2 - 1$

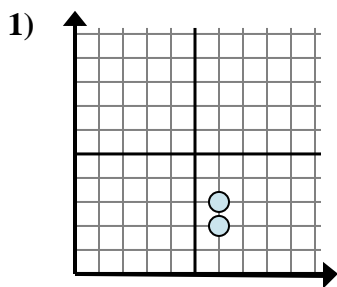


- A.  $2 - 2$
- B.  $0 - 2$
- C.  $7 - 0$
- D.  $2 - 7$

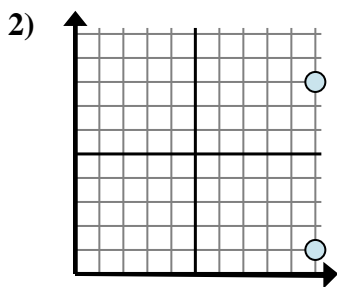
1. \_\_\_\_\_
2. \_\_\_\_\_
3. \_\_\_\_\_
4. \_\_\_\_\_
5. \_\_\_\_\_
6. \_\_\_\_\_
7. \_\_\_\_\_
8. \_\_\_\_\_
9. \_\_\_\_\_



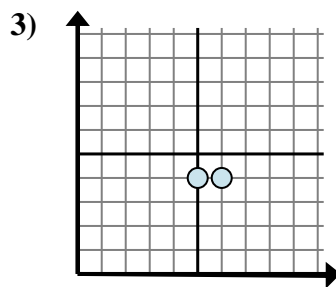
Determine which expression best shows the distance between the two points.



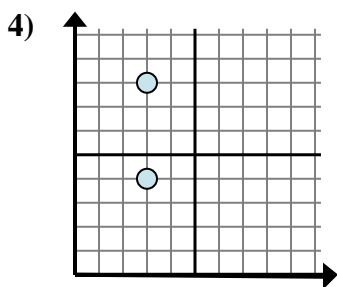
- A.  $3 - 2$
- B.  $6 - 6$
- C.  $3 - 6$
- D.  $2 - 3$



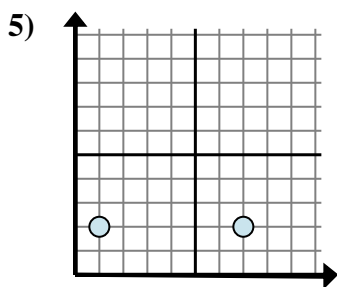
- A.  $10 - 10$
- B.  $10 - 8$
- C.  $8 - 10$
- D.  $8 - 1$



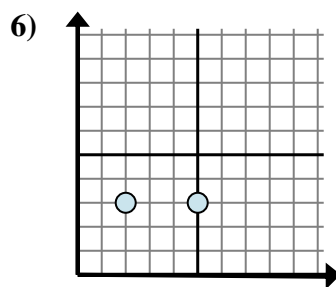
- A.  $6 - 5$
- B.  $4 - 4$
- C.  $5 - 4$
- D.  $6 - 4$



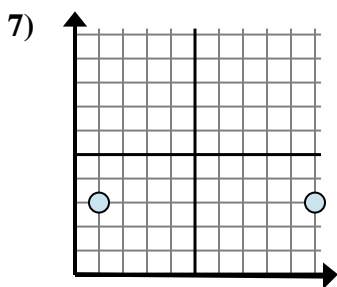
- A.  $3 - 3$
- B.  $3 - 4$
- C.  $8 - 4$
- D.  $4 - 8$



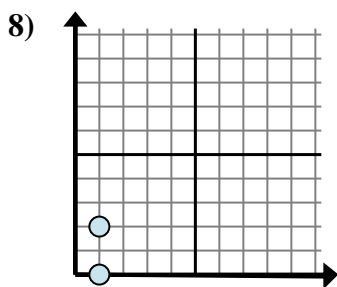
- A.  $1 - 2$
- B.  $2 - 2$
- C.  $7 - 1$
- D.  $2 - 2$



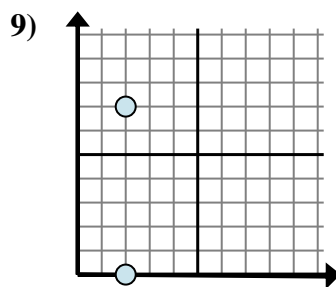
- A.  $3 - 5$
- B.  $2 - 5$
- C.  $5 - 2$
- D.  $3 - 5$



- A.  $10 - 1$
- B.  $3 - 3$
- C.  $1 - 3$
- D.  $3 - 10$



- A.  $2 - 0$
- B.  $1 - 0$
- C.  $1 - 1$
- D.  $2 - 1$



- A.  $2 - 2$
- B.  $0 - 2$
- C.  $7 - 0$
- D.  $2 - 7$

Answers

1. **A**

2. **D**

3. **A**

4. **C**

5. **C**

6. **C**

7. **A**

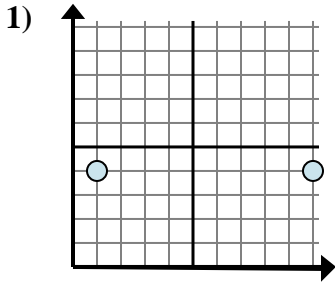
8. **A**

9. **C**

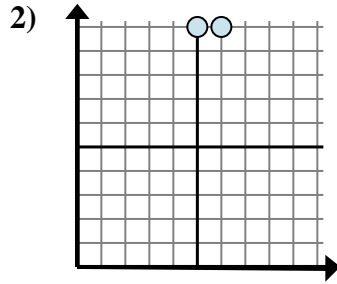


Determine which expression best shows the distance between the two points.

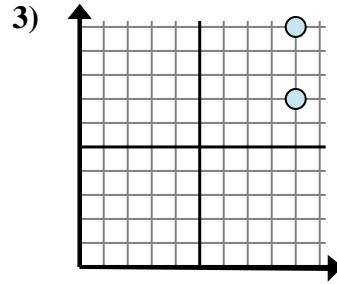
Answers



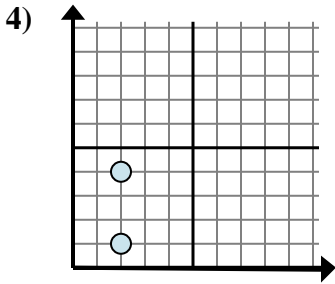
- A.  $4 - 4$
- B.  $4 - 4$
- C.  $4 - 10$
- D.  $10 - 1$



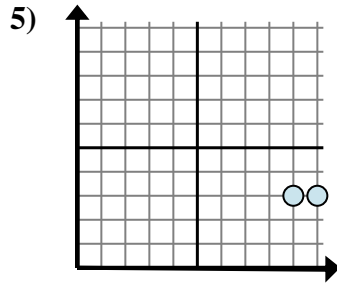
- A.  $6 - 10$
- B.  $5 - 10$
- C.  $6 - 5$
- D.  $10 - 5$



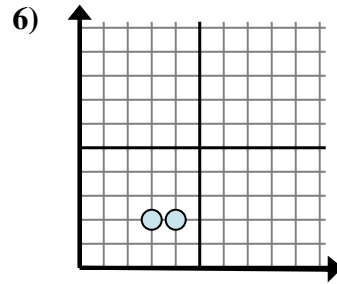
- A.  $10 - 7$
- B.  $9 - 9$
- C.  $7 - 10$
- D.  $9 - 7$



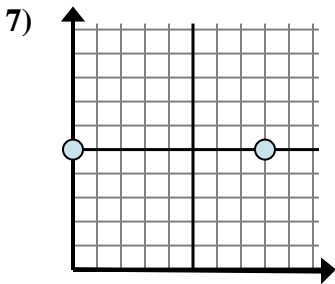
- A.  $2 - 4$
- B.  $4 - 1$
- C.  $1 - 4$
- D.  $2 - 2$



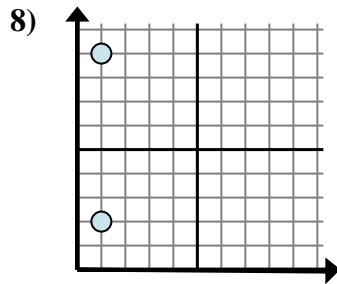
- A.  $9 - 10$
- B.  $10 - 3$
- C.  $3 - 9$
- D.  $10 - 9$



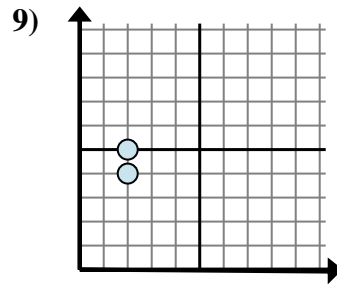
- A.  $3 - 2$
- B.  $2 - 4$
- C.  $2 - 4$
- D.  $4 - 3$



- A.  $5 - 8$
- B.  $5 - 5$
- C.  $8 - 0$
- D.  $8 - 5$



- A.  $1 - 1$
- B.  $1 - 2$
- C.  $9 - 2$
- D.  $2 - 9$

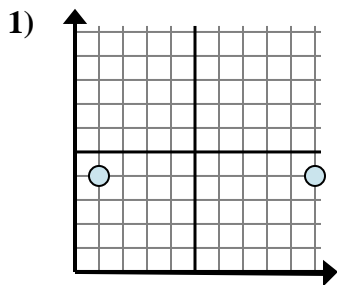


- A.  $5 - 2$
- B.  $5 - 4$
- C.  $2 - 2$
- D.  $2 - 2$

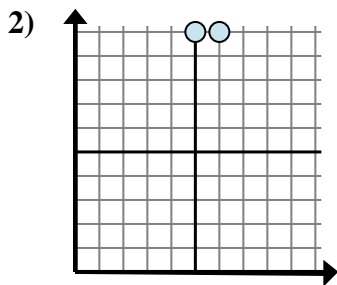
- 1. \_\_\_\_\_
- 2. \_\_\_\_\_
- 3. \_\_\_\_\_
- 4. \_\_\_\_\_
- 5. \_\_\_\_\_
- 6. \_\_\_\_\_
- 7. \_\_\_\_\_
- 8. \_\_\_\_\_
- 9. \_\_\_\_\_



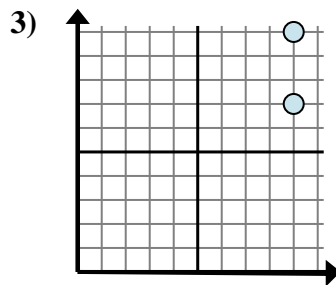
Determine which expression best shows the distance between the two points.



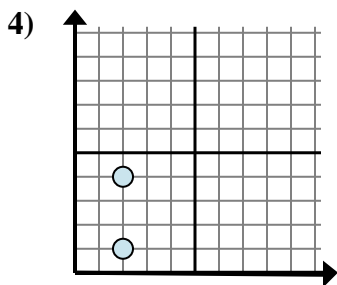
- A.  $4 - 4$
- B.  $4 - 4$
- C.  $4 - 10$
- D.  $10 - 1$



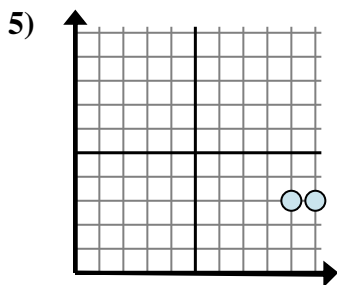
- A.  $6 - 10$
- B.  $5 - 10$
- C.  $6 - 5$
- D.  $10 - 5$



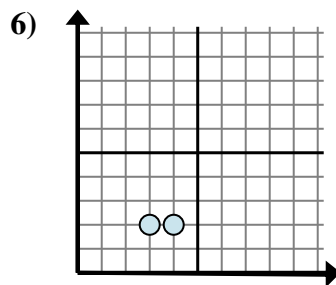
- A.  $10 - 7$
- B.  $9 - 9$
- C.  $7 - 10$
- D.  $9 - 7$



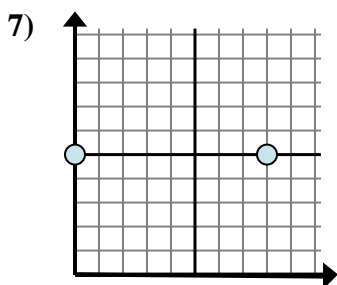
- A.  $2 - 4$
- B.  $4 - 1$
- C.  $1 - 4$
- D.  $2 - 2$



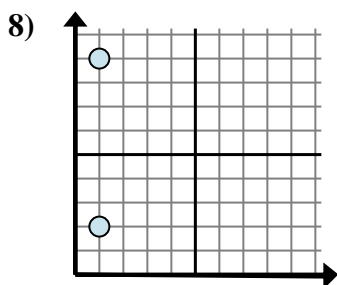
- A.  $9 - 10$
- B.  $10 - 3$
- C.  $3 - 9$
- D.  $10 - 9$



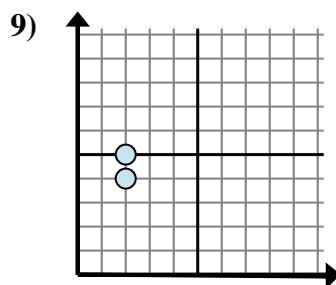
- A.  $3 - 2$
- B.  $2 - 4$
- C.  $2 - 4$
- D.  $4 - 3$



- A.  $5 - 8$
- B.  $5 - 5$
- C.  $8 - 0$
- D.  $8 - 5$



- A.  $1 - 1$
- B.  $1 - 2$
- C.  $9 - 2$
- D.  $2 - 9$



- A.  $5 - 2$
- B.  $5 - 4$
- C.  $2 - 2$
- D.  $2 - 2$

Answers

1. **D**

2. **C**

3. **A**

4. **B**

5. **D**

6. **D**

7. **C**

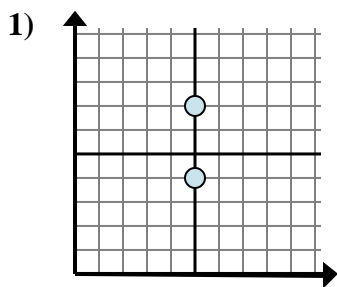
8. **C**

9. **B**

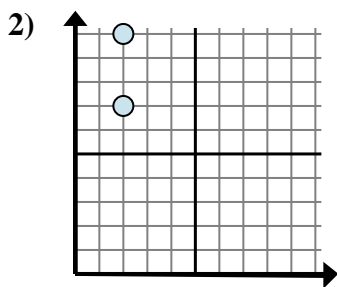


Determine which expression best shows the distance between the two points.

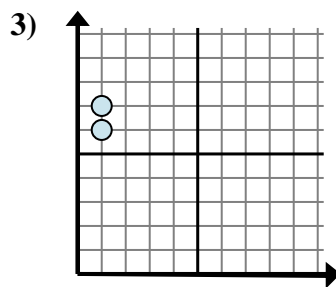
Answers



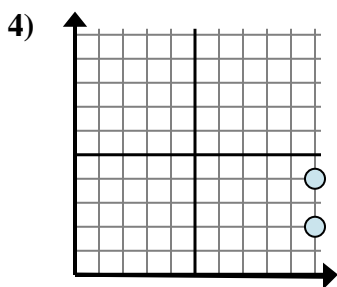
- A.  $5 - 5$
- B.  $7 - 4$
- C.  $7 - 5$
- D.  $5 - 4$



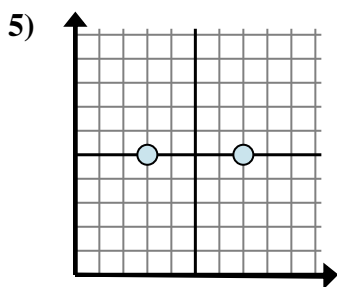
- A.  $10 - 2$
- B.  $2 - 10$
- C.  $2 - 2$
- D.  $10 - 7$



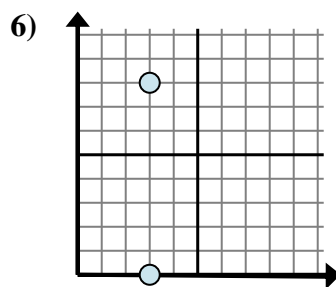
- A.  $7 - 6$
- B.  $1 - 6$
- C.  $6 - 1$
- D.  $1 - 1$



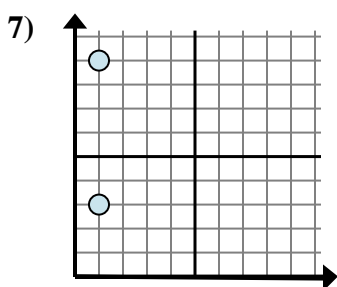
- A.  $10 - 4$
- B.  $10 - 4$
- C.  $2 - 10$
- D.  $4 - 2$



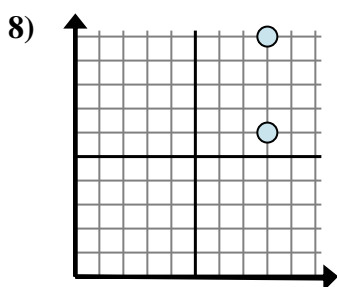
- A.  $7 - 5$
- B.  $7 - 3$
- C.  $5 - 7$
- D.  $3 - 7$



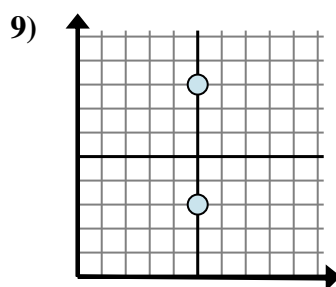
- A.  $3 - 3$
- B.  $8 - 0$
- C.  $3 - 0$
- D.  $0 - 8$



- A.  $9 - 1$
- B.  $9 - 3$
- C.  $1 - 1$
- D.  $1 - 1$



- A.  $8 - 6$
- B.  $8 - 6$
- C.  $10 - 8$
- D.  $10 - 6$

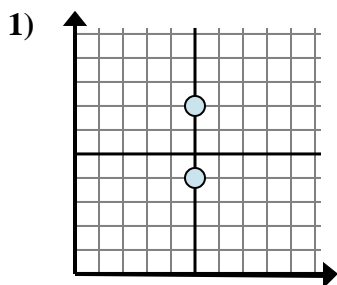


- A.  $8 - 3$
- B.  $5 - 5$
- C.  $8 - 5$
- D.  $5 - 8$

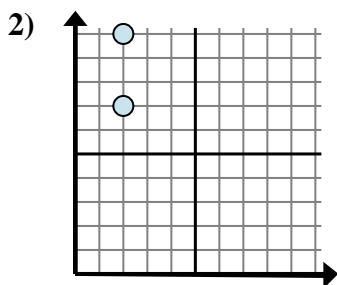
1. \_\_\_\_\_
2. \_\_\_\_\_
3. \_\_\_\_\_
4. \_\_\_\_\_
5. \_\_\_\_\_
6. \_\_\_\_\_
7. \_\_\_\_\_
8. \_\_\_\_\_
9. \_\_\_\_\_



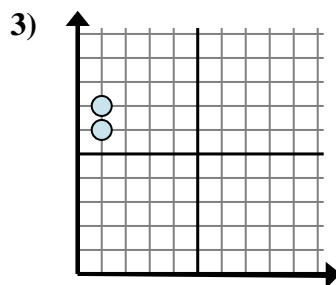
Determine which expression best shows the distance between the two points.



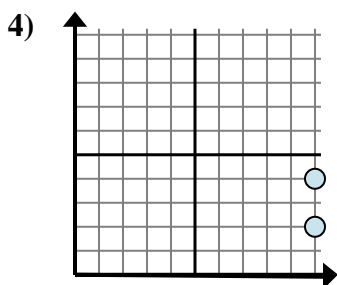
- A.  $5 - 5$
- B.  $7 - 4$
- C.  $7 - 5$
- D.  $5 - 4$



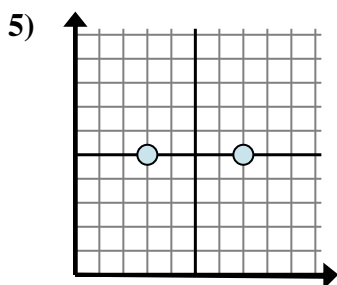
- A.  $10 - 2$
- B.  $2 - 10$
- C.  $2 - 2$
- D.  $10 - 7$



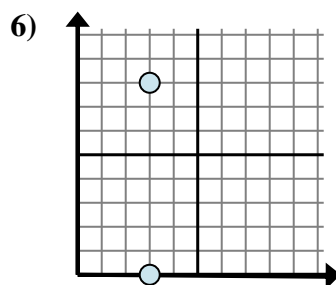
- A.  $7 - 6$
- B.  $1 - 6$
- C.  $6 - 1$
- D.  $1 - 1$



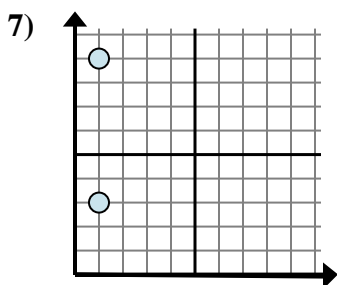
- A.  $10 - 4$
- B.  $10 - 4$
- C.  $2 - 10$
- D.  $4 - 2$



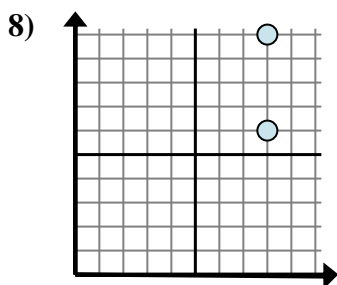
- A.  $7 - 5$
- B.  $7 - 3$
- C.  $5 - 7$
- D.  $3 - 7$



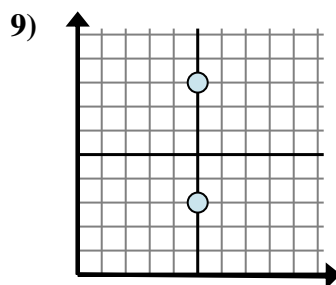
- A.  $3 - 3$
- B.  $8 - 0$
- C.  $3 - 0$
- D.  $0 - 8$



- A.  $9 - 1$
- B.  $9 - 3$
- C.  $1 - 1$
- D.  $1 - 1$



- A.  $8 - 6$
- B.  $8 - 6$
- C.  $10 - 8$
- D.  $10 - 6$



- A.  $8 - 3$
- B.  $5 - 5$
- C.  $8 - 5$
- D.  $5 - 8$

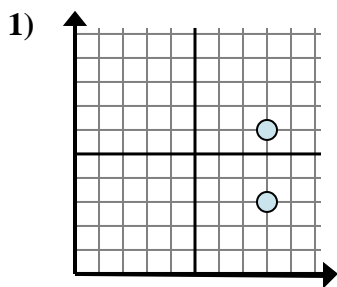
Answers

- 1.     **B**
- 2.     **D**
- 3.     **A**
- 4.     **D**
- 5.     **B**
- 6.     **B**
- 7.     **B**
- 8.     **D**
- 9.     **A**

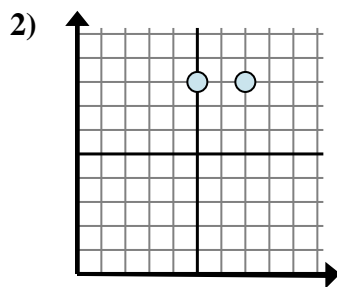


Determine which expression best shows the distance between the two points.

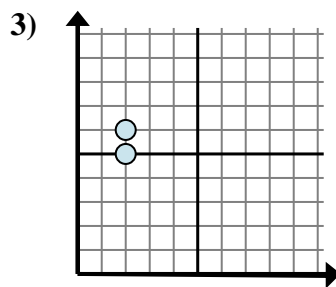
Answers



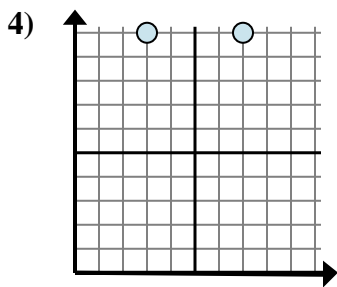
- A.  $6 - 3$
- B.  $6 - 8$
- C.  $8 - 8$
- D.  $3 - 8$



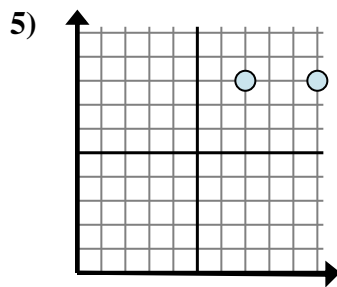
- A.  $8 - 7$
- B.  $7 - 5$
- C.  $8 - 7$
- D.  $8 - 8$



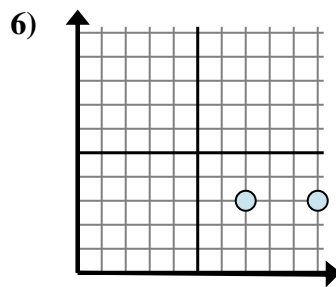
- A.  $6 - 5$
- B.  $2 - 5$
- C.  $5 - 2$
- D.  $6 - 2$



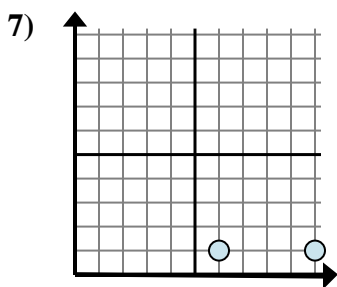
- A.  $7 - 3$
- B.  $10 - 3$
- C.  $10 - 3$
- D.  $10 - 10$



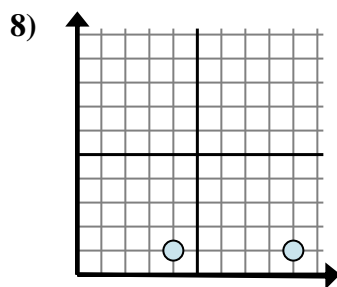
- A.  $8 - 8$
- B.  $10 - 8$
- C.  $7 - 8$
- D.  $10 - 7$



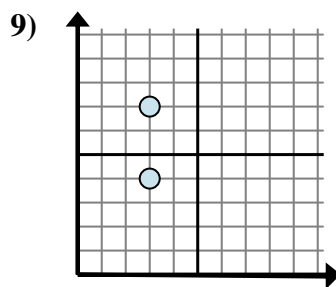
- A.  $10 - 7$
- B.  $7 - 3$
- C.  $3 - 10$
- D.  $3 - 10$



- A.  $10 - 6$
- B.  $6 - 1$
- C.  $6 - 10$
- D.  $1 - 1$



- A.  $4 - 9$
- B.  $9 - 4$
- C.  $1 - 9$
- D.  $4 - 1$

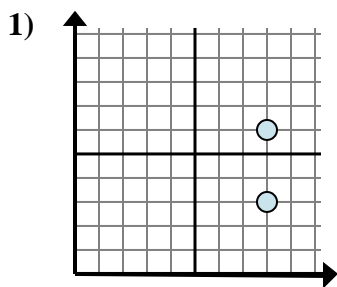


- A.  $3 - 3$
- B.  $4 - 3$
- C.  $3 - 3$
- D.  $7 - 4$

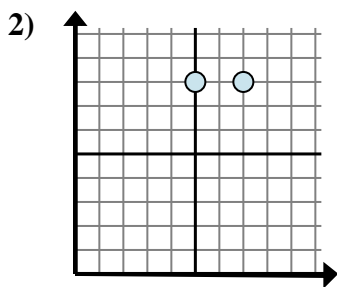
1. \_\_\_\_\_
2. \_\_\_\_\_
3. \_\_\_\_\_
4. \_\_\_\_\_
5. \_\_\_\_\_
6. \_\_\_\_\_
7. \_\_\_\_\_
8. \_\_\_\_\_
9. \_\_\_\_\_



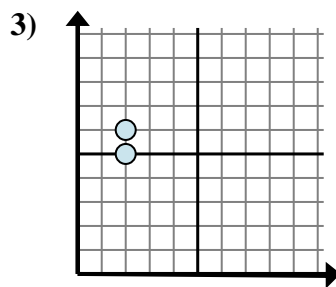
Determine which expression best shows the distance between the two points.



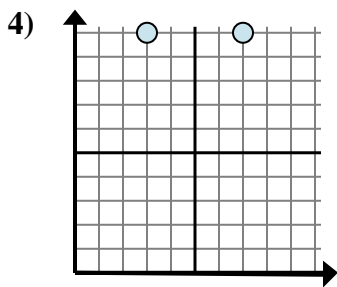
- A.  $6 - 3$
- B.  $6 - 8$
- C.  $8 - 8$
- D.  $3 - 8$



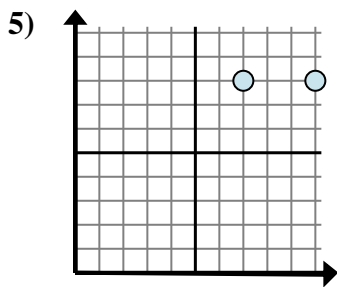
- A.  $8 - 7$
- B.  $7 - 5$
- C.  $8 - 7$
- D.  $8 - 8$



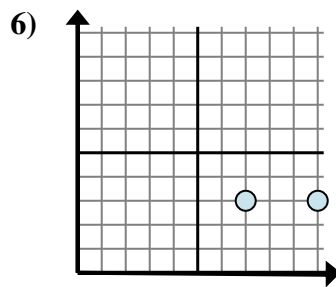
- A.  $6 - 5$
- B.  $2 - 5$
- C.  $5 - 2$
- D.  $6 - 2$



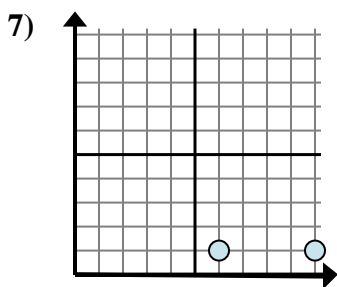
- A.  $7 - 3$
- B.  $10 - 3$
- C.  $10 - 3$
- D.  $10 - 10$



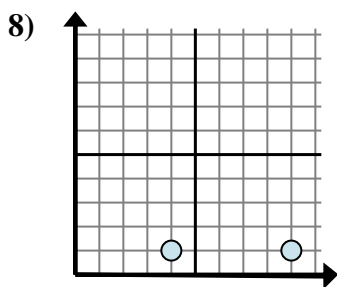
- A.  $8 - 8$
- B.  $10 - 8$
- C.  $7 - 8$
- D.  $10 - 7$



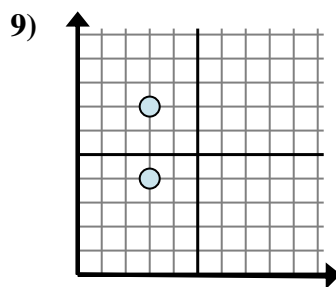
- A.  $10 - 7$
- B.  $7 - 3$
- C.  $3 - 10$
- D.  $3 - 10$



- A.  $10 - 6$
- B.  $6 - 1$
- C.  $6 - 10$
- D.  $1 - 1$



- A.  $4 - 9$
- B.  $9 - 4$
- C.  $1 - 9$
- D.  $4 - 1$



- A.  $3 - 3$
- B.  $4 - 3$
- C.  $3 - 3$
- D.  $7 - 4$

Answers

1.     **A**    

2.     **B**    

3.     **A**    

4.     **A**    

5.     **D**    

6.     **A**    

7.     **A**    

8.     **B**    

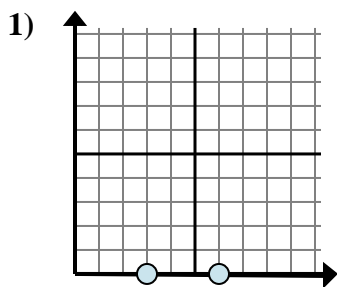
9.     **D**



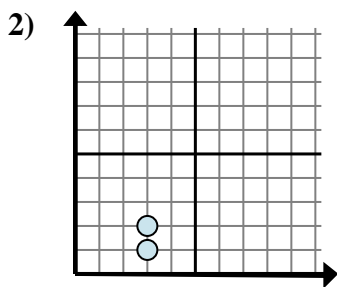


Determine which expression best shows the distance between the two points.

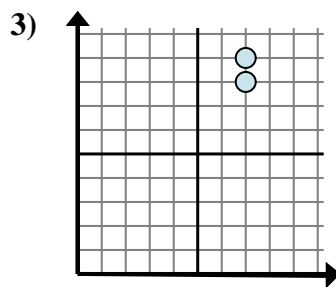
Answers



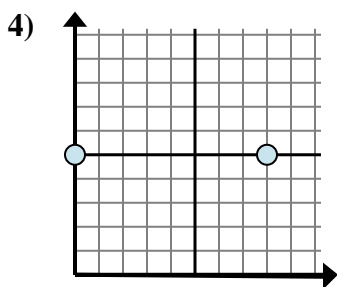
- A.  $0 - 6$
- B.  $3 - 0$
- C.  $6 - 0$
- D.  $6 - 3$



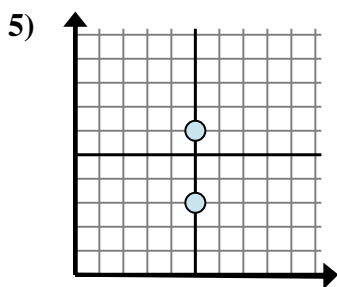
- A.  $3 - 3$
- B.  $3 - 2$
- C.  $3 - 3$
- D.  $2 - 1$



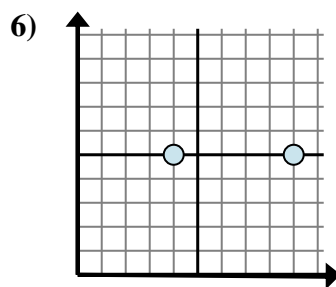
- A.  $7 - 8$
- B.  $7 - 7$
- C.  $9 - 8$
- D.  $8 - 7$



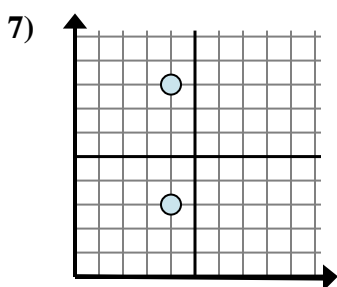
- A.  $8 - 0$
- B.  $5 - 5$
- C.  $5 - 8$
- D.  $8 - 5$



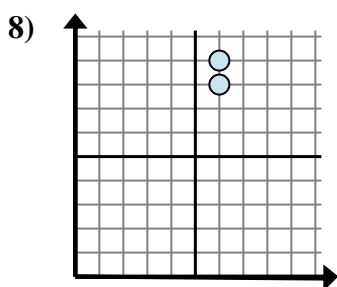
- A.  $6 - 5$
- B.  $6 - 3$
- C.  $5 - 5$
- D.  $5 - 5$



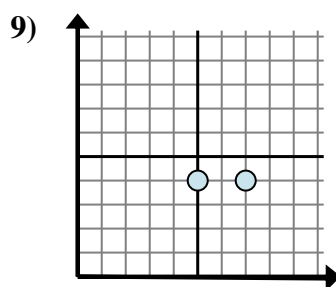
- A.  $5 - 5$
- B.  $9 - 4$
- C.  $9 - 5$
- D.  $4 - 9$



- A.  $4 - 3$
- B.  $8 - 3$
- C.  $4 - 4$
- D.  $4 - 4$



- A.  $9 - 8$
- B.  $6 - 6$
- C.  $8 - 6$
- D.  $9 - 6$

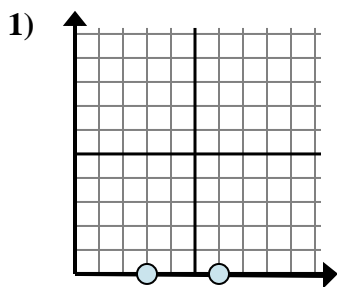


- A.  $5 - 4$
- B.  $4 - 4$
- C.  $7 - 5$
- D.  $4 - 7$

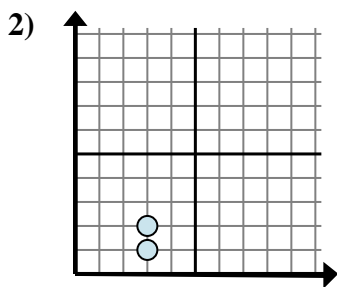
- 1. \_\_\_\_\_
- 2. \_\_\_\_\_
- 3. \_\_\_\_\_
- 4. \_\_\_\_\_
- 5. \_\_\_\_\_
- 6. \_\_\_\_\_
- 7. \_\_\_\_\_
- 8. \_\_\_\_\_
- 9. \_\_\_\_\_



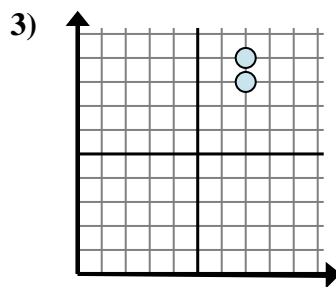
Determine which expression best shows the distance between the two points.



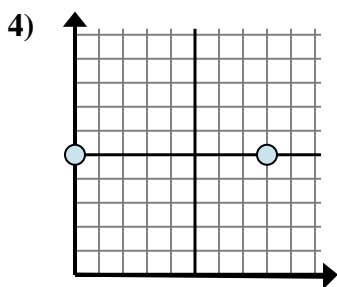
- A.  $0 - 6$
- B.  $3 - 0$
- C.  $6 - 0$
- D.  $6 - 3$



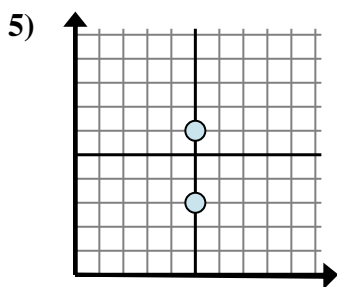
- A.  $3 - 3$
- B.  $3 - 2$
- C.  $3 - 3$
- D.  $2 - 1$



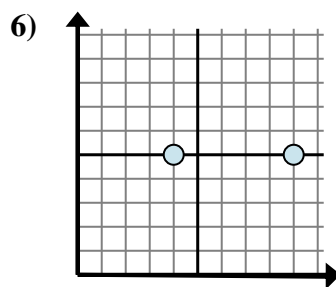
- A.  $7 - 8$
- B.  $7 - 7$
- C.  $9 - 8$
- D.  $8 - 7$



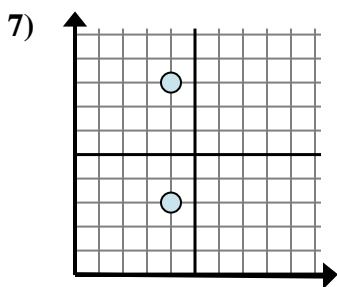
- A.  $8 - 0$
- B.  $5 - 5$
- C.  $5 - 8$
- D.  $8 - 5$



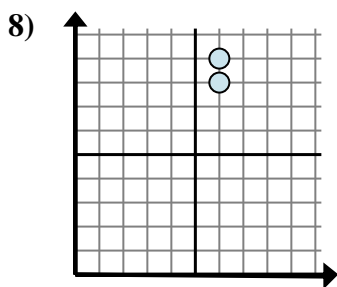
- A.  $6 - 5$
- B.  $6 - 3$
- C.  $5 - 5$
- D.  $5 - 5$



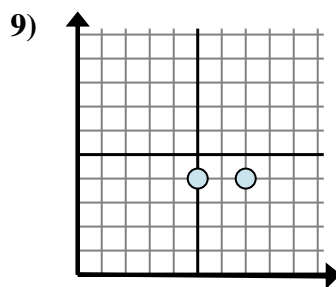
- A.  $5 - 5$
- B.  $9 - 4$
- C.  $9 - 5$
- D.  $4 - 9$



- A.  $4 - 3$
- B.  $8 - 3$
- C.  $4 - 4$
- D.  $4 - 4$



- A.  $9 - 8$
- B.  $6 - 6$
- C.  $8 - 6$
- D.  $9 - 6$



- A.  $5 - 4$
- B.  $4 - 4$
- C.  $7 - 5$
- D.  $4 - 7$

Answers

1. **D**

2. **D**

3. **C**

4. **A**

5. **B**

6. **B**

7. **B**

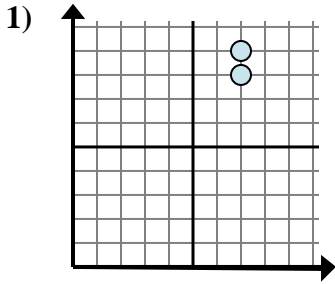
8. **A**

9. **C**

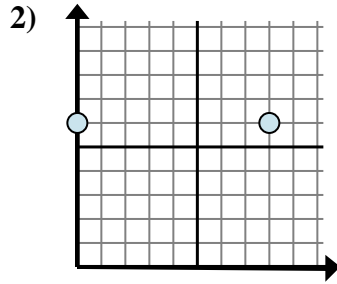


Determine which expression best shows the distance between the two points.

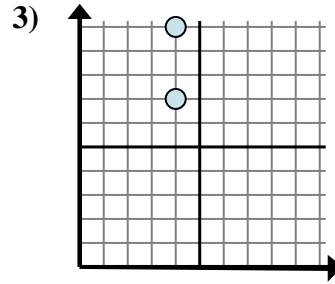
Answers



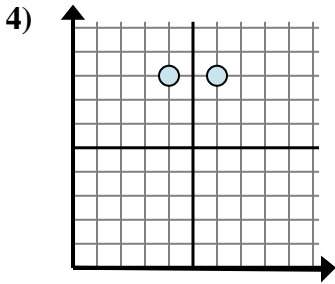
- A.  $7 - 9$
- B.  $8 - 9$
- C.  $9 - 8$
- D.  $7 - 7$



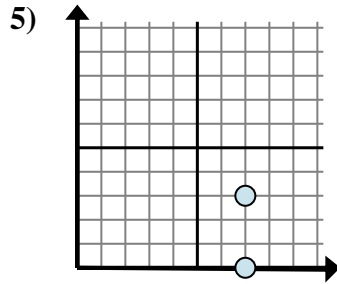
- A.  $8 - 6$
- B.  $8 - 0$
- C.  $0 - 8$
- D.  $6 - 6$



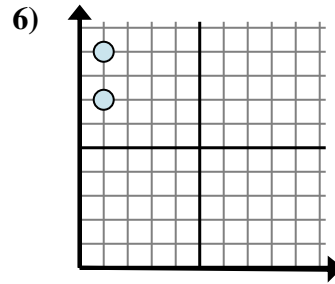
- A.  $7 - 10$
- B.  $4 - 7$
- C.  $10 - 7$
- D.  $4 - 4$



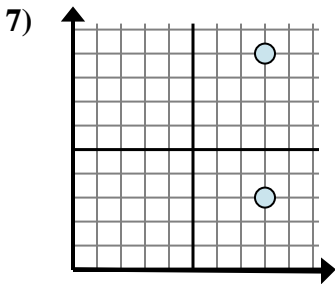
- A.  $8 - 8$
- B.  $4 - 8$
- C.  $6 - 4$
- D.  $6 - 8$



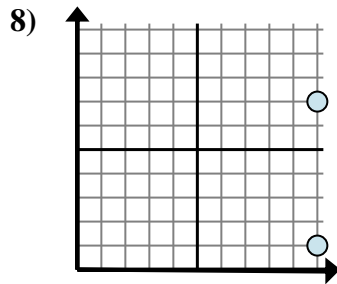
- A.  $7 - 3$
- B.  $3 - 0$
- C.  $0 - 3$
- D.  $3 - 7$



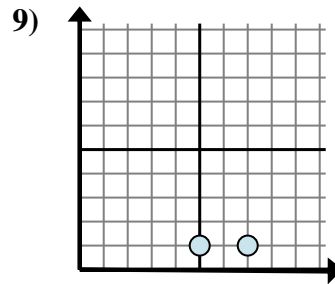
- A.  $9 - 7$
- B.  $7 - 9$
- C.  $1 - 1$
- D.  $1 - 1$



- A.  $8 - 8$
- B.  $3 - 9$
- C.  $9 - 3$
- D.  $9 - 8$



- A.  $1 - 7$
- B.  $7 - 10$
- C.  $7 - 1$
- D.  $1 - 10$

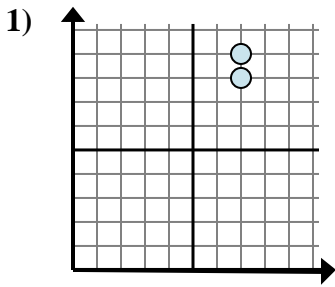


- A.  $7 - 1$
- B.  $1 - 1$
- C.  $1 - 7$
- D.  $7 - 5$

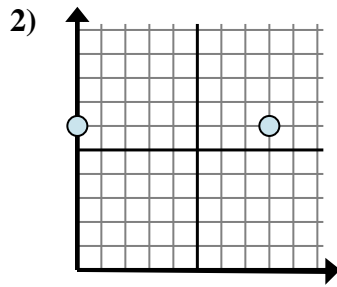
1. \_\_\_\_\_
2. \_\_\_\_\_
3. \_\_\_\_\_
4. \_\_\_\_\_
5. \_\_\_\_\_
6. \_\_\_\_\_
7. \_\_\_\_\_
8. \_\_\_\_\_
9. \_\_\_\_\_



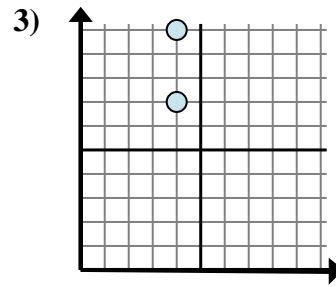
Determine which expression best shows the distance between the two points.



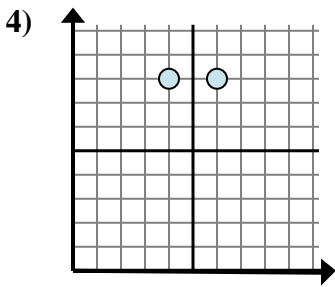
- A.  $7 - 9$
- B.  $8 - 9$
- C.  $9 - 8$
- D.  $7 - 7$



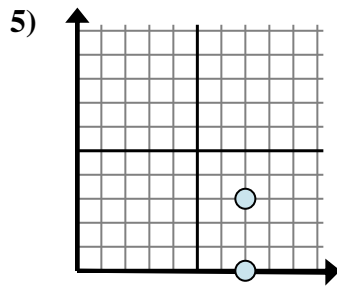
- A.  $8 - 6$
- B.  $8 - 0$
- C.  $0 - 8$
- D.  $6 - 6$



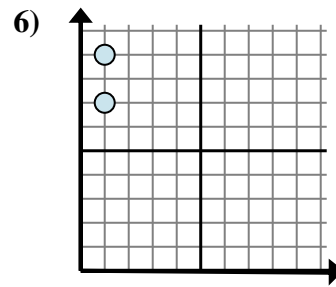
- A.  $7 - 10$
- B.  $4 - 7$
- C.  $10 - 7$
- D.  $4 - 4$



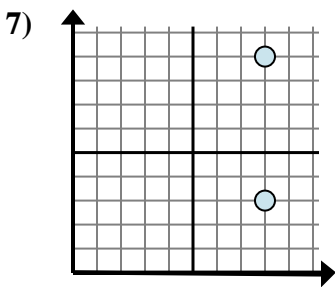
- A.  $8 - 8$
- B.  $4 - 8$
- C.  $6 - 4$
- D.  $6 - 8$



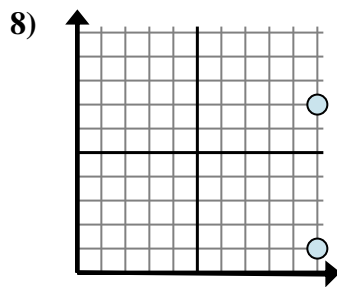
- A.  $7 - 3$
- B.  $3 - 0$
- C.  $0 - 3$
- D.  $3 - 7$



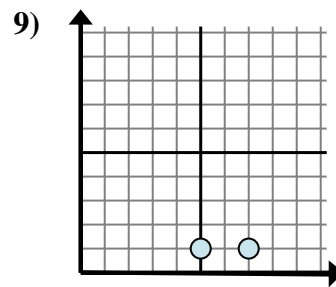
- A.  $9 - 7$
- B.  $7 - 9$
- C.  $1 - 1$
- D.  $1 - 1$



- A.  $8 - 8$
- B.  $3 - 9$
- C.  $9 - 3$
- D.  $9 - 8$



- A.  $1 - 7$
- B.  $7 - 10$
- C.  $7 - 1$
- D.  $1 - 10$



- A.  $7 - 1$
- B.  $1 - 1$
- C.  $1 - 7$
- D.  $7 - 5$

Answers

- 1.     **C**
- 2.     **B**
- 3.     **C**
- 4.     **C**
- 5.     **B**
- 6.     **A**
- 7.     **C**
- 8.     **C**
- 9.     **D**