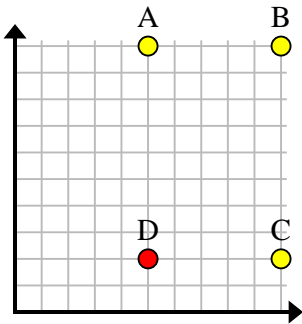


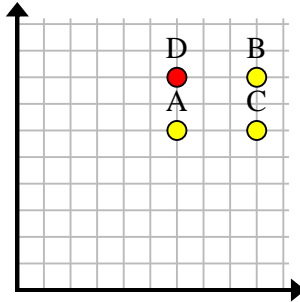


Find the coordinates of point D to make a rectangle.

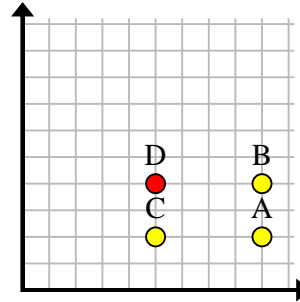
Ex)



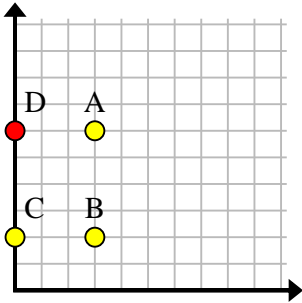
1)



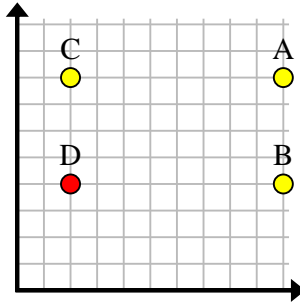
2)



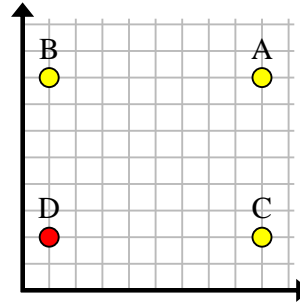
3)



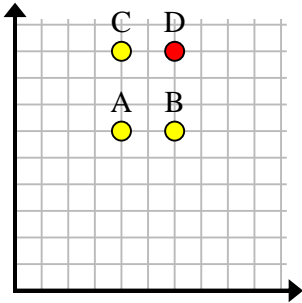
4)



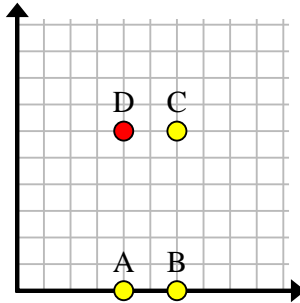
5)



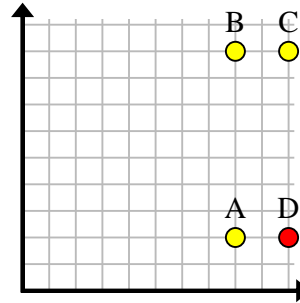
6)



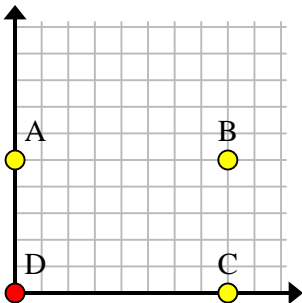
7)



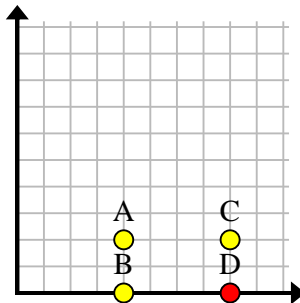
8)



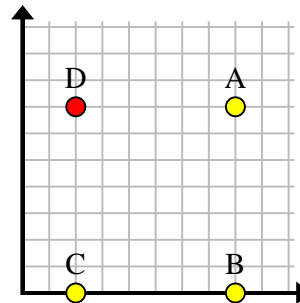
9)



10)



11)



Answers

Ex. **(5, 2)**

1. **(6, 8)**

2. **(5, 4)**

3. **(0, 6)**

4. **(2, 4)**

5. **(1, 2)**

6. **(6, 9)**

7. **(4, 6)**

8. **(10, 2)**

9. **(0, 0)**

10. **(8, 0)**

11. **(2, 7)**