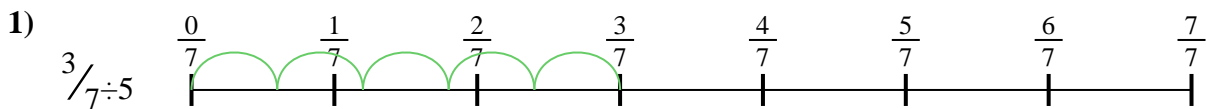




Use the numberline to solve each problem. The first is marked for you.

**Answers**




1. \_\_\_\_\_



2. \_\_\_\_\_



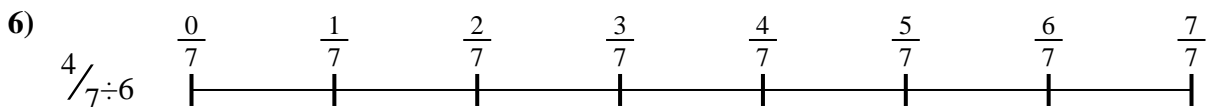
3. \_\_\_\_\_



4. \_\_\_\_\_



5. \_\_\_\_\_



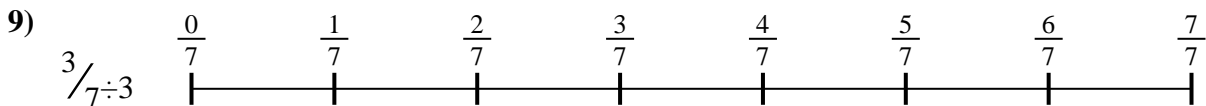
6. \_\_\_\_\_



7. \_\_\_\_\_



8. \_\_\_\_\_

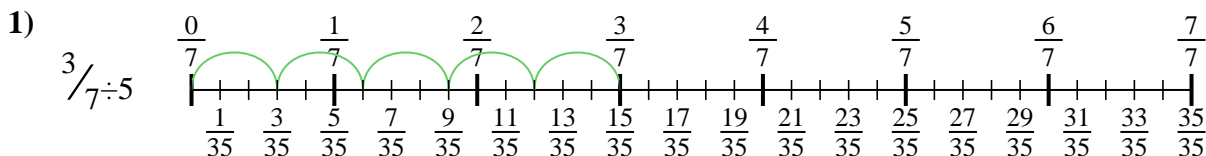


9. \_\_\_\_\_

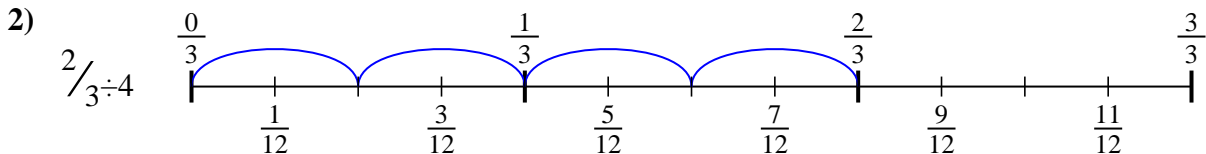


Use the numberline to solve each problem. The first is marked for you.

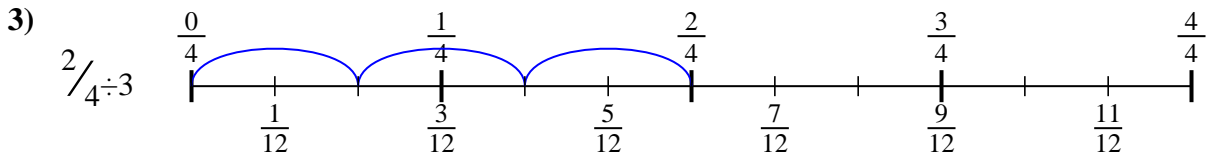
**Answers**



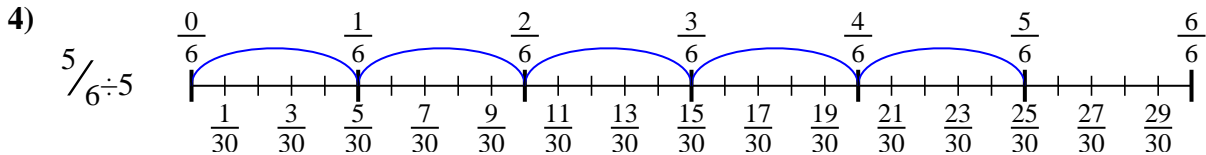
1.  $\frac{3}{35}$



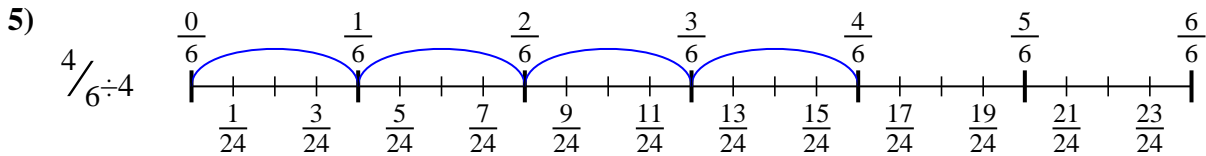
2.  $\frac{2}{12}$



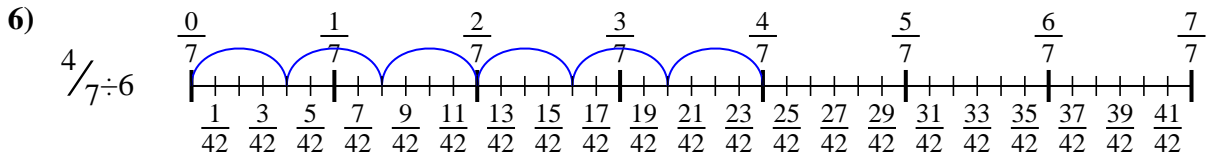
3.  $\frac{2}{12}$



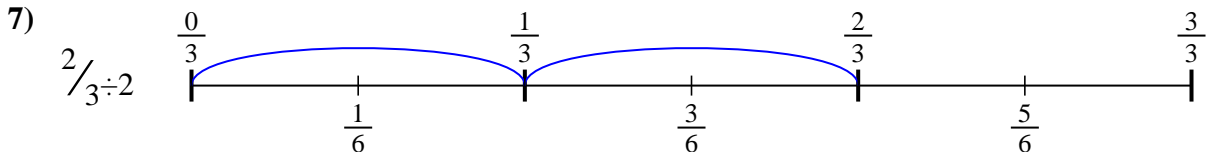
4.  $\frac{5}{30}$



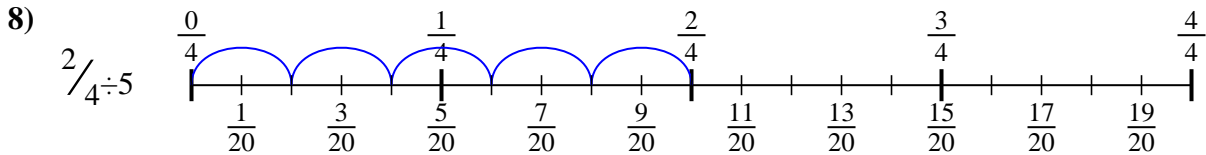
5.  $\frac{4}{24}$



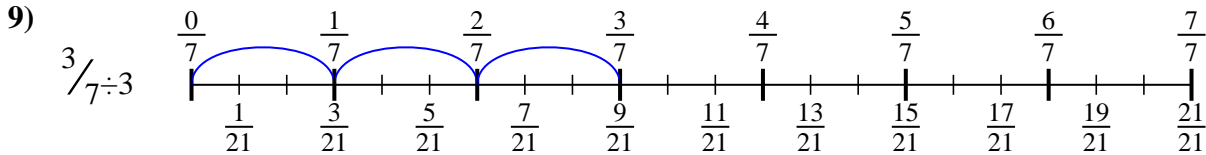
6.  $\frac{4}{42}$



7.  $\frac{2}{6}$



8.  $\frac{2}{20}$



9.  $\frac{3}{21}$



Use the numberline to solve each problem. The first is marked for you.

**Answers**

$2/12$

$5/30$

$2/6$

$3/21$

$3/35$

$2/12$

$4/42$

$4/24$

$2/20$

1. \_\_\_\_\_
2. \_\_\_\_\_
3. \_\_\_\_\_
4. \_\_\_\_\_
5. \_\_\_\_\_
6. \_\_\_\_\_
7. \_\_\_\_\_
8. \_\_\_\_\_
9. \_\_\_\_\_

