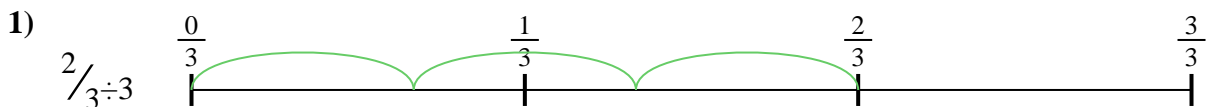





Use the numberline to solve each problem. The first is marked for you.

**Answers**




1. \_\_\_\_\_



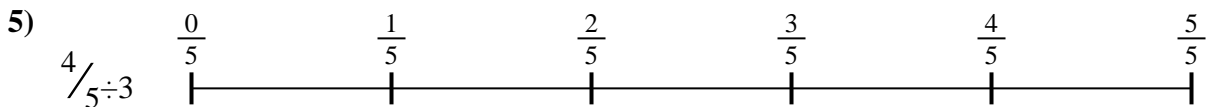
2. \_\_\_\_\_




3. \_\_\_\_\_



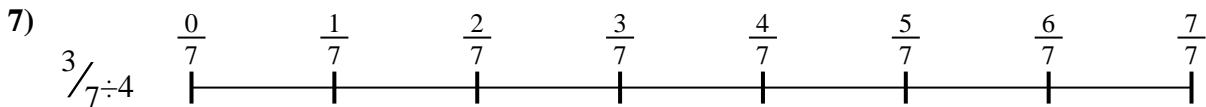
4. \_\_\_\_\_



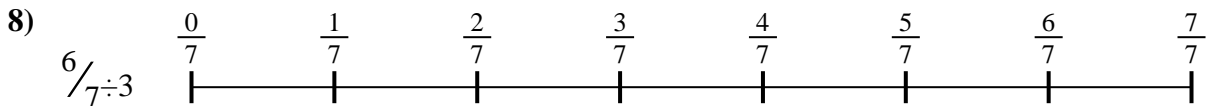
5. \_\_\_\_\_



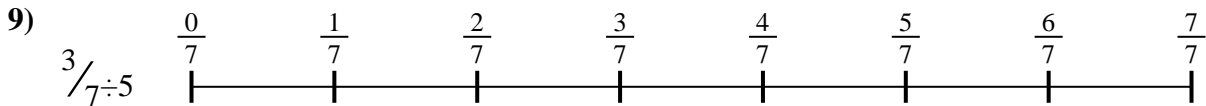
6. \_\_\_\_\_



7. \_\_\_\_\_



8. \_\_\_\_\_

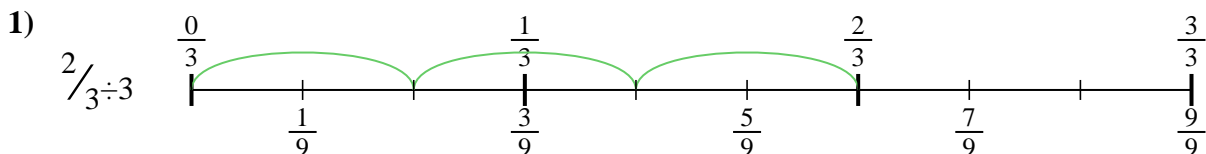


9. \_\_\_\_\_

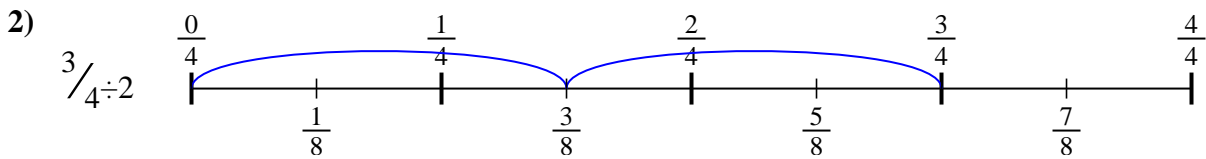


Use the numberline to solve each problem. The first is marked for you.

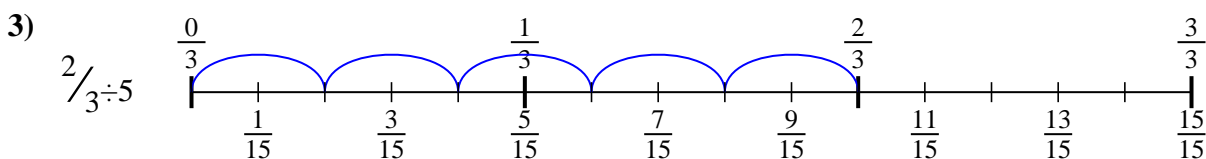
**Answers**



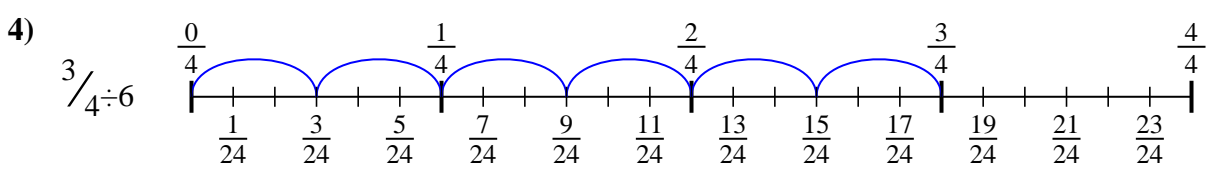
1.  $\frac{2}{9}$



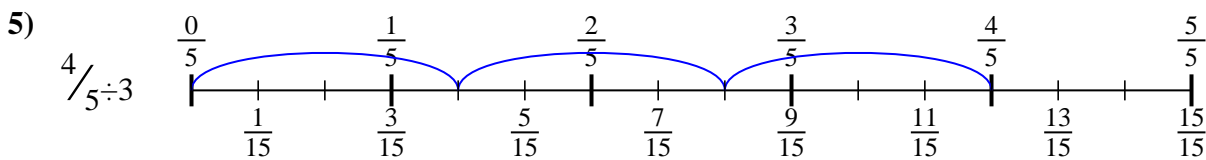
2.  $\frac{3}{8}$



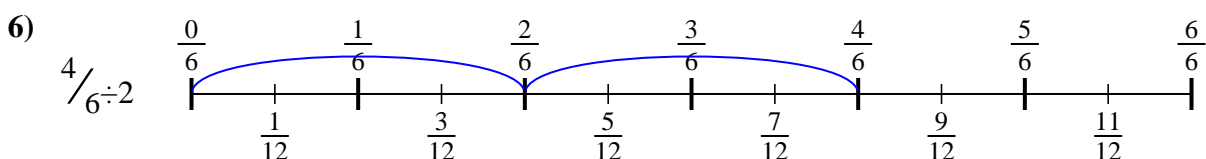
3.  $\frac{2}{15}$



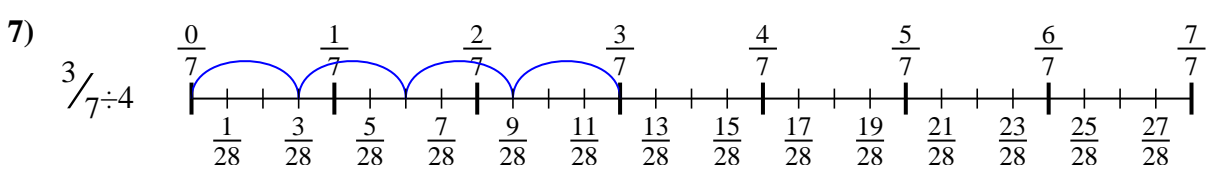
4.  $\frac{3}{24}$



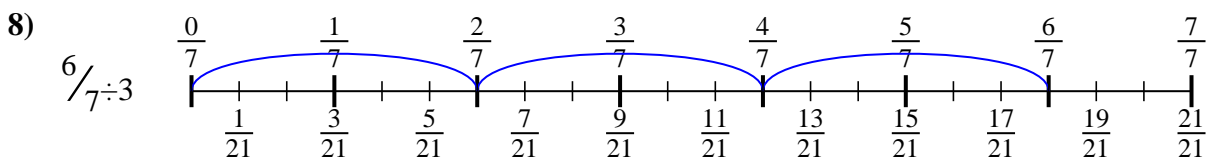
5.  $\frac{4}{15}$



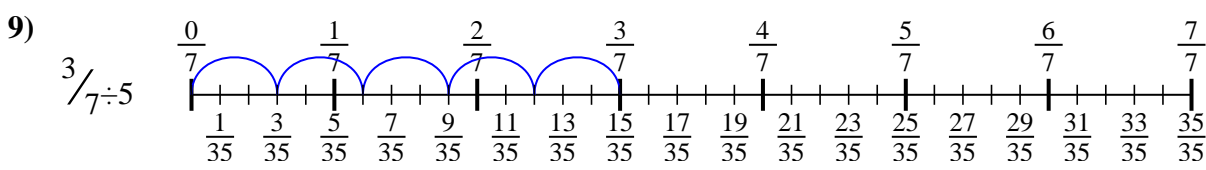
6.  $\frac{4}{12}$



7.  $\frac{3}{28}$



8.  $\frac{6}{21}$



9.  $\frac{3}{35}$



Use the numberline to solve each problem. The first is marked for you.

**Answers**

$3/24$

$2/15$

$3/28$

$2/9$

$6/21$

$4/12$

$3/8$

$3/35$

$4/15$

1. \_\_\_\_\_

2. \_\_\_\_\_

3. \_\_\_\_\_

4. \_\_\_\_\_

5. \_\_\_\_\_

6. \_\_\_\_\_

7. \_\_\_\_\_

8. \_\_\_\_\_

9. \_\_\_\_\_

