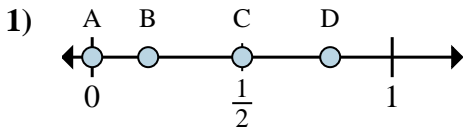


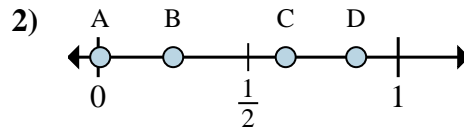


Determine which letter best shows the location of the fraction.

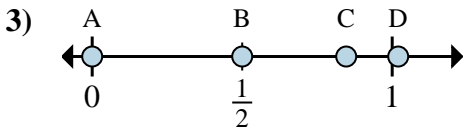
**Answers**



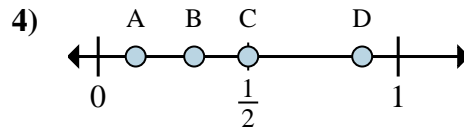
- a. Which letter best shows  $\frac{0}{2}$ ?
- b. Which letter best shows  $\frac{1}{2}$ ?



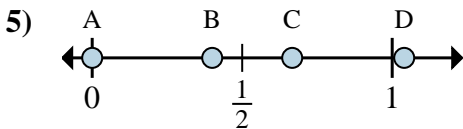
- a. Which letter best shows  $\frac{2}{8}$ ?
- b. Which letter best shows  $\frac{5}{8}$ ?



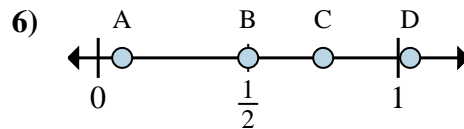
- a. Which letter best shows  $\frac{0}{6}$ ?
- b. Which letter best shows  $\frac{3}{6}$ ?



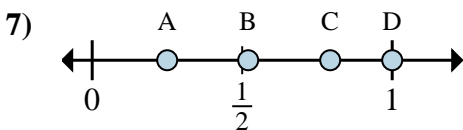
- a. Which letter best shows  $\frac{1}{8}$ ?
- b. Which letter best shows  $\frac{4}{8}$ ?



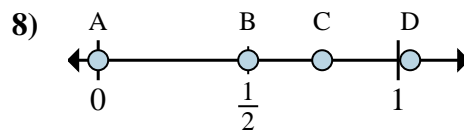
- a. Which letter best shows  $\frac{0}{3}$ ?
- b. Which letter best shows  $\frac{2}{3}$ ?



- a. Which letter best shows  $\frac{2}{4}$ ?
- b. Which letter best shows  $\frac{3}{4}$ ?



- a. Which letter best shows  $\frac{1}{4}$ ?
- b. Which letter best shows  $\frac{4}{4}$ ?



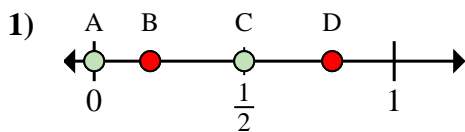
- a. Which letter best shows  $\frac{0}{2}$ ?
- b. Which letter best shows  $\frac{1}{2}$ ?

- 1. \_\_\_\_\_
- 2. \_\_\_\_\_
- 3. \_\_\_\_\_
- 4. \_\_\_\_\_
- 5. \_\_\_\_\_
- 6. \_\_\_\_\_
- 7. \_\_\_\_\_
- 8. \_\_\_\_\_

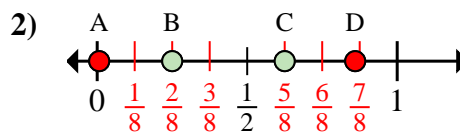


Determine which letter best shows the location of the fraction.

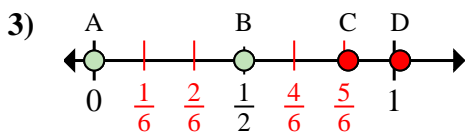
**Answers**



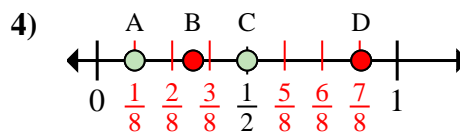
- a. Which letter best shows  $\frac{0}{2}$ ?  
 b. Which letter best shows  $\frac{1}{2}$ ?



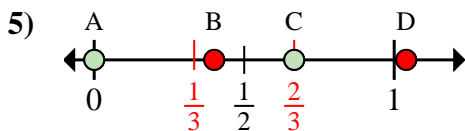
- a. Which letter best shows  $\frac{2}{8}$ ?  
 b. Which letter best shows  $\frac{5}{8}$ ?



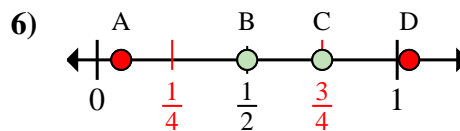
- a. Which letter best shows  $\frac{0}{6}$ ?  
 b. Which letter best shows  $\frac{3}{6}$ ?



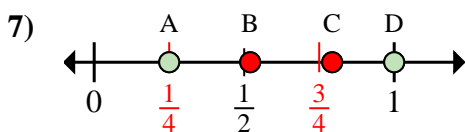
- a. Which letter best shows  $\frac{1}{8}$ ?  
 b. Which letter best shows  $\frac{4}{8}$ ?



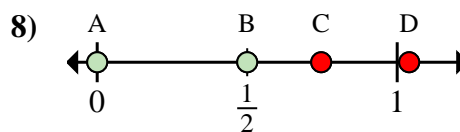
- a. Which letter best shows  $\frac{0}{3}$ ?  
 b. Which letter best shows  $\frac{2}{3}$ ?



- a. Which letter best shows  $\frac{2}{4}$ ?  
 b. Which letter best shows  $\frac{3}{4}$ ?



- a. Which letter best shows  $\frac{1}{4}$ ?  
 b. Which letter best shows  $\frac{4}{4}$ ?



- a. Which letter best shows  $\frac{0}{2}$ ?  
 b. Which letter best shows  $\frac{1}{2}$ ?

1. A C  
 2. B C  
 3. A B  
 4. A C  
 5. A C  
 6. B C  
 7. A D  
 8. A B