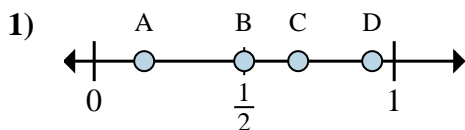


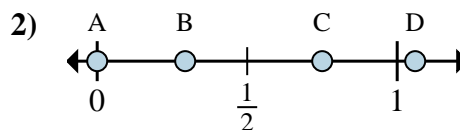


Determine which letter best shows the location of the fraction.

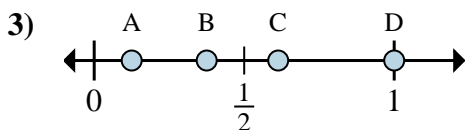
Answers



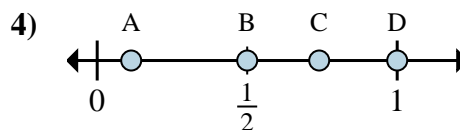
- a. Which letter best shows $\frac{1}{6}$?
- b. Which letter best shows $\frac{3}{6}$?



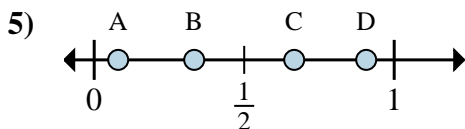
- a. Which letter best shows $\frac{0}{4}$?
- b. Which letter best shows $\frac{3}{4}$?



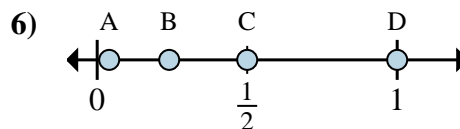
- a. Which letter best shows $\frac{1}{8}$?
- b. Which letter best shows $\frac{3}{8}$?



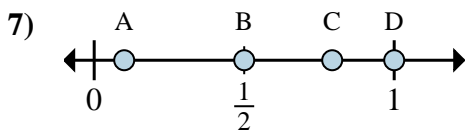
- a. Which letter best shows $\frac{2}{2}$?
- b. Which letter best shows $\frac{1}{2}$?



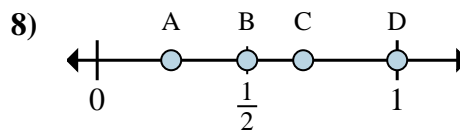
- a. Which letter best shows $\frac{1}{3}$?
- b. Which letter best shows $\frac{2}{3}$?



- a. Which letter best shows $\frac{2}{2}$?
- b. Which letter best shows $\frac{1}{2}$?



- a. Which letter best shows $\frac{1}{2}$?
- b. Which letter best shows $\frac{2}{2}$?



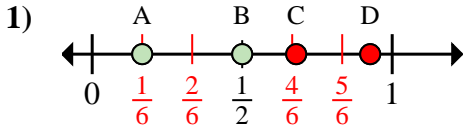
- a. Which letter best shows $\frac{1}{2}$?
- b. Which letter best shows $\frac{2}{2}$?

- 1. _____
- 2. _____
- 3. _____
- 4. _____
- 5. _____
- 6. _____
- 7. _____
- 8. _____

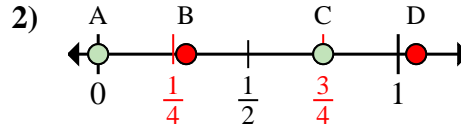


Determine which letter best shows the location of the fraction.

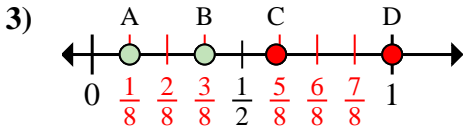
Answers



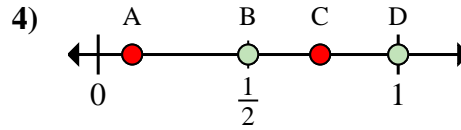
- a. Which letter best shows $\frac{1}{6}$?
 b. Which letter best shows $\frac{3}{6}$?



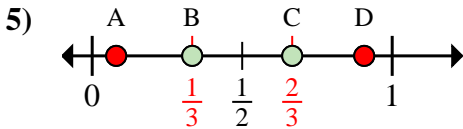
- a. Which letter best shows $\frac{0}{4}$?
 b. Which letter best shows $\frac{3}{4}$?



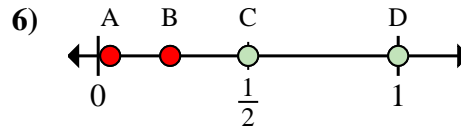
- a. Which letter best shows $\frac{1}{8}$?
 b. Which letter best shows $\frac{3}{8}$?



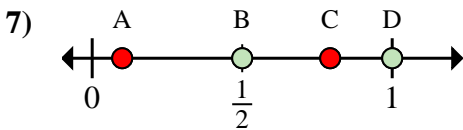
- a. Which letter best shows $\frac{2}{2}$?
 b. Which letter best shows $\frac{1}{2}$?



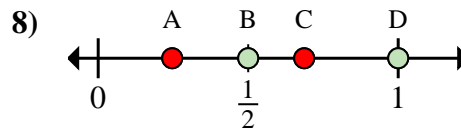
- a. Which letter best shows $\frac{1}{3}$?
 b. Which letter best shows $\frac{2}{3}$?



- a. Which letter best shows $\frac{2}{2}$?
 b. Which letter best shows $\frac{1}{2}$?



- a. Which letter best shows $\frac{1}{2}$?
 b. Which letter best shows $\frac{2}{2}$?



- a. Which letter best shows $\frac{1}{2}$?
 b. Which letter best shows $\frac{2}{2}$?

1. A B
 2. A C
 3. A B
 4. D B
 5. B C
 6. D C
 7. B D
 8. B D