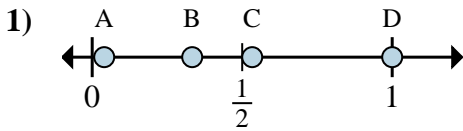


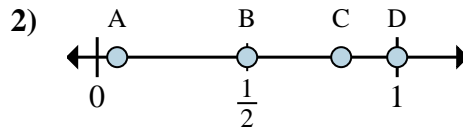


Determine which letter best shows the location of the fraction.

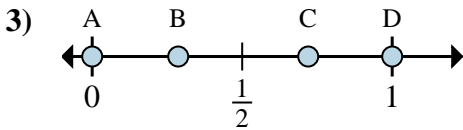
**Answers**



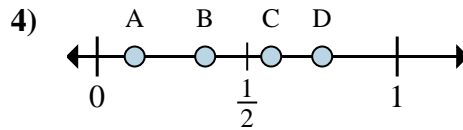
- a. Which letter best shows  $\frac{1}{3}$ ?
- b. Which letter best shows  $\frac{3}{3}$ ?



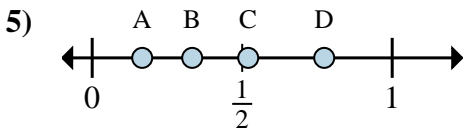
- a. Which letter best shows  $\frac{1}{2}$ ?
- b. Which letter best shows  $\frac{2}{2}$ ?



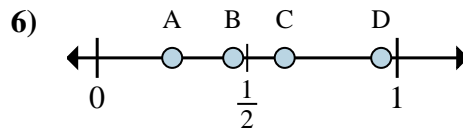
- a. Which letter best shows  $\frac{0}{6}$ ?
- b. Which letter best shows  $\frac{6}{6}$ ?



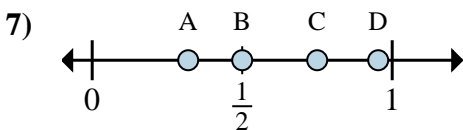
- a. Which letter best shows  $\frac{1}{8}$ ?
- b. Which letter best shows  $\frac{6}{8}$ ?



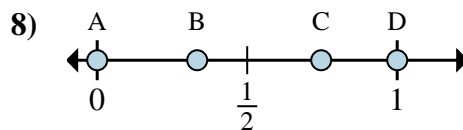
- a. Which letter best shows  $\frac{2}{6}$ ?
- b. Which letter best shows  $\frac{1}{6}$ ?



- a. Which letter best shows  $\frac{5}{8}$ ?
- b. Which letter best shows  $\frac{2}{8}$ ?



- a. Which letter best shows  $\frac{3}{4}$ ?
- b. Which letter best shows  $\frac{2}{4}$ ?



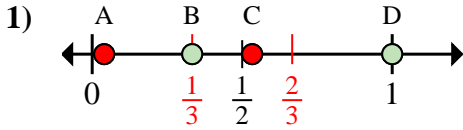
- a. Which letter best shows  $\frac{0}{6}$ ?
- b. Which letter best shows  $\frac{6}{6}$ ?

- 1. \_\_\_\_\_
- 2. \_\_\_\_\_
- 3. \_\_\_\_\_
- 4. \_\_\_\_\_
- 5. \_\_\_\_\_
- 6. \_\_\_\_\_
- 7. \_\_\_\_\_
- 8. \_\_\_\_\_

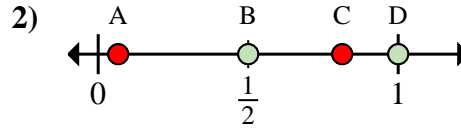


Determine which letter best shows the location of the fraction.

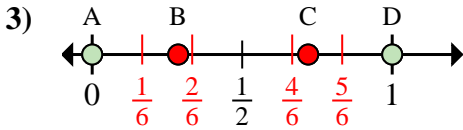
**Answers**



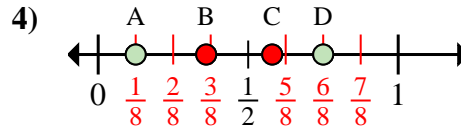
- a. Which letter best shows  $\frac{1}{3}$ ?  
 b. Which letter best shows  $\frac{3}{3}$ ?



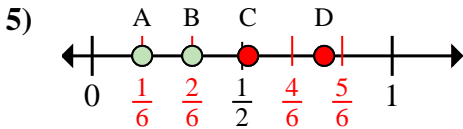
- a. Which letter best shows  $\frac{1}{2}$ ?  
 b. Which letter best shows  $\frac{2}{2}$ ?



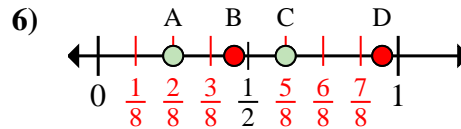
- a. Which letter best shows  $\frac{0}{6}$ ?  
 b. Which letter best shows  $\frac{6}{6}$ ?



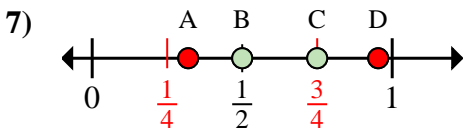
- a. Which letter best shows  $\frac{1}{8}$ ?  
 b. Which letter best shows  $\frac{6}{8}$ ?



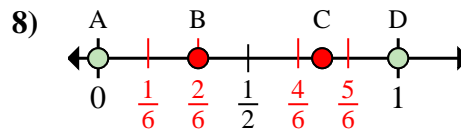
- a. Which letter best shows  $\frac{2}{6}$ ?  
 b. Which letter best shows  $\frac{1}{6}$ ?



- a. Which letter best shows  $\frac{5}{8}$ ?  
 b. Which letter best shows  $\frac{2}{8}$ ?



- a. Which letter best shows  $\frac{3}{4}$ ?  
 b. Which letter best shows  $\frac{2}{4}$ ?



- a. Which letter best shows  $\frac{0}{6}$ ?  
 b. Which letter best shows  $\frac{6}{6}$ ?

1.        
 2.        
 3.        
 4.        
 5.        
 6.        
 7.        
 8.