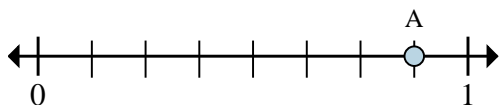




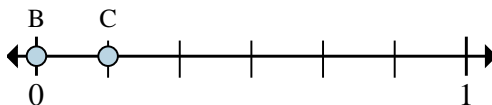
Solve each problem.

Ex)



- This numberline is divided into how many pieces?
- What is the location of A (written as a fraction)?

1)



- On this numberline what is the value of 1 written as a fraction?
- On this numberline from B to C is how far (written as a fraction)?

Answers

Ex. 8 7/8

1. _____

2. _____

3. _____

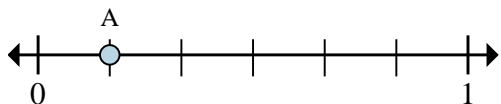
4. _____

5. _____

6. _____

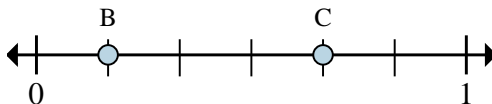
7. _____

2)



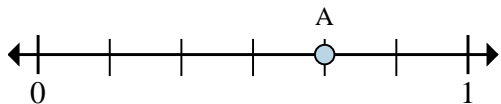
- This numberline is divided into how many pieces?
- What is the location of A (written as a fraction)?

3)



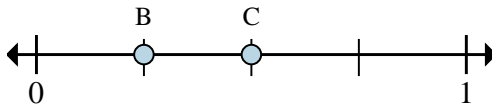
- On this numberline what is the value of 0 written as a fraction?
- On this numberline from B to C is how far (written as a fraction)?

4)



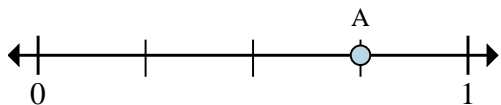
- This numberline is divided into how many pieces?
- What is the location of A (written as a fraction)?

5)



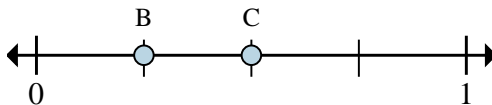
- On this numberline what is the value of 0 written as a fraction?
- On this numberline from B to C is how far (written as a fraction)?

6)



- This numberline is divided into how many pieces?
- What is the location of A (written as a fraction)?

7)

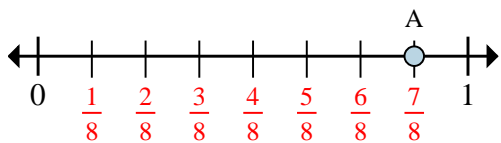


- On this numberline what is the value of 0 written as a fraction?
- On this numberline from B to C is how far (written as a fraction)?



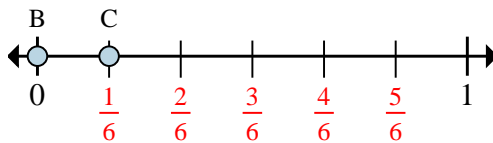
Solve each problem.

Ex)



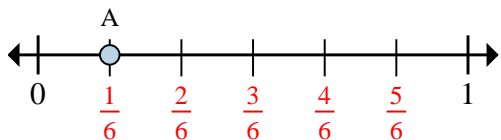
- This numberline is divided into how many pieces?
- What is the location of A (written as a fraction)?

1)



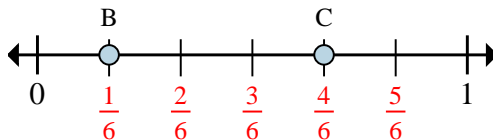
- On this numberline what is the value of 1 written as a fraction?
- On this numberline from B to C is how far (written as a fraction)?

2)



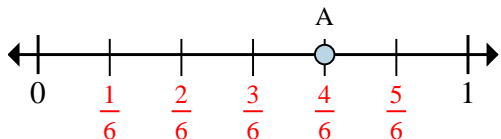
- This numberline is divided into how many pieces?
- What is the location of A (written as a fraction)?

3)



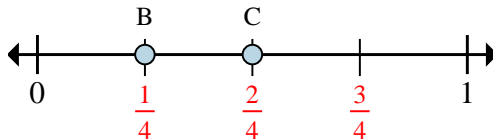
- On this numberline what is the value of 0 written as a fraction?
- On this numberline from B to C is how far (written as a fraction)?

4)



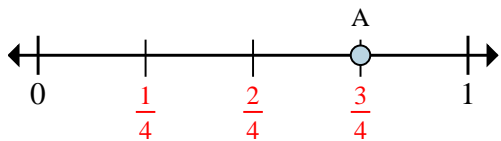
- This numberline is divided into how many pieces?
- What is the location of A (written as a fraction)?

5)



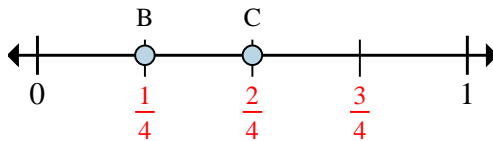
- On this numberline what is the value of 0 written as a fraction?
- On this numberline from B to C is how far (written as a fraction)?

6)



- This numberline is divided into how many pieces?
- What is the location of A (written as a fraction)?

7)



- On this numberline what is the value of 0 written as a fraction?
- On this numberline from B to C is how far (written as a fraction)?

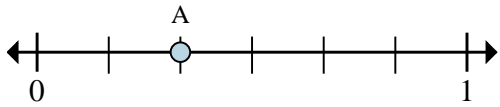
Answers

Ex.	8	7/8
1.	6/6	1/6
2.	6	1/6
3.	0/6	3/6
4.	6	4/6
5.	0/4	1/4
6.	4	3/4
7.	0/4	1/4



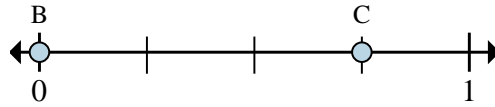
Solve each problem.

Ex)



- This numberline is divided into how many pieces?
- What is the location of A (written as a fraction)?

1)



- On this numberline what is the value of 1 written as a fraction?
- On this numberline from B to C is how far (written as a fraction)?

Answers

Ex. 6 2/6

1. _____

2. _____

3. _____

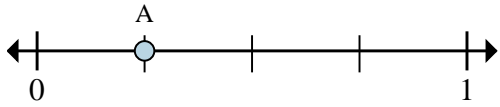
4. _____

5. _____

6. _____

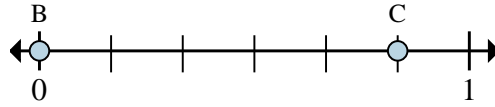
7. _____

2)



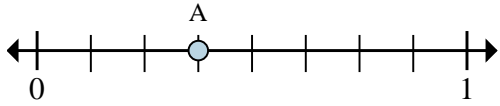
- This numberline is divided into how many pieces?
- What is the location of A (written as a fraction)?

3)



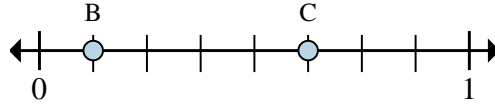
- On this numberline what is the value of 1 written as a fraction?
- On this numberline from B to C is how far (written as a fraction)?

4)



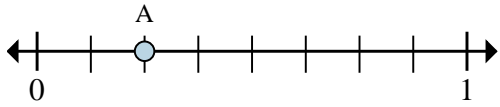
- This numberline is divided into how many pieces?
- What is the location of A (written as a fraction)?

5)



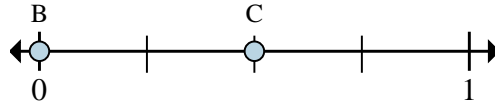
- On this numberline what is the value of 0 written as a fraction?
- On this numberline from B to C is how far (written as a fraction)?

6)



- This numberline is divided into how many pieces?
- What is the location of A (written as a fraction)?

7)

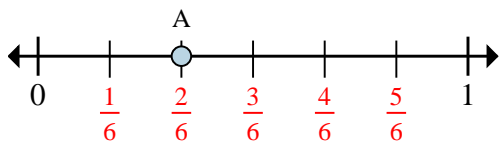


- On this numberline what is the value of 1 written as a fraction?
- On this numberline from B to C is how far (written as a fraction)?



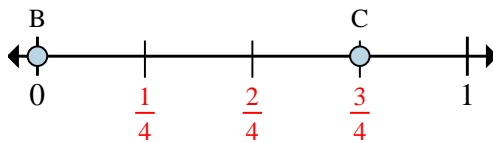
Solve each problem.

Ex)



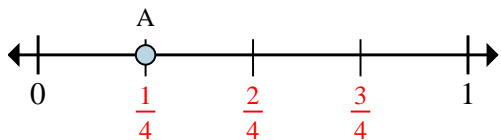
- This numberline is divided into how many pieces?
- What is the location of A (written as a fraction)?

1)



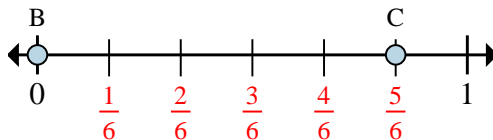
- On this numberline what is the value of 1 written as a fraction?
- On this numberline from B to C is how far (written as a fraction)?

2)



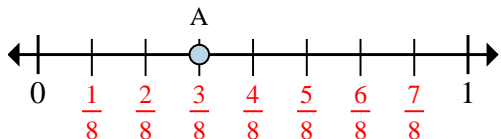
- This numberline is divided into how many pieces?
- What is the location of A (written as a fraction)?

3)



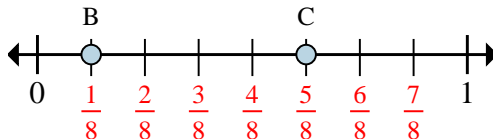
- On this numberline what is the value of 1 written as a fraction?
- On this numberline from B to C is how far (written as a fraction)?

4)



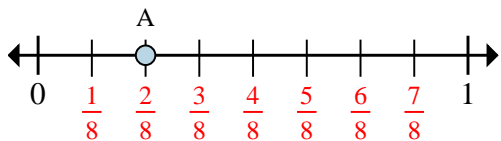
- This numberline is divided into how many pieces?
- What is the location of A (written as a fraction)?

5)



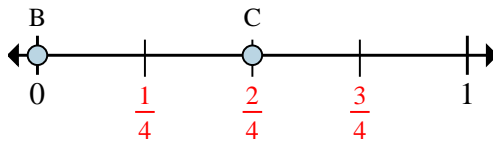
- On this numberline what is the value of 0 written as a fraction?
- On this numberline from B to C is how far (written as a fraction)?

6)



- This numberline is divided into how many pieces?
- What is the location of A (written as a fraction)?

7)



- On this numberline what is the value of 1 written as a fraction?
- On this numberline from B to C is how far (written as a fraction)?

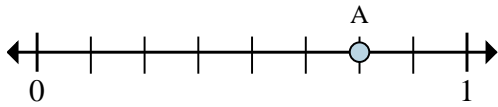
Answers

Ex.	<u>6</u>	<u>2/6</u>
1.	<u>4/4</u>	<u>3/4</u>
2.	<u>4</u>	<u>1/4</u>
3.	<u>6/6</u>	<u>5/6</u>
4.	<u>8</u>	<u>3/8</u>
5.	<u>0/8</u>	<u>4/8</u>
6.	<u>8</u>	<u>2/8</u>
7.	<u>4/4</u>	<u>2/4</u>



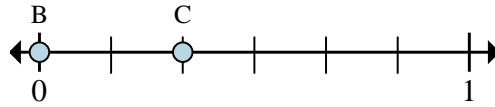
Solve each problem.

Ex)



- This numberline is divided into how many pieces?
- What is the location of A (written as a fraction)?

1)



- On this numberline what is the value of 0 written as a fraction?
- On this numberline from B to C is how far (written as a fraction)?

Answers

Ex. 8 6/8

1. _____

2. _____

3. _____

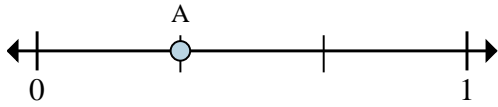
4. _____

5. _____

6. _____

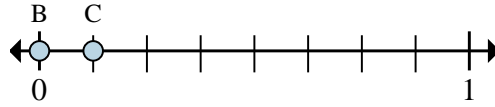
7. _____

2)



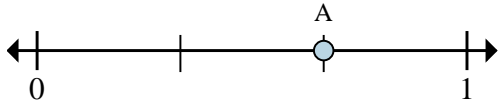
- This numberline is divided into how many pieces?
- What is the location of A (written as a fraction)?

3)



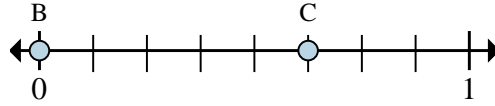
- On this numberline what is the value of 1 written as a fraction?
- On this numberline from B to C is how far (written as a fraction)?

4)



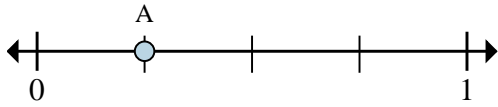
- This numberline is divided into how many pieces?
- What is the location of A (written as a fraction)?

5)



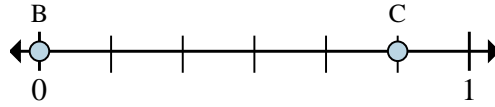
- On this numberline what is the value of 0 written as a fraction?
- On this numberline from B to C is how far (written as a fraction)?

6)



- This numberline is divided into how many pieces?
- What is the location of A (written as a fraction)?

7)

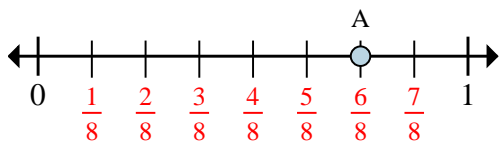


- On this numberline what is the value of 0 written as a fraction?
- On this numberline from B to C is how far (written as a fraction)?



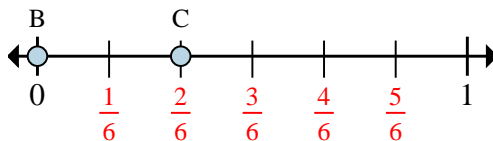
Solve each problem.

Ex)



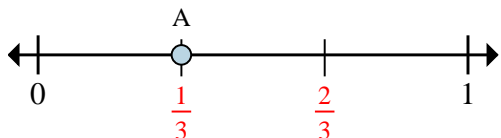
- This numberline is divided into how many pieces?
- What is the location of A (written as a fraction)?

1)



- On this numberline what is the value of 0 written as a fraction?
- On this numberline from B to C is how far (written as a fraction)?

2)



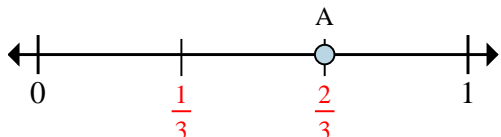
- This numberline is divided into how many pieces?
- What is the location of A (written as a fraction)?

3)



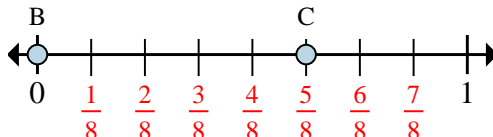
- On this numberline what is the value of 1 written as a fraction?
- On this numberline from B to C is how far (written as a fraction)?

4)



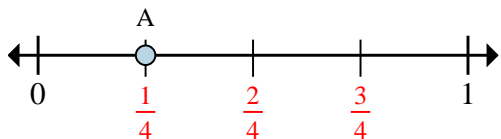
- This numberline is divided into how many pieces?
- What is the location of A (written as a fraction)?

5)



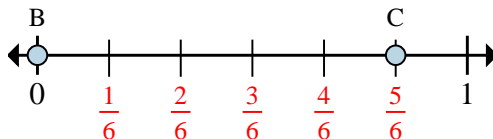
- On this numberline what is the value of 0 written as a fraction?
- On this numberline from B to C is how far (written as a fraction)?

6)



- This numberline is divided into how many pieces?
- What is the location of A (written as a fraction)?

7)



- On this numberline what is the value of 0 written as a fraction?
- On this numberline from B to C is how far (written as a fraction)?

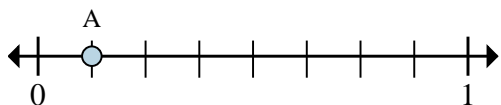
Answers

Ex.	<u>8</u>	<u>6/8</u>
1.	<u>0/6</u>	<u>2/6</u>
2.	<u>3</u>	<u>1/3</u>
3.	<u>8/8</u>	<u>1/8</u>
4.	<u>3</u>	<u>2/3</u>
5.	<u>0/8</u>	<u>5/8</u>
6.	<u>4</u>	<u>1/4</u>
7.	<u>0/6</u>	<u>5/6</u>



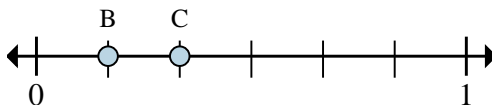
Solve each problem.

Ex)



- This numberline is divided into how many pieces?
- What is the location of A (written as a fraction)?

1)



- On this numberline what is the value of 1 written as a fraction?
- On this numberline from B to C is how far (written as a fraction)?

Answers

Ex. 8 1/8

1. _____

2. _____

3. _____

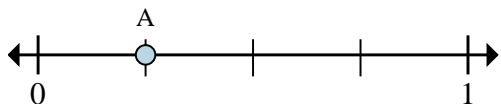
4. _____

5. _____

6. _____

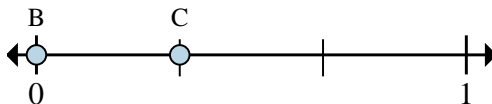
7. _____

2)



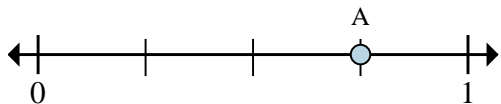
- This numberline is divided into how many pieces?
- What is the location of A (written as a fraction)?

3)



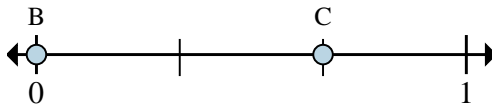
- On this numberline what is the value of 0 written as a fraction?
- On this numberline from B to C is how far (written as a fraction)?

4)



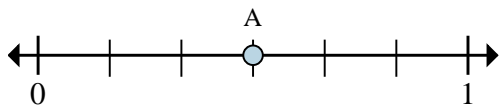
- This numberline is divided into how many pieces?
- What is the location of A (written as a fraction)?

5)



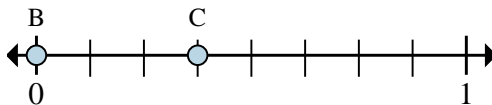
- On this numberline what is the value of 1 written as a fraction?
- On this numberline from B to C is how far (written as a fraction)?

6)



- This numberline is divided into how many pieces?
- What is the location of A (written as a fraction)?

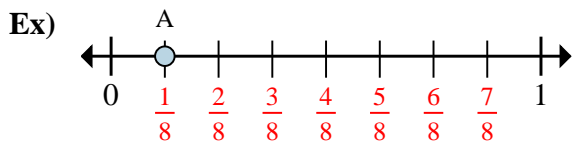
7)



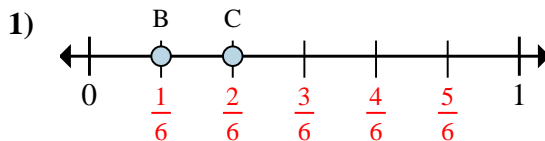
- On this numberline what is the value of 1 written as a fraction?
- On this numberline from B to C is how far (written as a fraction)?



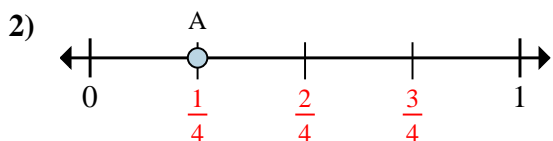
Solve each problem.



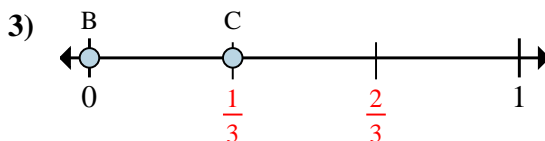
- This numberline is divided into how many pieces?
- What is the location of A (written as a fraction)?



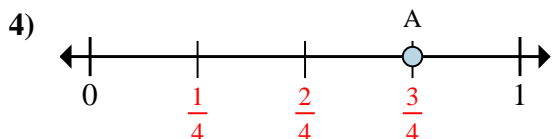
- On this numberline what is the value of 1 written as a fraction?
- On this numberline from B to C is how far (written as a fraction)?



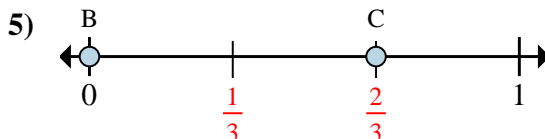
- This numberline is divided into how many pieces?
- What is the location of A (written as a fraction)?



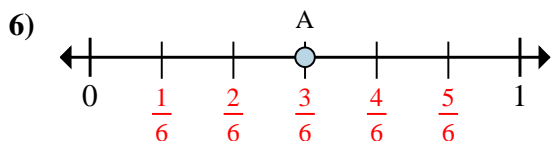
- On this numberline what is the value of 0 written as a fraction?
- On this numberline from B to C is how far (written as a fraction)?



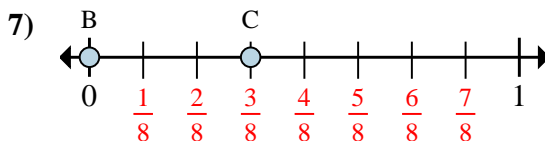
- This numberline is divided into how many pieces?
- What is the location of A (written as a fraction)?



- On this numberline what is the value of 1 written as a fraction?
- On this numberline from B to C is how far (written as a fraction)?



- This numberline is divided into how many pieces?
- What is the location of A (written as a fraction)?



- On this numberline what is the value of 1 written as a fraction?
- On this numberline from B to C is how far (written as a fraction)?

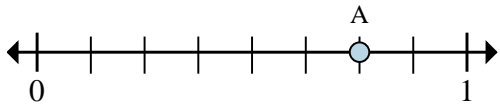
Answers

Ex.	<u>8</u>	<u>1/8</u>
1.	<u>6/6</u>	<u>1/6</u>
2.	<u>4</u>	<u>1/4</u>
3.	<u>0/3</u>	<u>1/3</u>
4.	<u>4</u>	<u>3/4</u>
5.	<u>3/3</u>	<u>2/3</u>
6.	<u>6</u>	<u>3/6</u>
7.	<u>8/8</u>	<u>3/8</u>



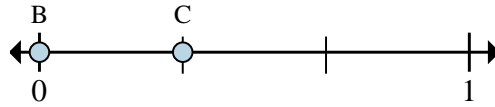
Solve each problem.

Ex)



- This numberline is divided into how many pieces?
- What is the location of A (written as a fraction)?

1)



- On this numberline what is the value of 0 written as a fraction?
- On this numberline from B to C is how far (written as a fraction)?

Answers

Ex. 8 6/8

1. _____

2. _____

3. _____

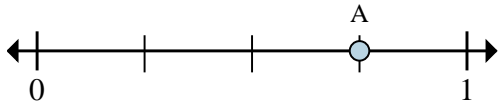
4. _____

5. _____

6. _____

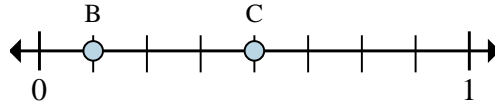
7. _____

2)



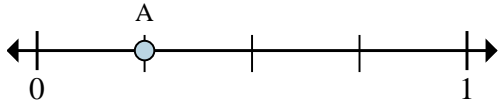
- This numberline is divided into how many pieces?
- What is the location of A (written as a fraction)?

3)



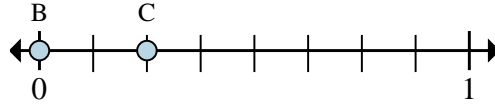
- On this numberline what is the value of 1 written as a fraction?
- On this numberline from B to C is how far (written as a fraction)?

4)



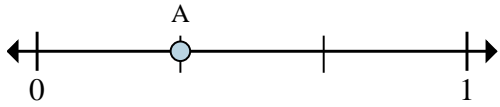
- This numberline is divided into how many pieces?
- What is the location of A (written as a fraction)?

5)



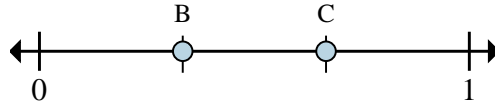
- On this numberline what is the value of 0 written as a fraction?
- On this numberline from B to C is how far (written as a fraction)?

6)



- This numberline is divided into how many pieces?
- What is the location of A (written as a fraction)?

7)

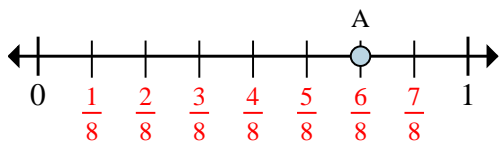


- On this numberline what is the value of 0 written as a fraction?
- On this numberline from B to C is how far (written as a fraction)?



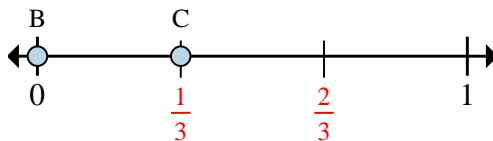
Solve each problem.

Ex)



- This numberline is divided into how many pieces?
- What is the location of A (written as a fraction)?

1)



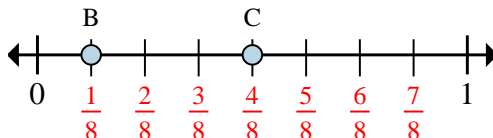
- On this numberline what is the value of 0 written as a fraction?
- On this numberline from B to C is how far (written as a fraction)?

2)



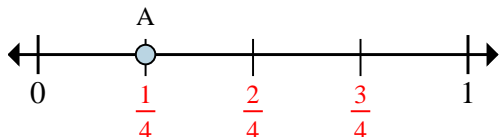
- This numberline is divided into how many pieces?
- What is the location of A (written as a fraction)?

3)



- On this numberline what is the value of 1 written as a fraction?
- On this numberline from B to C is how far (written as a fraction)?

4)



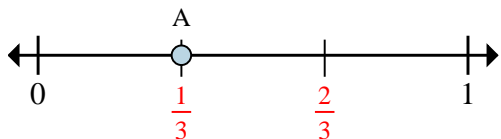
- This numberline is divided into how many pieces?
- What is the location of A (written as a fraction)?

5)



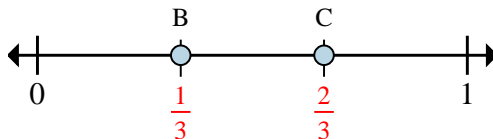
- On this numberline what is the value of 0 written as a fraction?
- On this numberline from B to C is how far (written as a fraction)?

6)



- This numberline is divided into how many pieces?
- What is the location of A (written as a fraction)?

7)



- On this numberline what is the value of 0 written as a fraction?
- On this numberline from B to C is how far (written as a fraction)?

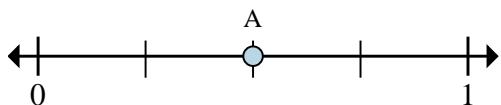
Answers

Ex.	<u>8</u>	<u>6/8</u>
1.	<u>0/3</u>	<u>1/3</u>
2.	<u>4</u>	<u>3/4</u>
3.	<u>8/8</u>	<u>3/8</u>
4.	<u>4</u>	<u>1/4</u>
5.	<u>0/8</u>	<u>2/8</u>
6.	<u>3</u>	<u>1/3</u>
7.	<u>0/3</u>	<u>1/3</u>



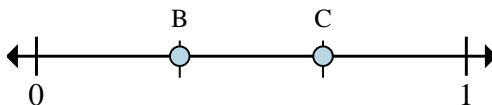
Solve each problem.

Ex)



- This numberline is divided into how many pieces?
- What is the location of A (written as a fraction)?

1)



- On this numberline what is the value of 1 written as a fraction?
- On this numberline from B to C is how far (written as a fraction)?

Answers

Ex. 4 2/4

1. _____

2. _____

3. _____

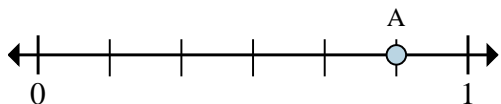
4. _____

5. _____

6. _____

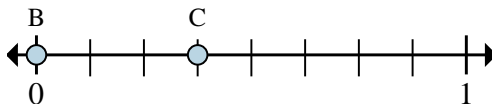
7. _____

2)



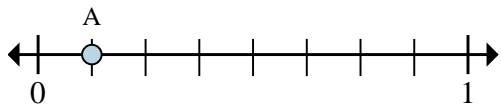
- This numberline is divided into how many pieces?
- What is the location of A (written as a fraction)?

3)



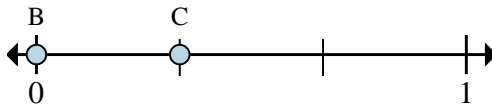
- On this numberline what is the value of 0 written as a fraction?
- On this numberline from B to C is how far (written as a fraction)?

4)



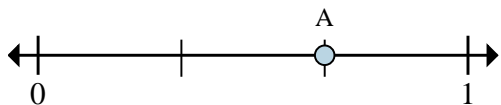
- This numberline is divided into how many pieces?
- What is the location of A (written as a fraction)?

5)



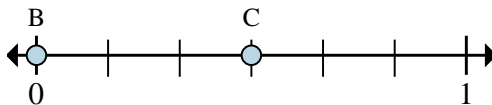
- On this numberline what is the value of 1 written as a fraction?
- On this numberline from B to C is how far (written as a fraction)?

6)



- This numberline is divided into how many pieces?
- What is the location of A (written as a fraction)?

7)

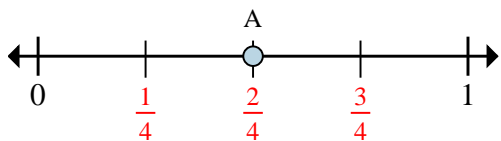


- On this numberline what is the value of 0 written as a fraction?
- On this numberline from B to C is how far (written as a fraction)?



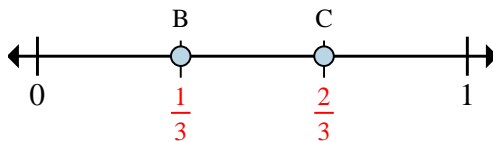
Solve each problem.

Ex)



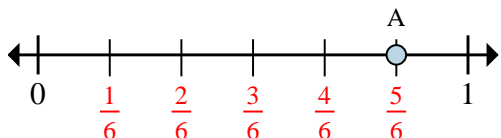
- This numberline is divided into how many pieces?
- What is the location of A (written as a fraction)?

1)



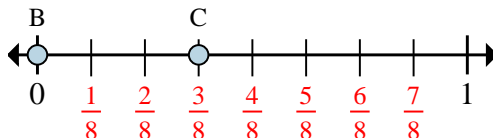
- On this numberline what is the value of 1 written as a fraction?
- On this numberline from B to C is how far (written as a fraction)?

2)



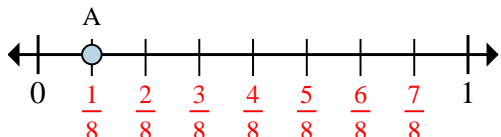
- This numberline is divided into how many pieces?
- What is the location of A (written as a fraction)?

3)



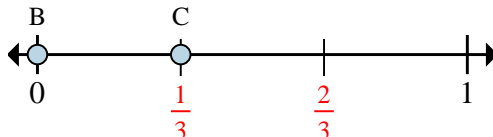
- On this numberline what is the value of 0 written as a fraction?
- On this numberline from B to C is how far (written as a fraction)?

4)



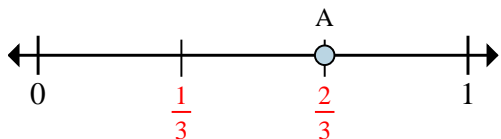
- This numberline is divided into how many pieces?
- What is the location of A (written as a fraction)?

5)



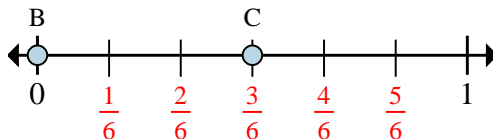
- On this numberline what is the value of 1 written as a fraction?
- On this numberline from B to C is how far (written as a fraction)?

6)



- This numberline is divided into how many pieces?
- What is the location of A (written as a fraction)?

7)



- On this numberline what is the value of 0 written as a fraction?
- On this numberline from B to C is how far (written as a fraction)?

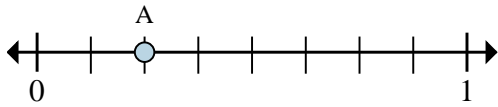
Answers

Ex.	<u>4</u>	<u>2/4</u>
1.	<u>3/3</u>	<u>1/3</u>
2.	<u>6</u>	<u>5/6</u>
3.	<u>0/8</u>	<u>3/8</u>
4.	<u>8</u>	<u>1/8</u>
5.	<u>3/3</u>	<u>1/3</u>
6.	<u>3</u>	<u>2/3</u>
7.	<u>0/6</u>	<u>3/6</u>



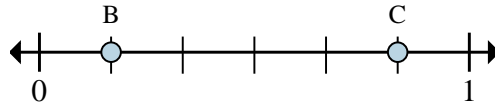
Solve each problem.

Ex)



- This numberline is divided into how many pieces?
- What is the location of A (written as a fraction)?

1)



- On this numberline what is the value of 0 written as a fraction?
- On this numberline from B to C is how far (written as a fraction)?

Answers

Ex. 8 2/8

1. _____

2. _____

3. _____

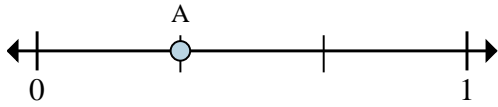
4. _____

5. _____

6. _____

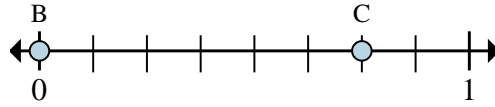
7. _____

2)



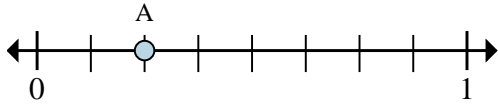
- This numberline is divided into how many pieces?
- What is the location of A (written as a fraction)?

3)



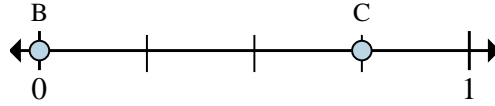
- On this numberline what is the value of 1 written as a fraction?
- On this numberline from B to C is how far (written as a fraction)?

4)



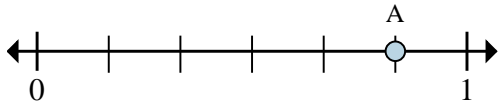
- This numberline is divided into how many pieces?
- What is the location of A (written as a fraction)?

5)



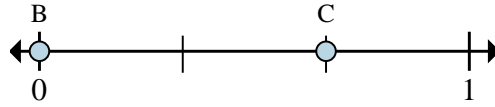
- On this numberline what is the value of 0 written as a fraction?
- On this numberline from B to C is how far (written as a fraction)?

6)



- This numberline is divided into how many pieces?
- What is the location of A (written as a fraction)?

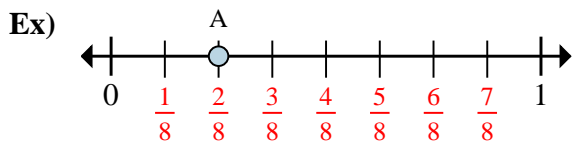
7)



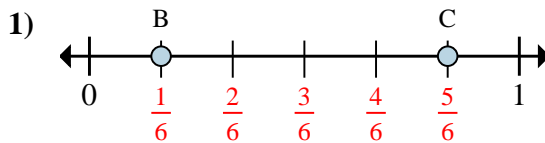
- On this numberline what is the value of 1 written as a fraction?
- On this numberline from B to C is how far (written as a fraction)?



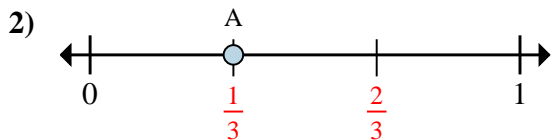
Solve each problem.



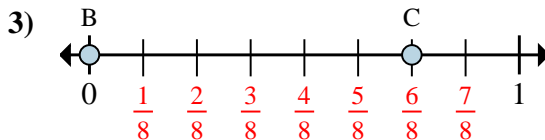
- This numberline is divided into how many pieces?
- What is the location of A (written as a fraction)?



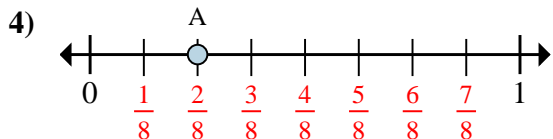
- On this numberline what is the value of 0 written as a fraction?
- On this numberline from B to C is how far (written as a fraction)?



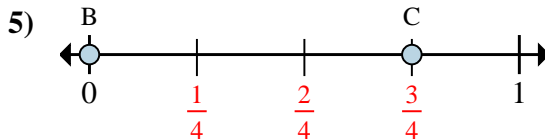
- This numberline is divided into how many pieces?
- What is the location of A (written as a fraction)?



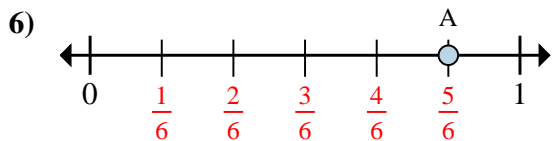
- On this numberline what is the value of 1 written as a fraction?
- On this numberline from B to C is how far (written as a fraction)?



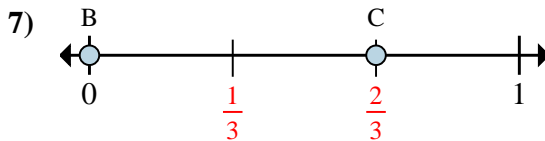
- This numberline is divided into how many pieces?
- What is the location of A (written as a fraction)?



- On this numberline what is the value of 0 written as a fraction?
- On this numberline from B to C is how far (written as a fraction)?



- This numberline is divided into how many pieces?
- What is the location of A (written as a fraction)?



- On this numberline what is the value of 1 written as a fraction?
- On this numberline from B to C is how far (written as a fraction)?

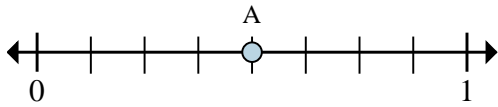
Answers

Ex.	<u>8</u>	<u>2/8</u>
1.	<u>0/6</u>	<u>4/6</u>
2.	<u>3</u>	<u>1/3</u>
3.	<u>8/8</u>	<u>6/8</u>
4.	<u>8</u>	<u>2/8</u>
5.	<u>0/4</u>	<u>3/4</u>
6.	<u>6</u>	<u>5/6</u>
7.	<u>3/3</u>	<u>2/3</u>



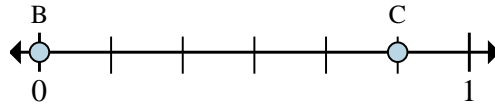
Solve each problem.

Ex)



- This numberline is divided into how many pieces?
- What is the location of A (written as a fraction)?

1)



- On this numberline what is the value of 0 written as a fraction?
- On this numberline from B to C is how far (written as a fraction)?

Answers

Ex. 8 4/8

1. _____

2. _____

3. _____

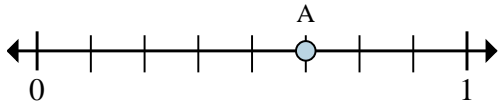
4. _____

5. _____

6. _____

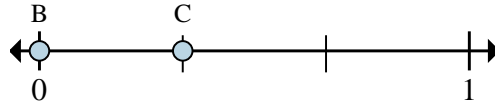
7. _____

2)



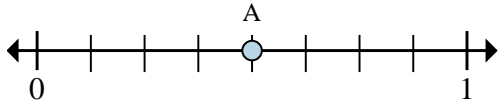
- This numberline is divided into how many pieces?
- What is the location of A (written as a fraction)?

3)



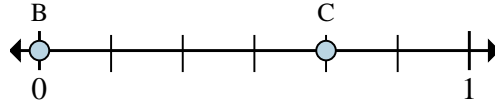
- On this numberline what is the value of 0 written as a fraction?
- On this numberline from B to C is how far (written as a fraction)?

4)



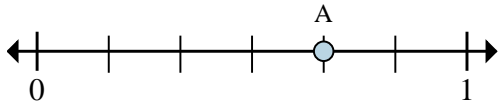
- This numberline is divided into how many pieces?
- What is the location of A (written as a fraction)?

5)



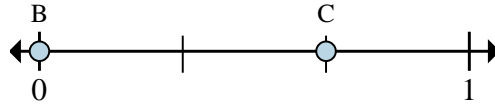
- On this numberline what is the value of 0 written as a fraction?
- On this numberline from B to C is how far (written as a fraction)?

6)



- This numberline is divided into how many pieces?
- What is the location of A (written as a fraction)?

7)

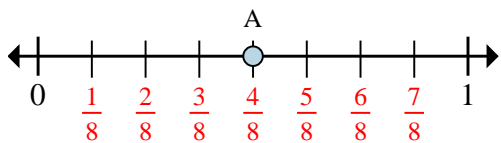


- On this numberline what is the value of 1 written as a fraction?
- On this numberline from B to C is how far (written as a fraction)?



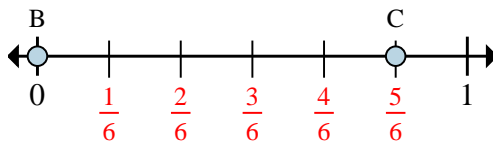
Solve each problem.

Ex)



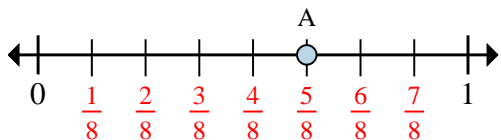
- This numberline is divided into how many pieces?
- What is the location of A (written as a fraction)?

1)



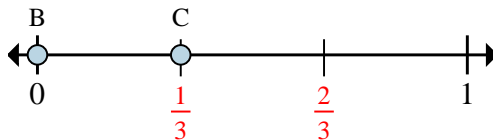
- On this numberline what is the value of 0 written as a fraction?
- On this numberline from B to C is how far (written as a fraction)?

2)



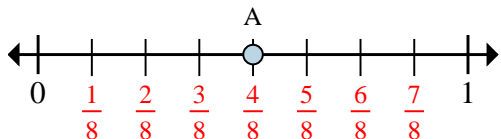
- This numberline is divided into how many pieces?
- What is the location of A (written as a fraction)?

3)



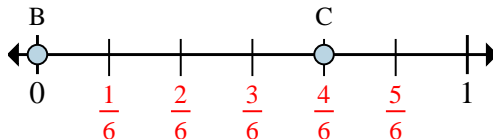
- On this numberline what is the value of 0 written as a fraction?
- On this numberline from B to C is how far (written as a fraction)?

4)



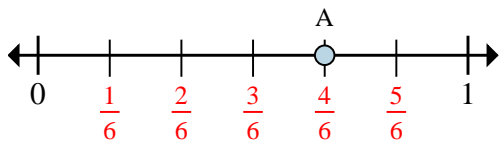
- This numberline is divided into how many pieces?
- What is the location of A (written as a fraction)?

5)



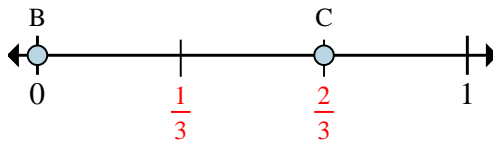
- On this numberline what is the value of 0 written as a fraction?
- On this numberline from B to C is how far (written as a fraction)?

6)



- This numberline is divided into how many pieces?
- What is the location of A (written as a fraction)?

7)



- On this numberline what is the value of 1 written as a fraction?
- On this numberline from B to C is how far (written as a fraction)?

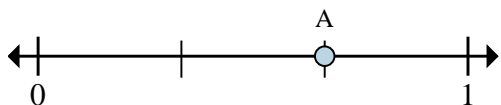
Answers

Ex.	8	$\frac{4}{8}$
1.	$\frac{0}{6}$	$\frac{5}{6}$
2.	8	$\frac{5}{8}$
3.	$\frac{0}{3}$	$\frac{1}{3}$
4.	8	$\frac{4}{8}$
5.	$\frac{0}{6}$	$\frac{4}{6}$
6.	6	$\frac{4}{6}$
7.	$\frac{3}{3}$	$\frac{2}{3}$



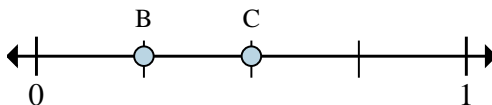
Solve each problem.

Ex)



- This numberline is divided into how many pieces?
- What is the location of A (written as a fraction)?

1)



- On this numberline what is the value of 1 written as a fraction?
- On this numberline from B to C is how far (written as a fraction)?

Answers

Ex. 3 2/3

1. _____

2. _____

3. _____

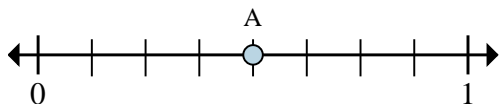
4. _____

5. _____

6. _____

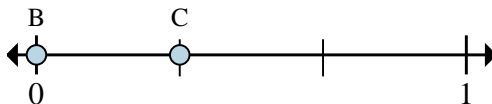
7. _____

2)



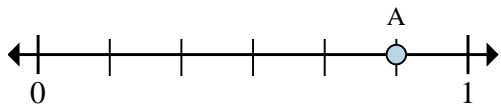
- This numberline is divided into how many pieces?
- What is the location of A (written as a fraction)?

3)



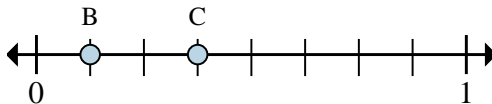
- On this numberline what is the value of 1 written as a fraction?
- On this numberline from B to C is how far (written as a fraction)?

4)



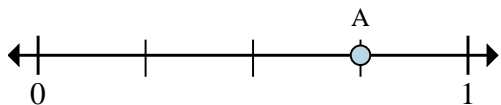
- This numberline is divided into how many pieces?
- What is the location of A (written as a fraction)?

5)



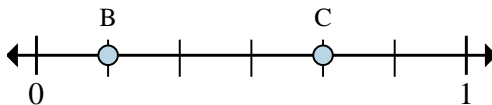
- On this numberline what is the value of 1 written as a fraction?
- On this numberline from B to C is how far (written as a fraction)?

6)



- This numberline is divided into how many pieces?
- What is the location of A (written as a fraction)?

7)

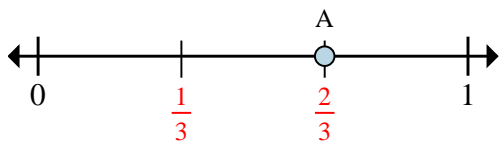


- On this numberline what is the value of 1 written as a fraction?
- On this numberline from B to C is how far (written as a fraction)?



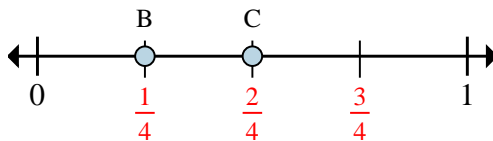
Solve each problem.

Ex)



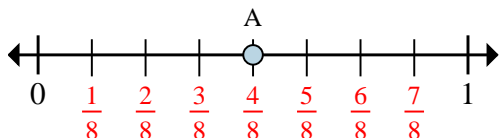
- This numberline is divided into how many pieces?
- What is the location of A (written as a fraction)?

1)



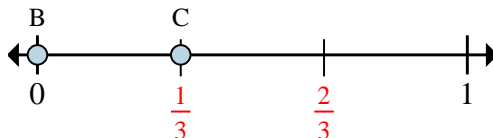
- On this numberline what is the value of 1 written as a fraction?
- On this numberline from B to C is how far (written as a fraction)?

2)



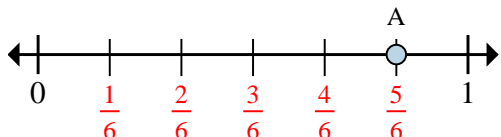
- This numberline is divided into how many pieces?
- What is the location of A (written as a fraction)?

3)



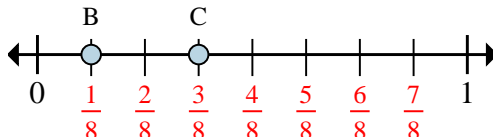
- On this numberline what is the value of 1 written as a fraction?
- On this numberline from B to C is how far (written as a fraction)?

4)



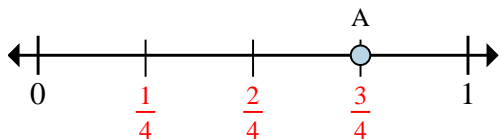
- This numberline is divided into how many pieces?
- What is the location of A (written as a fraction)?

5)



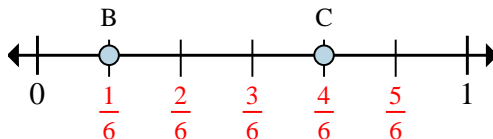
- On this numberline what is the value of 1 written as a fraction?
- On this numberline from B to C is how far (written as a fraction)?

6)



- This numberline is divided into how many pieces?
- What is the location of A (written as a fraction)?

7)



- On this numberline what is the value of 1 written as a fraction?
- On this numberline from B to C is how far (written as a fraction)?

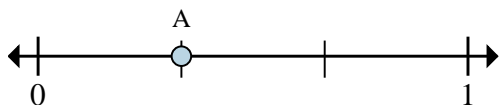
Answers

Ex.	<u>3</u>	<u>2/3</u>
1.	<u>4/4</u>	<u>1/4</u>
2.	<u>8</u>	<u>4/8</u>
3.	<u>3/3</u>	<u>1/3</u>
4.	<u>6</u>	<u>5/6</u>
5.	<u>8/8</u>	<u>2/8</u>
6.	<u>4</u>	<u>3/4</u>
7.	<u>6/6</u>	<u>3/6</u>



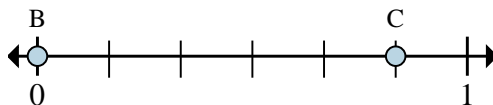
Solve each problem.

Ex)



- a. This numberline is divided into how many pieces?
- b. What is the location of A (written as a fraction)?

1)



- a. On this numberline what is the value of 1 written as a fraction?
- b. On this numberline from B to C is how far (written as a fraction)?

Answers

Ex. 3 1/3

1. _____

2. _____

3. _____

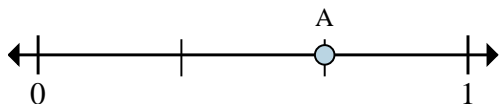
4. _____

5. _____

6. _____

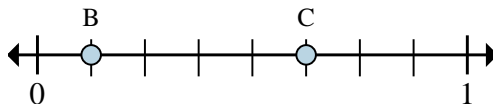
7. _____

2)



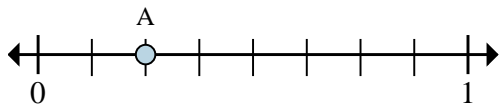
- a. This numberline is divided into how many pieces?
- b. What is the location of A (written as a fraction)?

3)



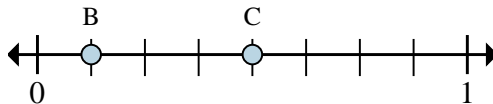
- a. On this numberline what is the value of 0 written as a fraction?
- b. On this numberline from B to C is how far (written as a fraction)?

4)



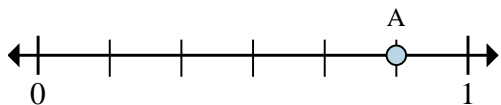
- a. This numberline is divided into how many pieces?
- b. What is the location of A (written as a fraction)?

5)



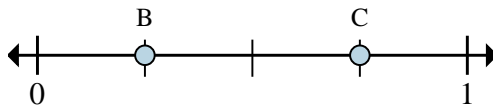
- a. On this numberline what is the value of 1 written as a fraction?
- b. On this numberline from B to C is how far (written as a fraction)?

6)



- a. This numberline is divided into how many pieces?
- b. What is the location of A (written as a fraction)?

7)

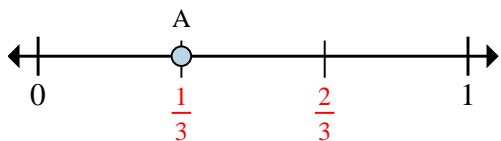


- a. On this numberline what is the value of 1 written as a fraction?
- b. On this numberline from B to C is how far (written as a fraction)?



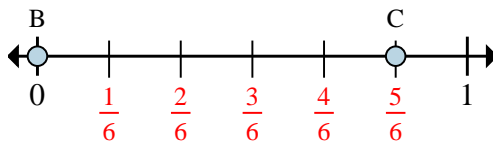
Solve each problem.

Ex)



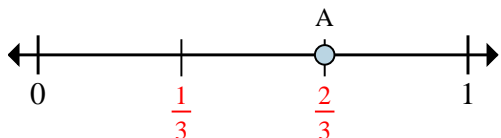
- This numberline is divided into how many pieces?
- What is the location of A (written as a fraction)?

1)



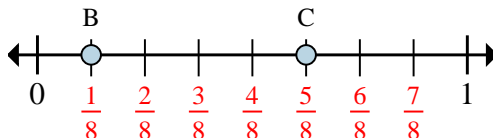
- On this numberline what is the value of 1 written as a fraction?
- On this numberline from B to C is how far (written as a fraction)?

2)



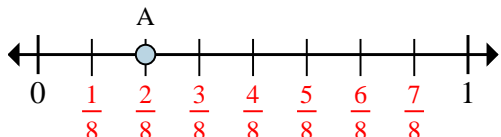
- This numberline is divided into how many pieces?
- What is the location of A (written as a fraction)?

3)



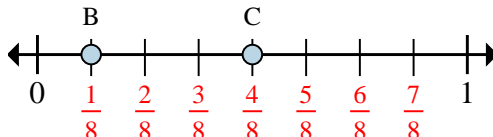
- On this numberline what is the value of 0 written as a fraction?
- On this numberline from B to C is how far (written as a fraction)?

4)



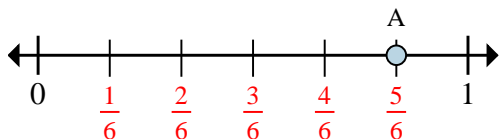
- This numberline is divided into how many pieces?
- What is the location of A (written as a fraction)?

5)



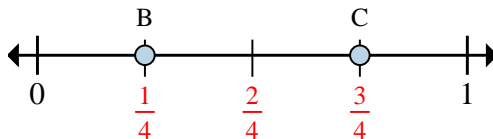
- On this numberline what is the value of 1 written as a fraction?
- On this numberline from B to C is how far (written as a fraction)?

6)



- This numberline is divided into how many pieces?
- What is the location of A (written as a fraction)?

7)



- On this numberline what is the value of 1 written as a fraction?
- On this numberline from B to C is how far (written as a fraction)?

Answers

Ex.	<u>3</u>	<u>1/3</u>
1.	<u>6/6</u>	<u>5/6</u>
2.	<u>3</u>	<u>2/3</u>
3.	<u>0/8</u>	<u>4/8</u>
4.	<u>8</u>	<u>2/8</u>
5.	<u>8/8</u>	<u>3/8</u>
6.	<u>6</u>	<u>5/6</u>
7.	<u>4/4</u>	<u>2/4</u>