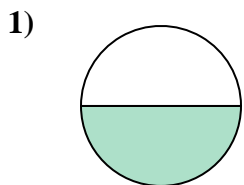





Determine which letter best describes the shaded portion.

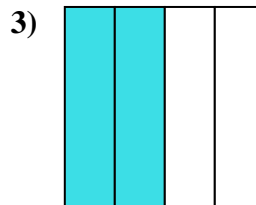
Answers



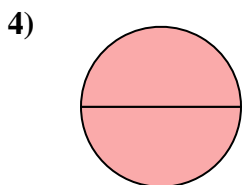
- A. one-half
- B. two-halves
- C. four-quarters



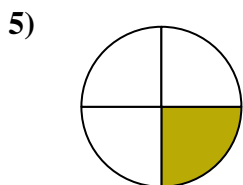
- A. two-halves
- B. one-half
- C. one-fourth



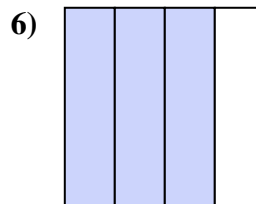
- A. three-quarters
- B. one-quarter
- C. two-quarters



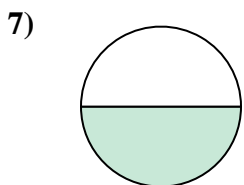
- A. two-halves
- B. three-fourths
- C. one-quarter



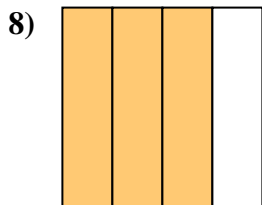
- A. four-fourths
- B. one-fourth
- C. two-quarters



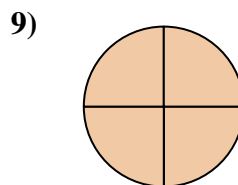
- A. three-fourths
- B. four-fourths
- C. one-half



- A. two-quarters
- B. two-halves
- C. one-half



- A. three-fourths
- B. one-quarter
- C. two-halves



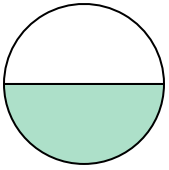
- A. two-halves
- B. three-fourths
- C. four-fourths

- 1. _____
- 2. _____
- 3. _____
- 4. _____
- 5. _____
- 6. _____
- 7. _____
- 8. _____
- 9. _____




Determine which letter best describes the shaded portion.

1)



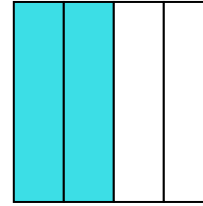
- A. one-half
- B. two-halves
- C. four-quarters

2)



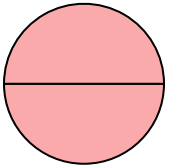
- A. two-halves
- B. one-half
- C. one-fourth

3)



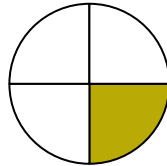
- A. three-quarters
- B. one-quarter
- C. two-quarters

4)



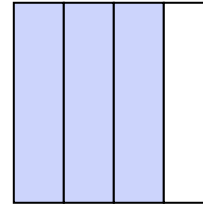
- A. two-halves
- B. three-fourths
- C. one-quarter

5)



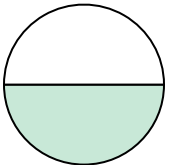
- A. four-fourths
- B. one-fourth
- C. two-quarters

6)



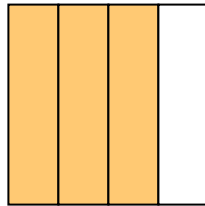
- A. three-fourths
- B. four-fourths
- C. one-half

7)



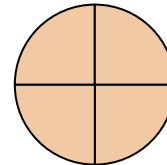
- A. two-quarters
- B. two-halves
- C. one-half

8)



- A. three-fourths
- B. one-quarter
- C. two-halves

9)



- A. two-halves
- B. three-fourths
- C. four-fourths

Answers

1. **A**

2. **A**

3. **C**

4. **A**

5. **B**

6. **A**

7. **C**

8. **A**

9. **C**