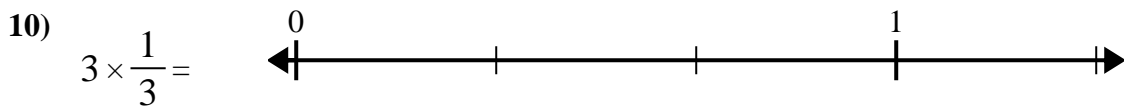
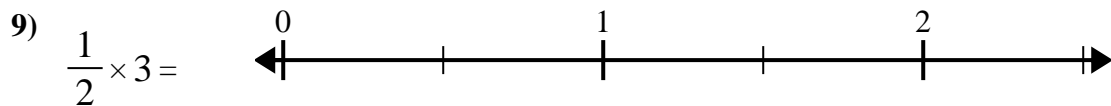
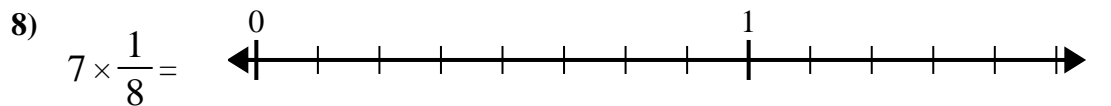
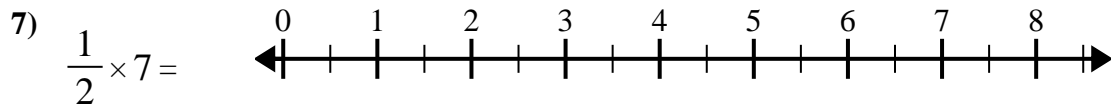
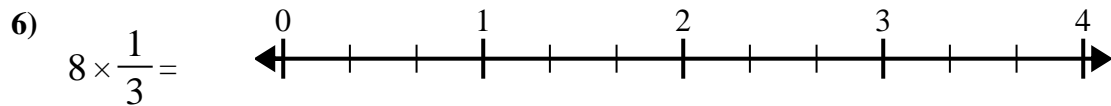
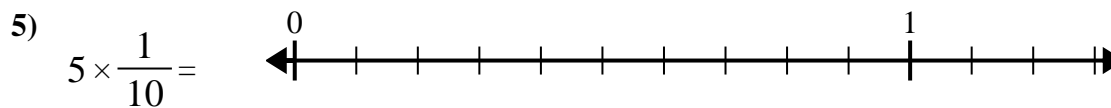
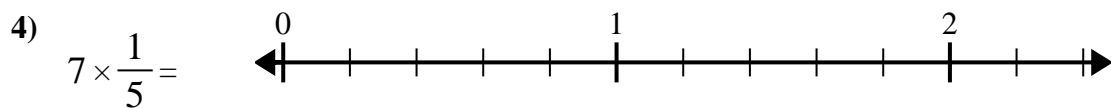
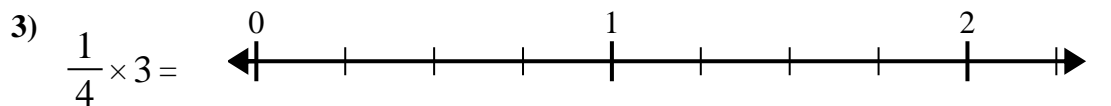
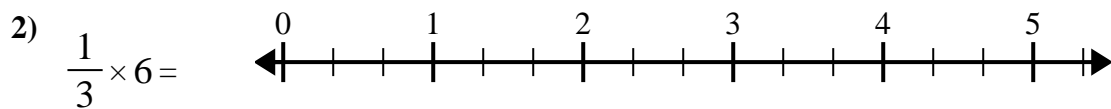
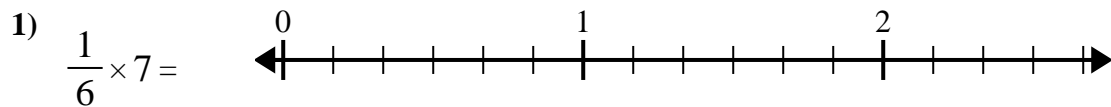




Use the numberline to solve.



Answers

1. _____

2. _____

3. _____

4. _____

5. _____

6. _____

7. _____

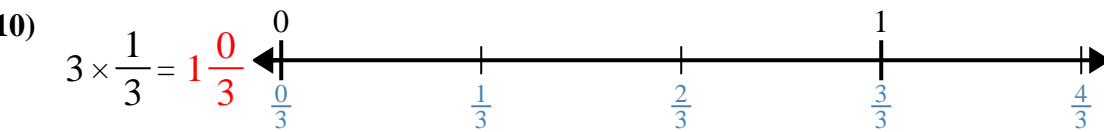
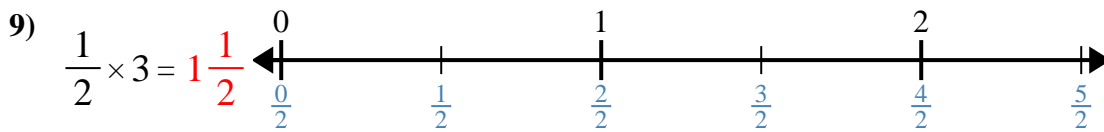
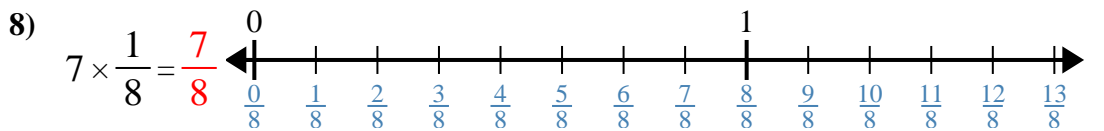
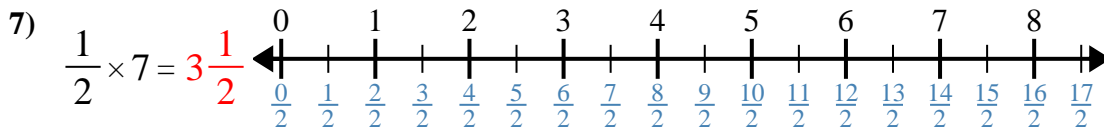
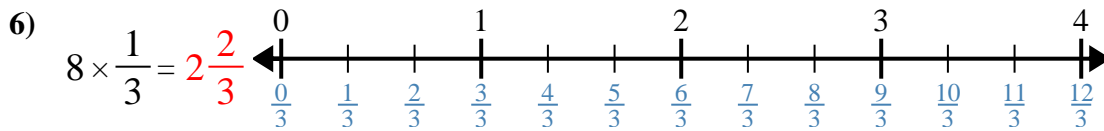
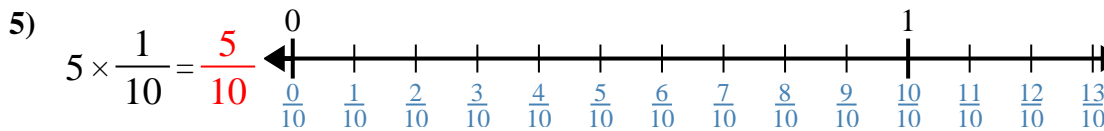
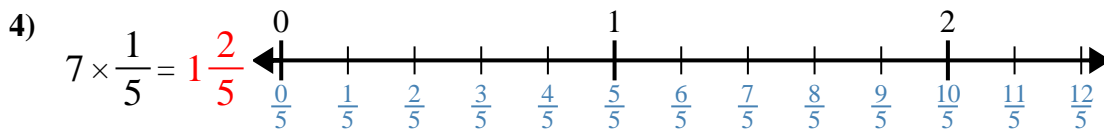
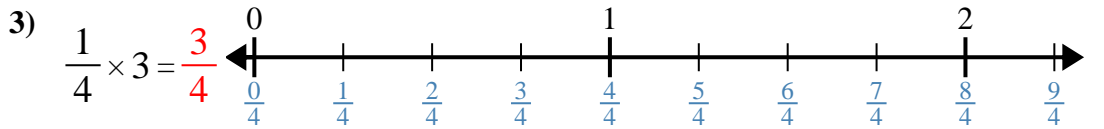
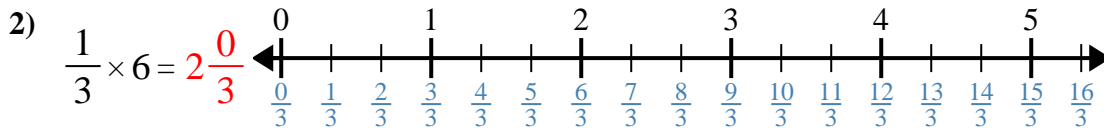
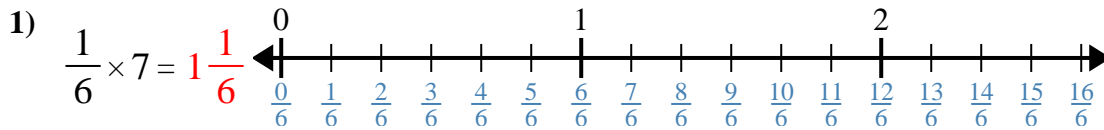
8. _____

9. _____

10. _____



Use the numberline to solve.



Answers

1. $1\frac{1}{6}$
2. $2\frac{0}{3}$
3. $\frac{3}{4}$
4. $1\frac{2}{5}$
5. $\frac{5}{10}$
6. $2\frac{2}{3}$
7. $3\frac{1}{2}$
8. $\frac{7}{8}$
9. $1\frac{1}{2}$
10. $1\frac{0}{3}$

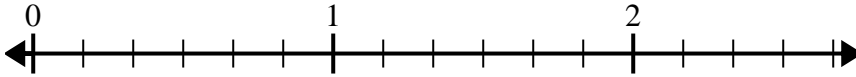


Use the numberline to solve.

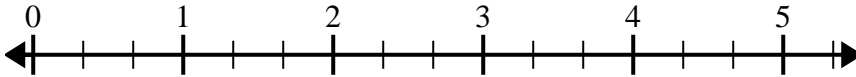
$\frac{5}{10}$	$1\frac{1}{6}$	$1\frac{2}{5}$	$2\frac{0}{3}$
$1\frac{0}{3}$	$1\frac{1}{2}$	$3\frac{1}{2}$	$\frac{3}{4}$
$\frac{7}{8}$	$2\frac{2}{3}$		

Answers

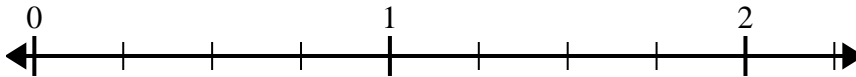
1) $\frac{1}{6} \times 7 =$



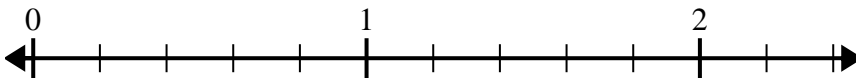
2) $\frac{1}{3} \times 6 =$



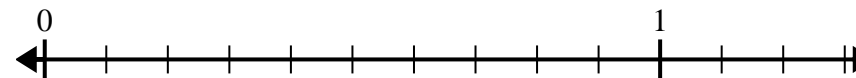
3) $\frac{1}{4} \times 3 =$



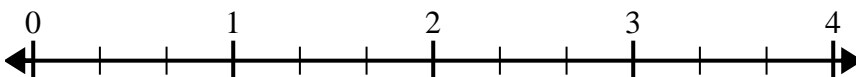
4) $7 \times \frac{1}{5} =$



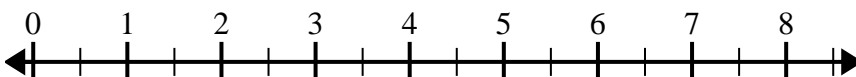
5) $5 \times \frac{1}{10} =$




6) $8 \times \frac{1}{3} =$



7) $\frac{1}{2} \times 7 =$



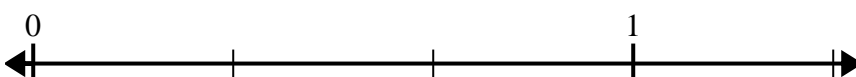
8) $7 \times \frac{1}{8} =$



9) $\frac{1}{2} \times 3 =$



10) $3 \times \frac{1}{3} =$



1. _____
2. _____
3. _____
4. _____
5. _____
6. _____
7. _____
8. _____
9. _____
10. _____