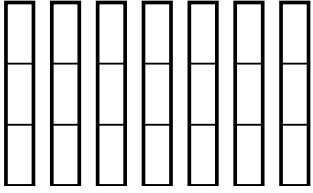


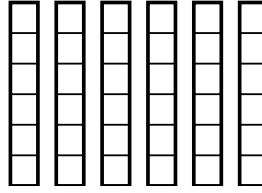


Use the visual models to solve.

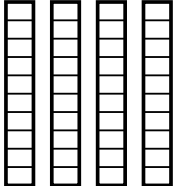
1)  $\frac{1}{3} \times 7 =$



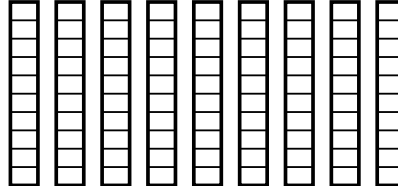
2)  $\frac{5}{6} \times 6 =$



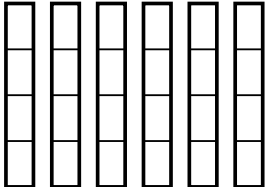
3)  $\frac{9}{10} \times 4 =$



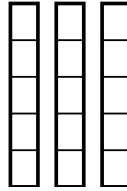
4)  $\frac{7}{10} \times 9 =$



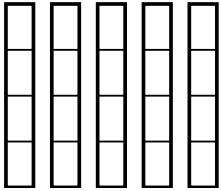
5)  $\frac{2}{4} \times 6 =$



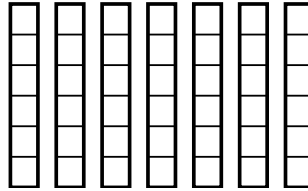
6)  $\frac{3}{5} \times 3 =$



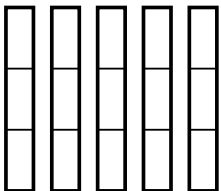
7)  $\frac{2}{4} \times 5 =$



8)  $\frac{3}{6} \times 7 =$



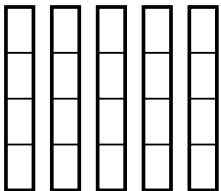
9)  $\frac{1}{3} \times 5 =$



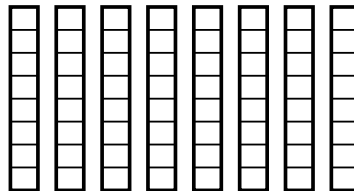
10)  $\frac{1}{4} \times 2 =$



11)  $\frac{3}{4} \times 5 =$



12)  $\frac{1}{8} \times 8 =$



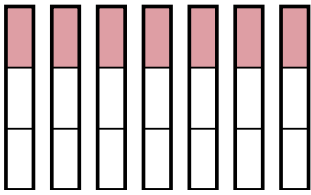
**Answers**

1. \_\_\_\_\_
2. \_\_\_\_\_
3. \_\_\_\_\_
4. \_\_\_\_\_
5. \_\_\_\_\_
6. \_\_\_\_\_
7. \_\_\_\_\_
8. \_\_\_\_\_
9. \_\_\_\_\_
10. \_\_\_\_\_
11. \_\_\_\_\_
12. \_\_\_\_\_

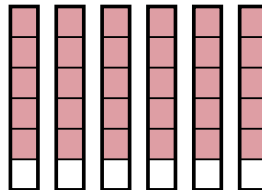


Use the visual models to solve.

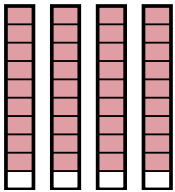
1)  $\frac{1}{3} \times 7 =$



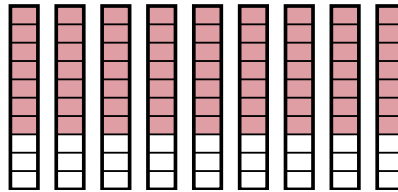
2)  $\frac{5}{6} \times 6 =$



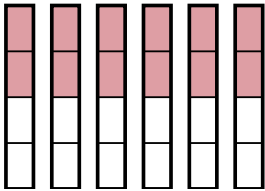
3)  $\frac{9}{10} \times 4 =$



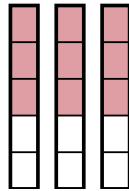
4)  $\frac{7}{10} \times 9 =$



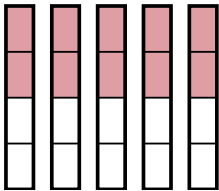
5)  $\frac{2}{4} \times 6 =$



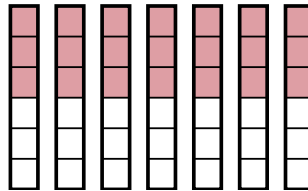
6)  $\frac{3}{5} \times 3 =$



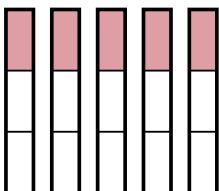
7)  $\frac{2}{4} \times 5 =$



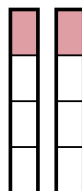
8)  $\frac{3}{6} \times 7 =$



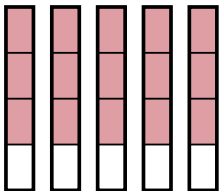
9)  $\frac{1}{3} \times 5 =$



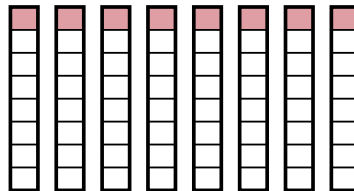
10)  $\frac{1}{4} \times 2 =$



11)  $\frac{3}{4} \times 5 =$



12)  $\frac{1}{8} \times 8 =$



**Answers**

1.  $\frac{7}{3}$

2.  $\frac{30}{6}$

3.  $\frac{36}{10}$

4.  $\frac{63}{10}$

5.  $\frac{12}{4}$

6.  $\frac{9}{5}$

7.  $\frac{10}{4}$

8.  $\frac{21}{6}$

9.  $\frac{5}{3}$

10.  $\frac{2}{4}$

11.  $\frac{15}{4}$

12.  $\frac{8}{8}$