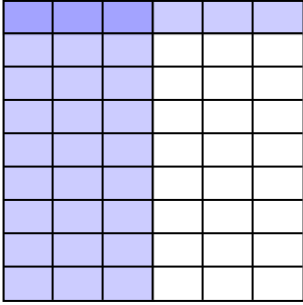




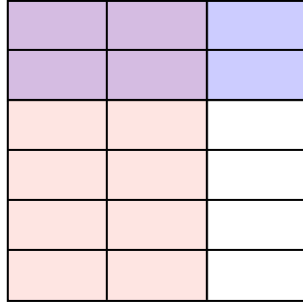


Use the box provided to show a visual example of how to multiply two fractions.

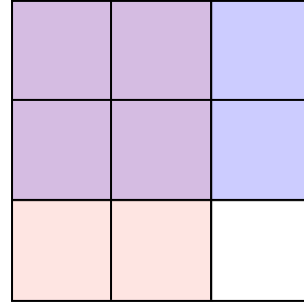
Ex)  $\frac{3}{6} \times \frac{1}{9} =$



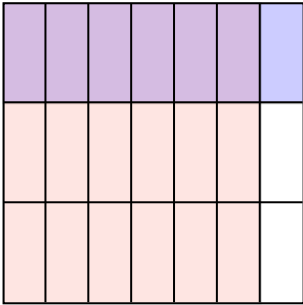
1)  $\frac{2}{3} \times \frac{2}{6} =$



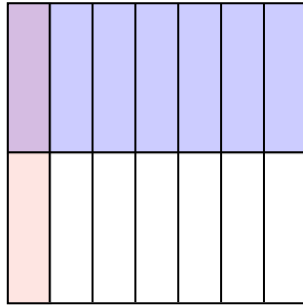
2)  $\frac{2}{3} \times \frac{2}{3} =$



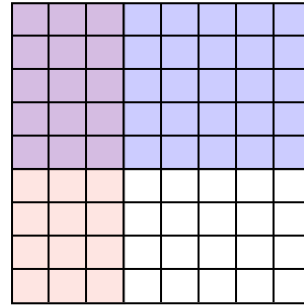
3)  $\frac{6}{7} \times \frac{1}{3} =$



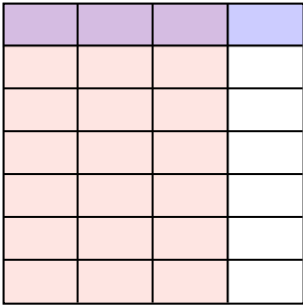
4)  $\frac{1}{7} \times \frac{1}{2} =$



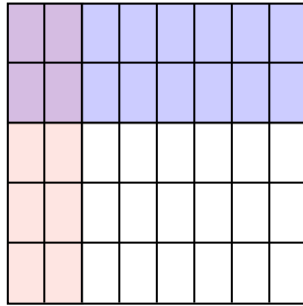
5)  $\frac{3}{8} \times \frac{5}{9} =$



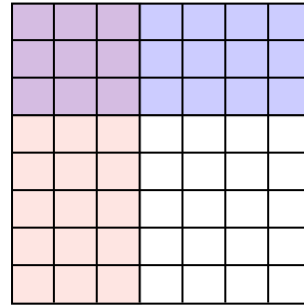
6)  $\frac{3}{4} \times \frac{1}{7} =$



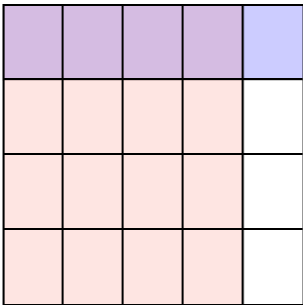
7)  $\frac{2}{8} \times \frac{2}{5} =$



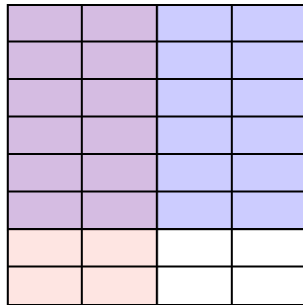
8)  $\frac{3}{7} \times \frac{3}{8} =$



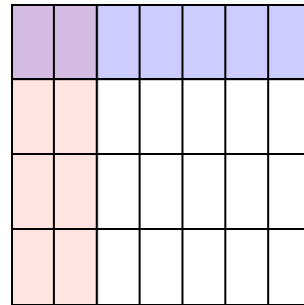
9)  $\frac{4}{5} \times \frac{1}{4} =$



10)  $\frac{2}{4} \times \frac{6}{8} =$



11)  $\frac{2}{7} \times \frac{1}{4} =$



**Answers**

Ex.  $\frac{3}{54}$

1.  $\frac{4}{18}$

2.  $\frac{4}{9}$

3.  $\frac{6}{21}$

4.  $\frac{1}{14}$

5.  $\frac{15}{72}$

6.  $\frac{3}{28}$

7.  $\frac{4}{40}$

8.  $\frac{9}{56}$

9.  $\frac{4}{20}$

10.  $\frac{12}{32}$

11.  $\frac{2}{28}$