



Use the visual model to solve each problem.

$$\frac{2}{4} \times 3 =$$

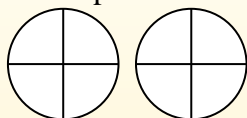
To solve multiplication problems with fractions one strategy is to think of them as addition problems.

For example the problem above is the same as:

$$\frac{2}{4} + \frac{2}{4} + \frac{2}{4}$$

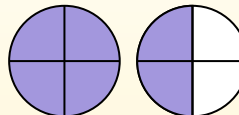
$$\frac{2}{4} \times 3 =$$

If we shade in $\frac{2}{4}$ on the fractions below 3 times we can see a visual representation of the problem.



$$\frac{2}{4} \times 3 = 1 \frac{2}{4}$$

After shading it in we can see why $\frac{2}{4}$ three times is equal to 1 whole and $\frac{2}{4}$.



Answers

1. _____
2. _____
3. _____
4. _____
5. _____
6. _____
7. _____
8. _____
9. _____
10. _____
11. _____
12. _____

1) $\frac{3}{4} \times 4 =$

2) $\frac{1}{5} \times 3 =$

3) $\frac{2}{8} \times 6 =$

4) $\frac{2}{3} \times 4 =$

5) $\frac{1}{3} \times 6 =$

6) $\frac{1}{5} \times 2 =$

7) $\frac{1}{3} \times 4 =$

8) $\frac{1}{3} \times 3 =$

9) $\frac{4}{8} \times 6 =$

10) $\frac{4}{10} \times 6 =$

11) $\frac{2}{10} \times 6 =$

12) $\frac{2}{4} \times 3 =$



Use the visual model to solve each problem.

$$\frac{2}{4} \times 3 =$$

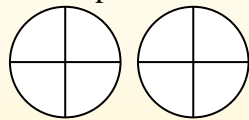
To solve multiplication problems with fractions one strategy is to think of them as addition problems.

For example the problem above is the same as:

$$\frac{2}{4} + \frac{2}{4} + \frac{2}{4}$$

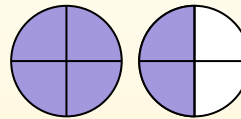
$$\frac{2}{4} \times 3 =$$

If we shade in $\frac{2}{4}$ on the fractions below 3 times we can see a visual representation of the problem.

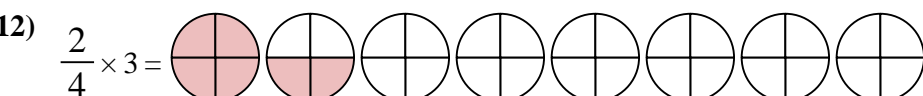
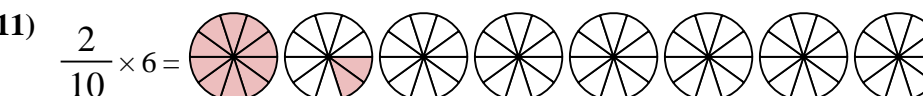
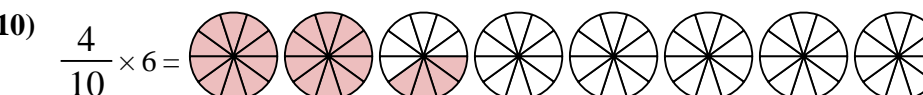
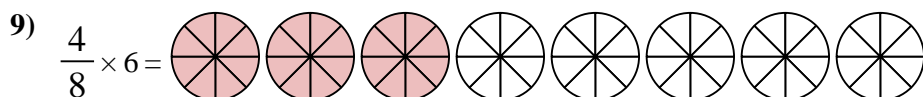
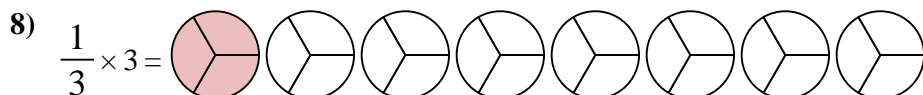
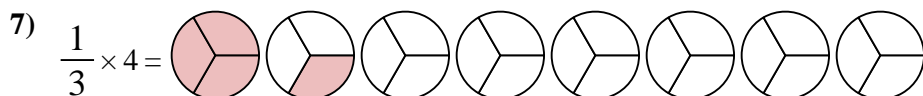
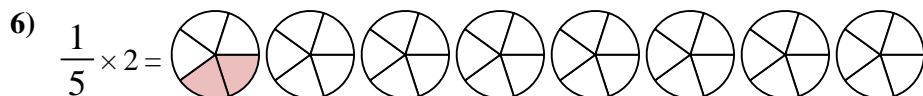
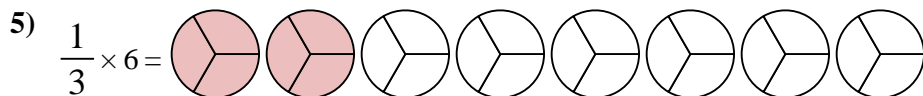
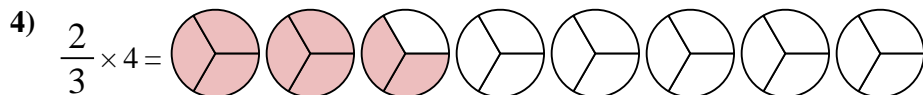
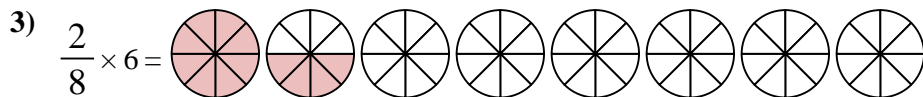
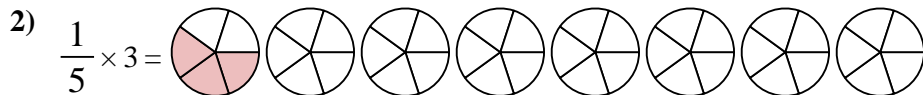
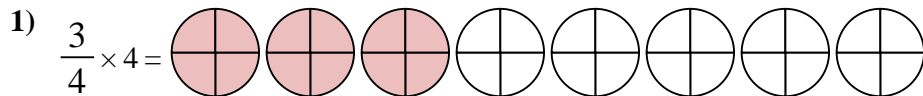


$$\frac{2}{4} \times 3 = 1 \frac{2}{4}$$

After shading it in we can see why $\frac{2}{4}$ three times is equal to 1 whole and $\frac{2}{4}$.



Answers



1. $3 \frac{0}{4}$

2. $\frac{3}{5}$

3. $1 \frac{4}{8}$

4. $2 \frac{2}{3}$

5. $2 \frac{0}{3}$

6. $\frac{2}{5}$

7. $1 \frac{1}{3}$

8. $1 \frac{0}{3}$

9. $3 \frac{0}{8}$

10. $2 \frac{4}{10}$

11. $1 \frac{2}{10}$

12. $1 \frac{2}{4}$