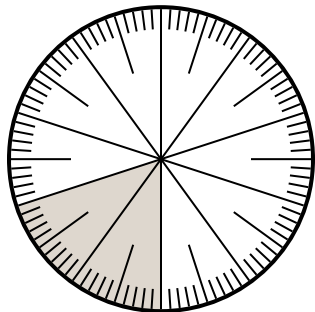




Solve each problem.

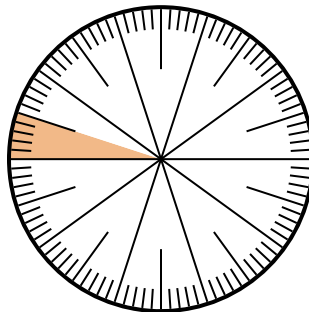
**Answers**

- 1) Which choice represents the shaded portion of the number wheel?



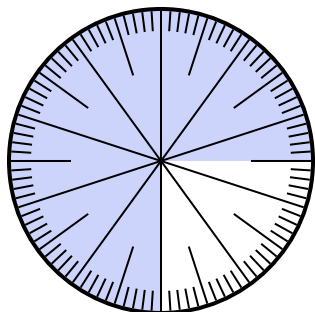
- A.  $\frac{80}{20}$       B. 0.20  
C.  $\frac{20}{10}$       D.  $\frac{0.2}{100}$

- 2) Which choice represents the shaded portion of the number wheel?



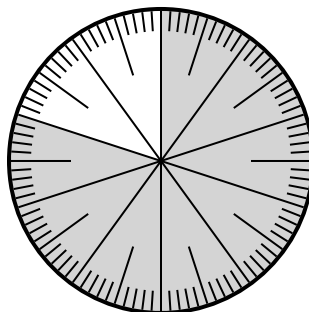
- A.  $\frac{0.05}{100}$       B. 0.05  
C.  $\frac{5}{95}$       D.  $\frac{9.5}{100}$

- 3) Which choice represents the un-shaded portion of the number wheel?



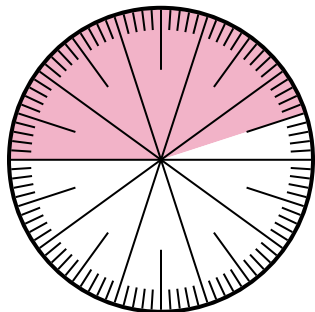
- A. 2.50      B.  $\frac{25}{100}$   
C. 25      D. 2.5

- 4) Which choice represents the shaded portion of the number wheel?



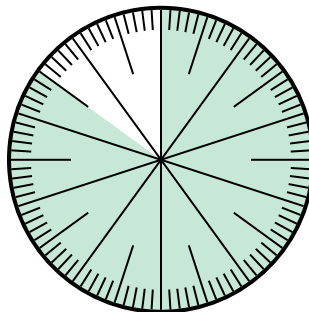
- A.  $\frac{80}{20}$       B.  $\frac{8.00}{100}$   
C.  $\frac{80}{100}$       D. 8.00

- 5) Which choice represents the shaded portion of the number wheel?



- A. 55.0      B. 45  
C. 4.5      D. 0.45

- 6) Which choice represents the un-shaded portion of the number wheel?



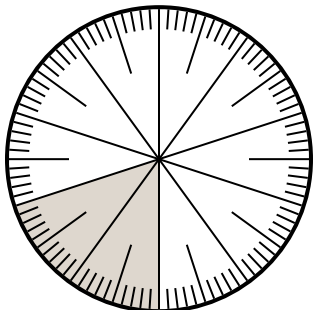
- A.  $\frac{1.5}{100}$       B.  $\frac{15}{100}$   
C. 1.50      D. 1.5

1. \_\_\_\_\_  
2. \_\_\_\_\_  
3. \_\_\_\_\_  
4. \_\_\_\_\_  
5. \_\_\_\_\_  
6. \_\_\_\_\_



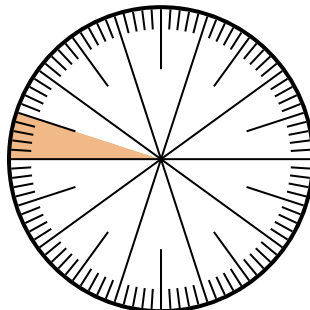
Solve each problem.

1) Which choice represents the shaded portion of the number wheel?



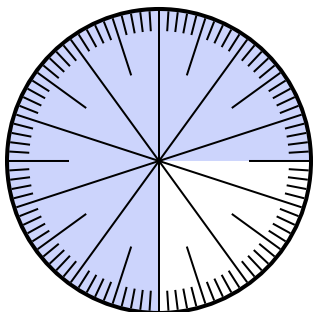
- A.  $\frac{80}{20}$
- B. 0.20
- C.  $\frac{20}{10}$
- D.  $\frac{0.2}{100}$

2) Which choice represents the shaded portion of the number wheel?



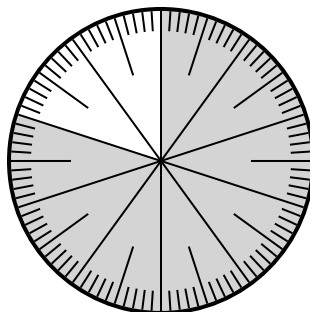
- A.  $\frac{0.05}{100}$
- B. 0.05
- C.  $\frac{5}{95}$
- D.  $\frac{9.5}{100}$

3) Which choice represents the un-shaded portion of the number wheel?



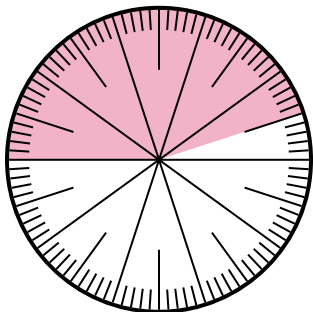
- A. 2.50
- B.  $\frac{25}{100}$
- C. 25
- D. 2.5

4) Which choice represents the shaded portion of the number wheel?



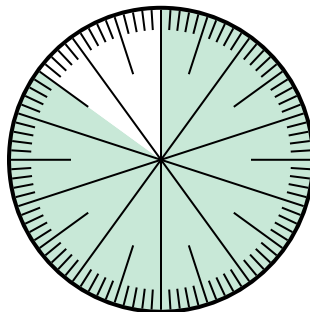
- A.  $\frac{80}{20}$
- B.  $\frac{8.00}{100}$
- C.  $\frac{80}{100}$
- D. 8.00

5) Which choice represents the shaded portion of the number wheel?



- A. 55.0
- B. 45
- C. 4.5
- D. 0.45

6) Which choice represents the un-shaded portion of the number wheel?



- A.  $\frac{1.5}{100}$
- B.  $\frac{15}{100}$
- C. 1.50
- D. 1.5

**Answers**

1. **B**

2. **B**

3. **B**

4. **C**

5. **D**

6. **B**