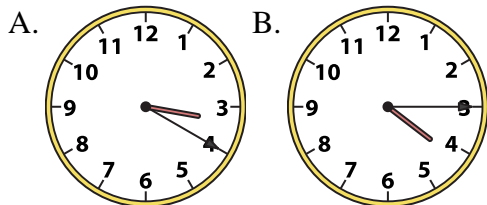




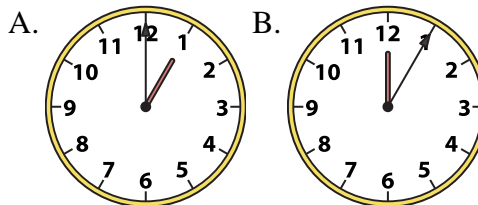
Determine which clock accurately shows the time.

**Answers**

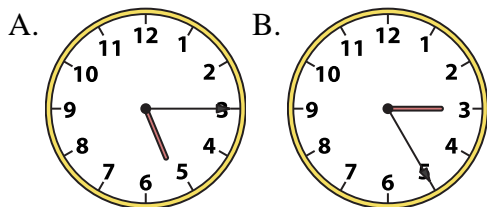
1) 4:15



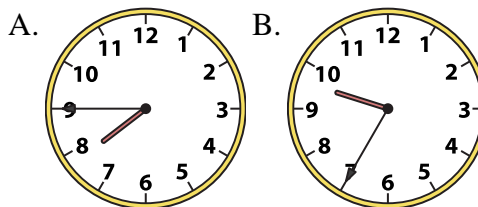
2) 1:00



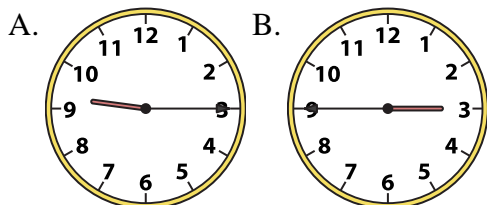
3) 5:15



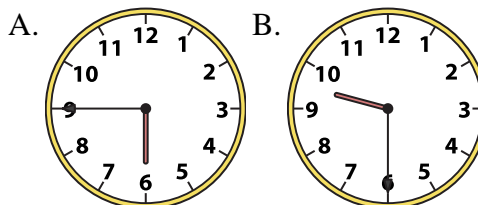
4) 7:45



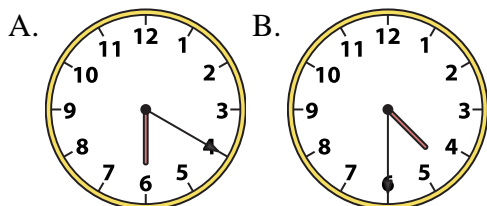
5) 9:15



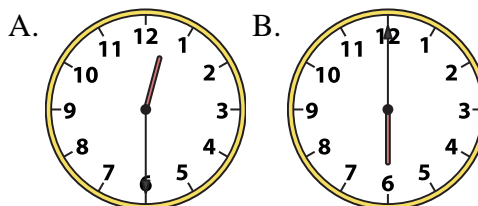
6) 9:30



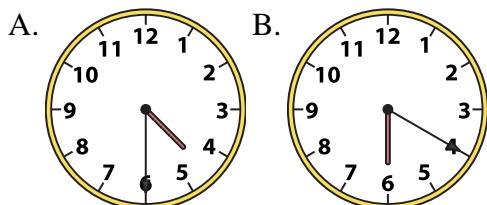
7) 4:30



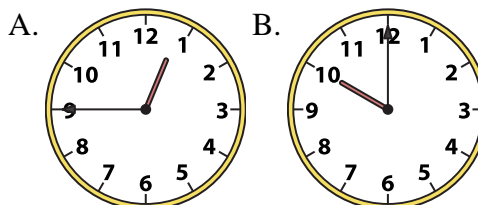
8) 12:30



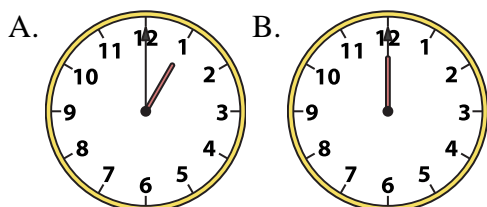
9) 4:30



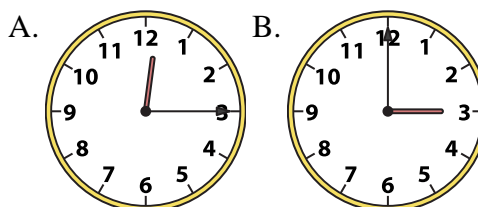
10) 12:45



11) 12:00



12) 12:15



1. \_\_\_\_\_
2. \_\_\_\_\_
3. \_\_\_\_\_
4. \_\_\_\_\_
5. \_\_\_\_\_
6. \_\_\_\_\_
7. \_\_\_\_\_
8. \_\_\_\_\_
9. \_\_\_\_\_
10. \_\_\_\_\_
11. \_\_\_\_\_
12. \_\_\_\_\_

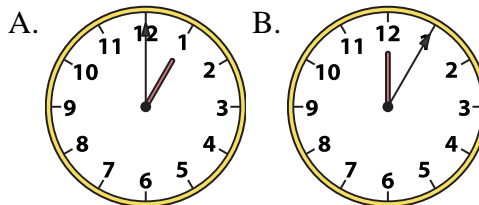
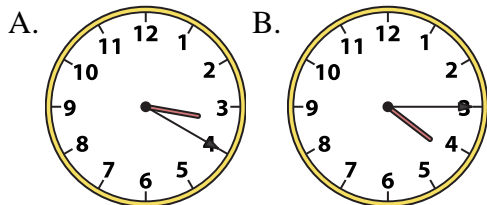


Determine which clock accurately shows the time.

**Answers**

1) 4:15

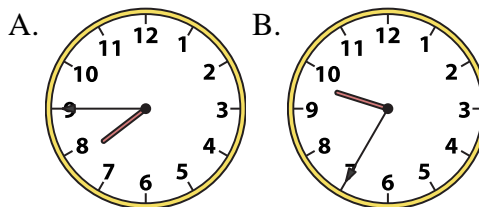
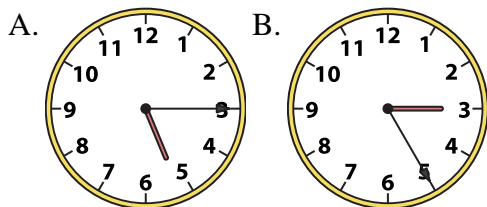
2) 1:00



1. **B**

3) 5:15

4) 7:45



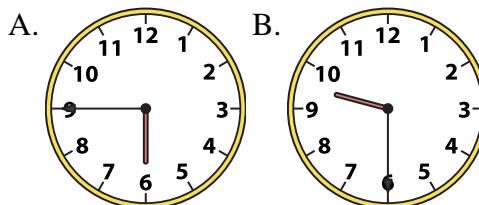
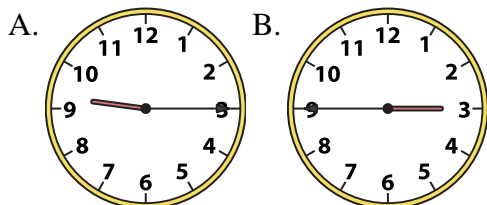
2. **A**

3. **A**

4. **A**

5) 9:15

6) 9:30



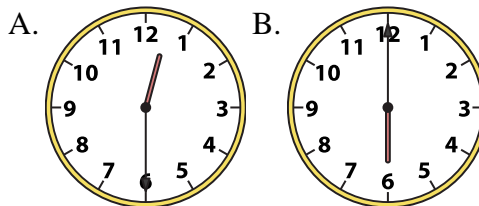
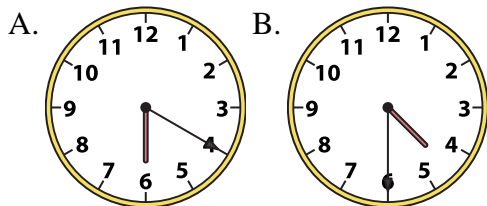
5. **A**

6. **B**

7. **B**

7) 4:30

8) 12:30



8. **A**

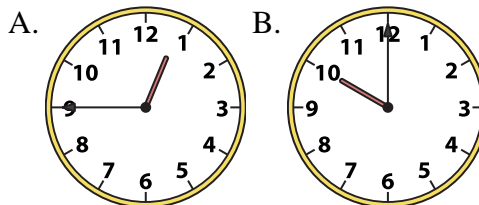
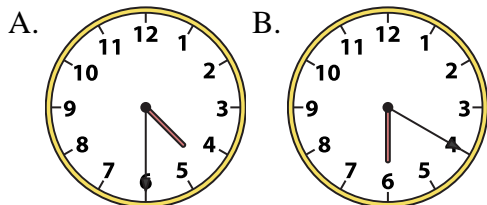
9. **A**

10. **A**

11. **B**

9) 4:30

10) 12:45



12. **A**

11) 12:00

12) 12:15

