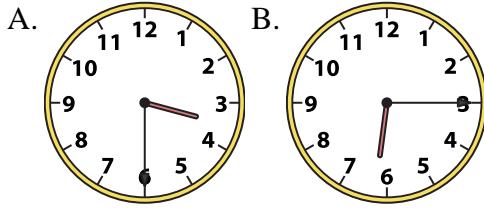




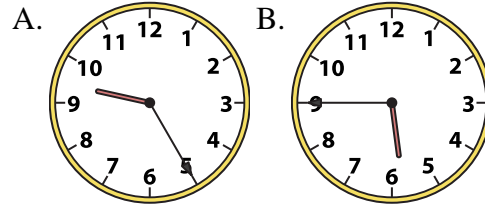
Determine which clock accurately shows the time.

**Answers**

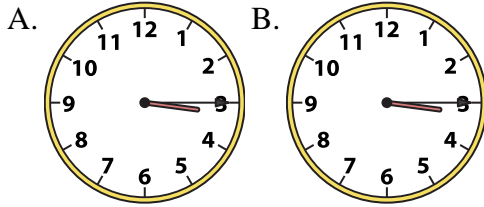
1) 3:30



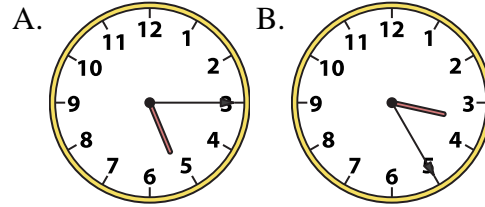
2) 5:45



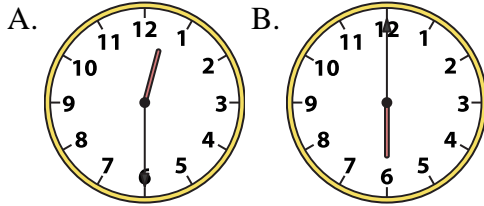
3) 3:15



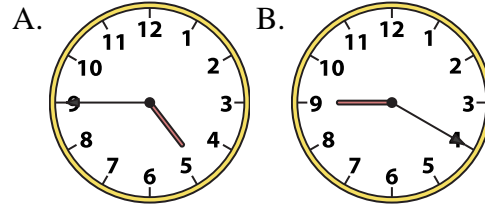
4) 5:15



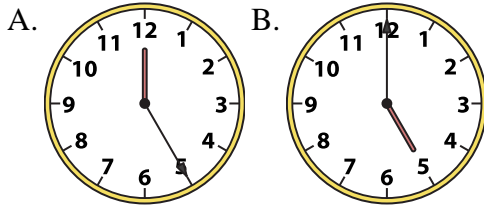
5) 12:30



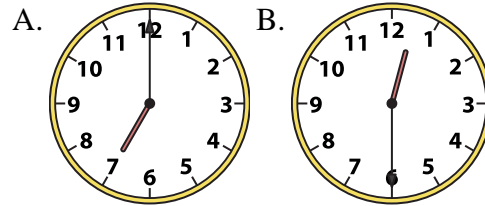
6) 4:45



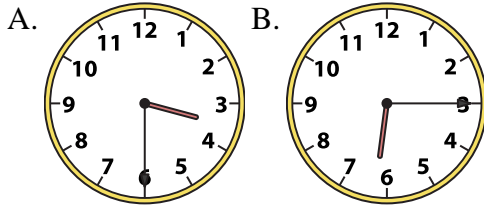
7) 5:00



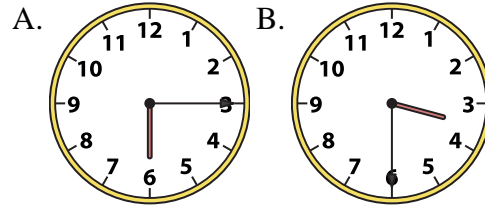
8) 12:30



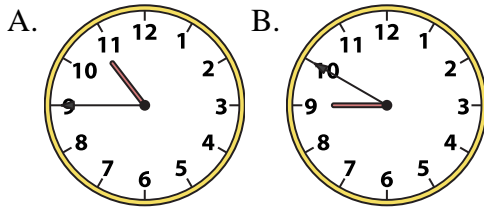
9) 6:15



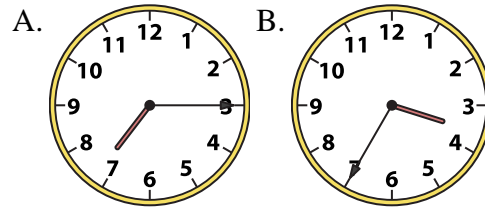
10) 3:30



11) 10:45



12) 7:15



1. \_\_\_\_\_
2. \_\_\_\_\_
3. \_\_\_\_\_
4. \_\_\_\_\_
5. \_\_\_\_\_
6. \_\_\_\_\_
7. \_\_\_\_\_
8. \_\_\_\_\_
9. \_\_\_\_\_
10. \_\_\_\_\_
11. \_\_\_\_\_
12. \_\_\_\_\_

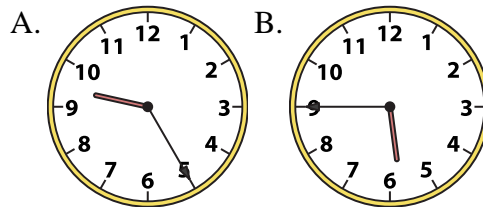
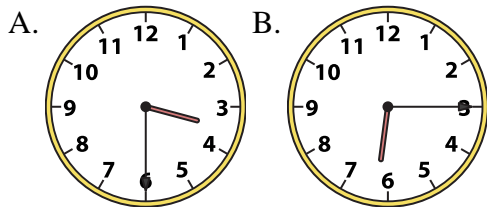


Determine which clock accurately shows the time.

**Answers**

1) 3:30

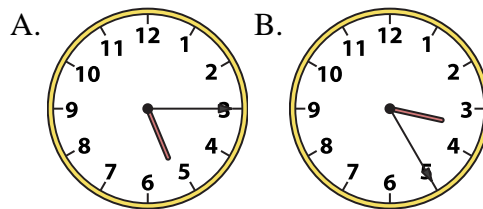
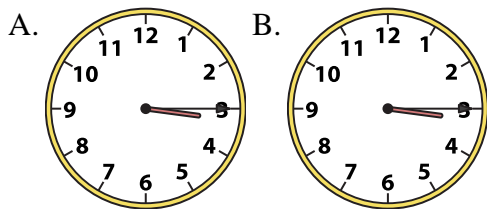
2) 5:45



- 1.   **A**
- 2.   **B**
- 3.   **B**

3) 3:15

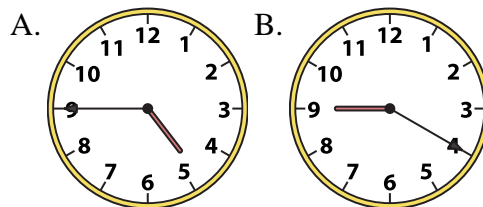
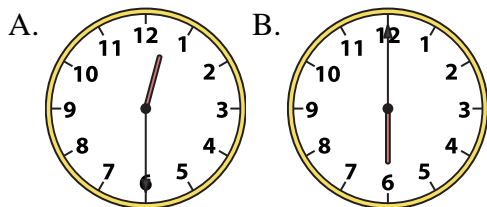
4) 5:15



- 4.   **A**
- 5.   **A**
- 6.   **A**

5) 12:30

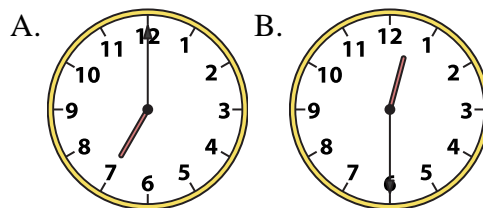
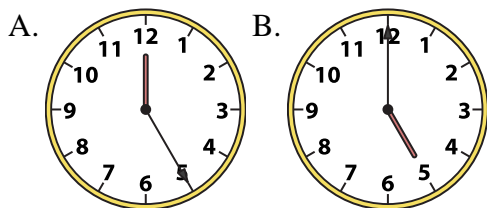
6) 4:45



- 7.   **B**
- 8.   **B**
- 9.   **B**
- 10.   **B**

7) 5:00

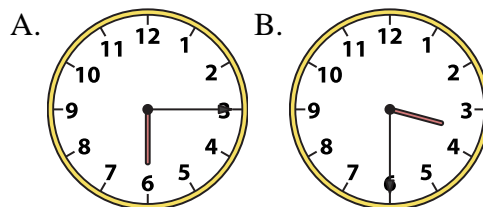
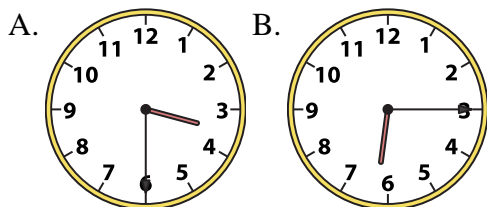
8) 12:30



- 11.   **A**
- 12.   **A**

9) 6:15

10) 3:30



11) 10:45

12) 7:15

