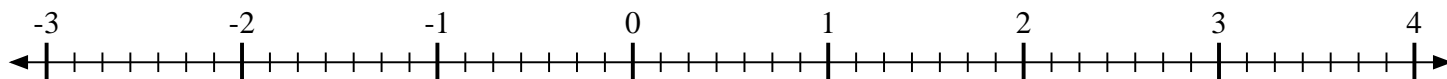


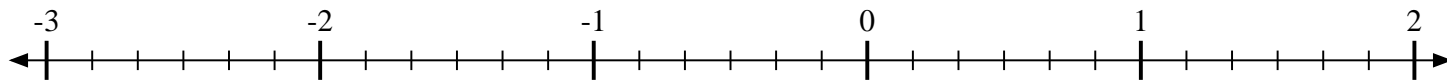


Mark each location described.

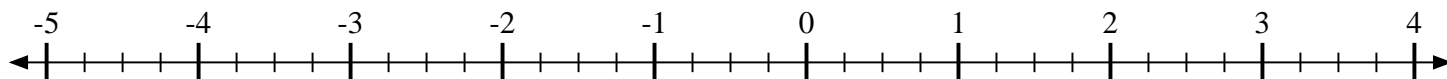
- 1) Mark the location of $\frac{5}{7}$



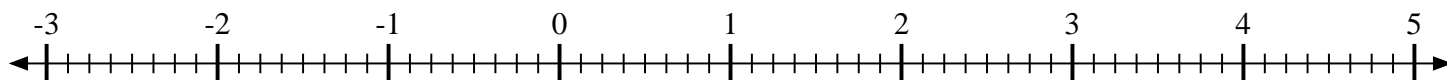
- 2) Mark the location of $\frac{5}{6}$



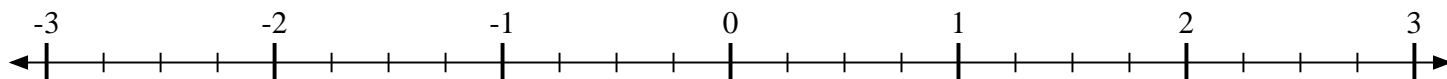
- 3) Mark the location of $-1\frac{2}{4}$



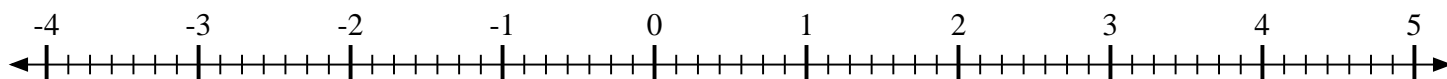
- 4) Mark the location of $-1\frac{1}{8}$



- 5) Mark the location of $1\frac{1}{4}$



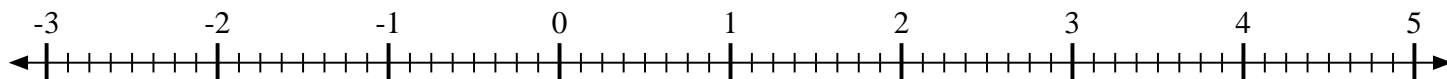
- 6) Mark the location of $-2\frac{2}{7}$



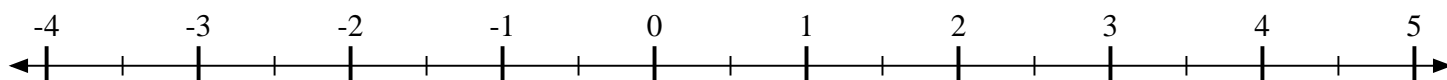
- 7) Mark the location of $1\frac{1}{4}$



- 8) Mark the location of $2\frac{3}{8}$



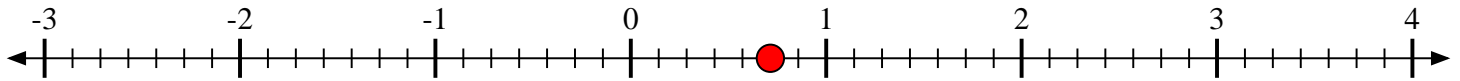
- 9) Mark the location of $\frac{1}{2}$



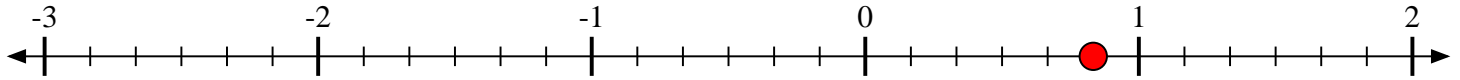


Mark each location described.

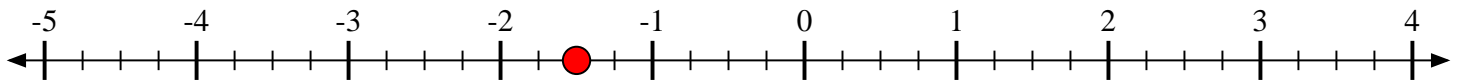
- 1) Mark the location of
- $\frac{5}{7}$



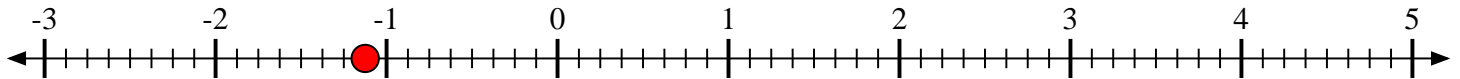
- 2) Mark the location of
- $\frac{5}{6}$



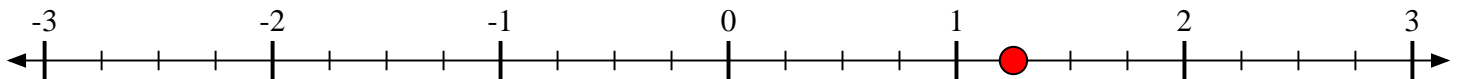
- 3) Mark the location of
- $-1\frac{2}{4}$



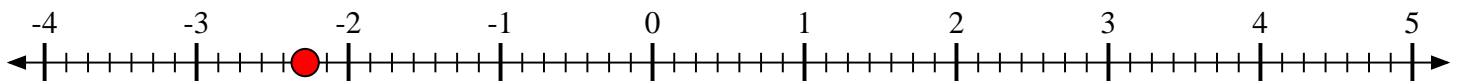
- 4) Mark the location of
- $-1\frac{1}{8}$



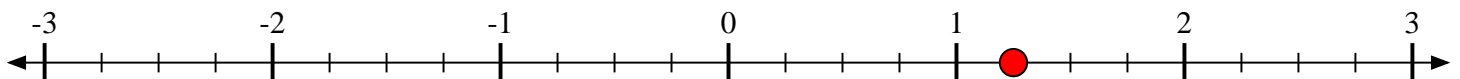
- 5) Mark the location of
- $1\frac{1}{4}$



- 6) Mark the location of
- $-2\frac{2}{7}$



- 7) Mark the location of
- $1\frac{1}{4}$



- 8) Mark the location of
- $2\frac{3}{8}$



- 9) Mark the location of
- $\frac{1}{2}$

