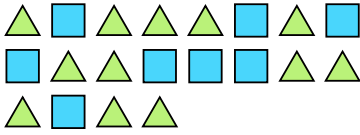







Solve each problem.

Ex) Express the triangles as a fraction of the entire set.



1) Express the stars as a fraction of the entire set.



**Answers**

Ex.  $\frac{12}{20}$

2) Express the moons as a fraction of the entire set.



3) Express the moons as a fraction of the entire set.



1.  $\frac{3}{12}$

2.  $\frac{11}{13}$

3.  $\frac{10}{14}$


4.  $\frac{8}{19}$

5.  $\frac{8}{14}$

4) Express the stars as a fraction of the entire set.



5) Express the triangles as a fraction of the entire set.



6.  $\frac{2}{12}$

7.  $\frac{9}{22}$

8.  $\frac{9}{16}$

6) Express the hearts as a fraction of the entire set.



7) Express the hearts as a fraction of the entire set.



9.  $\frac{8}{20}$

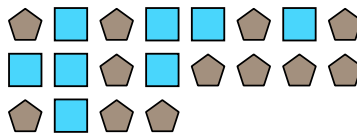
10.  $\frac{4}{6}$

11.  $\frac{13}{27}$

8) Express the hearts as a fraction of the entire set.



9) Express the squares as a fraction of the entire set.



10) Express the hearts as a fraction of the entire set.



11) Express the squares as a fraction of the entire set.

