

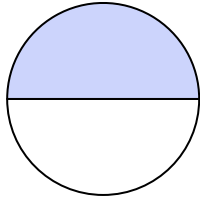


Write the shaded amount as a fraction.

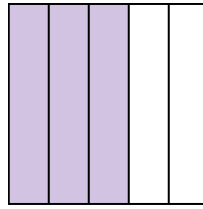
Ex)



1)



2)



Answers

Ex. $\frac{3}{8}$

1. _____

2. _____

3. _____

4. _____

5. _____

6. _____

7. _____

8. _____

9. _____

10. _____


11. _____

12. _____

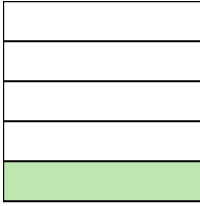
13. _____

14. _____


3)



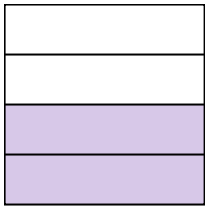
4)



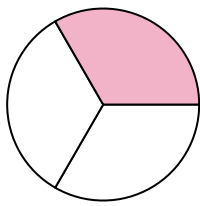
5)




6)



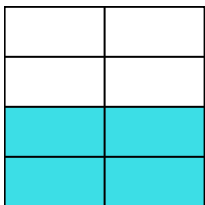
7)




8)



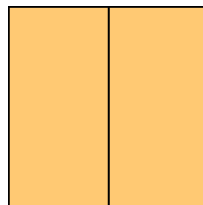
9)



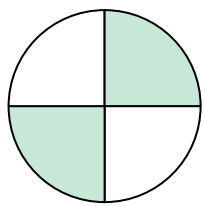
10)



11)



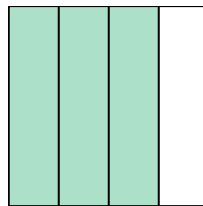
12)



13)

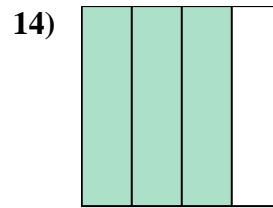

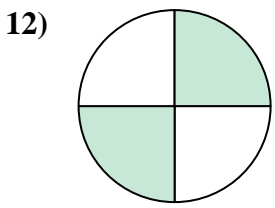
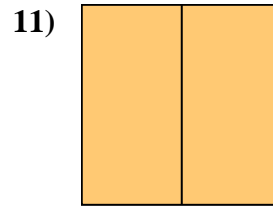
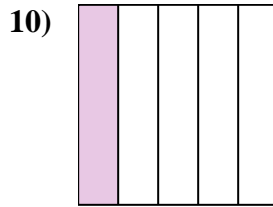
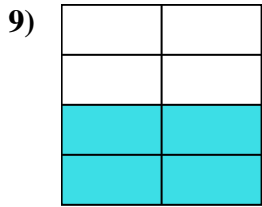
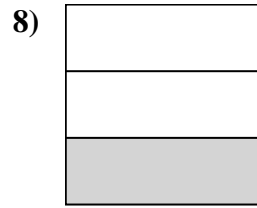
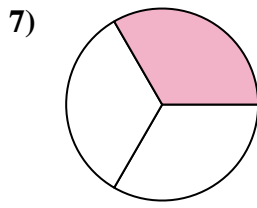
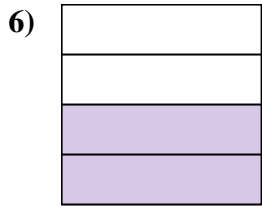
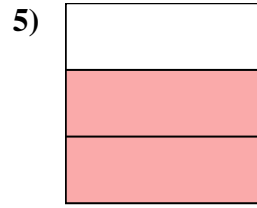
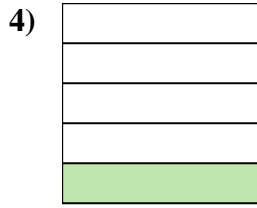
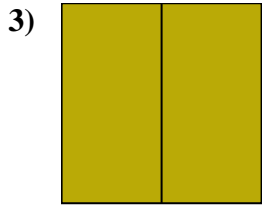
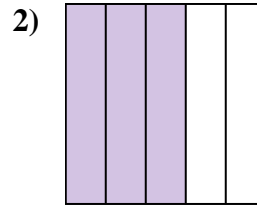
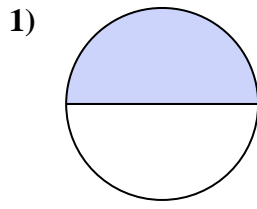
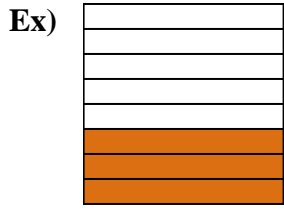


14)





Write the shaded amount as a fraction.



Answers

Ex. 3/8

1. 1/2

2. 3/5

3. 2/2

4. 1/5

5. 2/3

6. 2/4

7. 1/3

8. 1/3

9. 4/8

10. 1/5

11. 2/2

12. 2/4

13. 1/8

14. 3/4