


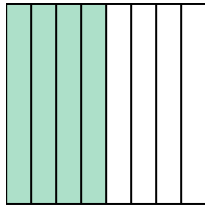


Write the shaded amount as a fraction.


Ex)



1)



2)




Answers

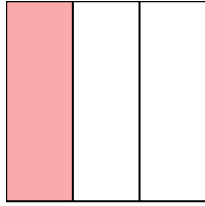
Ex. $\frac{1}{2}$

- 1. _____
- 2. _____
- 3. _____
- 4. _____
- 5. _____
- 6. _____
- 7. _____
- 8. _____
- 9. _____
- 10. _____
- 11. _____
- 12. _____
- 13. _____
- 14. _____


3)



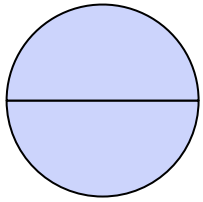
4)



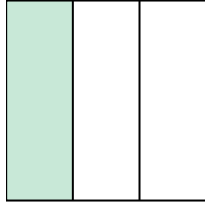
5)



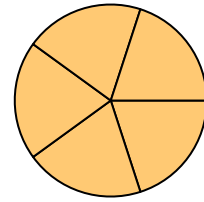
6)



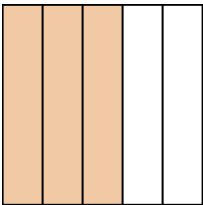
7)




8)



9)




10)



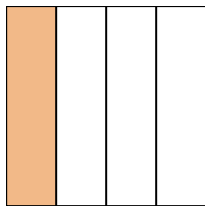
11)



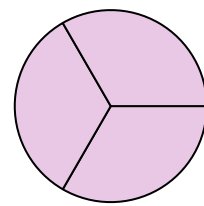
12)



13)




14)



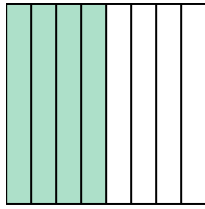


Write the shaded amount as a fraction.

Ex)



1)




2)



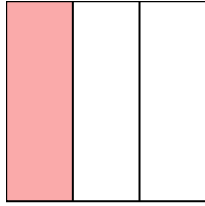
Answers

Ex. 1/2


3)



4)



5)



1. 4/8

2. 6/8

3. 1/4

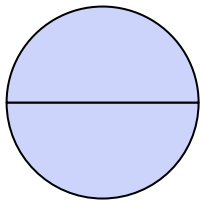
4. 1/3

5. 1/2


6. 2/2

7. 1/3

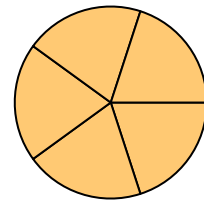
6)



7)



8)



8. 5/5

9. 3/5

10. 3/5

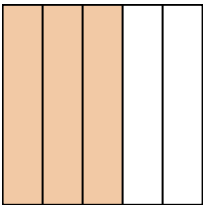
11. 7/8

12. 4/4


13. 1/4

14. 3/3


9)




10)



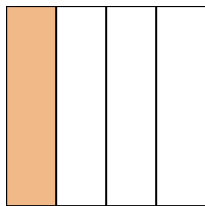
11)



12)



13)



14)

