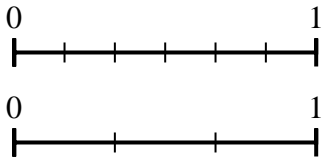




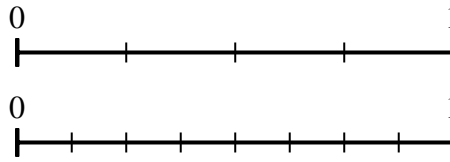
Use the number lines to answer the questions.

Answers

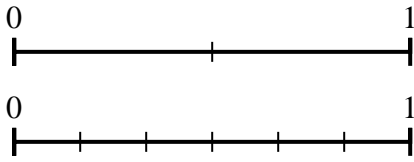
1) Using the number lines shown, what is the equivalent fraction to $\frac{6}{6}$?



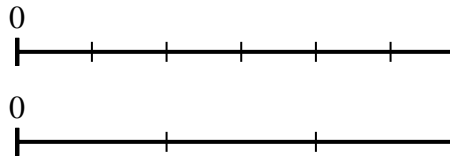
2) Using the number lines shown, what is the equivalent fraction to $\frac{1}{4}$?



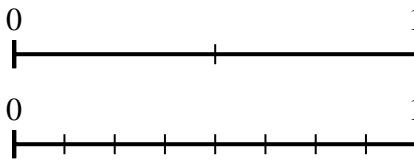
3) Using the number lines shown, what is the equivalent fraction to $\frac{0}{2}$?



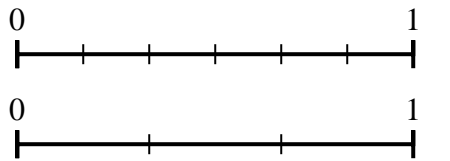
4) Using the number lines shown, what is the equivalent fraction to $\frac{2}{6}$?



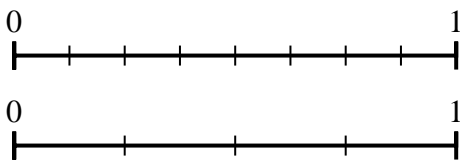
5) Using the number lines shown, what is the equivalent fraction to $\frac{2}{2}$?



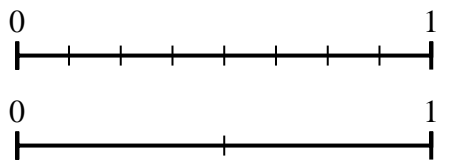
6) Using the number lines shown, what is the equivalent fraction to $\frac{4}{6}$?



7) Using the number lines shown, what is the equivalent fraction to $\frac{8}{8}$?



8) Using the number lines shown, what is the equivalent fraction to $\frac{4}{8}$?


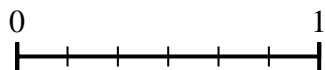


1. _____
2. _____
3. _____
4. _____
5. _____
6. _____
7. _____
8. _____

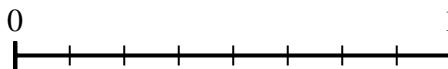
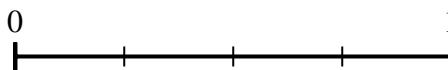


Use the number lines to answer the questions.

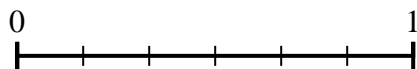
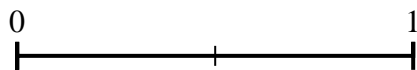
1) Using the number lines shown, what is the equivalent fraction to $\frac{6}{6}$?




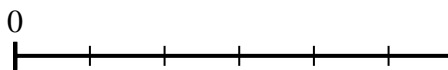
2) Using the number lines shown, what is the equivalent fraction to $\frac{1}{4}$?



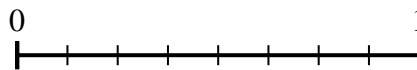
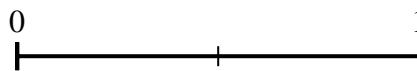
3) Using the number lines shown, what is the equivalent fraction to $\frac{0}{2}$?




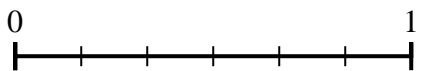
4) Using the number lines shown, what is the equivalent fraction to $\frac{2}{6}$?



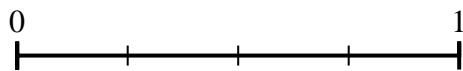
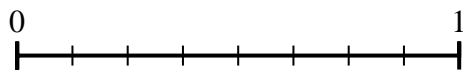
5) Using the number lines shown, what is the equivalent fraction to $\frac{2}{2}$?



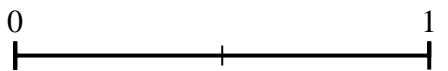
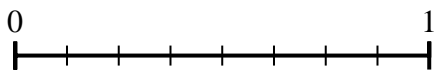
6) Using the number lines shown, what is the equivalent fraction to $\frac{4}{6}$?



7) Using the number lines shown, what is the equivalent fraction to $\frac{8}{8}$?



8) Using the number lines shown, what is the equivalent fraction to $\frac{4}{8}$?



Answers

1. $\frac{3}{3}$

2. $\frac{2}{8}$

3. $\frac{0}{6}$

4. $\frac{1}{3}$

5. $\frac{8}{8}$

6. $\frac{2}{3}$

7. $\frac{4}{4}$

8. $\frac{1}{2}$