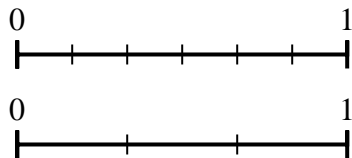




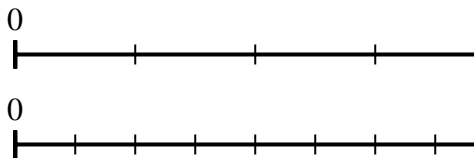
Use the number lines to answer the questions.

**Answers**

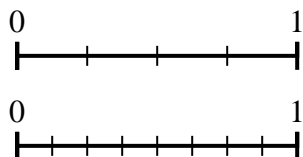
1) Using the number lines shown, what is the equivalent fraction to  $\frac{4}{6}$ ?



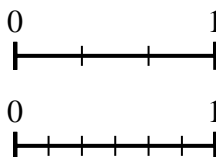
2) Using the number lines shown, what is the equivalent fraction to  $\frac{1}{4}$ ?



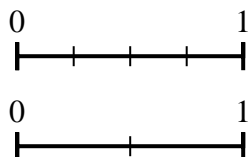
3) Using the number lines shown, what is the equivalent fraction to  $\frac{2}{4}$ ?



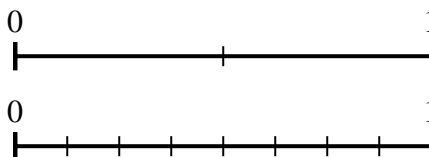
4) Using the number lines shown, what is the equivalent fraction to  $\frac{1}{3}$ ?



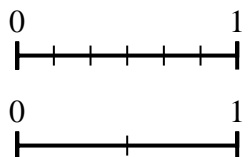
5) Using the number lines shown, what is the equivalent fraction to  $\frac{4}{4}$ ?



6) Using the number lines shown, what is the equivalent fraction to  $\frac{1}{2}$ ?



7) Using the number lines shown, what is the equivalent fraction to  $\frac{6}{6}$ ?



8) Using the number lines shown, what is the equivalent fraction to  $\frac{1}{2}$ ?

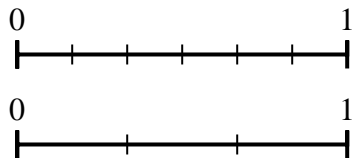


1. \_\_\_\_\_
2. \_\_\_\_\_
3. \_\_\_\_\_
4. \_\_\_\_\_
5. \_\_\_\_\_
6. \_\_\_\_\_
7. \_\_\_\_\_
8. \_\_\_\_\_

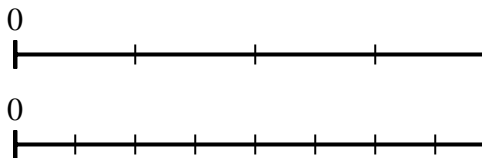


Use the number lines to answer the questions.

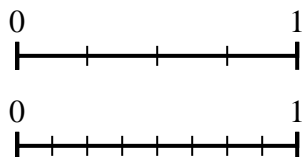
1) Using the number lines shown, what is the equivalent fraction to  $\frac{4}{6}$ ?



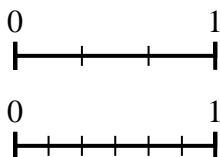
2) Using the number lines shown, what is the equivalent fraction to  $\frac{1}{4}$ ?



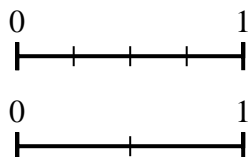
3) Using the number lines shown, what is the equivalent fraction to  $\frac{2}{4}$ ?



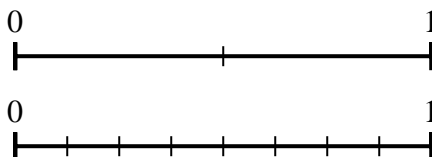
4) Using the number lines shown, what is the equivalent fraction to  $\frac{1}{3}$ ?



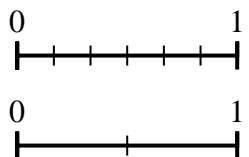
5) Using the number lines shown, what is the equivalent fraction to  $\frac{4}{4}$ ?



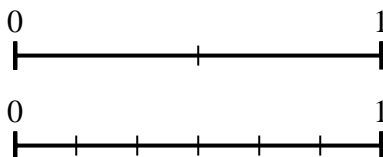
6) Using the number lines shown, what is the equivalent fraction to  $\frac{1}{2}$ ?



7) Using the number lines shown, what is the equivalent fraction to  $\frac{6}{6}$ ?



8) Using the number lines shown, what is the equivalent fraction to  $\frac{1}{2}$ ?



**Answers**

1.  $\frac{2}{3}$
2.  $\frac{2}{8}$
3.  $\frac{4}{8}$
4.  $\frac{2}{6}$
5.  $\frac{2}{2}$
6.  $\frac{4}{8}$
7.  $\frac{2}{2}$
8.  $\frac{3}{6}$