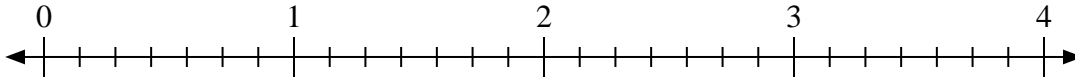


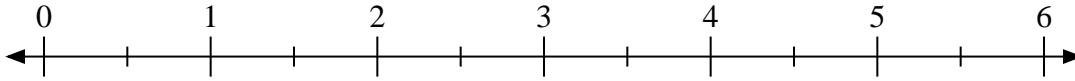


Use the numberline to solve.

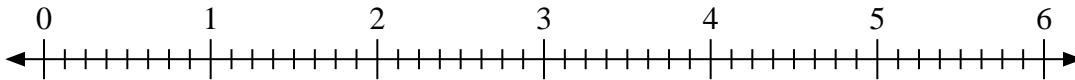
1)  $3 \div \frac{6}{7}$



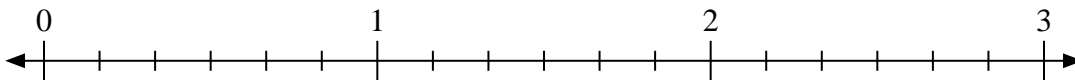
2)  $3 \div \frac{1}{2}$



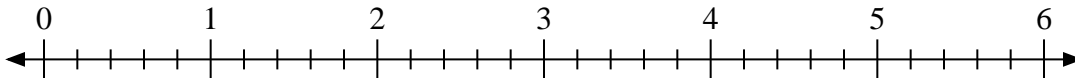
3)  $5 \div \frac{6}{8}$



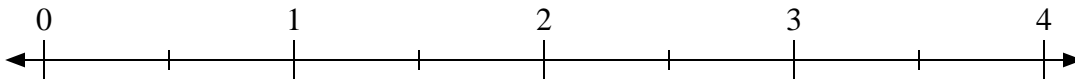
4)  $3 \div \frac{4}{6}$



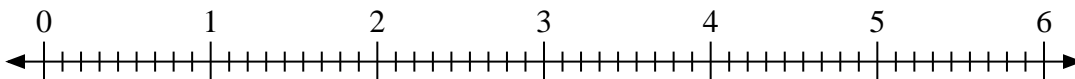
5)  $6 \div \frac{1}{5}$



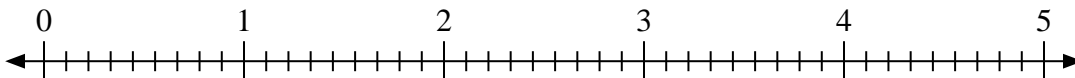
6)  $2 \div \frac{1}{2}$



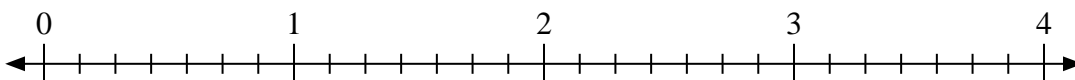
7)  $5 \div \frac{3}{9}$



8)  $5 \div \frac{7}{9}$



9)  $4 \div \frac{2}{7}$



Answers

1. \_\_\_\_\_

2. \_\_\_\_\_

3. \_\_\_\_\_

4. \_\_\_\_\_

5. \_\_\_\_\_

6. \_\_\_\_\_

7. \_\_\_\_\_

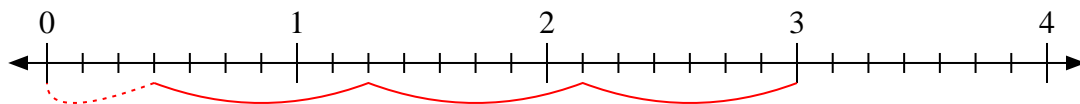
8. \_\_\_\_\_

9. \_\_\_\_\_

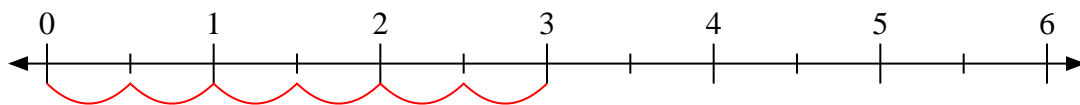


Use the numberline to solve.

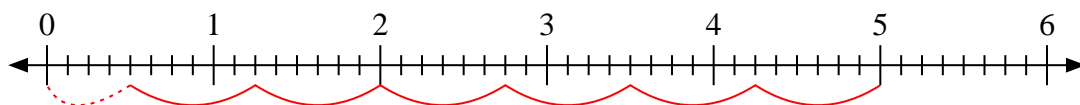
1)  $3 \div \frac{6}{7}$



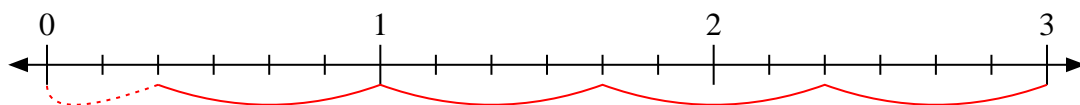
2)  $3 \div \frac{1}{2}$



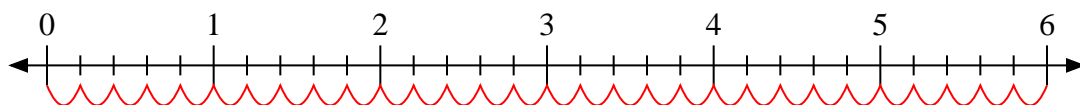
3)  $5 \div \frac{6}{8}$



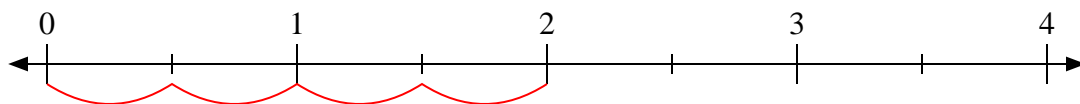
4)  $3 \div \frac{4}{6}$



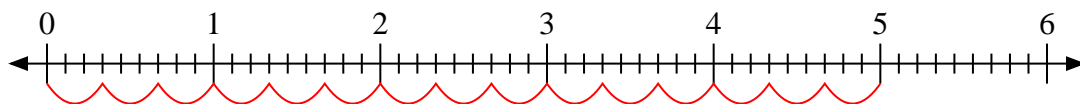
5)  $6 \div \frac{1}{5}$



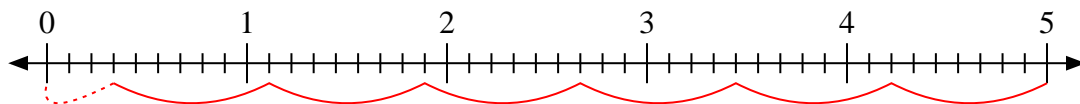
6)  $2 \div \frac{1}{2}$



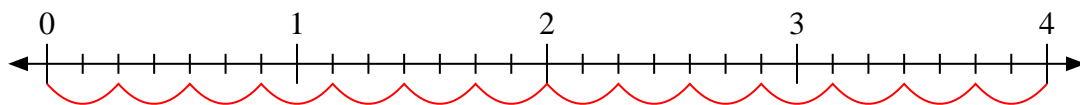
7)  $5 \div \frac{3}{9}$



8)  $5 \div \frac{7}{9}$



9)  $4 \div \frac{2}{7}$



Answers

1. 3 <sup>3</sup>/<sub>6</sub>

2. 6

3. 6 <sup>4</sup>/<sub>6</sub>

4. 4 <sup>2</sup>/<sub>4</sub>

5. 30

6. 4

7. 15

8. 6 <sup>3</sup>/<sub>7</sub>

9. 14