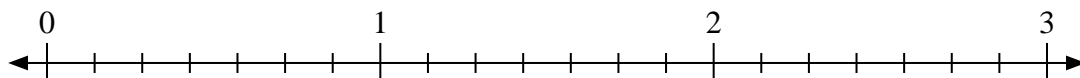


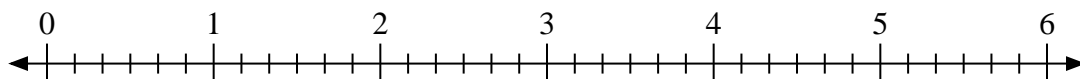


Use the numberline to solve.

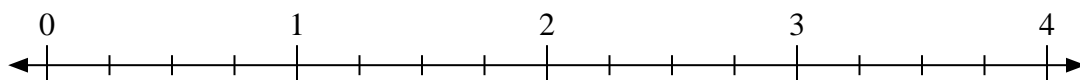
1)  $2 \div \frac{3}{7}$



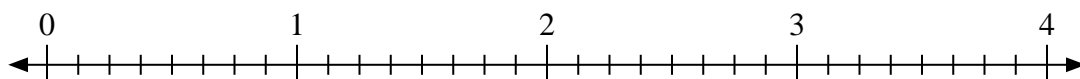
2)  $6 \div \frac{3}{6}$



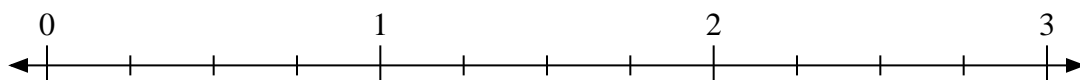
3)  $2 \div \frac{1}{4}$



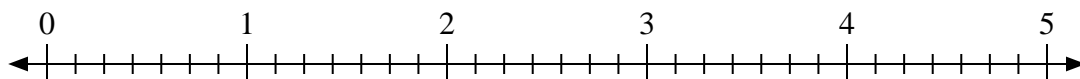
4)  $2 \div \frac{2}{8}$



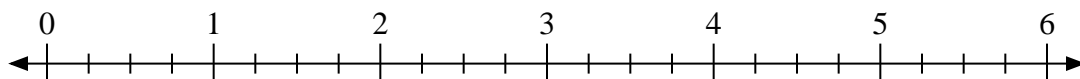
5)  $3 \div \frac{2}{4}$



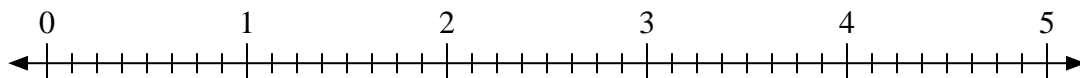
6)  $5 \div \frac{4}{7}$



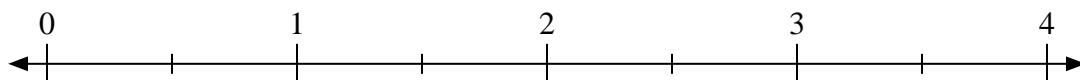
7)  $6 \div \frac{1}{4}$



8)  $5 \div \frac{5}{8}$



9)  $3 \div \frac{1}{2}$



**Answers**

1. \_\_\_\_\_

2. \_\_\_\_\_

3. \_\_\_\_\_

4. \_\_\_\_\_

5. \_\_\_\_\_

6. \_\_\_\_\_

7. \_\_\_\_\_

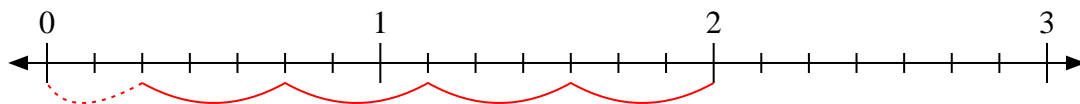
8. \_\_\_\_\_

9. \_\_\_\_\_

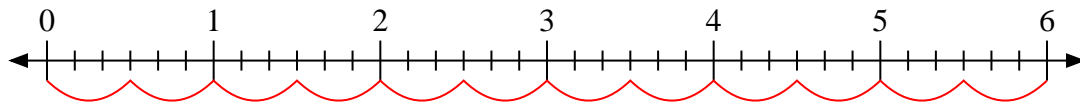


Use the numberline to solve.

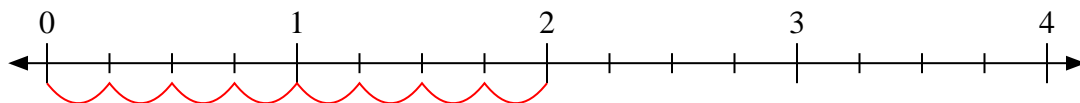
1)  $2 \div \frac{3}{7}$



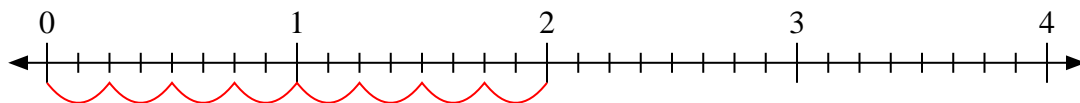
2)  $6 \div \frac{3}{6}$



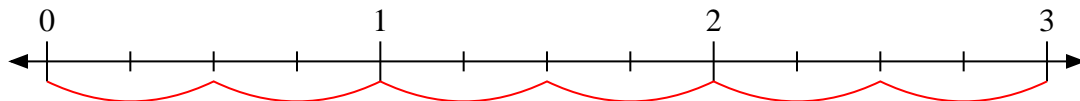
3)  $2 \div \frac{1}{4}$



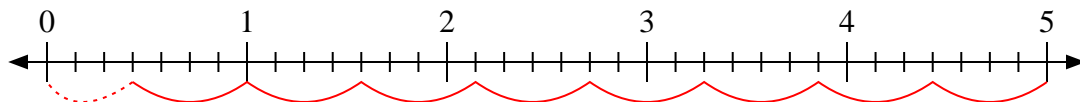
4)  $2 \div \frac{2}{8}$



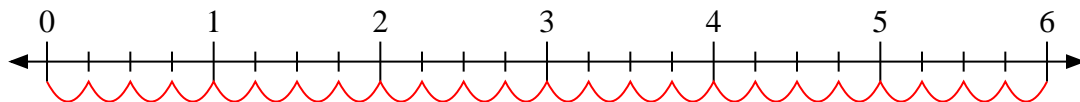
5)  $3 \div \frac{2}{4}$



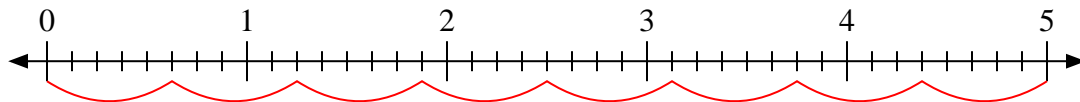
6)  $5 \div \frac{4}{7}$



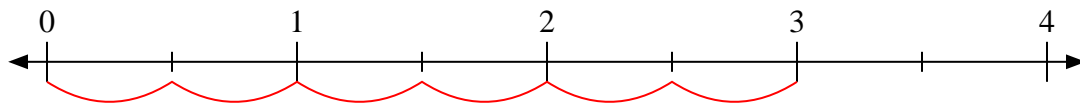
7)  $6 \div \frac{1}{4}$



8)  $5 \div \frac{5}{8}$



9)  $3 \div \frac{1}{2}$



Answers

1. 4  $\frac{2}{3}$

2. 12

3. 8

4. 8

5. 6

6. 8  $\frac{3}{4}$

7. 24

8. 8

9. 6