



Solve each problem by marking off the fractions. The first is completed for you.

Answers

Ex) $2 \div \frac{1}{3} = ?$ This is the same as saying: How many $\frac{1}{3}$ are there in 2 wholes?

Ex. 6

1 Whole			1 Whole		

1. _____

1) $3 \div \frac{1}{2} =$

2. _____

1 Whole		1 Whole		1 Whole	

3. _____

2) $3 \div \frac{1}{5} =$

4. _____

1 Whole	1 Whole	1 Whole

5. _____

3) $2 \div \frac{1}{7} =$

6. _____

1 Whole			1 Whole		

7. _____

4) $4 \div \frac{1}{2} =$

8. _____

1 Whole	1 Whole	1 Whole	1 Whole

9. _____

5) $4 \div \frac{1}{7} =$

1 Whole	1 Whole	1 Whole	1 Whole

6) $5 \div \frac{1}{4} =$

1 Whole	1 Whole	1 Whole	1 Whole	1 Whole

7) $2 \div \frac{1}{6} =$

1 Whole		1 Whole	

8) $6 \div \frac{1}{4} =$

1 Whole	1 Whole	1 Whole	1 Whole	1 Whole	1 Whole


9) $3 \div \frac{1}{3} =$

1 Whole	1 Whole	1 Whole

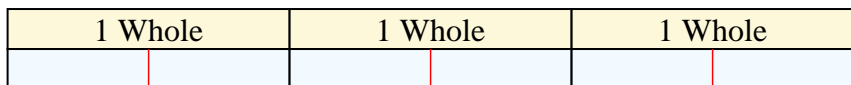


Solve each problem by marking off the fractions. The first is completed for you.

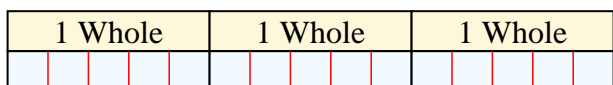
Ex) $2 \div \frac{1}{3} = ?$ This is the same as saying: How many $\frac{1}{3}$ are the in 2 wholes?



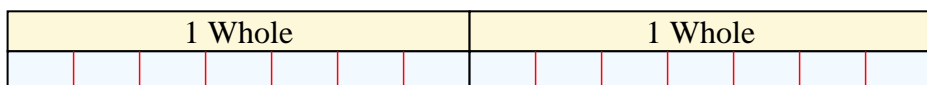
1) $3 \div \frac{1}{2} =$ This is the same as saying: How many $\frac{1}{2}$ are the in 3 wholes?



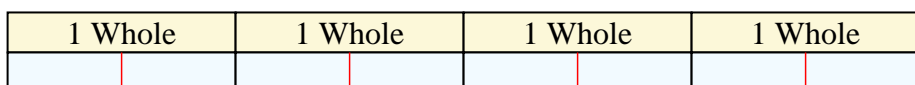
2) $3 \div \frac{1}{5} =$ This is the same as saying: How many $\frac{1}{5}$ are the in 3 wholes?



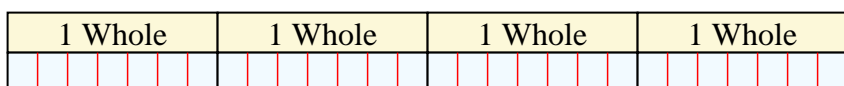
3) $2 \div \frac{1}{7} =$ This is the same as saying: How many $\frac{1}{7}$ are the in 2 wholes?



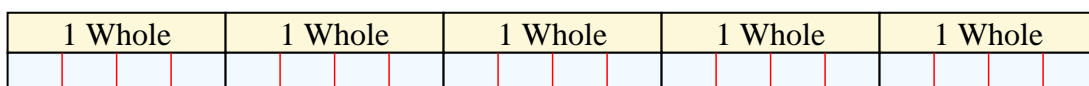
4) $4 \div \frac{1}{2} =$ This is the same as saying: How many $\frac{1}{2}$ are the in 4 wholes?



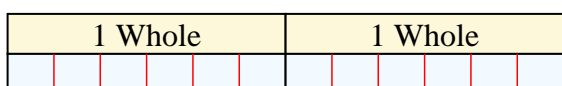
5) $4 \div \frac{1}{7} =$ This is the same as saying: How many $\frac{1}{7}$ are the in 4 wholes?



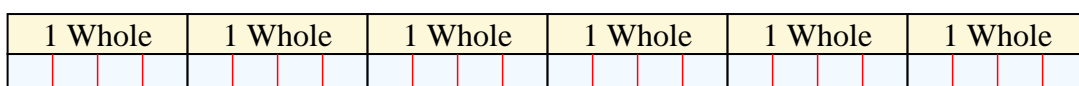
6) $5 \div \frac{1}{4} =$ This is the same as saying: How many $\frac{1}{4}$ are the in 5 wholes?



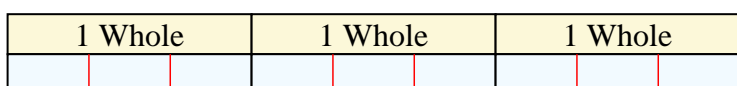
7) $2 \div \frac{1}{6} =$ This is the same as saying: How many $\frac{1}{6}$ are the in 2 wholes?



8) $6 \div \frac{1}{4} =$ This is the same as saying: How many $\frac{1}{4}$ are the in 6 wholes?



9) $3 \div \frac{1}{3} =$ This is the same as saying: How many $\frac{1}{3}$ are the in 3 wholes?



Answers

Ex. 6

1. 6

2. 15

3. 14

4. 8

5. 28

6. 20

7. 12

8. 24

9. 9



Solve each problem by marking off the fractions. The first is completed for you.

Answers

Ex) $3 \div \frac{1}{2} = ?$ This is the same as saying: How many $\frac{1}{2}$ are there in 3 wholes?

1 Whole		1 Whole		1 Whole	
<input checked="" type="checkbox"/>	<input checked="" type="checkbox"/>	<input checked="" type="checkbox"/>	<input checked="" type="checkbox"/>	<input checked="" type="checkbox"/>	<input checked="" type="checkbox"/>

Ex. 6

1. _____

1) $6 \div \frac{1}{5} =$

2. _____

1 Whole		1 Whole		1 Whole		1 Whole		1 Whole		1 Whole	
<input type="checkbox"/>	<input type="checkbox"/>	<input type="checkbox"/>	<input type="checkbox"/>	<input type="checkbox"/>	<input type="checkbox"/>	<input type="checkbox"/>	<input type="checkbox"/>	<input type="checkbox"/>	<input type="checkbox"/>	<input type="checkbox"/>	<input type="checkbox"/>

3. _____

2) $5 \div \frac{1}{2} =$

4. _____

1 Whole		1 Whole		1 Whole		1 Whole	
<input type="checkbox"/>	<input type="checkbox"/>	<input type="checkbox"/>	<input type="checkbox"/>	<input type="checkbox"/>	<input type="checkbox"/>	<input type="checkbox"/>	<input type="checkbox"/>

5. _____

3) $4 \div \frac{1}{7} =$

6. _____

1 Whole		1 Whole		1 Whole		1 Whole	
<input type="checkbox"/>	<input type="checkbox"/>	<input type="checkbox"/>	<input type="checkbox"/>	<input type="checkbox"/>	<input type="checkbox"/>	<input type="checkbox"/>	<input type="checkbox"/>

7. _____

4) $6 \div \frac{1}{3} =$

8. _____

1 Whole		1 Whole		1 Whole		1 Whole		1 Whole		1 Whole	
<input type="checkbox"/>	<input type="checkbox"/>	<input type="checkbox"/>	<input type="checkbox"/>	<input type="checkbox"/>	<input type="checkbox"/>	<input type="checkbox"/>	<input type="checkbox"/>	<input type="checkbox"/>	<input type="checkbox"/>	<input type="checkbox"/>	<input type="checkbox"/>

9. _____

5) $2 \div \frac{1}{7} =$

1 Whole		1 Whole	
<input type="checkbox"/>	<input type="checkbox"/>	<input type="checkbox"/>	<input type="checkbox"/>

6) $2 \div \frac{1}{4} =$

1 Whole				1 Whole			
<input type="checkbox"/>	<input type="checkbox"/>	<input type="checkbox"/>	<input type="checkbox"/>	<input type="checkbox"/>	<input type="checkbox"/>	<input type="checkbox"/>	<input type="checkbox"/>

7) $2 \div \frac{1}{5} =$

1 Whole		1 Whole	
<input type="checkbox"/>	<input type="checkbox"/>	<input type="checkbox"/>	<input type="checkbox"/>

8) $5 \div \frac{1}{5} =$

1 Whole		1 Whole		1 Whole		1 Whole		1 Whole	
<input type="checkbox"/>	<input type="checkbox"/>	<input type="checkbox"/>	<input type="checkbox"/>	<input type="checkbox"/>	<input type="checkbox"/>	<input type="checkbox"/>	<input type="checkbox"/>	<input type="checkbox"/>	<input type="checkbox"/>

9) $5 \div \frac{1}{6} =$

1 Whole		1 Whole		1 Whole		1 Whole		1 Whole	
<input type="checkbox"/>	<input type="checkbox"/>	<input type="checkbox"/>	<input type="checkbox"/>	<input type="checkbox"/>	<input type="checkbox"/>	<input type="checkbox"/>	<input type="checkbox"/>	<input type="checkbox"/>	<input type="checkbox"/>



Solve each problem by marking off the fractions. The first is completed for you.

Ex) $3 \div \frac{1}{2} = ?$ This is the same as saying: How many $\frac{1}{2}$ are the in 3 wholes?

1 Whole		1 Whole		1 Whole	

1) $6 \div \frac{1}{5} =$ This is the same as saying: How many $\frac{1}{5}$ are the in 6 wholes?

1 Whole		1 Whole		1 Whole		1 Whole		1 Whole		1 Whole	

2) $5 \div \frac{1}{2} =$ This is the same as saying: How many $\frac{1}{2}$ are the in 5 wholes?

1 Whole		1 Whole		1 Whole		1 Whole		1 Whole	

3) $4 \div \frac{1}{7} =$ This is the same as saying: How many $\frac{1}{7}$ are the in 4 wholes?

1 Whole			1 Whole			1 Whole			1 Whole		

4) $6 \div \frac{1}{3} =$ This is the same as saying: How many $\frac{1}{3}$ are the in 6 wholes?

1 Whole		1 Whole		1 Whole		1 Whole		1 Whole		1 Whole	

5) $2 \div \frac{1}{7} =$ This is the same as saying: How many $\frac{1}{7}$ are the in 2 wholes?

1 Whole				1 Whole			

6) $2 \div \frac{1}{4} =$ This is the same as saying: How many $\frac{1}{4}$ are the in 2 wholes?

1 Whole				1 Whole			

7) $2 \div \frac{1}{5} =$ This is the same as saying: How many $\frac{1}{5}$ are the in 2 wholes?

1 Whole				1 Whole			

8) $5 \div \frac{1}{5} =$ This is the same as saying: How many $\frac{1}{5}$ are the in 5 wholes?

1 Whole		1 Whole		1 Whole		1 Whole		1 Whole	

9) $5 \div \frac{1}{6} =$ This is the same as saying: How many $\frac{1}{6}$ are the in 5 wholes?

1 Whole		1 Whole		1 Whole		1 Whole		1 Whole	

Answers

Ex. 6

1. 30

2. 10

3. 28

4. 18

5. 14

6. 8

7. 10

8. 25

9. 30



Solve each problem by marking off the fractions. The first is completed for you.

Answers

Ex) $3 \div \frac{1}{5} = ?$ This is the same as saying: How many $\frac{1}{5}$ are there in 3 wholes?

Ex. **15**

1 Whole					1 Whole					1 Whole				

1. _____

1) $4 \div \frac{1}{4} =$

2. _____

1 Whole				1 Whole				1 Whole				1 Whole			

3. _____

2) $2 \div \frac{1}{3} =$

4. _____

1 Whole						1 Whole					

5. _____

3) $3 \div \frac{1}{3} =$

6. _____

1 Whole			1 Whole			1 Whole		

7. _____

4) $3 \div \frac{1}{4} =$

8. _____

1 Whole				1 Whole				1 Whole			

9. _____

5) $2 \div \frac{1}{6} =$

1 Whole			1 Whole		

6) $6 \div \frac{1}{2} =$

1 Whole		1 Whole		1 Whole		1 Whole		1 Whole		1 Whole	

7) $5 \div \frac{1}{6} =$

1 Whole		1 Whole		1 Whole		1 Whole		1 Whole	

8) $6 \div \frac{1}{4} =$

1 Whole		1 Whole		1 Whole		1 Whole		1 Whole		1 Whole	

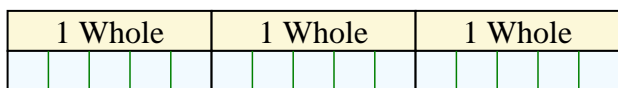
9) $5 \div \frac{1}{3} =$

1 Whole		1 Whole		1 Whole		1 Whole		1 Whole	

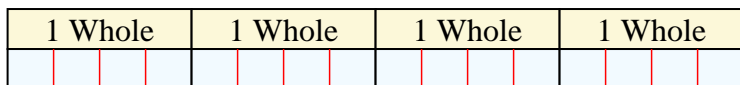


Solve each problem by marking off the fractions. The first is completed for you.


Ex) $3 \div \frac{1}{5} = ?$ This is the same as saying: How many $\frac{1}{5}$ are the in 3 wholes?



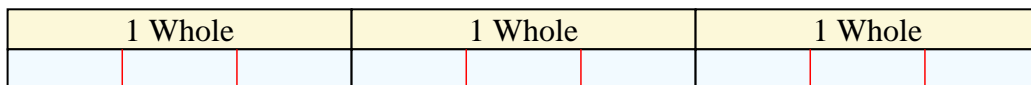
1) $4 \div \frac{1}{4} =$ This is the same as saying: How many $\frac{1}{4}$ are the in 4 wholes?



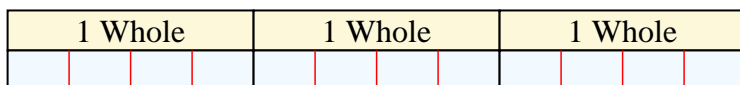
2) $2 \div \frac{1}{3} =$ This is the same as saying: How many $\frac{1}{3}$ are the in 2 wholes?




3) $3 \div \frac{1}{3} =$ This is the same as saying: How many $\frac{1}{3}$ are the in 3 wholes?



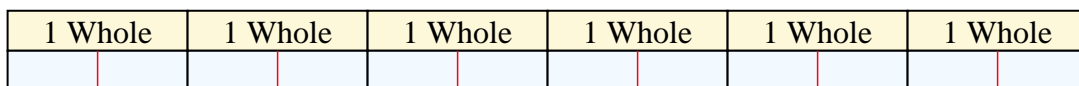
4) $3 \div \frac{1}{4} =$ This is the same as saying: How many $\frac{1}{4}$ are the in 3 wholes?



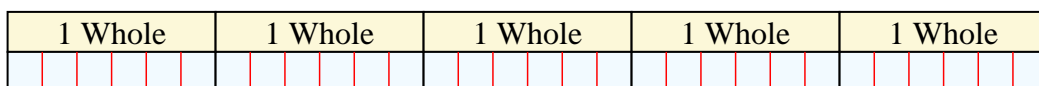
5) $2 \div \frac{1}{6} =$ This is the same as saying: How many $\frac{1}{6}$ are the in 2 wholes?



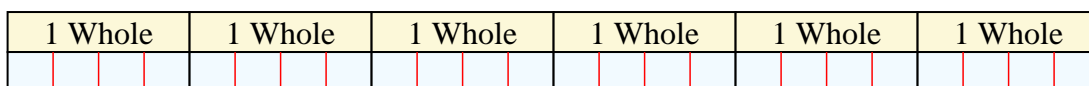
6) $6 \div \frac{1}{2} =$ This is the same as saying: How many $\frac{1}{2}$ are the in 6 wholes?



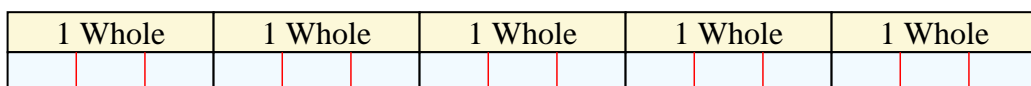
7) $5 \div \frac{1}{6} =$ This is the same as saying: How many $\frac{1}{6}$ are the in 5 wholes?



8) $6 \div \frac{1}{4} =$ This is the same as saying: How many $\frac{1}{4}$ are the in 6 wholes?



9) $5 \div \frac{1}{3} =$ This is the same as saying: How many $\frac{1}{3}$ are the in 5 wholes?



Answers

Ex. 15

1. 16

2. 6

3. 9

4. 12

5. 12

6. 12

7. 30

8. 24

9. 15



Solve each problem by marking off the fractions. The first is completed for you.

Answers

Ex) $4 \div \frac{1}{5} = ?$ This is the same as saying: How many $\frac{1}{5}$ are there in 4 wholes?

Ex. **20**

1 Whole	1 Whole	1 Whole	1 Whole
<input type="checkbox"/>	<input type="checkbox"/>	<input type="checkbox"/>	<input type="checkbox"/>

1. _____

1) $3 \div \frac{1}{3} =$

2. _____

1 Whole	1 Whole	1 Whole
<input type="checkbox"/>	<input type="checkbox"/>	<input type="checkbox"/>

3. _____

2) $5 \div \frac{1}{5} =$

4. _____

1 Whole	1 Whole	1 Whole	1 Whole	1 Whole
<input type="checkbox"/>	<input type="checkbox"/>	<input type="checkbox"/>	<input type="checkbox"/>	<input type="checkbox"/>

5. _____

3) $3 \div \frac{1}{2} =$

6. _____

1 Whole	1 Whole	1 Whole
<input type="checkbox"/>	<input type="checkbox"/>	<input type="checkbox"/>

7. _____

4) $6 \div \frac{1}{5} =$

8. _____

1 Whole	1 Whole	1 Whole	1 Whole	1 Whole	1 Whole
<input type="checkbox"/>	<input type="checkbox"/>	<input type="checkbox"/>	<input type="checkbox"/>	<input type="checkbox"/>	<input type="checkbox"/>

9. _____

5) $2 \div \frac{1}{6} =$

1 Whole	1 Whole
<input type="checkbox"/>	<input type="checkbox"/>

6) $4 \div \frac{1}{2} =$

1 Whole	1 Whole	1 Whole	1 Whole
<input type="checkbox"/>	<input type="checkbox"/>	<input type="checkbox"/>	<input type="checkbox"/>

7) $2 \div \frac{1}{4} =$

1 Whole	1 Whole
<input type="checkbox"/>	<input type="checkbox"/>

8) $6 \div \frac{1}{7} =$

1 Whole	1 Whole	1 Whole	1 Whole	1 Whole	1 Whole
<input type="checkbox"/>	<input type="checkbox"/>	<input type="checkbox"/>	<input type="checkbox"/>	<input type="checkbox"/>	<input type="checkbox"/>

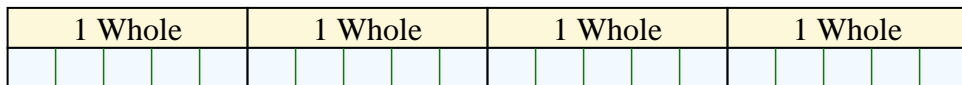
9) $3 \div \frac{1}{7} =$

1 Whole	1 Whole	1 Whole
<input type="checkbox"/>	<input type="checkbox"/>	<input type="checkbox"/>

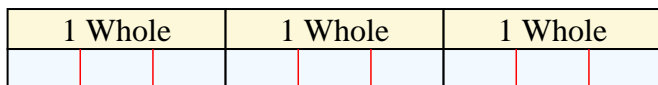


Solve each problem by marking off the fractions. The first is completed for you.

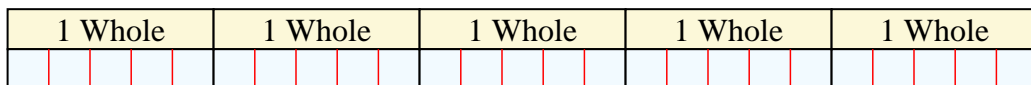
Ex) $4 \div \frac{1}{5} = ?$ This is the same as saying: How many $\frac{1}{5}$ are the in 4 wholes?



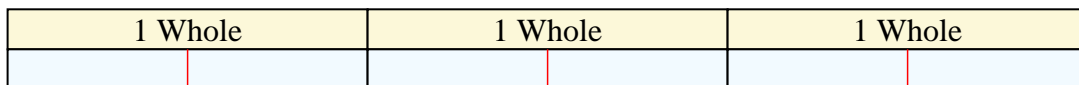
1) $3 \div \frac{1}{3} =$ This is the same as saying: How many $\frac{1}{3}$ are the in 3 wholes?



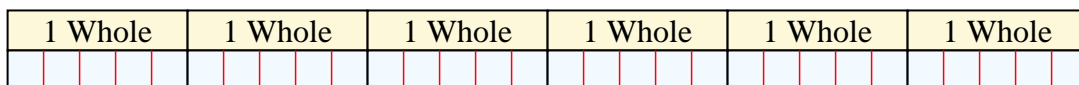
2) $5 \div \frac{1}{5} =$ This is the same as saying: How many $\frac{1}{5}$ are the in 5 wholes?




3) $3 \div \frac{1}{2} =$ This is the same as saying: How many $\frac{1}{2}$ are the in 3 wholes?



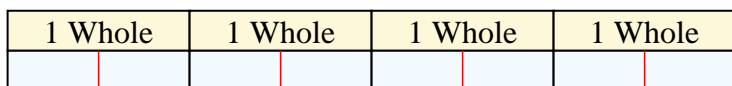
4) $6 \div \frac{1}{5} =$ This is the same as saying: How many $\frac{1}{5}$ are the in 6 wholes?



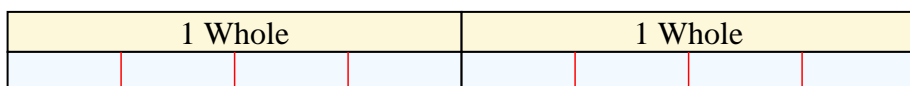
5) $2 \div \frac{1}{6} =$ This is the same as saying: How many $\frac{1}{6}$ are the in 2 wholes?



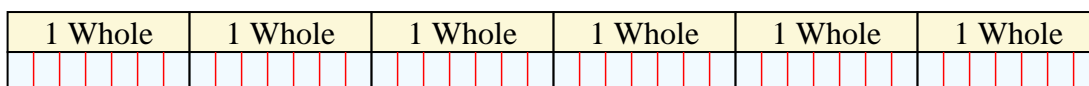
6) $4 \div \frac{1}{2} =$ This is the same as saying: How many $\frac{1}{2}$ are the in 4 wholes?



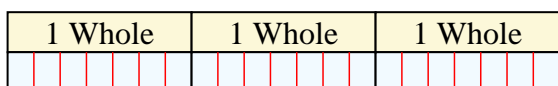
7) $2 \div \frac{1}{4} =$ This is the same as saying: How many $\frac{1}{4}$ are the in 2 wholes?



8) $6 \div \frac{1}{7} =$ This is the same as saying: How many $\frac{1}{7}$ are the in 6 wholes?



9) $3 \div \frac{1}{7} =$ This is the same as saying: How many $\frac{1}{7}$ are the in 3 wholes?



Answers

Ex. 20

1. 9

2. 25

3. 6

4. 30

5. 12

6. 8

7. 8

8. 42

9. 21



Solve each problem by marking off the fractions. The first is completed for you.

Answers

Ex) $3 \div \frac{1}{4} = ?$ This is the same as saying: How many $\frac{1}{4}$ are there in 3 wholes?

Ex. **12**

1 Whole				1 Whole				1 Whole			

1. _____

1) $4 \div \frac{1}{4} =$

2. _____

1 Whole			1 Whole			1 Whole			1 Whole		

3. _____

2) $6 \div \frac{1}{7} =$

4. _____

1 Whole		1 Whole		1 Whole		1 Whole		1 Whole		1 Whole	

5. _____

3) $6 \div \frac{1}{3} =$

6. _____

1 Whole		1 Whole		1 Whole		1 Whole		1 Whole		1 Whole	

7. _____

4) $6 \div \frac{1}{2} =$

8. _____

1 Whole		1 Whole		1 Whole		1 Whole		1 Whole		1 Whole	

9. _____

5) $3 \div \frac{1}{6} =$

1 Whole		1 Whole		1 Whole	

6) $5 \div \frac{1}{2} =$

1 Whole		1 Whole		1 Whole		1 Whole		1 Whole	

7) $2 \div \frac{1}{3} =$

1 Whole		1 Whole	

8) $3 \div \frac{1}{3} =$

1 Whole		1 Whole		1 Whole	

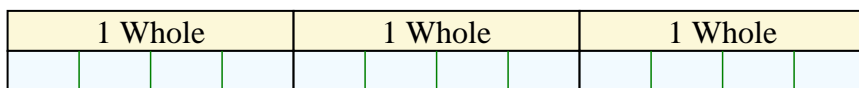
9) $4 \div \frac{1}{5} =$

1 Whole		1 Whole		1 Whole		1 Whole	

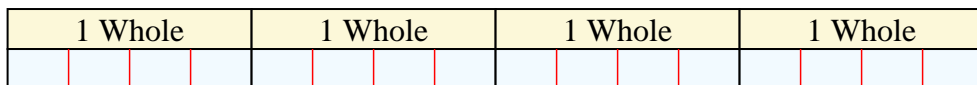


Solve each problem by marking off the fractions. The first is completed for you.


Ex) $3 \div \frac{1}{4} = ?$ This is the same as saying: How many $\frac{1}{4}$ are the in 3 wholes?



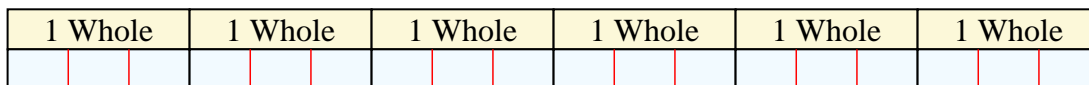
1) $4 \div \frac{1}{4} =$ This is the same as saying: How many $\frac{1}{4}$ are the in 4 wholes?



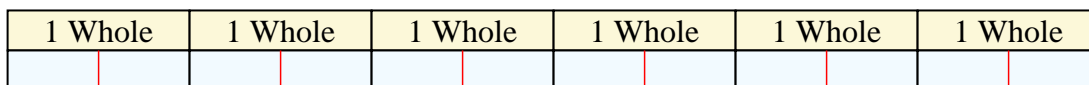
2) $6 \div \frac{1}{7} =$ This is the same as saying: How many $\frac{1}{7}$ are the in 6 wholes?



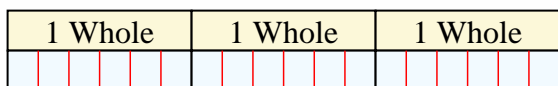
3) $6 \div \frac{1}{3} =$ This is the same as saying: How many $\frac{1}{3}$ are the in 6 wholes?



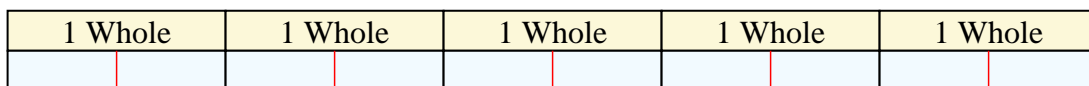
4) $6 \div \frac{1}{2} =$ This is the same as saying: How many $\frac{1}{2}$ are the in 6 wholes?



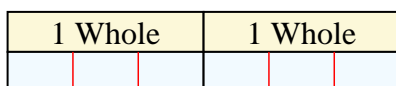
5) $3 \div \frac{1}{6} =$ This is the same as saying: How many $\frac{1}{6}$ are the in 3 wholes?



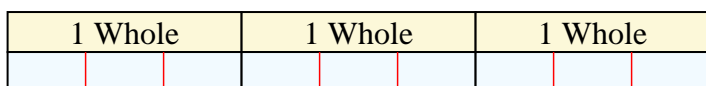
6) $5 \div \frac{1}{2} =$ This is the same as saying: How many $\frac{1}{2}$ are the in 5 wholes?




7) $2 \div \frac{1}{3} =$ This is the same as saying: How many $\frac{1}{3}$ are the in 2 wholes?



8) $3 \div \frac{1}{3} =$ This is the same as saying: How many $\frac{1}{3}$ are the in 3 wholes?



9) $4 \div \frac{1}{5} =$ This is the same as saying: How many $\frac{1}{5}$ are the in 4 wholes?



Answers

Ex. 12

1. 16

2. 42

3. 18

4. 12

5. 18

6. 10

7. 6

8. 9

9. 20



Solve each problem by marking off the fractions. The first is completed for you.

Answers

Ex) $6 \div \frac{1}{6} = ?$ This is the same as saying: How many $\frac{1}{6}$ are there in 6 wholes?

Ex. **36**

1 Whole	1 Whole	1 Whole	1 Whole	1 Whole	1 Whole
<input type="checkbox"/>	<input type="checkbox"/>	<input type="checkbox"/>	<input type="checkbox"/>	<input type="checkbox"/>	<input type="checkbox"/>

1. _____

1) $3 \div \frac{1}{6} =$

2. _____

1 Whole	1 Whole	1 Whole
<input type="checkbox"/>	<input type="checkbox"/>	<input type="checkbox"/>

3. _____

2) $6 \div \frac{1}{4} =$

4. _____

1 Whole	1 Whole	1 Whole	1 Whole	1 Whole	1 Whole
<input type="checkbox"/>	<input type="checkbox"/>	<input type="checkbox"/>	<input type="checkbox"/>	<input type="checkbox"/>	<input type="checkbox"/>

5. _____

3) $4 \div \frac{1}{2} =$

6. _____

1 Whole	1 Whole	1 Whole	1 Whole
<input type="checkbox"/>	<input type="checkbox"/>	<input type="checkbox"/>	<input type="checkbox"/>

7. _____

4) $2 \div \frac{1}{5} =$

8. _____

1 Whole	1 Whole
<input type="checkbox"/>	<input type="checkbox"/>

9. _____

5) $5 \div \frac{1}{5} =$

1 Whole	1 Whole	1 Whole	1 Whole	1 Whole
<input type="checkbox"/>	<input type="checkbox"/>	<input type="checkbox"/>	<input type="checkbox"/>	<input type="checkbox"/>

6) $3 \div \frac{1}{5} =$

1 Whole	1 Whole	1 Whole
<input type="checkbox"/>	<input type="checkbox"/>	<input type="checkbox"/>

7) $2 \div \frac{1}{7} =$

1 Whole	1 Whole
<input type="checkbox"/>	<input type="checkbox"/>

8) $6 \div \frac{1}{7} =$

1 Whole	1 Whole	1 Whole	1 Whole	1 Whole	1 Whole
<input type="checkbox"/>	<input type="checkbox"/>	<input type="checkbox"/>	<input type="checkbox"/>	<input type="checkbox"/>	<input type="checkbox"/>


9) $6 \div \frac{1}{3} =$

1 Whole	1 Whole	1 Whole	1 Whole	1 Whole	1 Whole
<input type="checkbox"/>	<input type="checkbox"/>	<input type="checkbox"/>	<input type="checkbox"/>	<input type="checkbox"/>	<input type="checkbox"/>

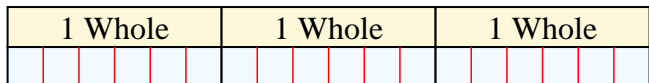


Solve each problem by marking off the fractions. The first is completed for you.

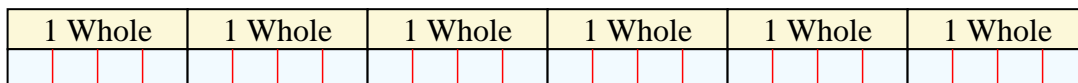
Ex) $6 \div \frac{1}{6} = ?$ This is the same as saying: How many $\frac{1}{6}$ are the in 6 wholes?




1) $3 \div \frac{1}{6} =$ This is the same as saying: How many $\frac{1}{6}$ are the in 3 wholes?



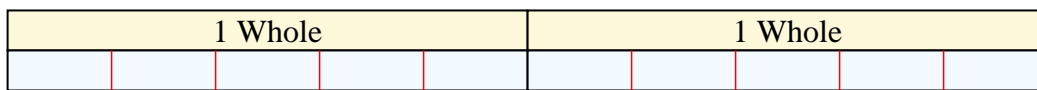
2) $6 \div \frac{1}{4} =$ This is the same as saying: How many $\frac{1}{4}$ are the in 6 wholes?



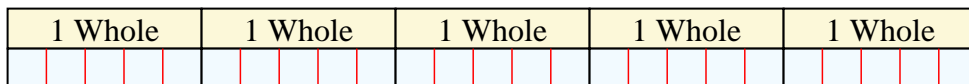
3) $4 \div \frac{1}{2} =$ This is the same as saying: How many $\frac{1}{2}$ are the in 4 wholes?



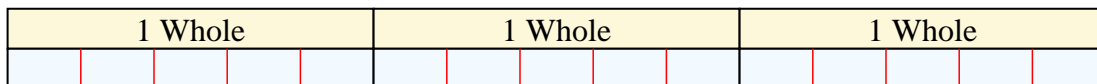
4) $2 \div \frac{1}{5} =$ This is the same as saying: How many $\frac{1}{5}$ are the in 2 wholes?



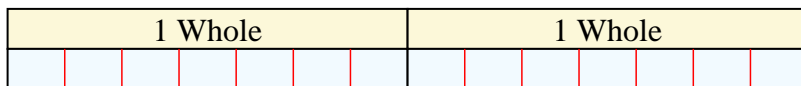
5) $5 \div \frac{1}{5} =$ This is the same as saying: How many $\frac{1}{5}$ are the in 5 wholes?



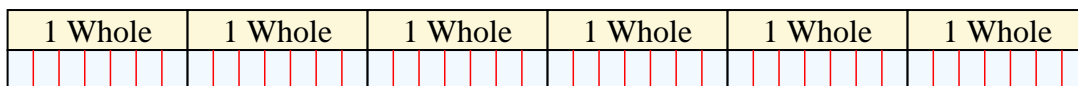
6) $3 \div \frac{1}{5} =$ This is the same as saying: How many $\frac{1}{5}$ are the in 3 wholes?



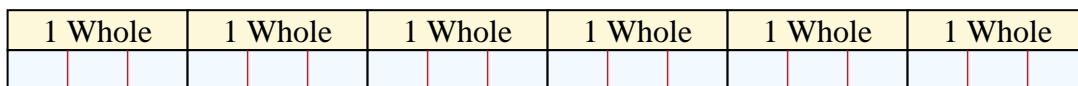
7) $2 \div \frac{1}{7} =$ This is the same as saying: How many $\frac{1}{7}$ are the in 2 wholes?



8) $6 \div \frac{1}{7} =$ This is the same as saying: How many $\frac{1}{7}$ are the in 6 wholes?



9) $6 \div \frac{1}{3} =$ This is the same as saying: How many $\frac{1}{3}$ are the in 6 wholes?



Answers

Ex. 36

1. 18

2. 24

3. 8

4. 10

5. 25

6. 15

7. 14

8. 42

9. 18



Solve each problem by marking off the fractions. The first is completed for you.

Answers

Ex) $3 \div \frac{1}{4} = ?$ This is the same as saying: How many $\frac{1}{4}$ are there in 3 wholes?

Ex. **12**

1 Whole				1 Whole				1 Whole			

1. _____

1) $5 \div \frac{1}{6} =$

2. _____

1 Whole		1 Whole		1 Whole		1 Whole		1 Whole	

3. _____

2) $5 \div \frac{1}{2} =$

4. _____

1 Whole		1 Whole		1 Whole		1 Whole		1 Whole	

5. _____

3) $5 \div \frac{1}{5} =$

6. _____

1 Whole		1 Whole		1 Whole		1 Whole		1 Whole	

7. _____

4) $3 \div \frac{1}{2} =$

8. _____

1 Whole			1 Whole			1 Whole		

9. _____

5) $2 \div \frac{1}{2} =$

1 Whole		1 Whole	

6) $6 \div \frac{1}{7} =$

1 Whole	1 Whole	1 Whole	1 Whole	1 Whole	1 Whole

7) $4 \div \frac{1}{4} =$

1 Whole		1 Whole		1 Whole		1 Whole	

8) $6 \div \frac{1}{6} =$

1 Whole	1 Whole	1 Whole	1 Whole	1 Whole	1 Whole

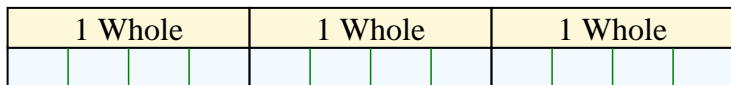
9) $3 \div \frac{1}{3} =$

1 Whole		1 Whole		1 Whole	

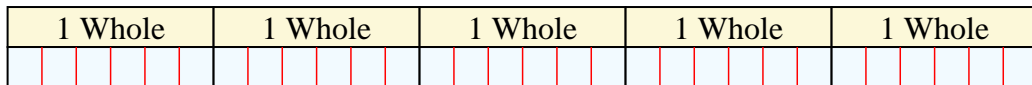


Solve each problem by marking off the fractions. The first is completed for you.

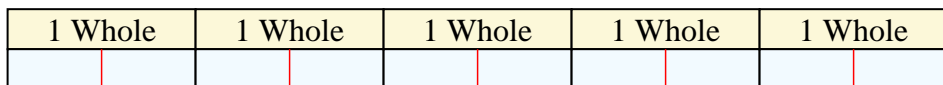
Ex) $3 \div \frac{1}{4} = ?$ This is the same as saying: How many $\frac{1}{4}$ are the in 3 wholes?



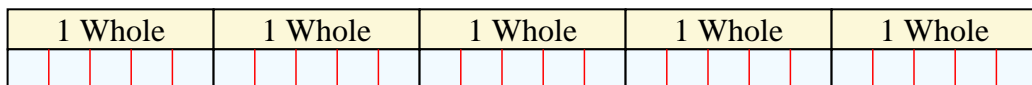
1) $5 \div \frac{1}{6} =$ This is the same as saying: How many $\frac{1}{6}$ are the in 5 wholes?



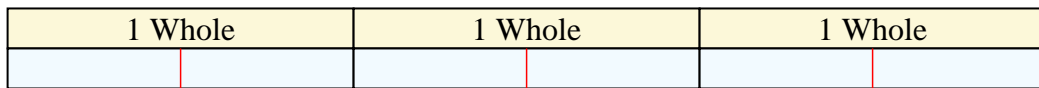
2) $5 \div \frac{1}{2} =$ This is the same as saying: How many $\frac{1}{2}$ are the in 5 wholes?




3) $5 \div \frac{1}{5} =$ This is the same as saying: How many $\frac{1}{5}$ are the in 5 wholes?



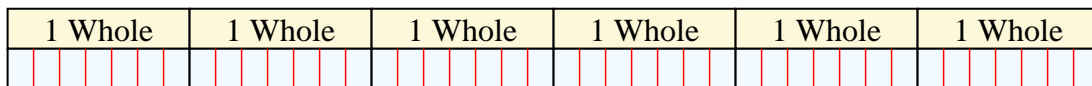
4) $3 \div \frac{1}{2} =$ This is the same as saying: How many $\frac{1}{2}$ are the in 3 wholes?



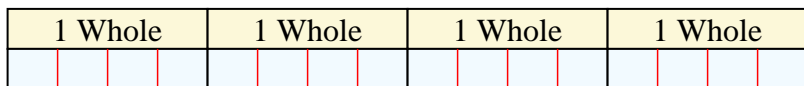
5) $2 \div \frac{1}{2} =$ This is the same as saying: How many $\frac{1}{2}$ are the in 2 wholes?



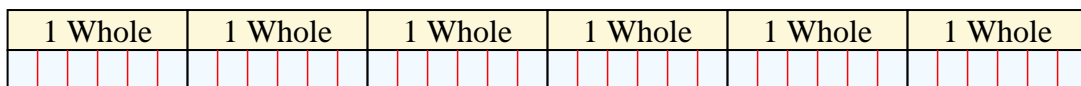
6) $6 \div \frac{1}{7} =$ This is the same as saying: How many $\frac{1}{7}$ are the in 6 wholes?



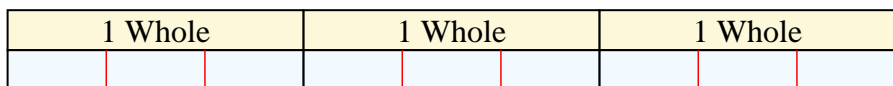
7) $4 \div \frac{1}{4} =$ This is the same as saying: How many $\frac{1}{4}$ are the in 4 wholes?



8) $6 \div \frac{1}{6} =$ This is the same as saying: How many $\frac{1}{6}$ are the in 6 wholes?



9) $3 \div \frac{1}{3} =$ This is the same as saying: How many $\frac{1}{3}$ are the in 3 wholes?



Answers

Ex. 12

1. 30

2. 10

3. 25

4. 6

5. 4

6. 42

7. 16

8. 36

9. 9



Solve each problem by marking off the fractions. The first is completed for you.

Answers

Ex) $4 \div \frac{1}{4} = ?$ This is the same as saying: How many $\frac{1}{4}$ are there in 4 wholes?

Ex. **16**

1 Whole				1 Whole				1 Whole				1 Whole			

1. _____

1) $3 \div \frac{1}{4} =$

2. _____

1 Whole				1 Whole				1 Whole			

3. _____

2) $4 \div \frac{1}{7} =$

4. _____

1 Whole		1 Whole		1 Whole		1 Whole	

5. _____

3) $6 \div \frac{1}{7} =$

6. _____

1 Whole		1 Whole		1 Whole		1 Whole		1 Whole		1 Whole	

7. _____

4) $5 \div \frac{1}{7} =$

8. _____

1 Whole		1 Whole		1 Whole		1 Whole		1 Whole	

9. _____

5) $5 \div \frac{1}{2} =$

1 Whole		1 Whole		1 Whole		1 Whole		1 Whole	

6) $3 \div \frac{1}{3} =$

1 Whole		1 Whole		1 Whole	

7) $3 \div \frac{1}{7} =$

1 Whole			1 Whole			1 Whole		

8) $5 \div \frac{1}{5} =$

1 Whole		1 Whole		1 Whole		1 Whole		1 Whole	

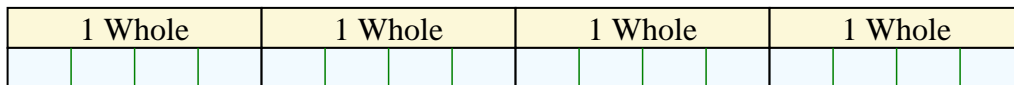
9) $4 \div \frac{1}{6} =$

1 Whole			1 Whole			1 Whole			1 Whole		

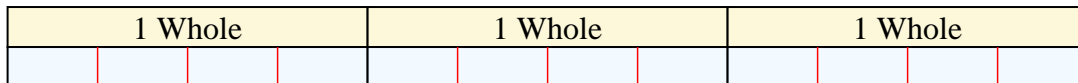


Solve each problem by marking off the fractions. The first is completed for you.


Ex) $4 \div \frac{1}{4} = ?$ This is the same as saying: How many $\frac{1}{4}$ are the in 4 wholes?



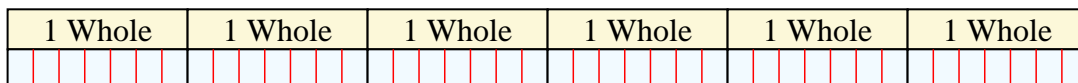
1) $3 \div \frac{1}{4} =$ This is the same as saying: How many $\frac{1}{4}$ are the in 3 wholes?



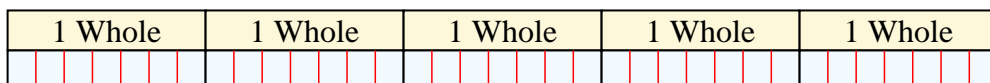
2) $4 \div \frac{1}{7} =$ This is the same as saying: How many $\frac{1}{7}$ are the in 4 wholes?



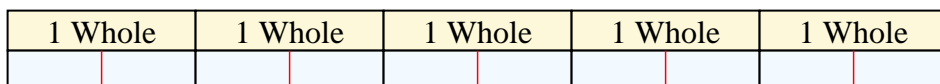
3) $6 \div \frac{1}{7} =$ This is the same as saying: How many $\frac{1}{7}$ are the in 6 wholes?



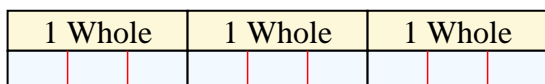
4) $5 \div \frac{1}{7} =$ This is the same as saying: How many $\frac{1}{7}$ are the in 5 wholes?



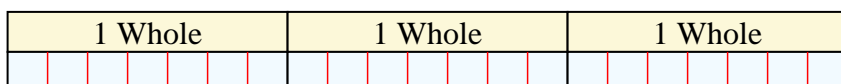
5) $5 \div \frac{1}{2} =$ This is the same as saying: How many $\frac{1}{2}$ are the in 5 wholes?



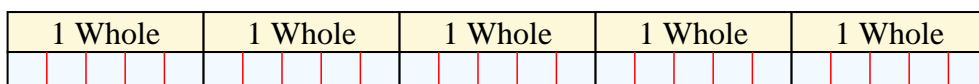
6) $3 \div \frac{1}{3} =$ This is the same as saying: How many $\frac{1}{3}$ are the in 3 wholes?




7) $3 \div \frac{1}{7} =$ This is the same as saying: How many $\frac{1}{7}$ are the in 3 wholes?



8) $5 \div \frac{1}{5} =$ This is the same as saying: How many $\frac{1}{5}$ are the in 5 wholes?



9) $4 \div \frac{1}{6} =$ This is the same as saying: How many $\frac{1}{6}$ are the in 4 wholes?



Answers

Ex. 16

1. 12

2. 28

3. 42

4. 35

5. 10

6. 9

7. 21

8. 25

9. 24



Solve each problem by marking off the fractions. The first is completed for you.

Answers

Ex) $3 \div \frac{1}{5} = ?$ This is the same as saying: How many $\frac{1}{5}$ are there in 3 wholes?

Ex. **15**

1 Whole					1 Whole					1 Whole				

1. _____

1) $5 \div \frac{1}{5} =$

2. _____

1 Whole			1 Whole			1 Whole			1 Whole			1 Whole		

3. _____

2) $2 \div \frac{1}{3} =$

4. _____

1 Whole					1 Whole				

5. _____

3) $4 \div \frac{1}{7} =$

6. _____

1 Whole			1 Whole			1 Whole			1 Whole		

7. _____

4) $5 \div \frac{1}{6} =$

8. _____

1 Whole			1 Whole			1 Whole			1 Whole			1 Whole		

9. _____

5) $2 \div \frac{1}{7} =$

1 Whole					1 Whole				

6) $4 \div \frac{1}{4} =$

1 Whole			1 Whole			1 Whole			1 Whole		

7) $3 \div \frac{1}{6} =$

1 Whole			1 Whole			1 Whole		

8) $3 \div \frac{1}{4} =$

1 Whole			1 Whole			1 Whole		

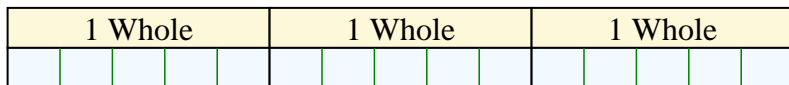
9) $5 \div \frac{1}{3} =$

1 Whole			1 Whole			1 Whole			1 Whole			1 Whole		

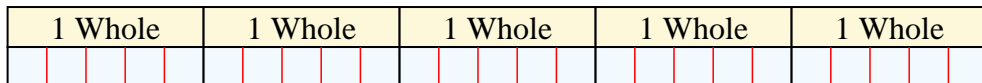


Solve each problem by marking off the fractions. The first is completed for you.


Ex) $3 \div \frac{1}{5} = ?$ This is the same as saying: How many $\frac{1}{5}$ are the in 3 wholes?




1) $5 \div \frac{1}{5} =$ This is the same as saying: How many $\frac{1}{5}$ are the in 5 wholes?



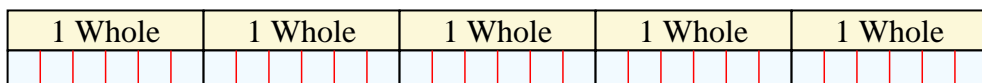
2) $2 \div \frac{1}{3} =$ This is the same as saying: How many $\frac{1}{3}$ are the in 2 wholes?




3) $4 \div \frac{1}{7} =$ This is the same as saying: How many $\frac{1}{7}$ are the in 4 wholes?



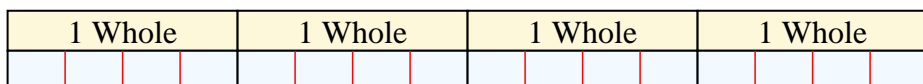
4) $5 \div \frac{1}{6} =$ This is the same as saying: How many $\frac{1}{6}$ are the in 5 wholes?



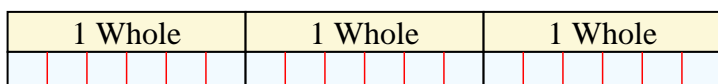
5) $2 \div \frac{1}{7} =$ This is the same as saying: How many $\frac{1}{7}$ are the in 2 wholes?



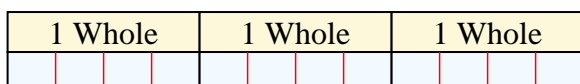
6) $4 \div \frac{1}{4} =$ This is the same as saying: How many $\frac{1}{4}$ are the in 4 wholes?



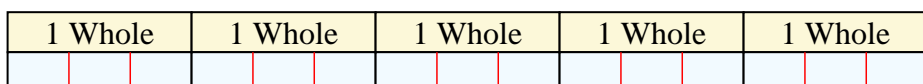
7) $3 \div \frac{1}{6} =$ This is the same as saying: How many $\frac{1}{6}$ are the in 3 wholes?



8) $3 \div \frac{1}{4} =$ This is the same as saying: How many $\frac{1}{4}$ are the in 3 wholes?



9) $5 \div \frac{1}{3} =$ This is the same as saying: How many $\frac{1}{3}$ are the in 5 wholes?



Answers

Ex. 15

1. 25

2. 6

3. 28

4. 30

5. 14

6. 16

7. 18

8. 12

9. 15



Solve each problem by marking off the fractions. The first is completed for you.

Answers

Ex) $2 \div \frac{1}{6} = ?$ This is the same as saying: How many $\frac{1}{6}$ are there in 2 wholes?

Ex. **12**

1 Whole						1 Whole					

1. _____

1) $5 \div \frac{1}{3} =$

2. _____

1 Whole	1 Whole	1 Whole	1 Whole	1 Whole

3. _____

2) $5 \div \frac{1}{5} =$

4. _____

1 Whole	1 Whole	1 Whole	1 Whole	1 Whole

5. _____

3) $3 \div \frac{1}{5} =$

6. _____

1 Whole	1 Whole	1 Whole

7. _____

4) $4 \div \frac{1}{7} =$

8. _____

1 Whole	1 Whole	1 Whole	1 Whole

9. _____

5) $2 \div \frac{1}{7} =$

1 Whole	1 Whole

6) $5 \div \frac{1}{4} =$

1 Whole	1 Whole	1 Whole	1 Whole	1 Whole

7) $4 \div \frac{1}{3} =$

1 Whole	1 Whole	1 Whole	1 Whole

8) $4 \div \frac{1}{4} =$


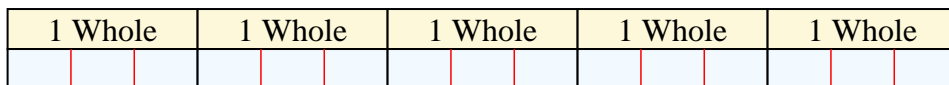
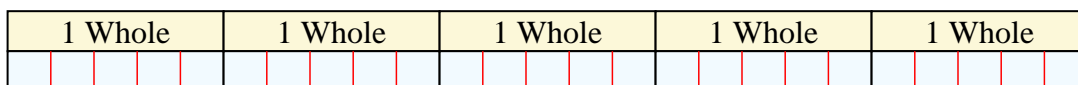
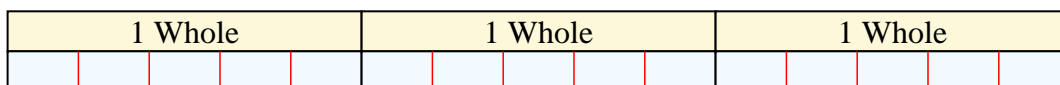
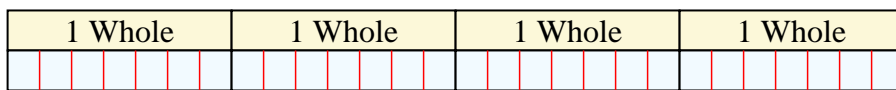
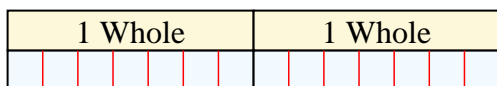
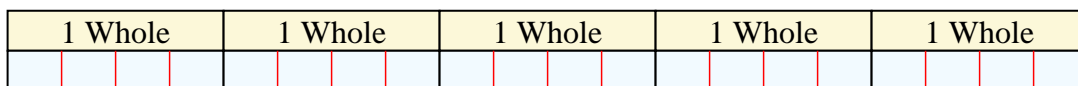
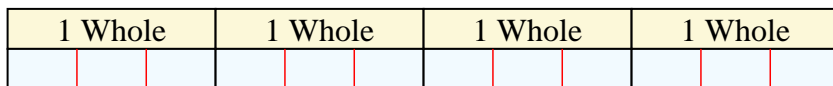

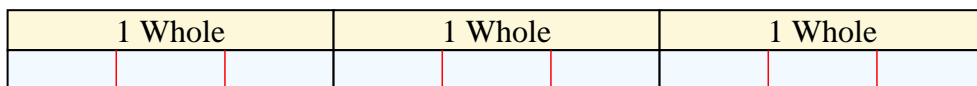
1 Whole	1 Whole	1 Whole	1 Whole

9) $3 \div \frac{1}{3} =$

1 Whole	1 Whole	1 Whole



Solve each problem by marking off the fractions. The first is completed for you.

Ex) $2 \div \frac{1}{6} = ?$ This is the same as saying: How many $\frac{1}{6}$ are the in 2 wholes?1) $5 \div \frac{1}{3} =$ This is the same as saying: How many $\frac{1}{3}$ are the in 5 wholes?2) $5 \div \frac{1}{5} =$ This is the same as saying: How many $\frac{1}{5}$ are the in 5 wholes?3) $3 \div \frac{1}{5} =$ This is the same as saying: How many $\frac{1}{5}$ are the in 3 wholes?4) $4 \div \frac{1}{7} =$ This is the same as saying: How many $\frac{1}{7}$ are the in 4 wholes?5) $2 \div \frac{1}{7} =$ This is the same as saying: How many $\frac{1}{7}$ are the in 2 wholes?6) $5 \div \frac{1}{4} =$ This is the same as saying: How many $\frac{1}{4}$ are the in 5 wholes?7) $4 \div \frac{1}{3} =$ This is the same as saying: How many $\frac{1}{3}$ are the in 4 wholes?8) $4 \div \frac{1}{4} =$ This is the same as saying: How many $\frac{1}{4}$ are the in 4 wholes?9) $3 \div \frac{1}{3} =$ This is the same as saying: How many $\frac{1}{3}$ are the in 3 wholes?**Answers**Ex. 121. 152. 253. 154. 285. 146. 207. 128. 169. 9