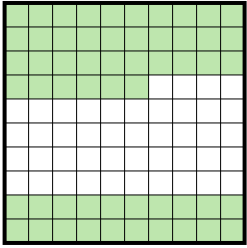




Determine the value written as a fraction , decimal & a percent.

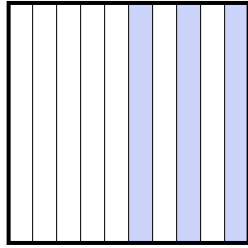
Answers

Ex)



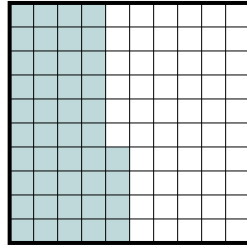
fraction $\frac{56}{100}$
 decimal 0.56
 percent 56

1)



fraction _____
 decimal _____
 percent _____

2)



fraction _____
 decimal _____
 percent _____

Ex. $\frac{56}{100}$ **0.56** **56%**

1. _____

2. _____

3. _____

4. _____

5. _____

6. _____

7. _____

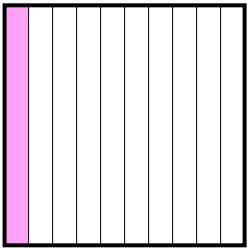
8. _____

9. _____

10. _____

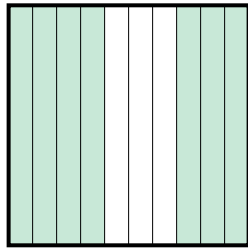
11. _____

3)



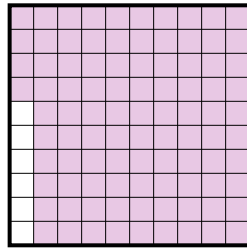
fraction _____
 decimal _____
 percent _____

4)




fraction _____
 decimal _____
 percent _____

5)



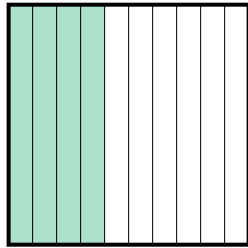
fraction _____
 decimal _____
 percent _____

6)



fraction _____
 decimal _____
 percent _____

7)



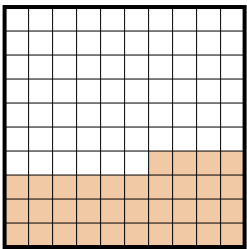
fraction _____
 decimal _____
 percent _____

8)



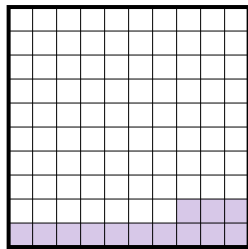
fraction _____
 decimal _____
 percent _____

9)



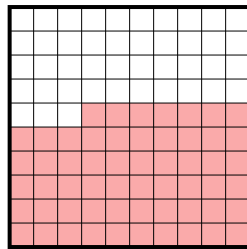
fraction _____
 decimal _____
 percent _____

10)



fraction _____
 decimal _____
 percent _____

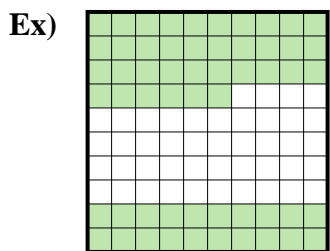
11)



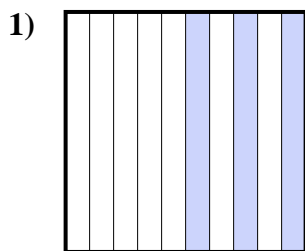
fraction _____
 decimal _____
 percent _____



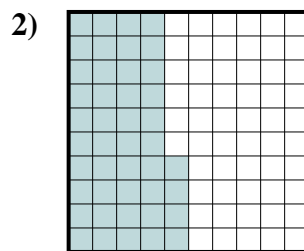
Determine the value written as a fraction , decimal & a percent.



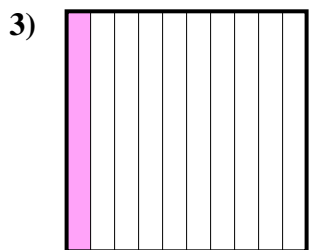
fraction $\frac{56}{100}$
 decimal 0.56
 percent 56



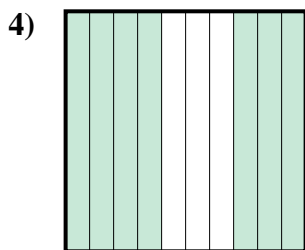
fraction $\frac{3}{10}$
 decimal 0.3
 percent 30



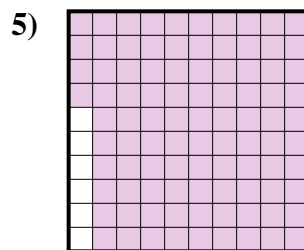
fraction $\frac{44}{100}$
 decimal 0.44
 percent 44



fraction $\frac{1}{10}$
 decimal 0.1
 percent 10



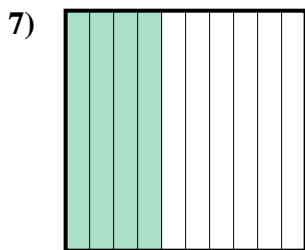
fraction $\frac{7}{10}$
 decimal 0.7
 percent 70



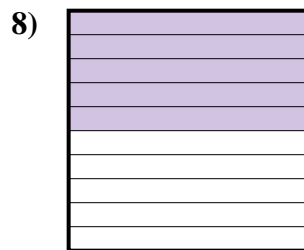
fraction $\frac{94}{100}$
 decimal 0.94
 percent 94



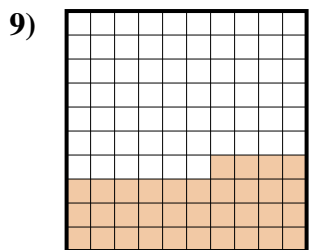
fraction $\frac{2}{10}$
 decimal 0.2
 percent 20



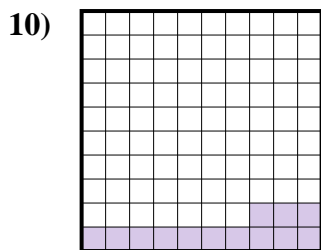
fraction $\frac{4}{10}$
 decimal 0.4
 percent 40



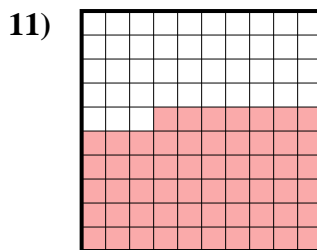
fraction $\frac{5}{10}$
 decimal 0.5
 percent 50



fraction $\frac{34}{100}$
 decimal 0.34
 percent 34



fraction $\frac{13}{100}$
 decimal 0.13
 percent 13



fraction $\frac{57}{100}$
 decimal 0.57
 percent 57

Answers

Ex.	$\frac{56}{100}$	0.56	56%
1.	$\frac{3}{10}$	0.3	30%
2.	$\frac{44}{100}$	0.44	44%
3.	$\frac{1}{10}$	0.1	10%
4.	$\frac{7}{10}$	0.7	70%
5.	$\frac{94}{100}$	0.94	94%
6.	$\frac{2}{10}$	0.2	20%
7.	$\frac{4}{10}$	0.4	40%
8.	$\frac{5}{10}$	0.5	50%
9.	$\frac{34}{100}$	0.34	34%
10.	$\frac{13}{100}$	0.13	13%
11.	$\frac{57}{100}$	0.57	57%